



Shade the region shown.

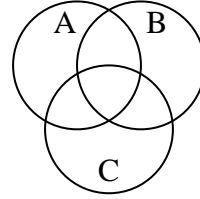
1)  $C \cap B$



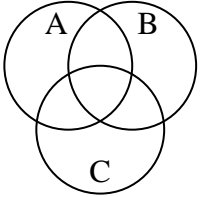
2)  $C \cup A \cup B$



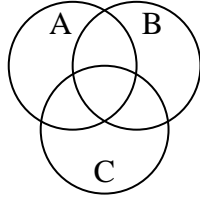
3)  $B \cap (C - A)$



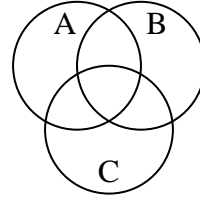
4)  $A - (B \cup C)$



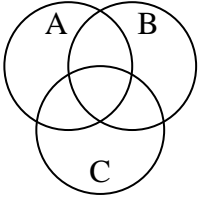
5)  $A \cup (C - B)$



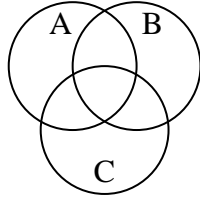
6)  $B \cup (A - C)$



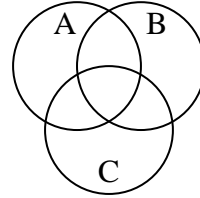
7)  $A - (B \cap C)$



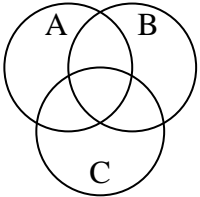
8)  $C \cup (B - A)$



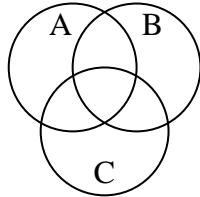
9)  $A \cup (B - C)$



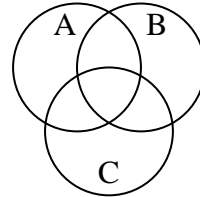
10)  $B \cap (A - C)$



11)  $B - (C \cap A)$



12)  $C \cap B \cap A$



Answers

1. \_\_\_\_\_

2. \_\_\_\_\_

3. \_\_\_\_\_

4. \_\_\_\_\_

5. \_\_\_\_\_

6. \_\_\_\_\_

7. \_\_\_\_\_

8. \_\_\_\_\_

9. \_\_\_\_\_

10. \_\_\_\_\_

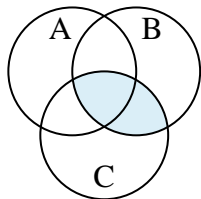
11. \_\_\_\_\_

12. \_\_\_\_\_

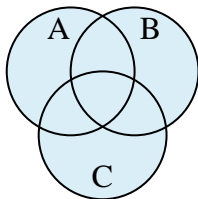


Shade the region shown.

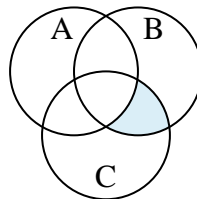
1)  $C \cap B$



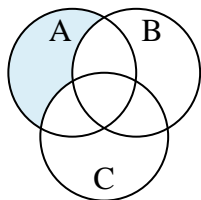
2)  $C \cup A \cup B$



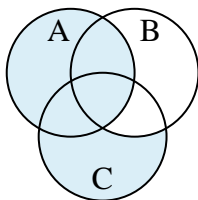
3)  $B \cap (C - A)$



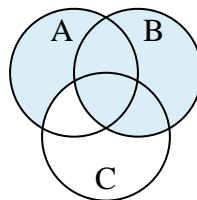
4)  $A - (B \cup C)$



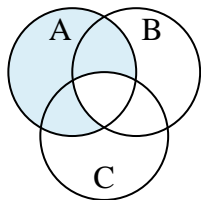
5)  $A \cup (C - B)$



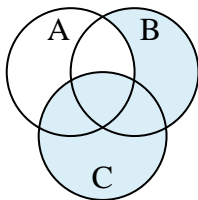
6)  $B \cup (A - C)$



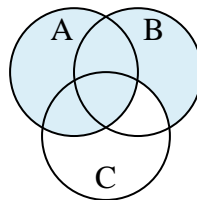
7)  $A - (B \cap C)$



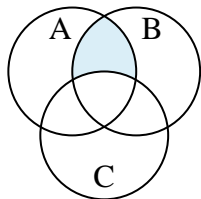
8)  $C \cup (B - A)$



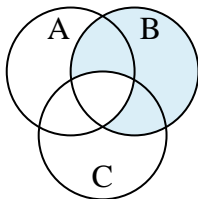
9)  $A \cup (B - C)$



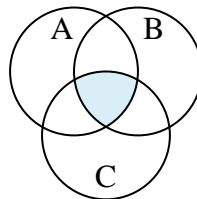
10)  $B \cap (A - C)$



11)  $B - (C \cap A)$



12)  $C \cap B \cap A$



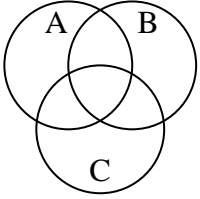
Answers

1.  $C \cap B$
2.  $C \cup A \cup B$
3.  $B \cap (C - A)$
4.  $A - (B \cup C)$
5.  $A \cup (C - B)$
6.  $B \cup (A - C)$
7.  $A - (B \cap C)$
8.  $C \cup (B - A)$
9.  $A \cup (B - C)$
10.  $B \cap (A - C)$
11.  $B - (C \cap A)$
12.  $C \cap B \cap A$

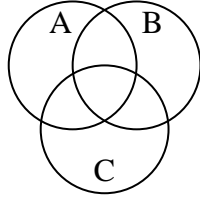


Shade the region shown.

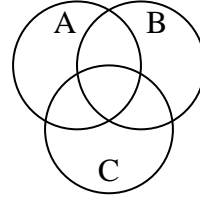
1)  $A - (B \cap C)$



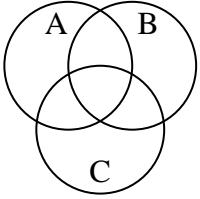
2)  $A \cup C$



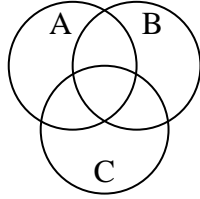
3)  $C - (B \cap A)$



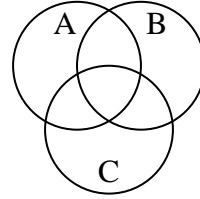
4)  $(C \cap B) - A$



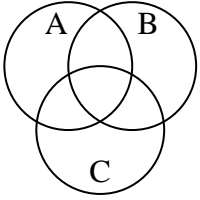
5)  $(A \cup C) - B$



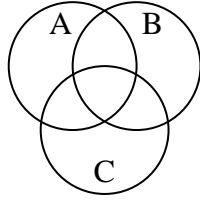
6)  $B \cup C$



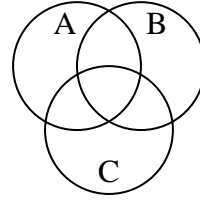
7)  $C \cup (B - A)$



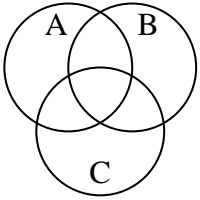
8)  $A \cup (C - B)$



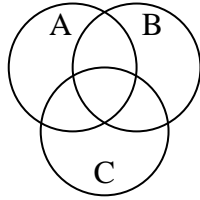
9)  $B \cap C$



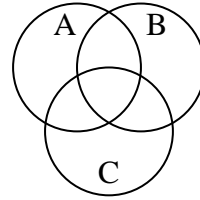
10)  $A \cup B \cup C$



11)  $(B \cup C) - A$



12)  $B \cup (C - A)$



Answers

1. \_\_\_\_\_

2. \_\_\_\_\_

3. \_\_\_\_\_

4. \_\_\_\_\_

5. \_\_\_\_\_

6. \_\_\_\_\_

7. \_\_\_\_\_

8. \_\_\_\_\_

9. \_\_\_\_\_

10. \_\_\_\_\_

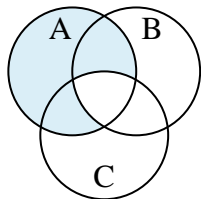
11. \_\_\_\_\_

12. \_\_\_\_\_

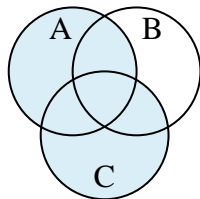


Shade the region shown.

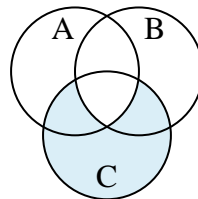
1)  $A - (B \cap C)$



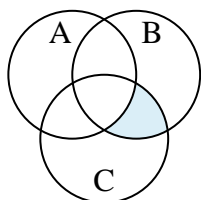
2)  $A \cup C$



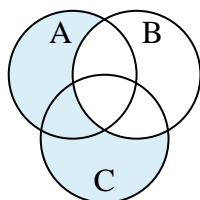
3)  $C - (B \cap A)$



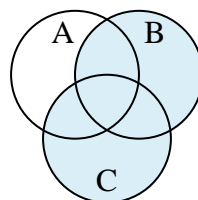
4)  $(C \cap B) - A$



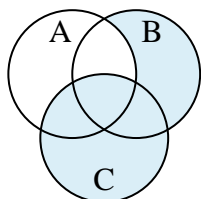
5)  $(A \cup C) - B$



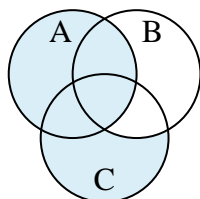
6)  $B \cup C$



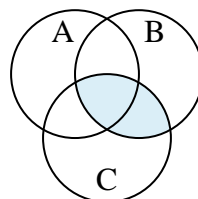
7)  $C \cup (B - A)$



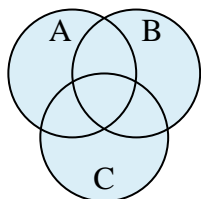
8)  $A \cup (C - B)$



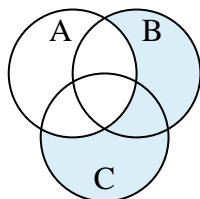
9)  $B \cap C$



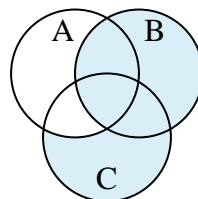
10)  $A \cup B \cup C$



11)  $(B \cup C) - A$



12)  $B \cup (C - A)$



**Answers**

1.  $A - (B \cap C)$

2.  $A \cup C$

3.  $C - (B \cap A)$

4.  $(C \cap B) - A$

5.  $(A \cup C) - B$

6.  $B \cup C$

7.  $C \cup (B - A)$

8.  $A \cup (C - B)$

9.  $B \cap C$

10.  $A \cup B \cup C$

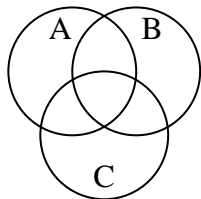
11.  $(B \cup C) - A$

12.  $B \cup (C - A)$

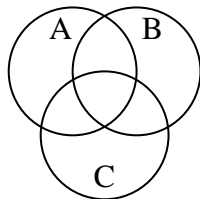


Shade the region shown.

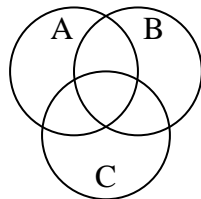
1)  $C \cap B$



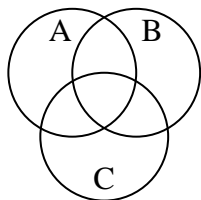
2)  $B \cup (A - C)$



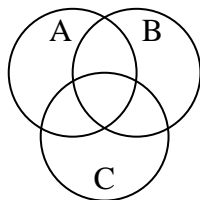
3)  $(C \cup A) - B$



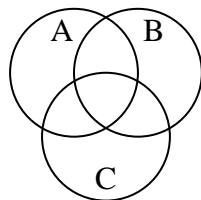
4)  $(C \cup B) \cap A$



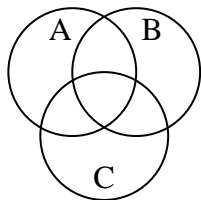
5)  $B \cup (C - A)$



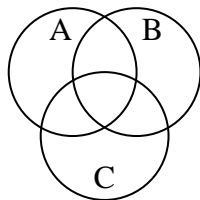
6)  $(B \cup C) - A$



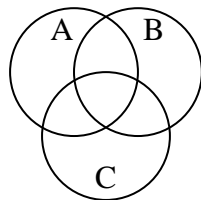
7)  $B - (A \cap C)$



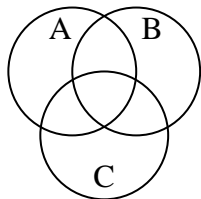
8)  $A \cup (C - B)$



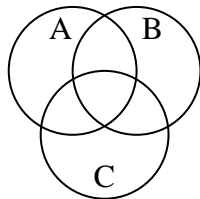
9)  $A - (C \cup B)$



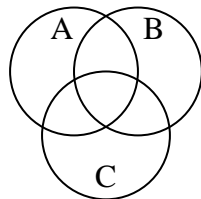
10)  $C - (A \cap B)$



11)  $C$



12)  $C - (B \cup A)$



Answers

1. \_\_\_\_\_

2. \_\_\_\_\_

3. \_\_\_\_\_

4. \_\_\_\_\_

5. \_\_\_\_\_

6. \_\_\_\_\_

7. \_\_\_\_\_

8. \_\_\_\_\_

9. \_\_\_\_\_

10. \_\_\_\_\_

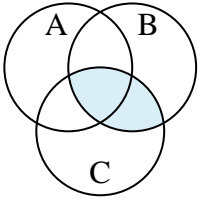
11. \_\_\_\_\_

12. \_\_\_\_\_

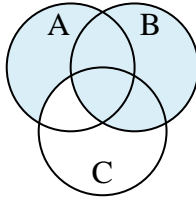


Shade the region shown.

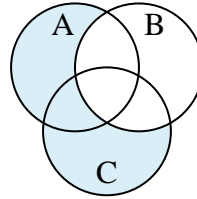
1)  $C \cap B$



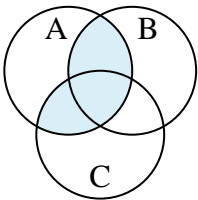
2)  $B \cup (A - C)$



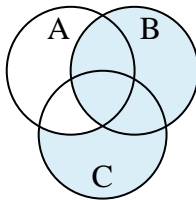
3)  $(C \cup A) - B$



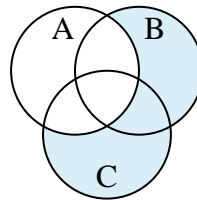
4)  $(C \cup B) \cap A$



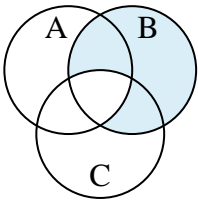
5)  $B \cup (C - A)$



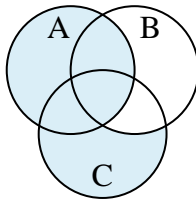
6)  $(B \cup C) - A$



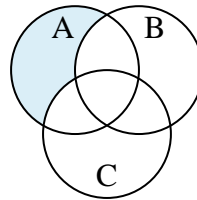
7)  $B - (A \cap C)$



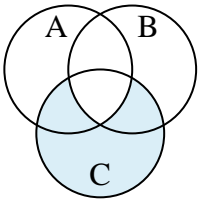
8)  $A \cup (C - B)$



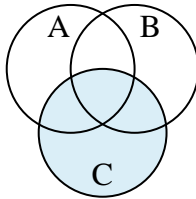
9)  $A - (C \cup B)$



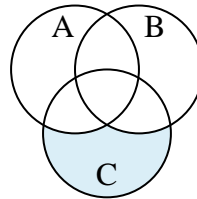
10)  $C - (A \cap B)$



11)  $C$



12)  $C - (B \cup A)$

**Answers**

1.  $C \cap B$

2.  $B \cup (A - C)$

3.  $(C \cup A) - B$

4.  $(C \cup B) \cap A$

5.  $B \cup (C - A)$

6.  $(B \cup C) - A$

7.  $B - (A \cap C)$

8.  $A \cup (C - B)$

9.  $A - (C \cup B)$

10.  $C - (A \cap B)$

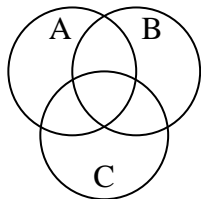
11.  $C$

12.  $C - (B \cup A)$

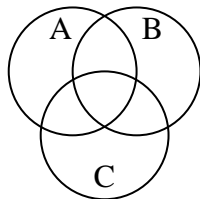


Shade the region shown.

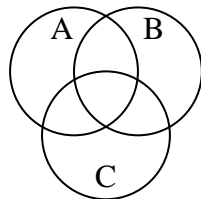
1)  $C \cup A$



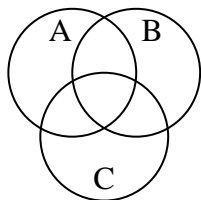
2)  $(C \cup B) \cap A$



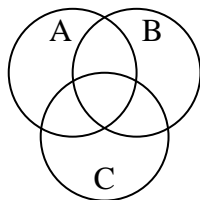
3)  $(A \cup B) \cap C$



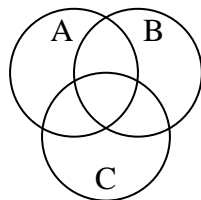
4)  $(A \cup B) - C$



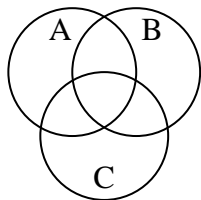
5)  $C \cup (B - A)$



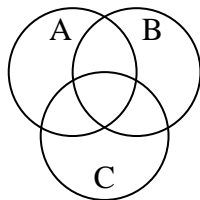
6)  $B - (A \cap C)$



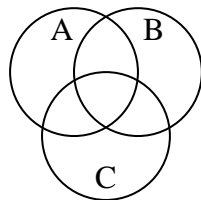
7)  $A \cup (B - C)$



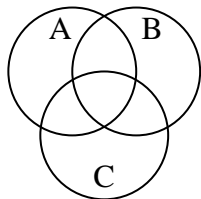
8)  $(A \cup C) \cap B$



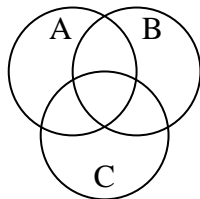
9)  $B - (C \cup A)$



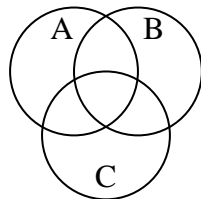
10)  $(C \cup B) - A$



11)  $B \cap (A - C)$



12)  $A - (C \cup B)$



Answers

1. \_\_\_\_\_

2. \_\_\_\_\_

3. \_\_\_\_\_

4. \_\_\_\_\_

5. \_\_\_\_\_

6. \_\_\_\_\_

7. \_\_\_\_\_

8. \_\_\_\_\_

9. \_\_\_\_\_

10. \_\_\_\_\_

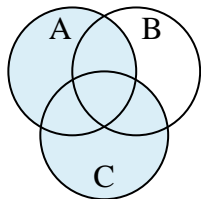
11. \_\_\_\_\_

12. \_\_\_\_\_

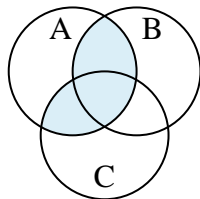


Shade the region shown.

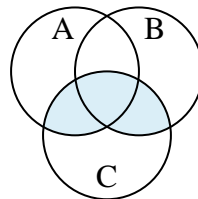
1)  $C \cup A$



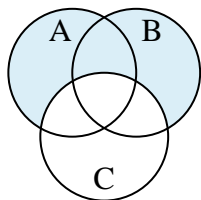
2)  $(C \cup B) \cap A$



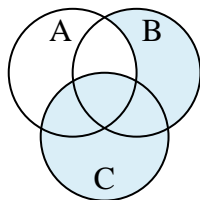
3)  $(A \cup B) \cap C$



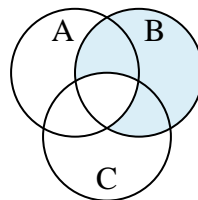
4)  $(A \cup B) - C$



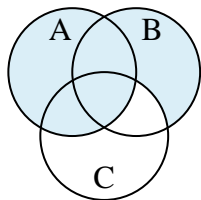
5)  $C \cup (B - A)$



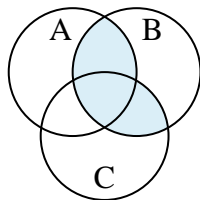
6)  $B - (A \cap C)$



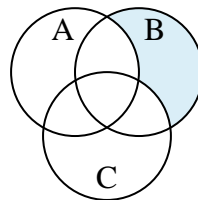
7)  $A \cup (B - C)$



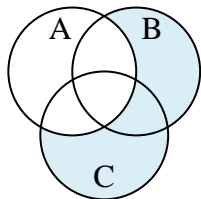
8)  $(A \cup C) \cap B$



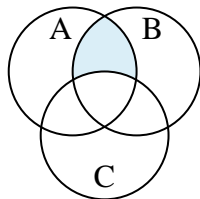
9)  $B - (C \cup A)$



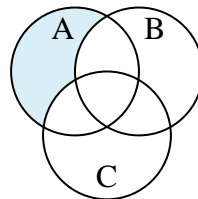
10)  $(C \cup B) - A$



11)  $B \cap (A - C)$



12)  $A - (C \cup B)$

**Answers**

1.  $C \cup A$

2.  $(C \cup B) \cap A$

3.  $(A \cup B) \cap C$

4.  $(A \cup B) - C$

5.  $C \cup (B - A)$

6.  $B - (A \cap C)$

7.  $A \cup (B - C)$

8.  $(A \cup C) \cap B$

9.  $B - (C \cup A)$

10.  $(C \cup B) - A$

11.  $B \cap (A - C)$

12.  $A - (C \cup B)$





Shade the region shown.

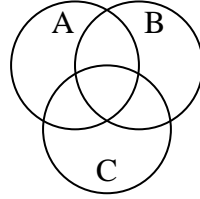
1)  $B \cup (C - A)$



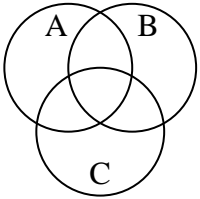
2)  $(C \cup A) - B$



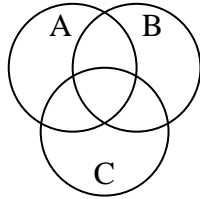
3)  $C \cup (A - B)$



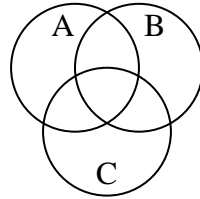
4)  $A \cup B$



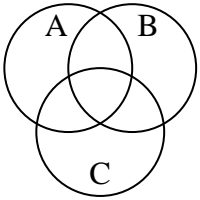
5)  $A - (B \cup C)$



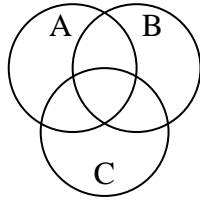
6)  $(A \cup B) - C$



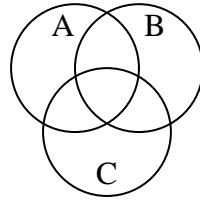
7)  $A \cap B$



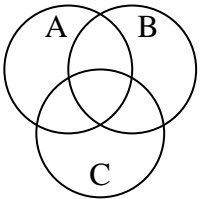
8)  $C \cap A$



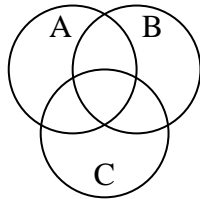
9)  $C \cap B$



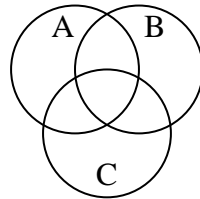
10)  $A \cup (B - C)$



11)  $A \cup C \cup B$



12)  $(B \cap A) - C$



Answers

1. \_\_\_\_\_

2. \_\_\_\_\_

3. \_\_\_\_\_

4. \_\_\_\_\_

5. \_\_\_\_\_

6. \_\_\_\_\_

7. \_\_\_\_\_

8. \_\_\_\_\_

9. \_\_\_\_\_

10. \_\_\_\_\_

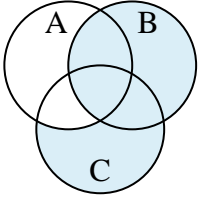
11. \_\_\_\_\_

12. \_\_\_\_\_

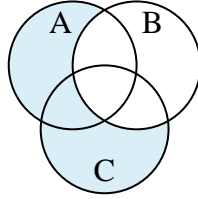


Shade the region shown.

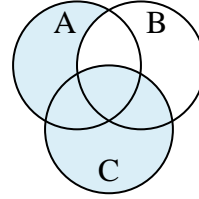
1)  $B \cup (C - A)$



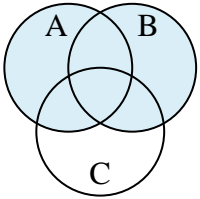
2)  $(C \cup A) - B$



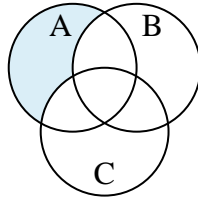
3)  $C \cup (A - B)$



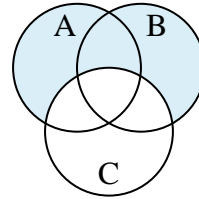
4)  $A \cup B$



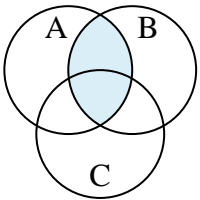
5)  $A - (B \cup C)$



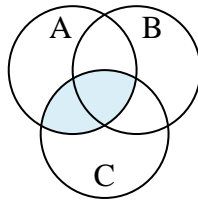
6)  $(A \cup B) - C$



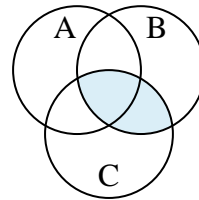
7)  $A \cap B$



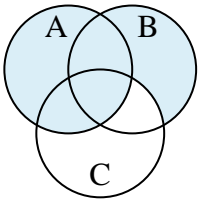
8)  $C \cap A$



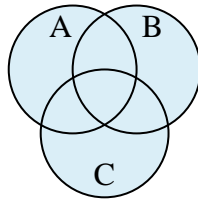
9)  $C \cap B$



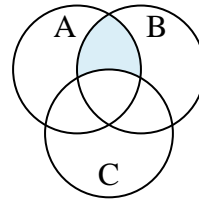
10)  $A \cup (B - C)$



11)  $A \cup C \cup B$



12)  $(B \cap A) - C$

**Answers**

1.  $B \cup (C - A)$

2.  $(C \cup A) - B$

3.  $C \cup (A - B)$

4.  $A \cup B$

5.  $A - (B \cup C)$

6.  $(A \cup B) - C$

7.  $A \cap B$

8.  $C \cap A$

9.  $C \cap B$

10.  $A \cup (B - C)$

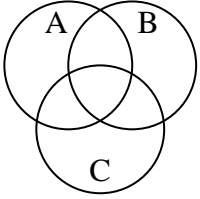
11.  $A \cup C \cup B$

12.  $(B \cap A) - C$

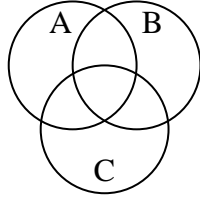


Shade the region shown.

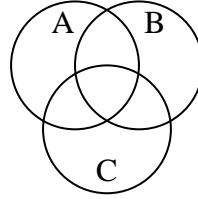
1)  $(A \cap B) - C$



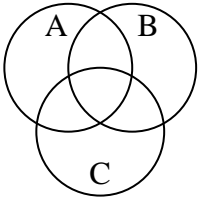
2)  $C \cup (B - A)$



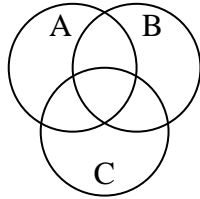
3)  $A \cap C$



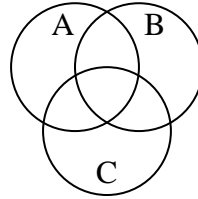
4)  $A \cap C \cap B$



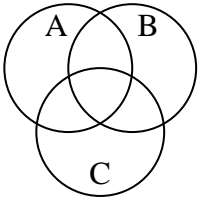
5)  $A - (C \cup B)$



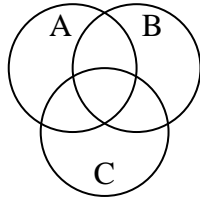
6)  $A$



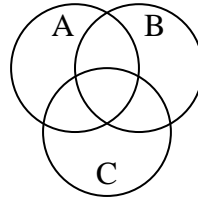
7)  $B \cap A$



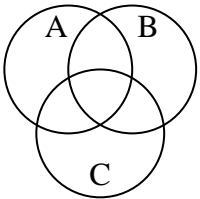
8)  $B - (C \cup A)$



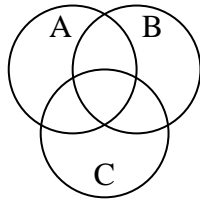
9)  $B \cup (A - C)$



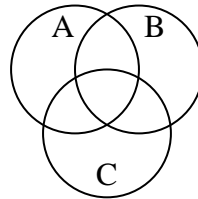
10)  $(B \cap C) - A$



11)  $C \cup A$



12)  $C \cap B$



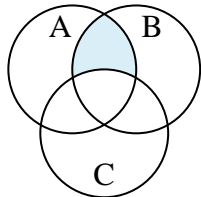
Answers

1. \_\_\_\_\_
2. \_\_\_\_\_
3. \_\_\_\_\_
4. \_\_\_\_\_
5. \_\_\_\_\_
6. \_\_\_\_\_
7. \_\_\_\_\_
8. \_\_\_\_\_
9. \_\_\_\_\_
10. \_\_\_\_\_
11. \_\_\_\_\_
12. \_\_\_\_\_

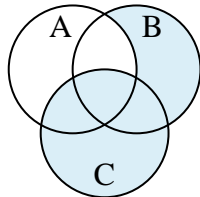


Shade the region shown.

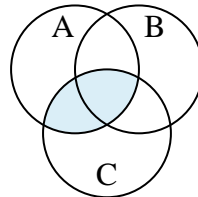
1)  $(A \cap B) - C$



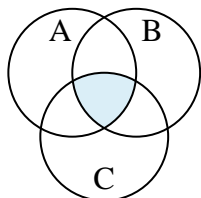
2)  $C \cup (B - A)$



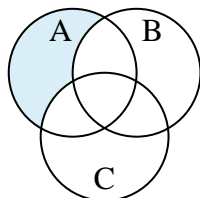
3)  $A \cap C$



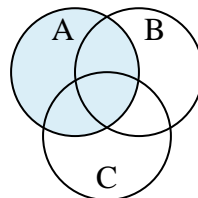
4)  $A \cap C \cap B$



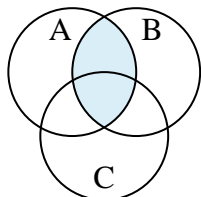
5)  $A - (C \cup B)$



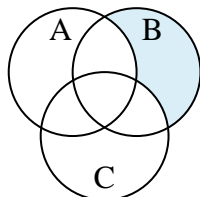
6)  $A$



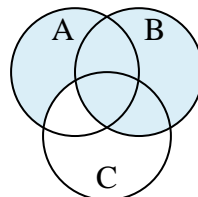
7)  $B \cap A$



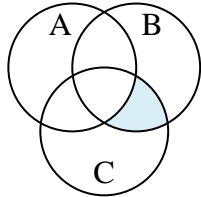
8)  $B - (C \cup A)$



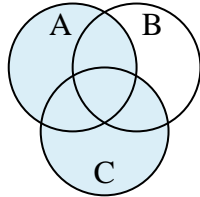
9)  $B \cup (A - C)$



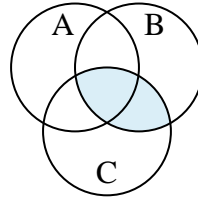
10)  $(B \cap C) - A$



11)  $C \cup A$



12)  $C \cap B$



Answers

1.  $(A \cap B) - C$

2.  $C \cup (B - A)$

3.  $A \cap C$

4.  $A \cap C \cap B$

5.  $A - (C \cup B)$

6.  $A$

7.  $B \cap A$

8.  $B - (C \cup A)$

9.  $B \cup (A - C)$

10.  $(B \cap C) - A$

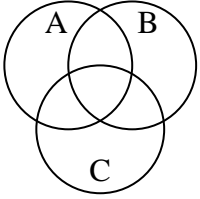
11.  $C \cup A$

12.  $C \cap B$

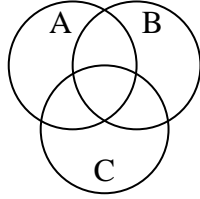


Shade the region shown.

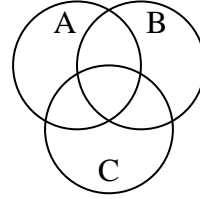
1)  $A \cup (B - C)$



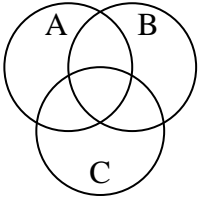
2)  $(B \cup C) \cap A$



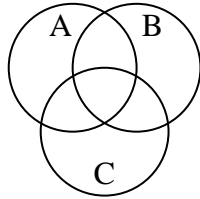
3)  $C - (A \cap B)$



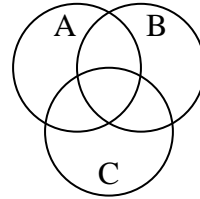
4) B



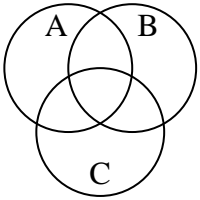
5)  $A - (B \cap C)$



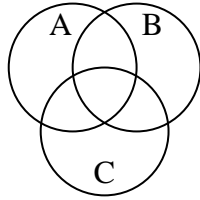
6)  $B \cup A$



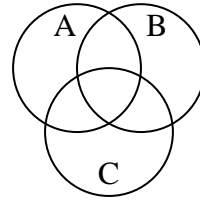
7)  $(A \cap B) - C$



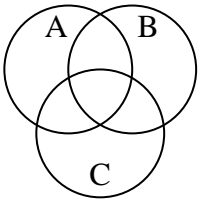
8) A



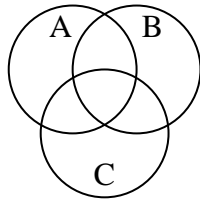
9)  $B \cup (A - C)$



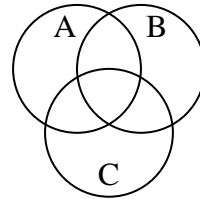
10)  $(C \cup A) - B$



11)  $(C \cup B) - A$



12) C



Answers

1. \_\_\_\_\_

2. \_\_\_\_\_

3. \_\_\_\_\_

4. \_\_\_\_\_

5. \_\_\_\_\_

6. \_\_\_\_\_

7. \_\_\_\_\_

8. \_\_\_\_\_

9. \_\_\_\_\_

10. \_\_\_\_\_

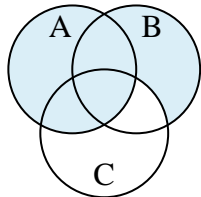
11. \_\_\_\_\_

12. \_\_\_\_\_

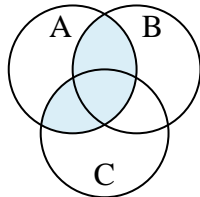


Shade the region shown.

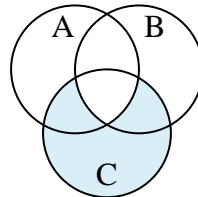
1)  $A \cup (B - C)$



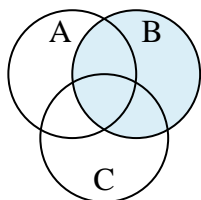
2)  $(B \cup C) \cap A$



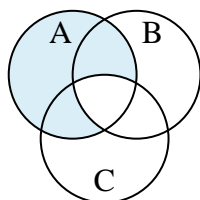
3)  $C - (A \cap B)$



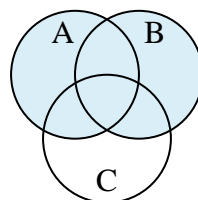
4)  $B$



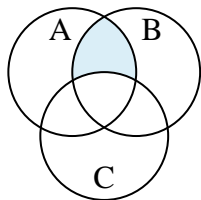
5)  $A - (B \cap C)$



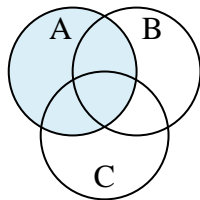
6)  $B \cup A$



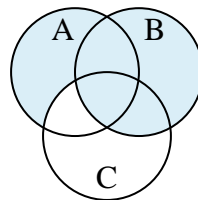
7)  $(A \cap B) - C$



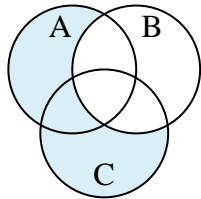
8)  $A$



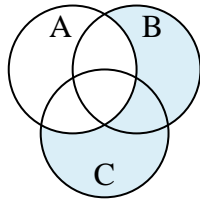
9)  $B \cup (A - C)$



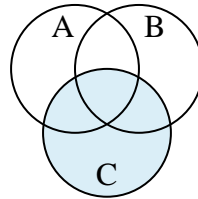
10)  $(C \cup A) - B$



11)  $(C \cup B) - A$



12)  $C$

**Answers**

1.  $A \cup (B - C)$

2.  $(B \cup C) \cap A$

3.  $C - (A \cap B)$

4.  $B$

5.  $A - (B \cap C)$

6.  $B \cup A$

7.  $(A \cap B) - C$

8.  $A$

9.  $B \cup (A - C)$

10.  $(C \cup A) - B$

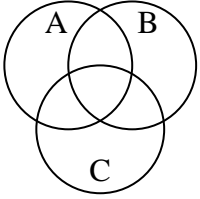
11.  $(C \cup B) - A$

12.  $C$

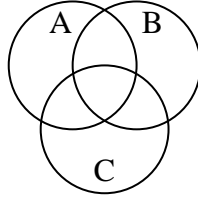


Shade the region shown.

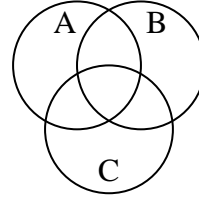
1)  $B \cup A$



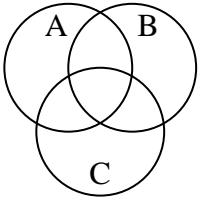
2)  $A - (B \cap C)$



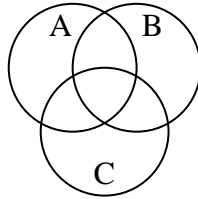
3)  $A - (C \cup B)$



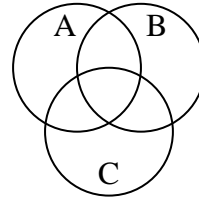
4)  $C \cup A$



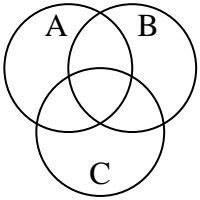
5)  $B - (C \cup A)$



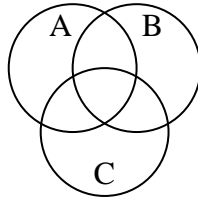
6)  $(C \cup B) - A$



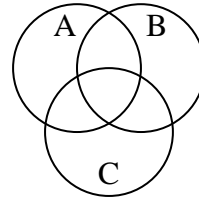
7)  $(B \cup A) - C$



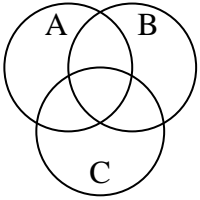
8)  $B - (C \cap A)$



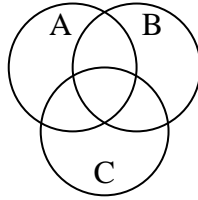
9)  $B \cup (A - C)$



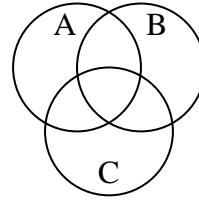
10)  $A \cap (C - B)$



11)  $B \cup A \cup C$



12)  $(A \cup C) - B$



Answers

1. \_\_\_\_\_

2. \_\_\_\_\_

3. \_\_\_\_\_

4. \_\_\_\_\_

5. \_\_\_\_\_

6. \_\_\_\_\_

7. \_\_\_\_\_

8. \_\_\_\_\_

9. \_\_\_\_\_

10. \_\_\_\_\_

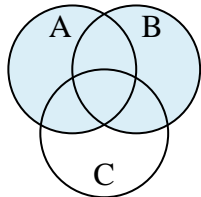
11. \_\_\_\_\_

12. \_\_\_\_\_

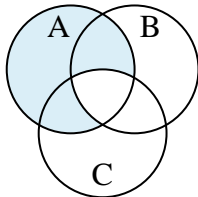


Shade the region shown.

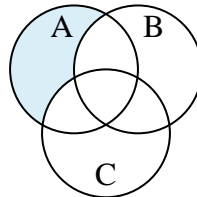
1)  $B \cup A$



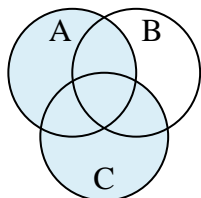
2)  $A - (B \cap C)$



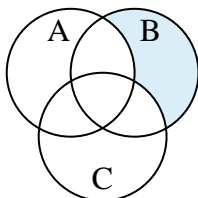
3)  $A - (C \cup B)$



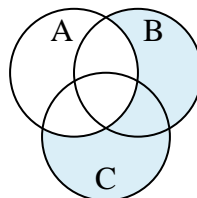
4)  $C \cup A$



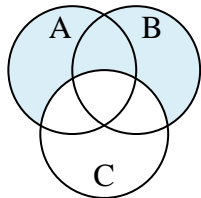
5)  $B - (C \cup A)$



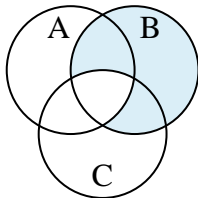
6)  $(C \cup B) - A$



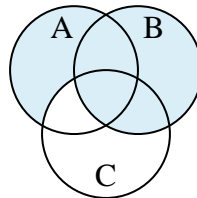
7)  $(B \cup A) - C$



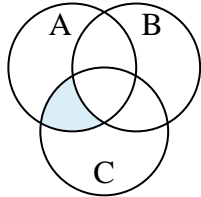
8)  $B - (C \cap A)$



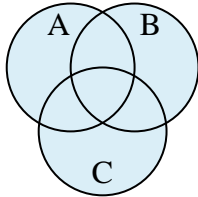
9)  $B \cup (A - C)$



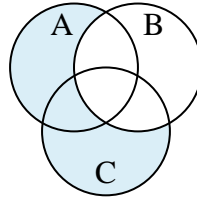
10)  $A \cap (C - B)$



11)  $B \cup A \cup C$



12)  $(A \cup C) - B$

Answers

1.  $B \cup A$

2.  $A - (B \cap C)$

3.  $A - (C \cup B)$

4.  $C \cup A$

5.  $B - (C \cup A)$

6.  $(C \cup B) - A$

7.  $(B \cup A) - C$

8.  $B - (C \cap A)$

9.  $B \cup (A - C)$

10.  $A \cap (C - B)$

11.  $B \cup A \cup C$

12.  $(A \cup C) - B$





Shade the region shown.

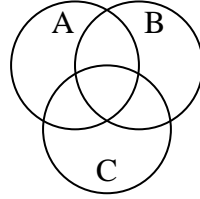
1)  $C \cap A \cap B$



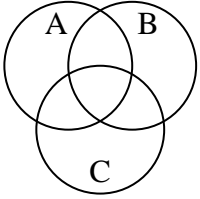
2)  $(B \cup A) - C$



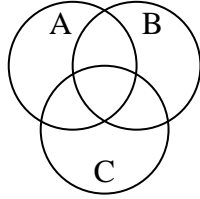
3)  $B - (C \cup A)$



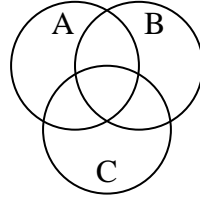
4)  $A \cup (C - B)$



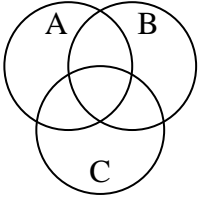
5)  $C - (A \cap B)$



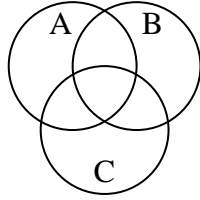
6)  $C \cup (A - B)$



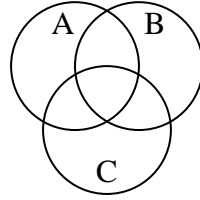
7)  $(B \cup C) - A$



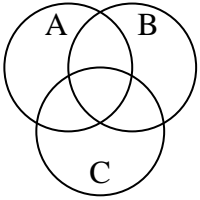
8)  $B - (A \cap C)$



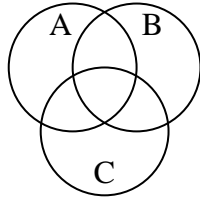
9)  $(C \cup A) - B$



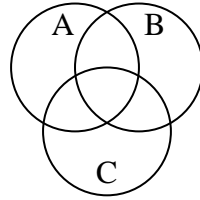
10)  $B \cup (A - C)$



11)  $A \cap (B - C)$



12)  $A \cup C \cup B$



Answers

1. \_\_\_\_\_

2. \_\_\_\_\_

3. \_\_\_\_\_

4. \_\_\_\_\_

5. \_\_\_\_\_

6. \_\_\_\_\_

7. \_\_\_\_\_

8. \_\_\_\_\_

9. \_\_\_\_\_

10. \_\_\_\_\_

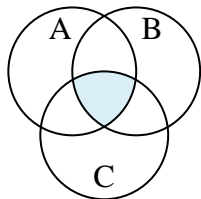
11. \_\_\_\_\_

12. \_\_\_\_\_

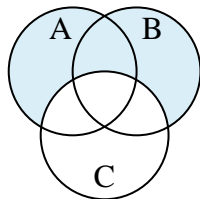


Shade the region shown.

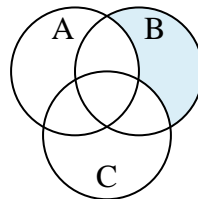
1)  $C \cap A \cap B$



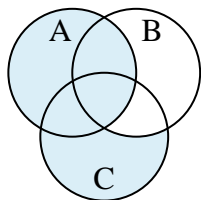
2)  $(B \cup A) - C$



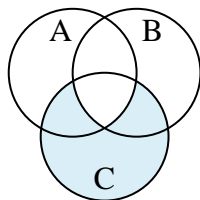
3)  $B - (C \cup A)$



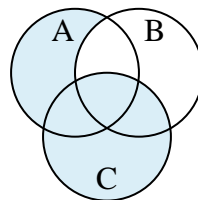
4)  $A \cup (C - B)$



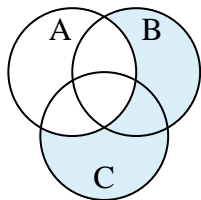
5)  $C - (A \cap B)$



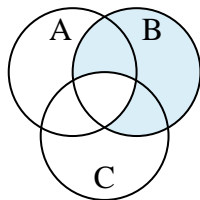
6)  $C \cup (A - B)$



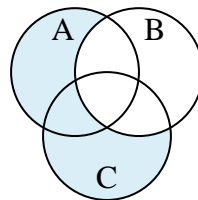
7)  $(B \cup C) - A$



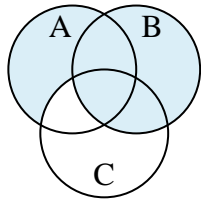
8)  $B - (A \cap C)$



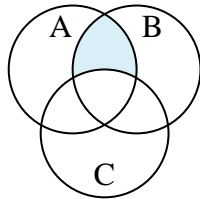
9)  $(C \cup A) - B$



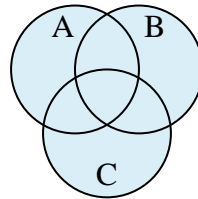
10)  $B \cup (A - C)$



11)  $A \cap (B - C)$



12)  $A \cup C \cup B$

**Answers**

1.  $C \cap A \cap B$

2.  $(B \cup A) - C$

3.  $B - (C \cup A)$

4.  $A \cup (C - B)$

5.  $C - (A \cap B)$

6.  $C \cup (A - B)$

7.  $(B \cup C) - A$

8.  $B - (A \cap C)$

9.  $(C \cup A) - B$

10.  $B \cup (A - C)$

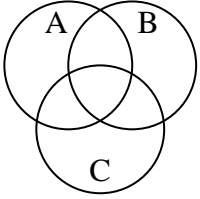
11.  $A \cap (B - C)$

12.  $A \cup C \cup B$

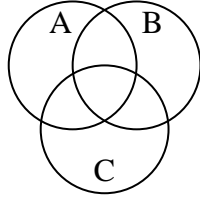


Shade the region shown.

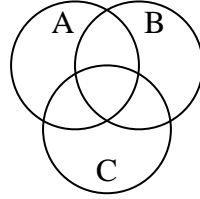
1)  $(B \cup A) \cap C$



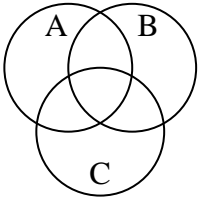
2)  $A - (C \cup B)$



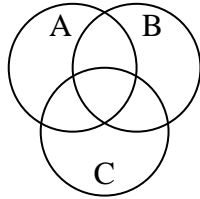
3)  $(C \cup B) - A$



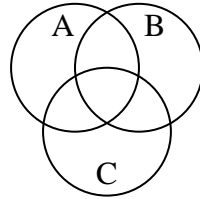
4)  $B - (C \cup A)$



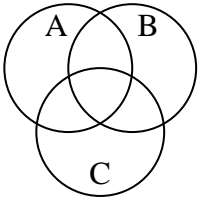
5)  $B \cap A$



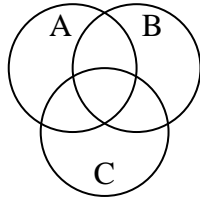
6)  $C \cap A \cap B$



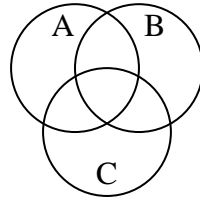
7)  $A \cup (C - B)$



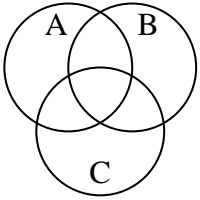
8)  $B - (C \cap A)$



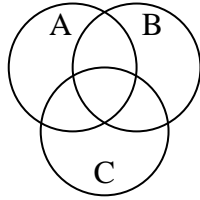
9)  $A \cup C$



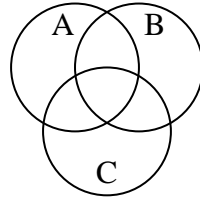
10)  $(A \cup C) \cap B$



11)  $C - (A \cap B)$



12)  $(B \cup C) \cap A$



Answers

1. \_\_\_\_\_

2. \_\_\_\_\_

3. \_\_\_\_\_

4. \_\_\_\_\_

5. \_\_\_\_\_

6. \_\_\_\_\_

7. \_\_\_\_\_

8. \_\_\_\_\_

9. \_\_\_\_\_

10. \_\_\_\_\_

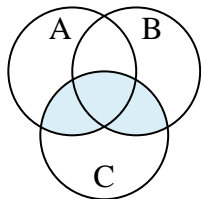
11. \_\_\_\_\_

12. \_\_\_\_\_

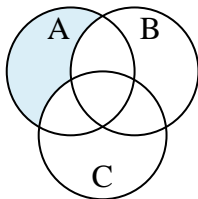


Shade the region shown.

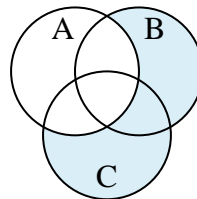
1)  $(B \cup A) \cap C$



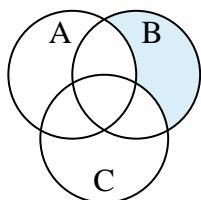
2)  $A - (C \cup B)$



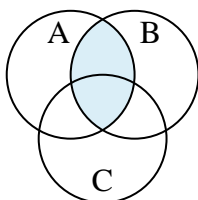
3)  $(C \cup B) - A$



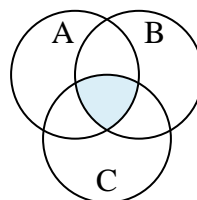
4)  $B - (C \cup A)$



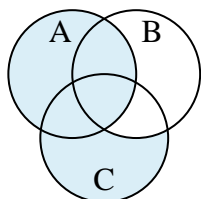
5)  $B \cap A$



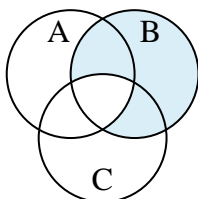
6)  $C \cap A \cap B$



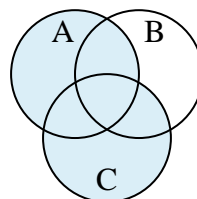
7)  $A \cup (C - B)$



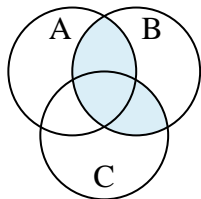
8)  $B - (C \cap A)$



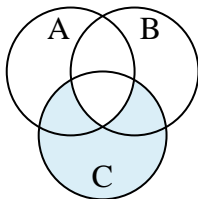
9)  $A \cup C$



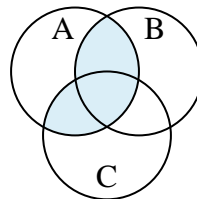
10)  $(A \cup C) \cap B$



11)  $C - (A \cap B)$



12)  $(B \cup C) \cap A$

**Answers**

1.  $(B \cup A) \cap C$

2.  $A - (C \cup B)$

3.  $(C \cup B) - A$

4.  $B - (C \cup A)$

5.  $B \cap A$

6.  $C \cap A \cap B$

7.  $A \cup (C - B)$

8.  $B - (C \cap A)$

9.  $A \cup C$

10.  $(A \cup C) \cap B$

11.  $C - (A \cap B)$

12.  $(B \cup C) \cap A$