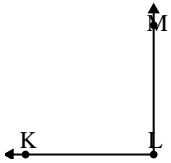




Solve each problem.

Answers

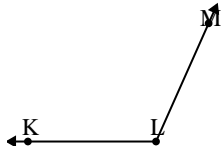
1)



Which choice best represents $\angle KLM$?

- A. 15°
- B. 90°
- C. 113°
- D. 64°

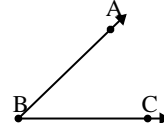
2)



Which choice best represents $\angle KLM$?

- A. 43°
- B. 114°
- C. 0°
- D. 177°

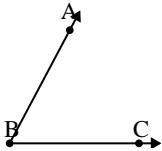
3)



Which choice best represents $\angle ABC$?

- A. 162°
- B. 13°
- C. 44°
- D. 101°

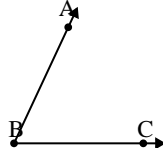
4)



Which choice best represents $\angle ABC$?

- A. 160°
- B. 62°
- C. 1°
- D. 135°

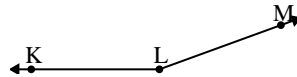
5)



Which choice best represents $\angle ABC$?

- A. 65°
- B. 29°
- C. 133°
- D. 91°

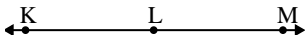
6)



Which choice best represents $\angle KLM$?

- A. 95°
- B. 160°
- C. 129°
- D. 32°

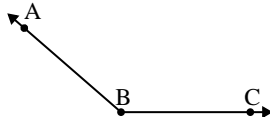
7)



Which choice best represents $\angle KLM$?

- A. 180°
- B. 64°
- C. 3°
- D. 121°

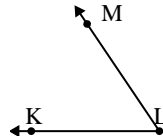
8)



Which choice best represents $\angle ABC$?

- A. 85°
- B. 139°
- C. 64°
- D. 18°

9)



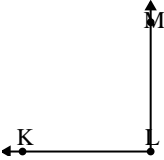
Which choice best represents $\angle KLM$?

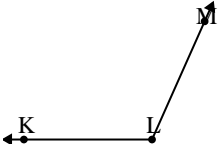
- A. 123°
- B. 90°
- C. 56°
- D. 155°

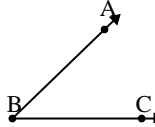
1. _____
2. _____
3. _____
4. _____
5. _____
6. _____
7. _____
8. _____
9. _____

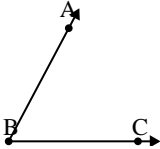


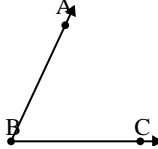
Solve each problem.

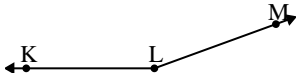
1) 
Which choice best represents $\angle KLM$?
A. 15°
B. 90°
C. 113°
D. 64°

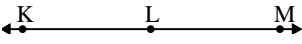
2) 
Which choice best represents $\angle KLM$?
A. 43°
B. 114°
C. 0°
D. 177°

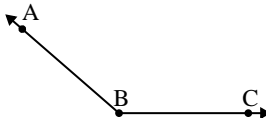
3) 
Which choice best represents $\angle ABC$?
A. 162°
B. 13°
C. 44°
D. 101°

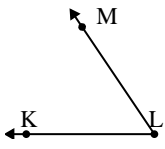
4) 
Which choice best represents $\angle ABC$?
A. 160°
B. 62°
C. 1°
D. 135°

5) 
Which choice best represents $\angle ABC$?
A. 65°
B. 29°
C. 133°
D. 91°

6) 
Which choice best represents $\angle KLM$?
A. 95°
B. 160°
C. 129°
D. 32°

7) 
Which choice best represents $\angle KLM$?
A. 180°
B. 64°
C. 3°
D. 121°

8) 
Which choice best represents $\angle ABC$?
A. 85°
B. 139°
C. 64°
D. 18°

9) 
Which choice best represents $\angle KLM$?
A. 123°
B. 90°
C. 56°
D. 155°

Answers

1. **B**
2. **B**
3. **C**
4. **B**
5. **A**
6. **B**
7. **A**
8. **B**
9. **C**