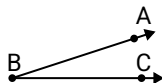




Solve each problem.

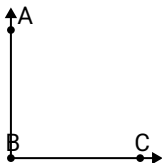
Answers

1)

Which choice best represents $\angle ABC$?

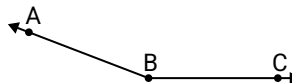
- A. 145°
- B. 166°
- C. 18°
- D. 118°

2)

Which choice best represents $\angle ABC$?

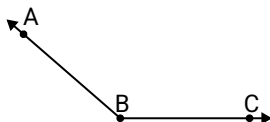
- A. 122°
- B. 90°
- C. 18°
- D. 158°

3)

Which choice best represents $\angle ABC$?

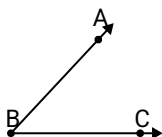
- A. 42°
- B. 84°
- C. 159°
- D. 132°

4)

Which choice best represents $\angle ABC$?

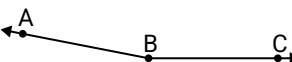
- A. 112°
- B. 5°
- C. 139°
- D. 160°

5)

Which choice best represents $\angle ABC$?

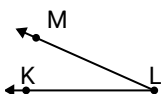
- A. 167°
- B. 122°
- C. 47°
- D. 22°

6)

Which choice best represents $\angle ABC$?

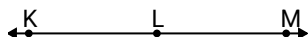
- A. 31°
- B. 169°
- C. 88°
- D. 0°

7)

Which choice best represents $\angle KLM$?

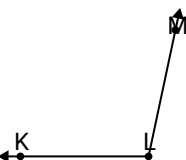
- A. 96°
- B. 140°
- C. 64°
- D. 24°

8)

Which choice best represents $\angle KLM$?

- A. 85°
- B. 15°
- C. 152°
- D. 180°

9)

Which choice best represents $\angle KLM$?

- A. 102°
- B. 124°
- C. 22°
- D. 167°

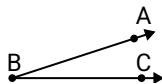
1. _____
2. _____
3. _____
4. _____
5. _____
6. _____
7. _____
8. _____
9. _____



Solve each problem.

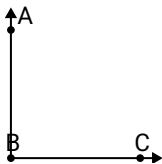
Answers

1)

Which choice best represents $\angle ABC$?

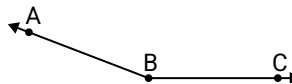
- A. 145°
- B. 166°
- C. 18°
- D. 118°

2)

Which choice best represents $\angle ABC$?

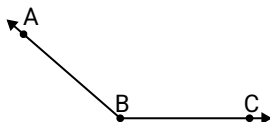
- A. 122°
- B. 90°
- C. 18°
- D. 158°

3)

Which choice best represents $\angle ABC$?

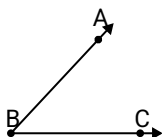
- A. 42°
- B. 84°
- C. 159°
- D. 132°

4)

Which choice best represents $\angle ABC$?

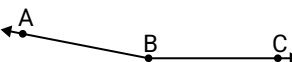
- A. 112°
- B. 5°
- C. 139°
- D. 160°

5)

Which choice best represents $\angle ABC$?

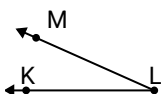
- A. 167°
- B. 122°
- C. 47°
- D. 22°

6)

Which choice best represents $\angle ABC$?

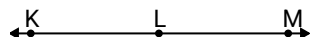
- A. 31°
- B. 169°
- C. 88°
- D. 0°

7)

Which choice best represents $\angle KLM$?

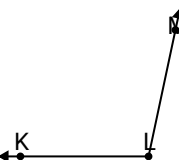
- A. 96°
- B. 140°
- C. 64°
- D. 24°

8)

Which choice best represents $\angle KLM$?

- A. 85°
- B. 15°
- C. 152°
- D. 180°

9)

Which choice best represents $\angle KLM$?

- A. 102°
- B. 124°
- C. 22°
- D. 167°

- 1. **C**
- 2. **B**
- 3. **C**
- 4. **C**
- 5. **C**
- 6. **B**
- 7. **D**
- 8. **D**
- 9. **A**