



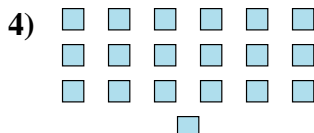
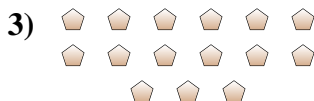
Determine if the number of shapes is even or odd.

Answers



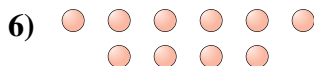
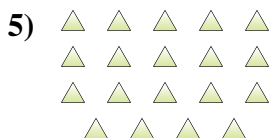
1. \_\_\_\_\_

2. \_\_\_\_\_



3. \_\_\_\_\_

4. \_\_\_\_\_



5. \_\_\_\_\_


6. \_\_\_\_\_

7. \_\_\_\_\_

8. \_\_\_\_\_

9. \_\_\_\_\_

10. \_\_\_\_\_





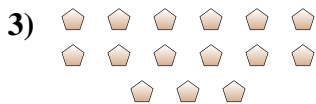
Determine if the number of shapes is even or odd.



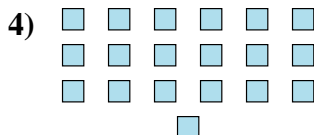
10



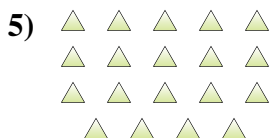
12



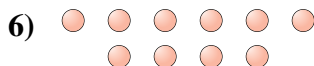
15



19



19




10



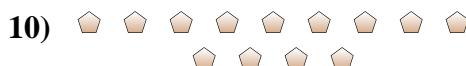
6



17



17



13

Answers

1. even

2. even

3. odd

4. odd

5. odd

6. even

7. even

8. odd

9. odd

10. odd