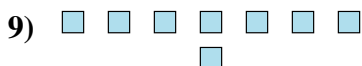
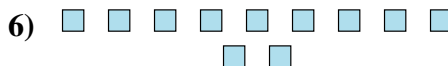
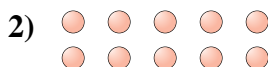





Determine if the number of shapes is even or odd.

Answers



- 1. \_\_\_\_\_
- 2. \_\_\_\_\_
- 3. \_\_\_\_\_
- 4. \_\_\_\_\_
- 5. \_\_\_\_\_
- 6. \_\_\_\_\_
- 7. \_\_\_\_\_
- 8. \_\_\_\_\_
- 9. \_\_\_\_\_
- 10. \_\_\_\_\_



Determine if the number of shapes is even or odd.

1) 18

2) 10

3) 6

4) 13

5) 6

6) 11

7) 12

8) 15

9) 8

10) 16

Answers

1. even

2. even

3. even

4. odd

5. even

6. odd

7. even

8. odd

9. even

10. even