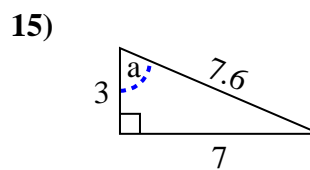
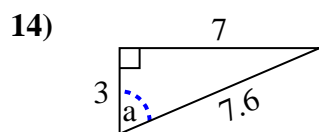
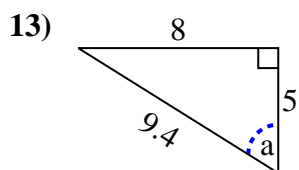
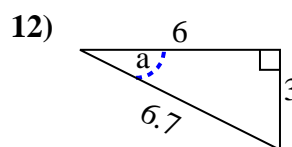
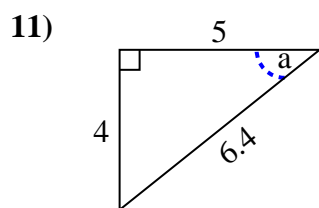
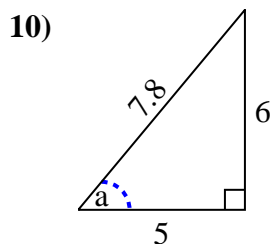
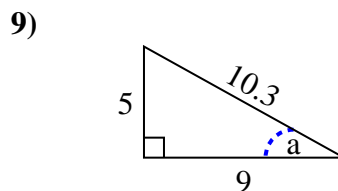
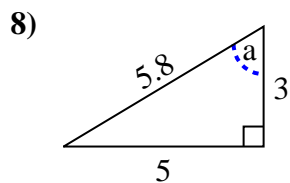
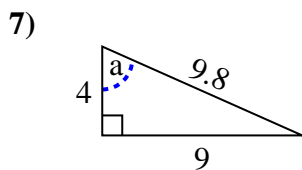
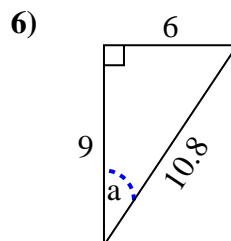
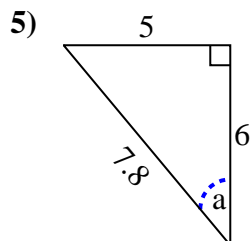
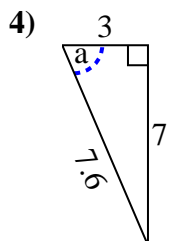
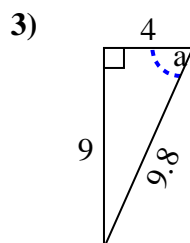
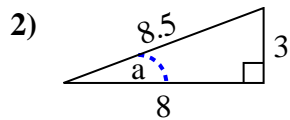
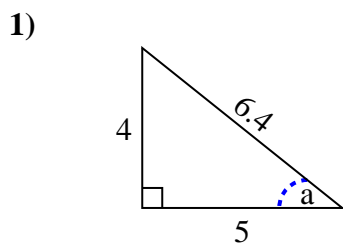


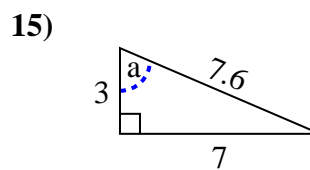
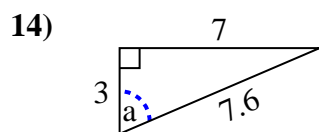
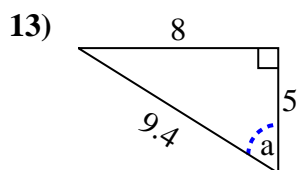
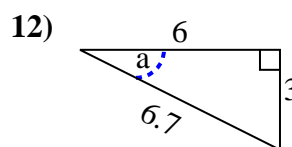
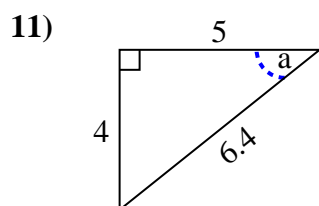
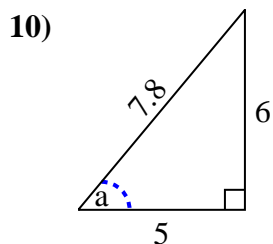
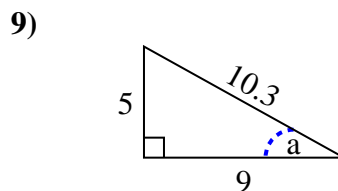
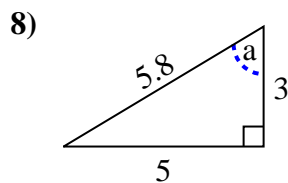
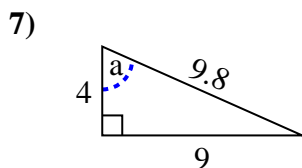
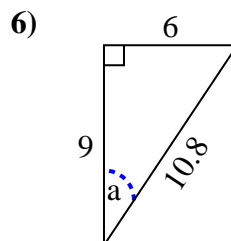
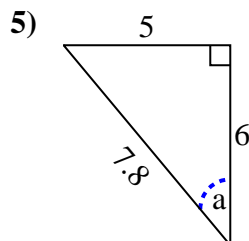
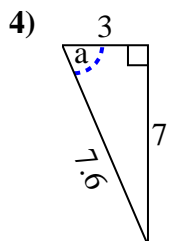
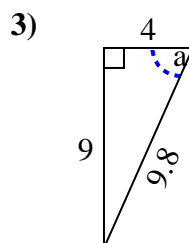
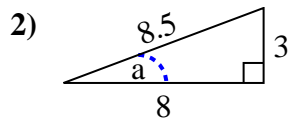
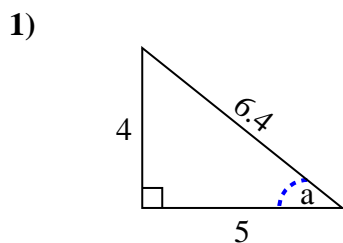


Identify the Opposite, Adjacent and Hypotenuse of Angle a.

Answers



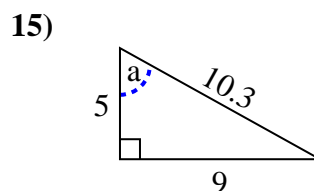
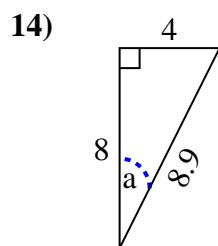
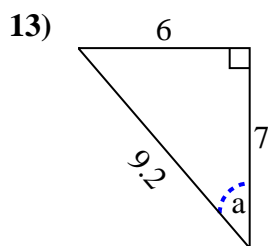
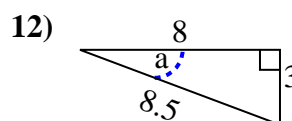
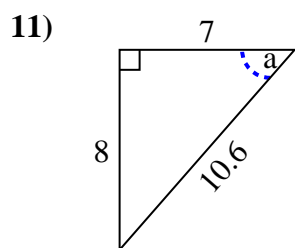
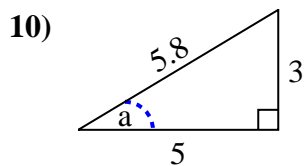
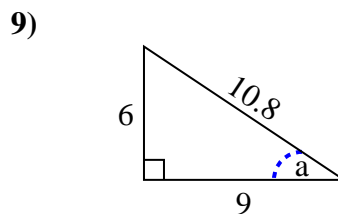
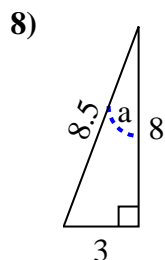
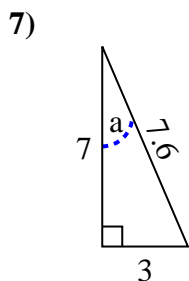
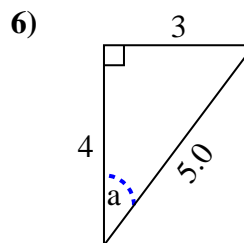
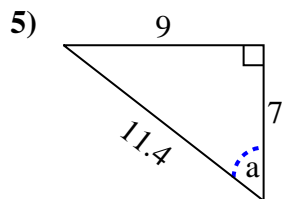
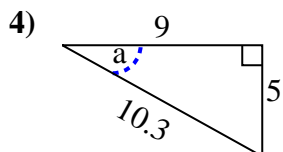
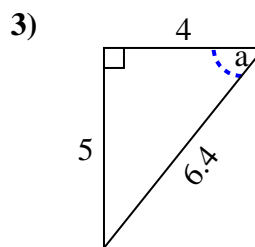
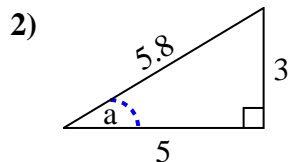
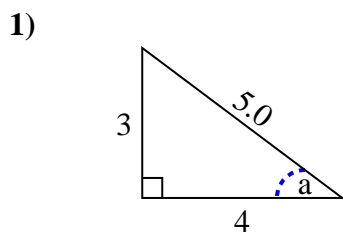
1. \_\_\_\_\_
2. \_\_\_\_\_
3. \_\_\_\_\_
4. \_\_\_\_\_
5. \_\_\_\_\_
6. \_\_\_\_\_
7. \_\_\_\_\_
8. \_\_\_\_\_
9. \_\_\_\_\_
10. \_\_\_\_\_
11. \_\_\_\_\_
12. \_\_\_\_\_
13. \_\_\_\_\_
14. \_\_\_\_\_
15. \_\_\_\_\_

Identify the Opposite, Adjacent and Hypotenuse of Angle  $a$ .Answers1. 4, 5, 6.42. 3, 8, 8.53. 9, 4, 9.84. 7, 3, 7.65. 5, 6, 7.86. 6, 9, 10.87. 9, 4, 9.88. 5, 3, 5.89. 5, 9, 10.310. 6, 5, 7.811. 4, 5, 6.412. 3, 6, 6.713. 8, 5, 9.414. 7, 3, 7.615. 7, 3, 7.6

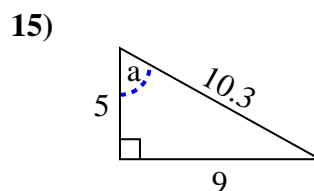
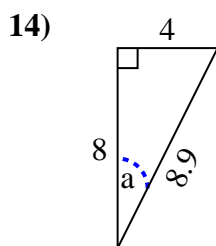
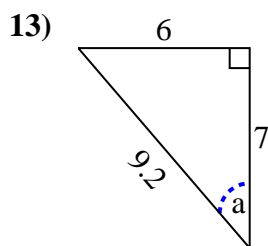
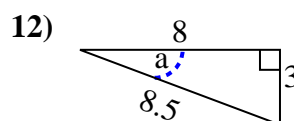
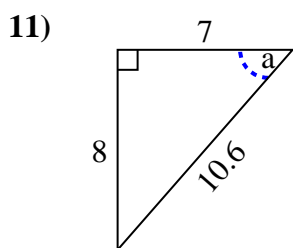
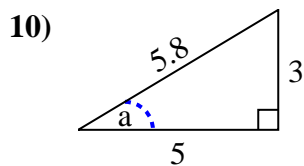
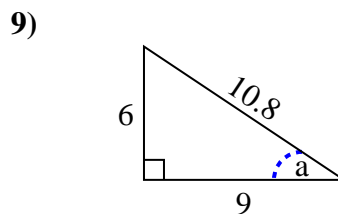
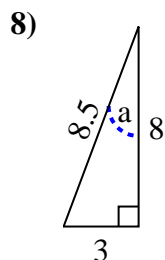
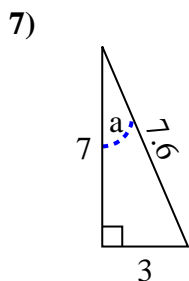
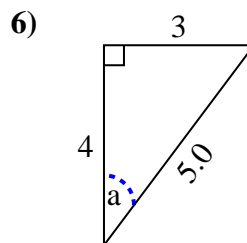
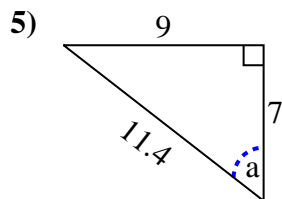
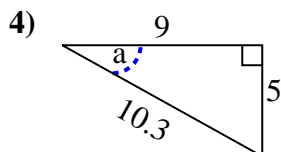
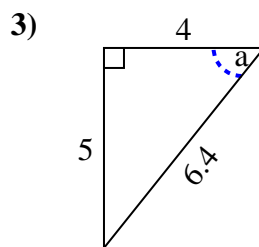
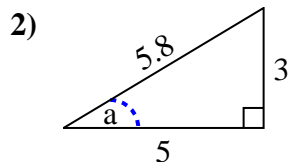
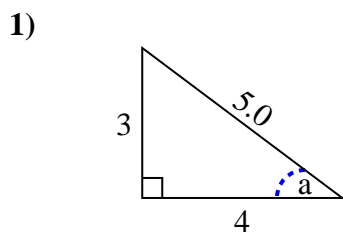


Identify the Opposite, Adjacent and Hypotenuse of Angle a.

Answers



1. \_\_\_\_\_
2. \_\_\_\_\_
3. \_\_\_\_\_
4. \_\_\_\_\_
5. \_\_\_\_\_
6. \_\_\_\_\_
7. \_\_\_\_\_
8. \_\_\_\_\_
9. \_\_\_\_\_
10. \_\_\_\_\_
11. \_\_\_\_\_
12. \_\_\_\_\_
13. \_\_\_\_\_
14. \_\_\_\_\_
15. \_\_\_\_\_

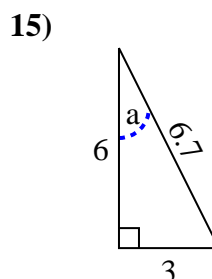
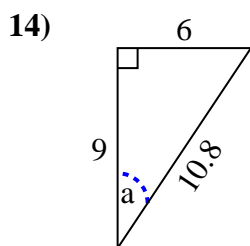
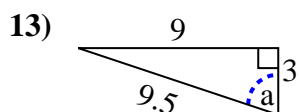
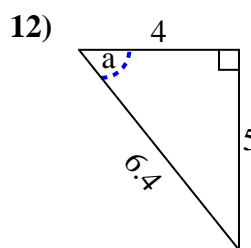
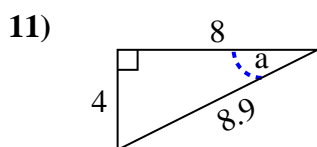
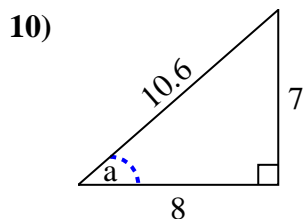
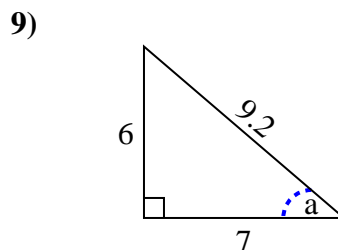
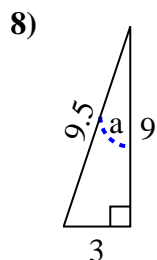
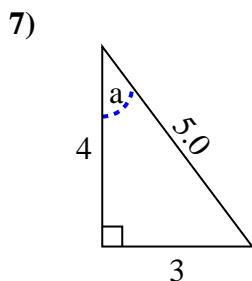
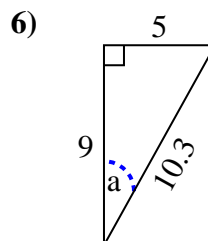
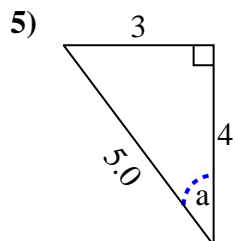
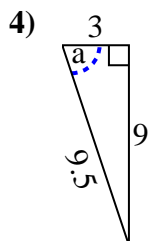
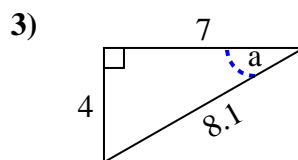
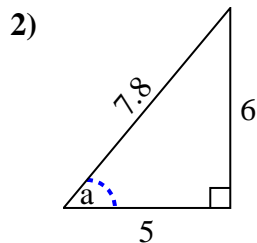
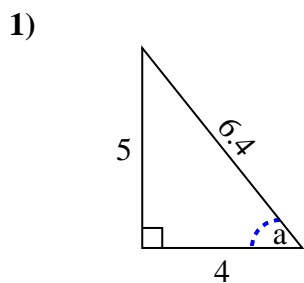
Identify the Opposite, Adjacent and Hypotenuse of Angle  $a$ .**Answers**

1. 3, 4, 5.0
2. 3, 5, 5.8
3. 5, 4, 6.4
4. 5, 9, 10.3
5. 9, 7, 11.4
6. 3, 4, 5.0
7. 3, 7, 7.6
8. 3, 8, 8.5
9. 6, 9, 10.8
10. 3, 5, 5.8
11. 8, 7, 10.6
12. 3, 8, 8.5
13. 6, 7, 9.2
14. 4, 8, 8.9
15. 9, 5, 10.3

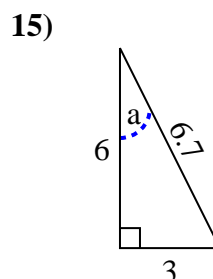
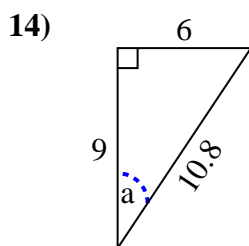
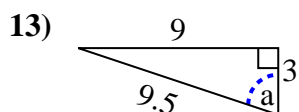
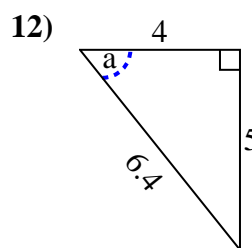
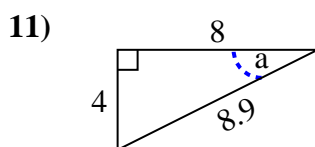
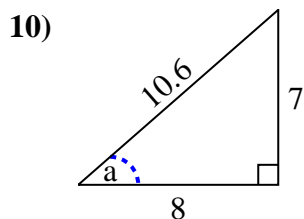
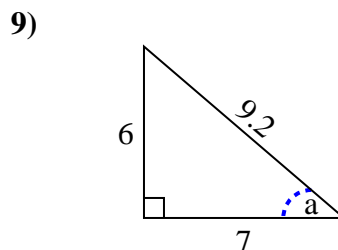
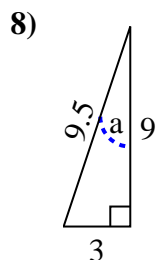
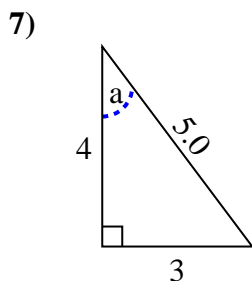
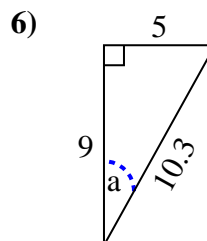
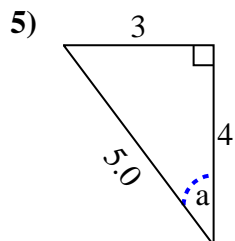
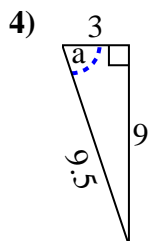
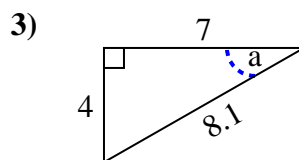
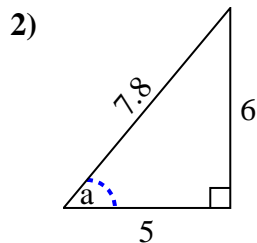
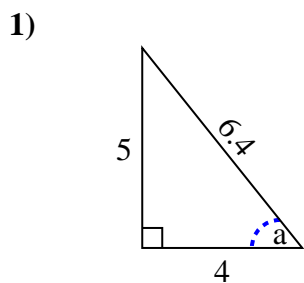


Identify the Opposite, Adjacent and Hypotenuse of Angle a.

Answers



1. \_\_\_\_\_
2. \_\_\_\_\_
3. \_\_\_\_\_
4. \_\_\_\_\_
5. \_\_\_\_\_
6. \_\_\_\_\_
7. \_\_\_\_\_
8. \_\_\_\_\_
9. \_\_\_\_\_
10. \_\_\_\_\_
11. \_\_\_\_\_
12. \_\_\_\_\_
13. \_\_\_\_\_
14. \_\_\_\_\_
15. \_\_\_\_\_

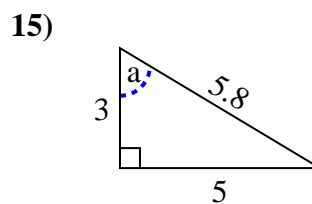
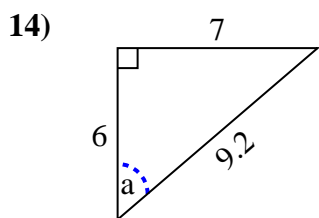
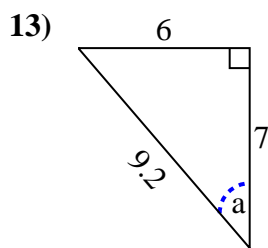
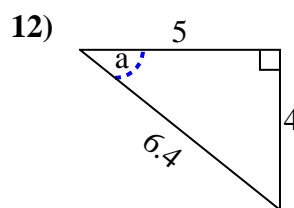
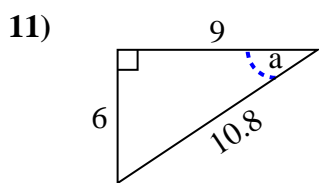
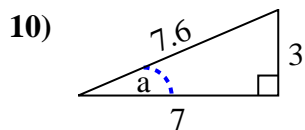
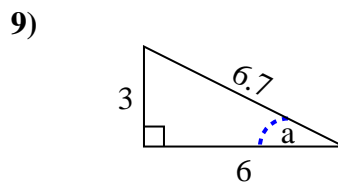
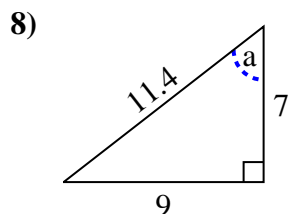
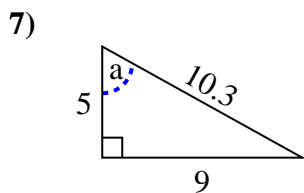
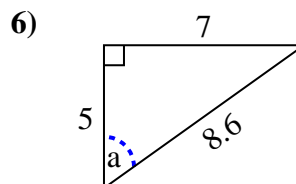
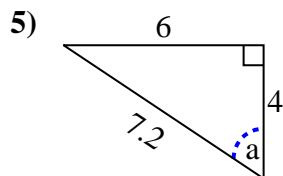
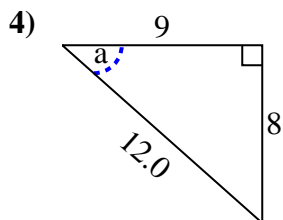
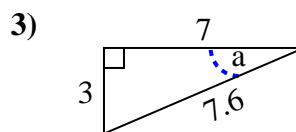
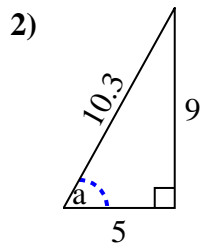
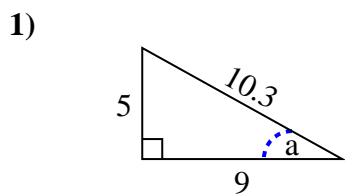
Identify the Opposite, Adjacent and Hypotenuse of Angle  $a$ .**Answers**

1. 5, 4, 6.4
2. 6, 5, 7.8
3. 4, 7, 8.1
4. 9, 3, 9.5
5. 3, 4, 5.0
6. 5, 9, 10.3
7. 3, 4, 5.0
8. 3, 9, 9.5
9. 6, 7, 9.2
10. 7, 8, 10.6
11. 4, 8, 8.9
12. 5, 4, 6.4
13. 9, 3, 9.5
14. 6, 9, 10.8
15. 3, 6, 6.7



Identify the Opposite, Adjacent and Hypotenuse of Angle a.

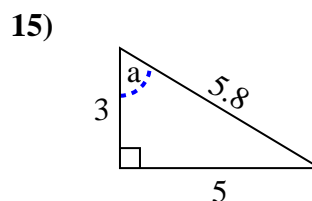
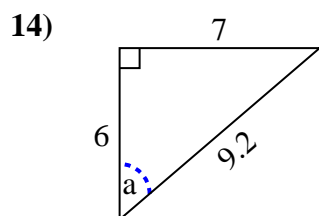
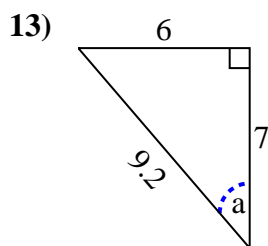
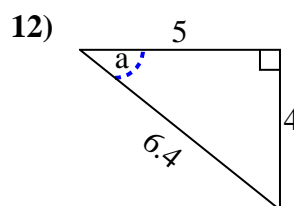
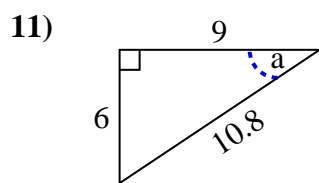
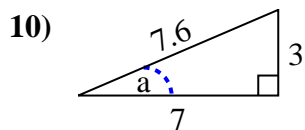
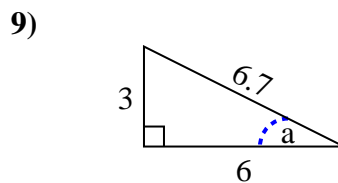
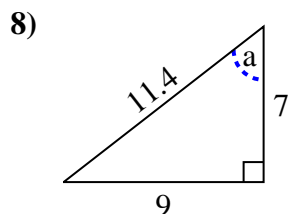
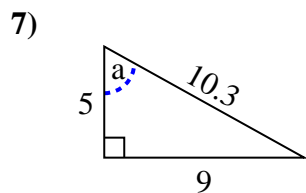
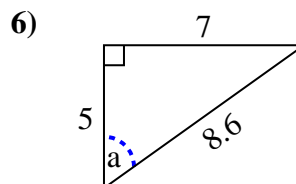
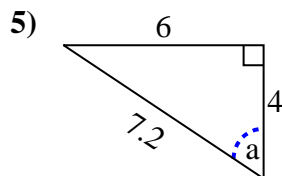
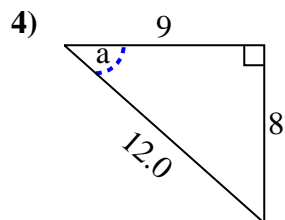
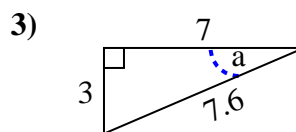
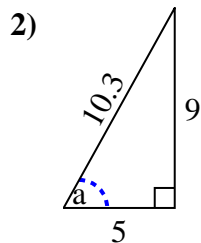
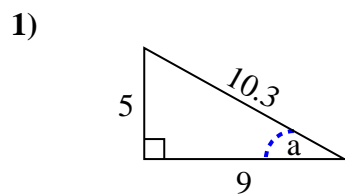
Answers



1. \_\_\_\_\_
2. \_\_\_\_\_
3. \_\_\_\_\_
4. \_\_\_\_\_
5. \_\_\_\_\_
6. \_\_\_\_\_
7. \_\_\_\_\_
8. \_\_\_\_\_
9. \_\_\_\_\_
10. \_\_\_\_\_
11. \_\_\_\_\_
12. \_\_\_\_\_
13. \_\_\_\_\_
14. \_\_\_\_\_
15. \_\_\_\_\_



Identify the Opposite, Adjacent and Hypotenuse of Angle a.

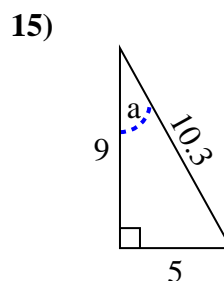
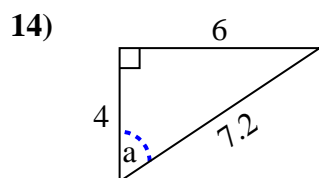
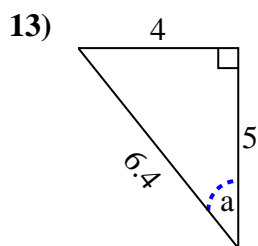
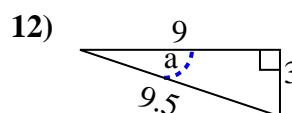
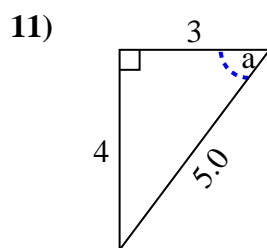
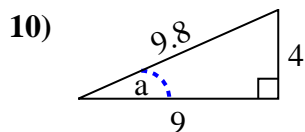
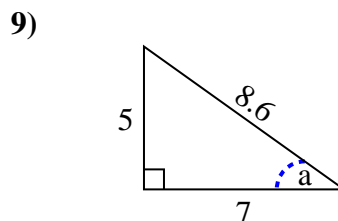
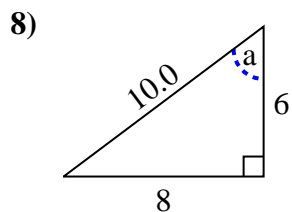
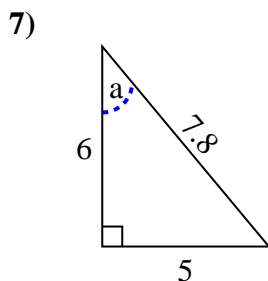
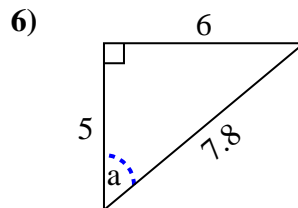
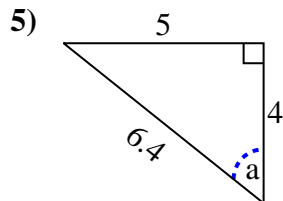
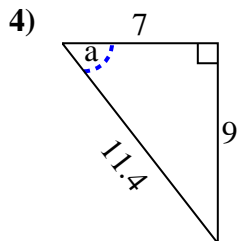
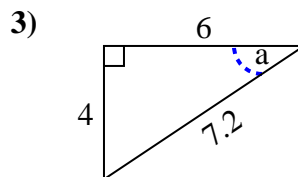
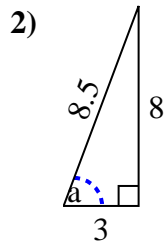
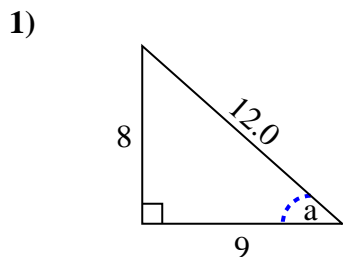
**Answers**1. 5, 9, 10.32. 9, 5, 10.33. 3, 7, 7.64. 8, 9, 12.05. 6, 4, 7.26. 7, 5, 8.67. 9, 5, 10.38. 9, 7, 11.49. 3, 6, 6.710. 3, 7, 7.611. 6, 9, 10.812. 4, 5, 6.413. 6, 7, 9.214. 7, 6, 9.215. 5, 3, 5.8



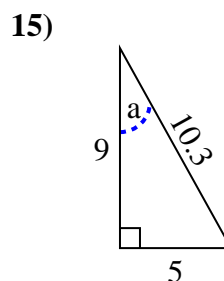
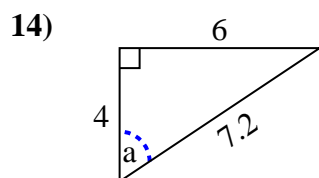
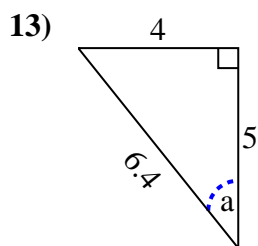
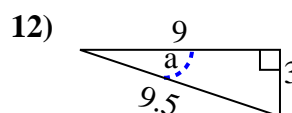
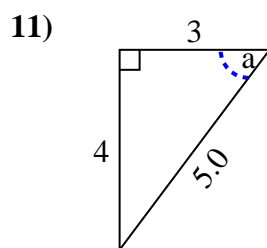
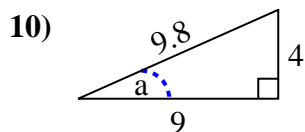
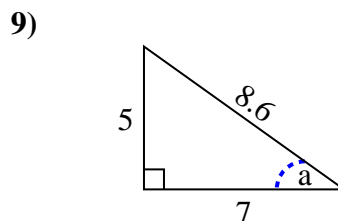
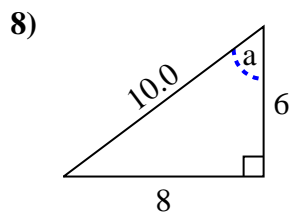
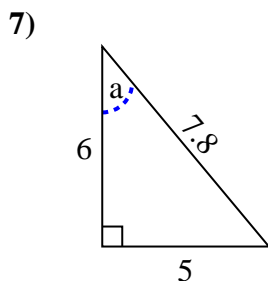
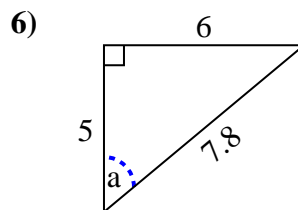
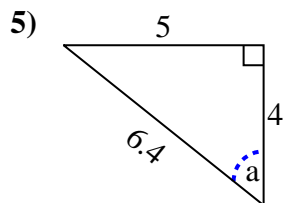
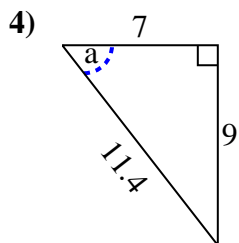
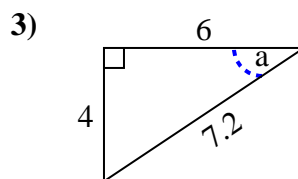
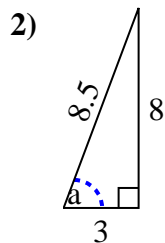
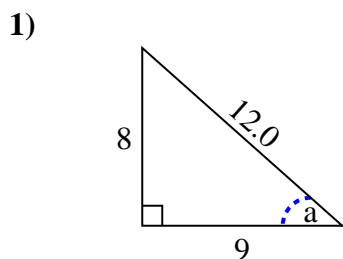


Identify the Opposite, Adjacent and Hypotenuse of Angle a.

Answers



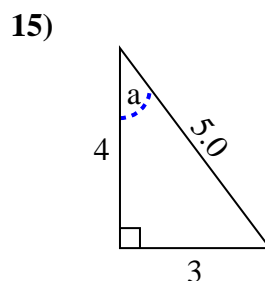
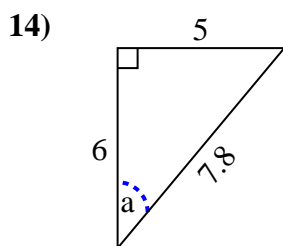
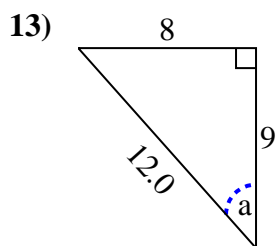
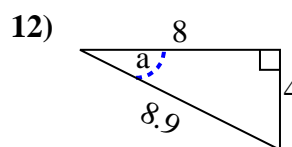
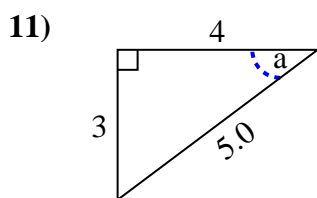
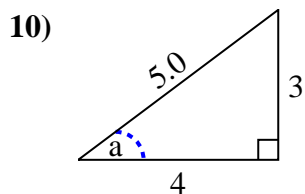
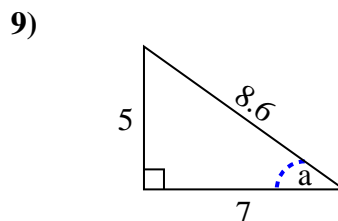
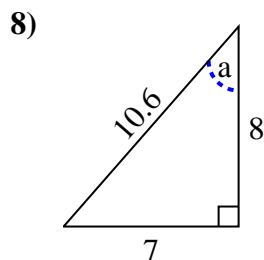
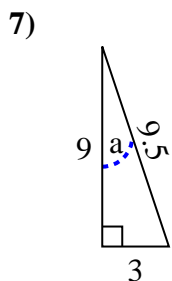
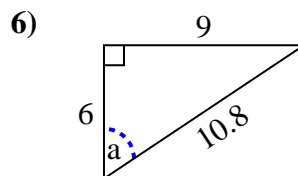
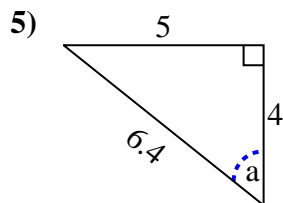
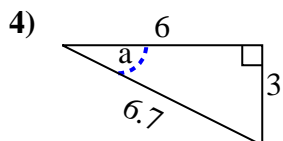
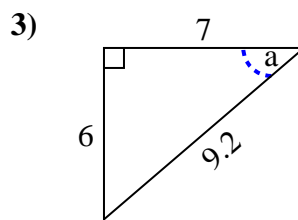
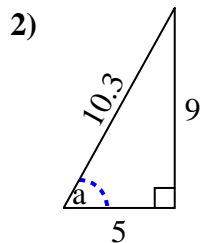
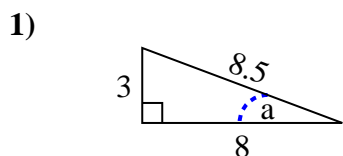
1. \_\_\_\_\_
2. \_\_\_\_\_
3. \_\_\_\_\_
4. \_\_\_\_\_
5. \_\_\_\_\_
6. \_\_\_\_\_
7. \_\_\_\_\_
8. \_\_\_\_\_
9. \_\_\_\_\_
10. \_\_\_\_\_
11. \_\_\_\_\_
12. \_\_\_\_\_
13. \_\_\_\_\_
14. \_\_\_\_\_
15. \_\_\_\_\_

Identify the Opposite, Adjacent and Hypotenuse of Angle  $a$ .Answers1. 8, 9, 12.02. 8, 3, 8.53. 4, 6, 7.24. 9, 7, 11.45. 5, 4, 6.46. 6, 5, 7.87. 5, 6, 7.88. 8, 6, 10.09. 5, 7, 8.610. 4, 9, 9.811. 4, 3, 5.012. 3, 9, 9.513. 4, 5, 6.414. 6, 4, 7.215. 5, 9, 10.3

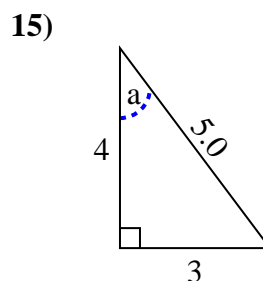
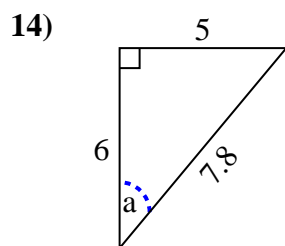
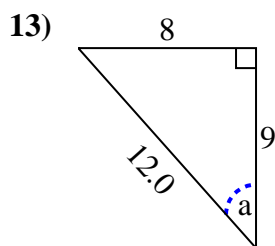
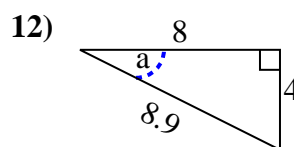
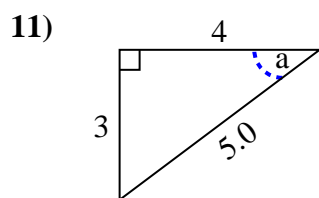
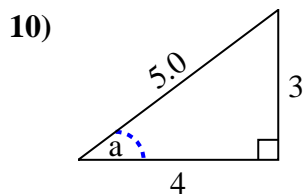
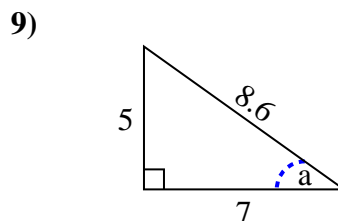
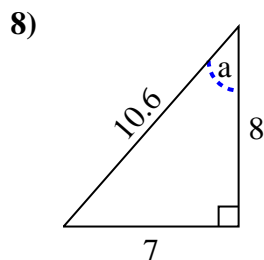
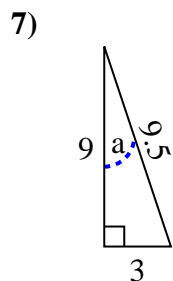
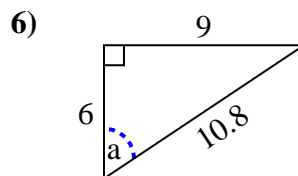
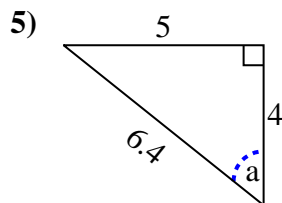
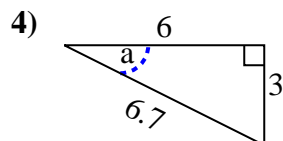
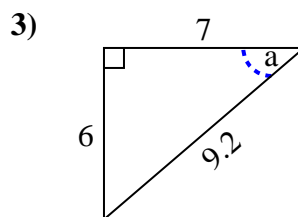
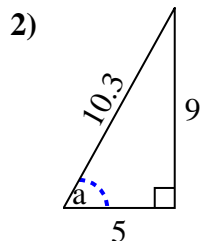
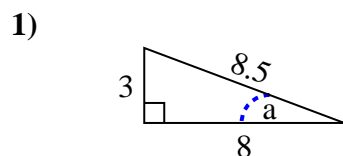


Identify the Opposite, Adjacent and Hypotenuse of Angle a.

Answers



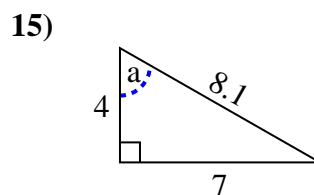
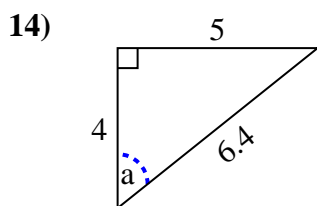
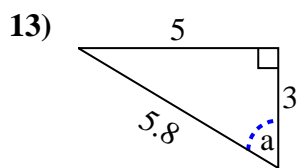
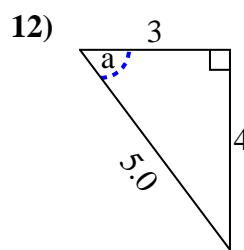
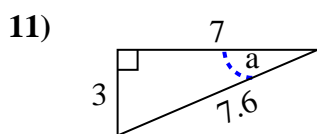
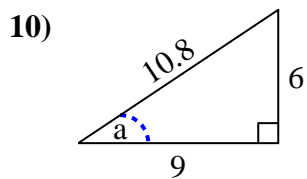
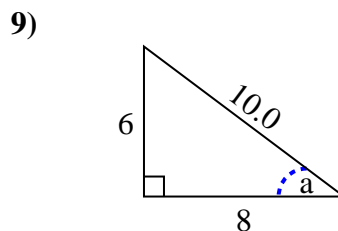
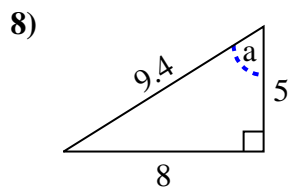
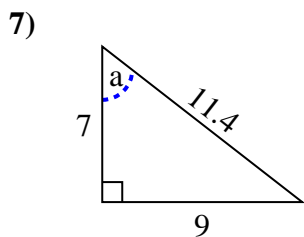
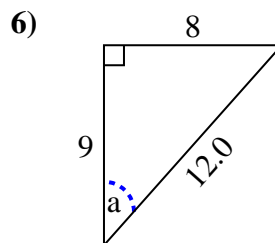
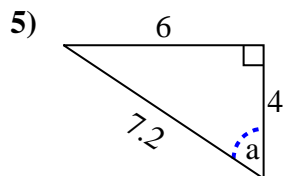
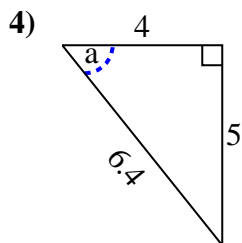
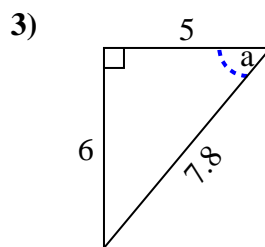
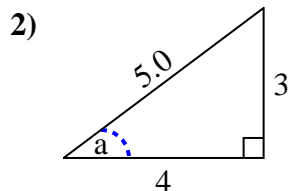
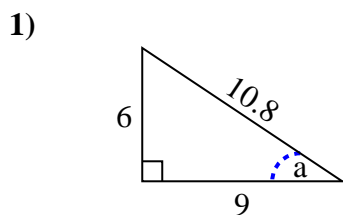
1. \_\_\_\_\_
2. \_\_\_\_\_
3. \_\_\_\_\_
4. \_\_\_\_\_
5. \_\_\_\_\_
6. \_\_\_\_\_
7. \_\_\_\_\_
8. \_\_\_\_\_
9. \_\_\_\_\_
10. \_\_\_\_\_
11. \_\_\_\_\_
12. \_\_\_\_\_
13. \_\_\_\_\_
14. \_\_\_\_\_
15. \_\_\_\_\_

Identify the Opposite, Adjacent and Hypotenuse of Angle  $a$ .**Answers**1. 3, 8, 8.52. 9, 5, 10.33. 6, 7, 9.24. 3, 6, 6.75. 5, 4, 6.46. 9, 6, 10.87. 3, 9, 9.58. 7, 8, 10.69. 5, 7, 8.610. 3, 4, 5.011. 3, 4, 5.012. 4, 8, 8.913. 8, 9, 12.014. 5, 6, 7.815. 3, 4, 5.0

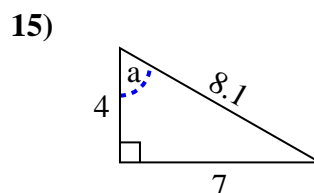
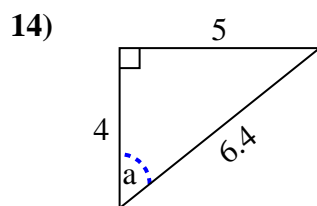
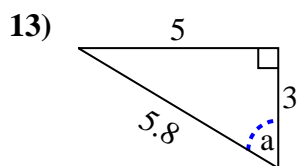
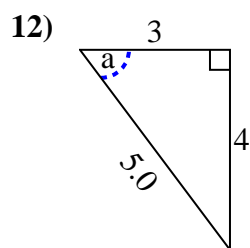
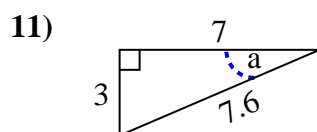
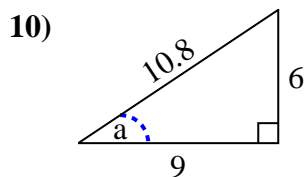
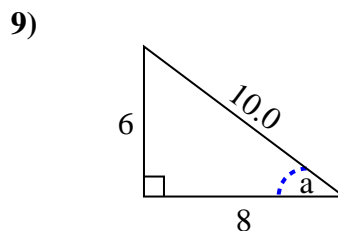
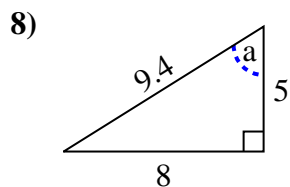
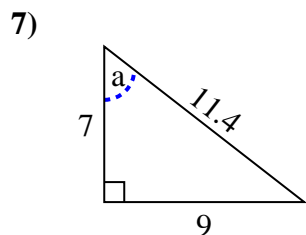
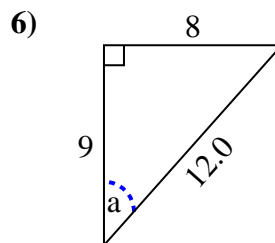
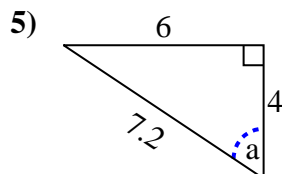
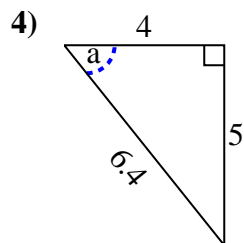
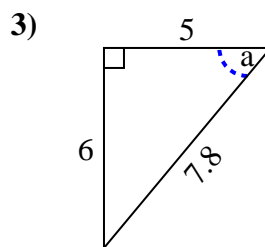
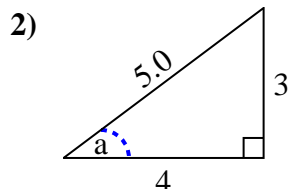
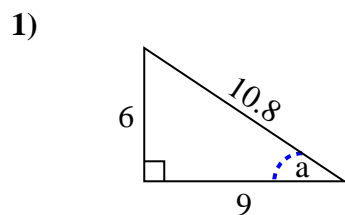


Identify the Opposite, Adjacent and Hypotenuse of Angle a.

Answers



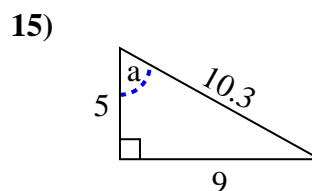
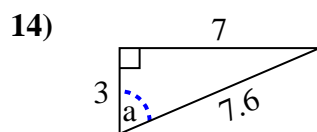
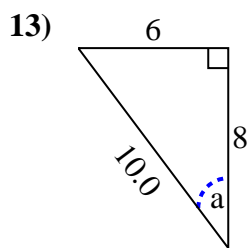
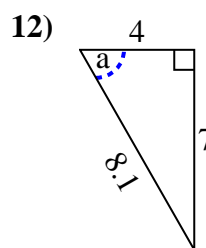
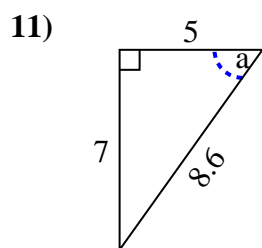
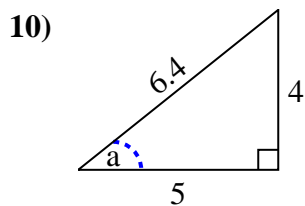
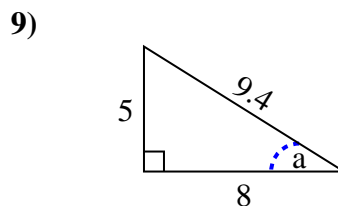
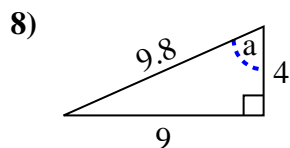
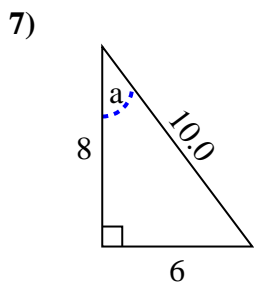
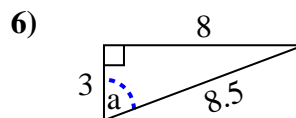
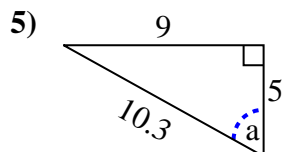
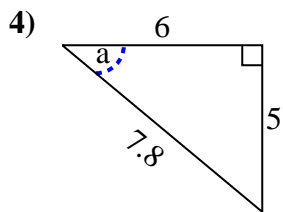
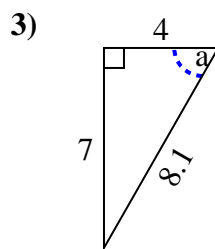
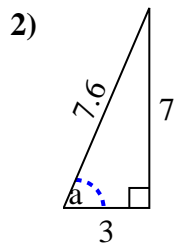
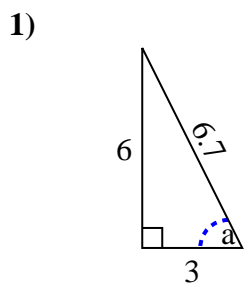
1. \_\_\_\_\_
2. \_\_\_\_\_
3. \_\_\_\_\_
4. \_\_\_\_\_
5. \_\_\_\_\_
6. \_\_\_\_\_
7. \_\_\_\_\_
8. \_\_\_\_\_
9. \_\_\_\_\_
10. \_\_\_\_\_
11. \_\_\_\_\_
12. \_\_\_\_\_
13. \_\_\_\_\_
14. \_\_\_\_\_
15. \_\_\_\_\_

Identify the Opposite, Adjacent and Hypotenuse of Angle  $a$ .Answers1. 6, 9, 10.82. 3, 4, 5.03. 6, 5, 7.84. 5, 4, 6.45. 6, 4, 7.26. 8, 9, 12.07. 9, 7, 11.48. 8, 5, 9.49. 6, 8, 10.010. 6, 9, 10.811. 3, 7, 7.612. 4, 3, 5.013. 5, 3, 5.814. 5, 4, 6.415. 7, 4, 8.1



Identify the Opposite, Adjacent and Hypotenuse of Angle a.

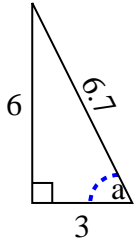
Answers



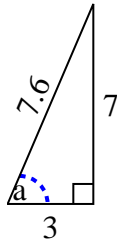
1. \_\_\_\_\_
2. \_\_\_\_\_
3. \_\_\_\_\_
4. \_\_\_\_\_
5. \_\_\_\_\_
6. \_\_\_\_\_
7. \_\_\_\_\_
8. \_\_\_\_\_
9. \_\_\_\_\_
10. \_\_\_\_\_
11. \_\_\_\_\_
12. \_\_\_\_\_
13. \_\_\_\_\_
14. \_\_\_\_\_
15. \_\_\_\_\_

Identify the Opposite, Adjacent and Hypotenuse of Angle  $a$ .

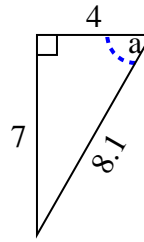
1)



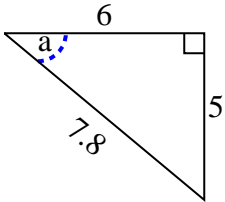
2)



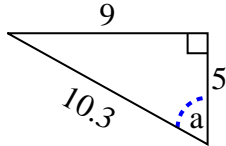
3)



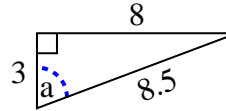
4)



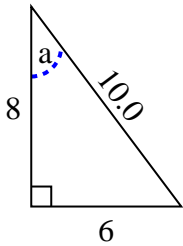
5)



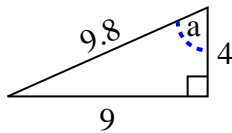
6)



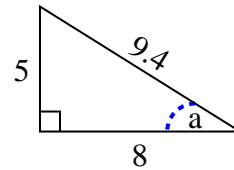
7)



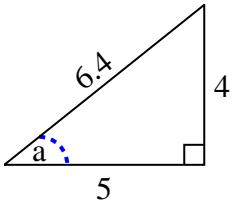
8)



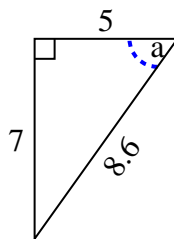
9)



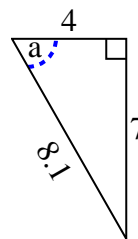
10)



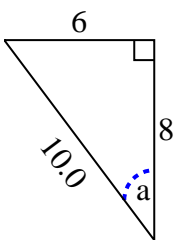
11)



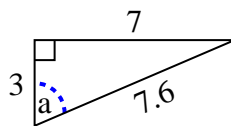
12)



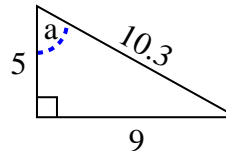
13)



14)



15)

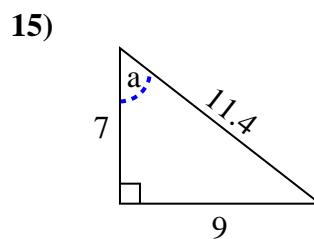
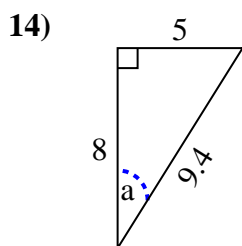
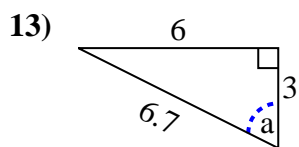
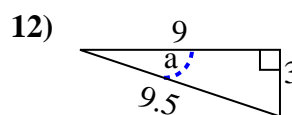
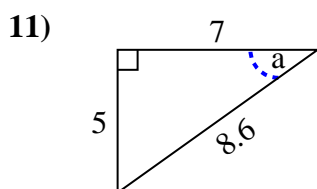
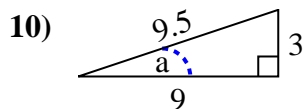
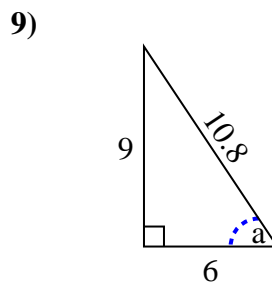
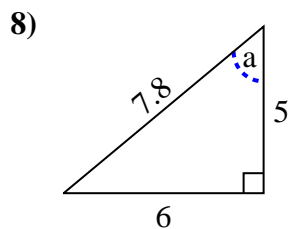
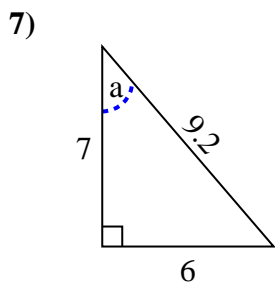
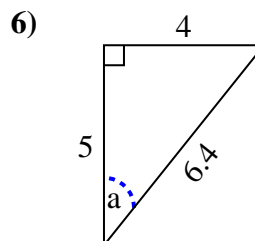
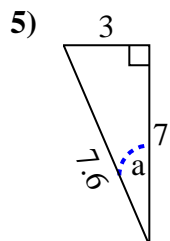
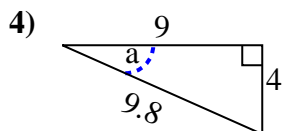
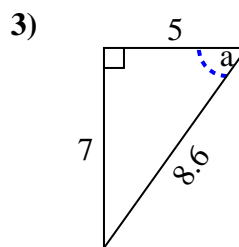
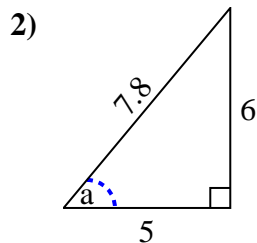
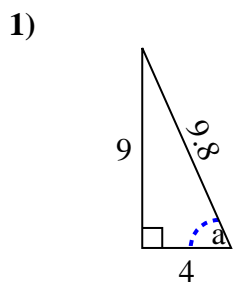
**Answers**1. 6, 3, 6.72. 7, 3, 7.63. 7, 4, 8.14. 5, 6, 7.85. 9, 5, 10.36. 8, 3, 8.57. 6, 8, 10.08. 9, 4, 9.89. 5, 8, 9.410. 4, 5, 6.411. 7, 5, 8.612. 7, 4, 8.113. 6, 8, 10.014. 7, 3, 7.615. 9, 5, 10.3



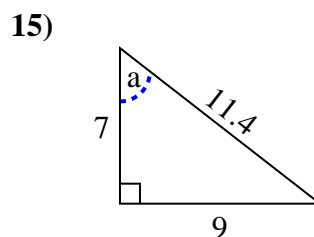
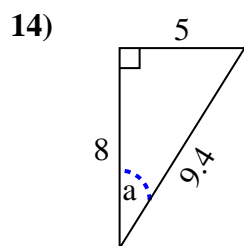
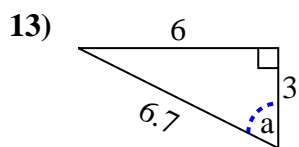
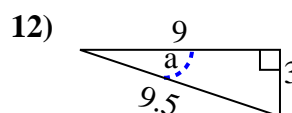
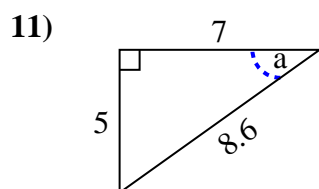
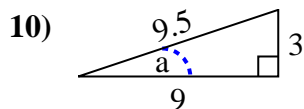
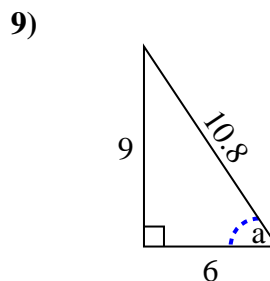
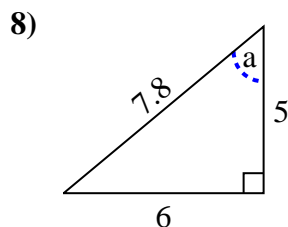
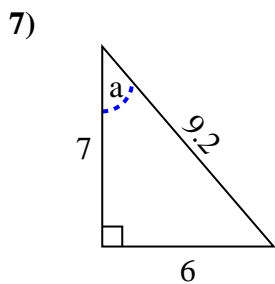
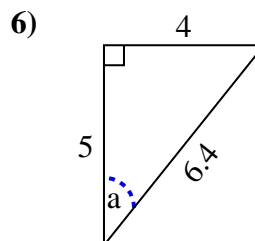
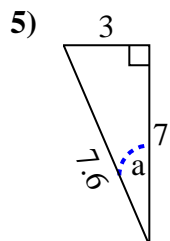
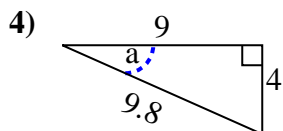
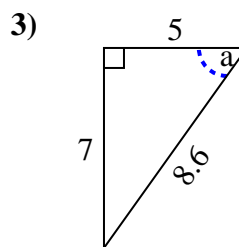
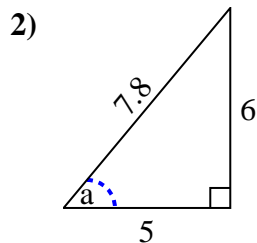
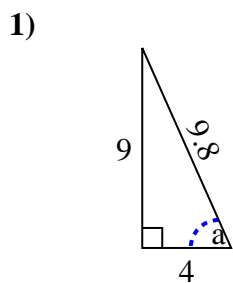


Identify the Opposite, Adjacent and Hypotenuse of Angle a.

Answers



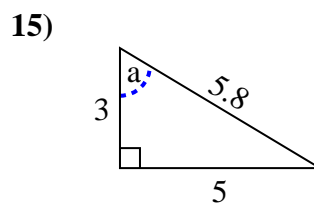
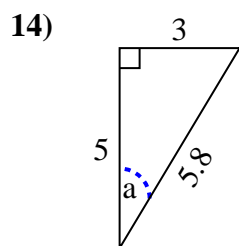
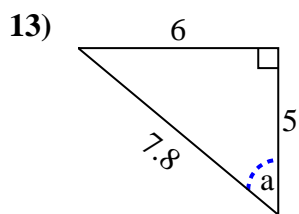
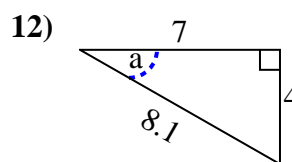
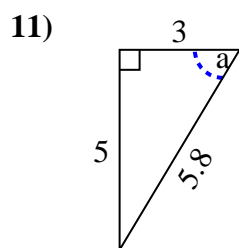
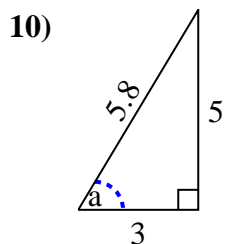
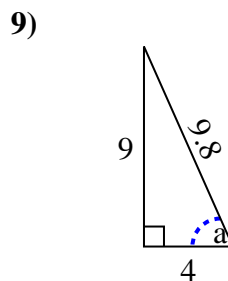
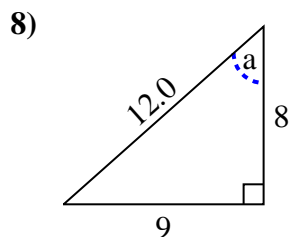
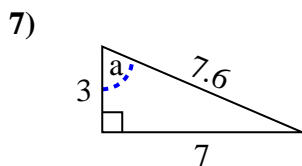
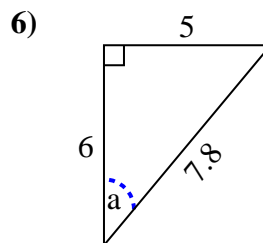
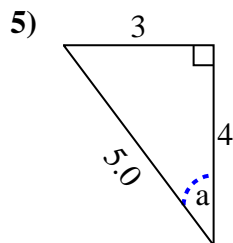
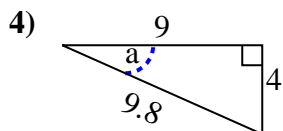
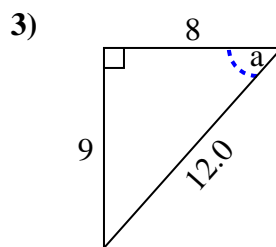
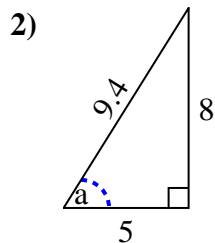
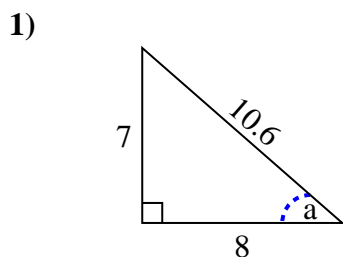
1. \_\_\_\_\_
2. \_\_\_\_\_
3. \_\_\_\_\_
4. \_\_\_\_\_
5. \_\_\_\_\_
6. \_\_\_\_\_
7. \_\_\_\_\_
8. \_\_\_\_\_
9. \_\_\_\_\_
10. \_\_\_\_\_
11. \_\_\_\_\_
12. \_\_\_\_\_
13. \_\_\_\_\_
14. \_\_\_\_\_
15. \_\_\_\_\_

Identify the Opposite, Adjacent and Hypotenuse of Angle  $a$ .**Answers**1. 9, 4, 9.82. 6, 5, 7.83. 7, 5, 8.64. 4, 9, 9.85. 3, 7, 7.66. 4, 5, 6.47. 6, 7, 9.28. 6, 5, 7.89. 9, 6, 10.810. 3, 9, 9.511. 5, 7, 8.612. 3, 9, 9.513. 6, 3, 6.714. 5, 8, 9.415. 9, 7, 11.4

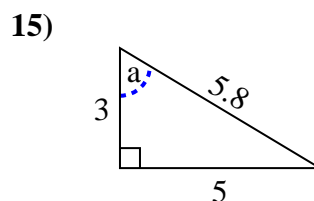
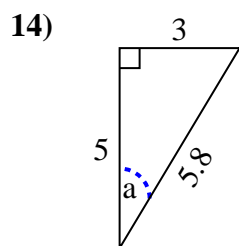
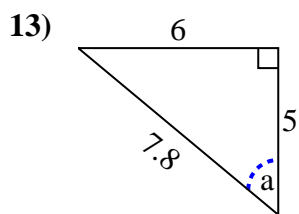
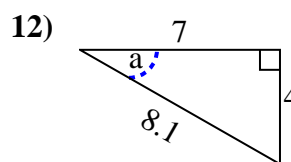
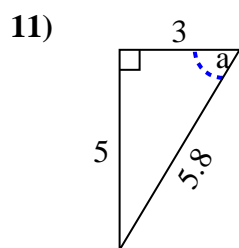
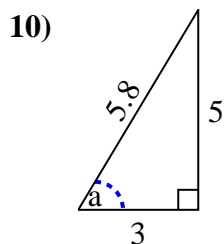
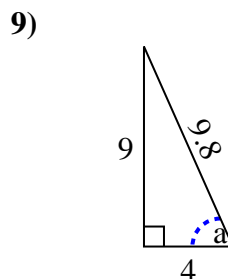
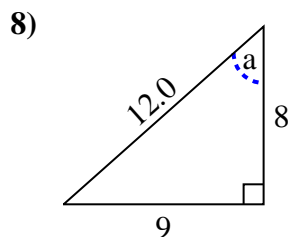
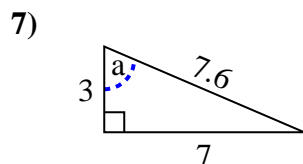
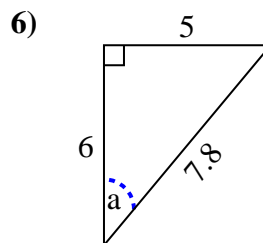
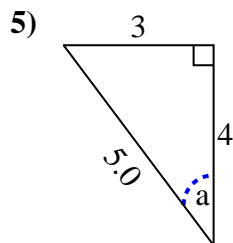
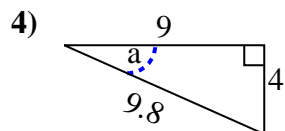
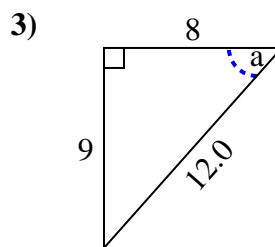
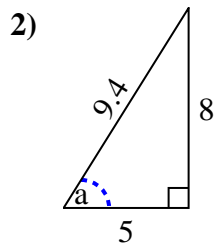
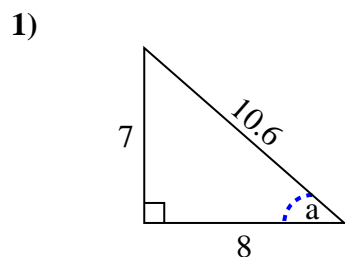


Identify the Opposite, Adjacent and Hypotenuse of Angle a.

Answers



1. \_\_\_\_\_
2. \_\_\_\_\_
3. \_\_\_\_\_
4. \_\_\_\_\_
5. \_\_\_\_\_
6. \_\_\_\_\_
7. \_\_\_\_\_
8. \_\_\_\_\_
9. \_\_\_\_\_
10. \_\_\_\_\_
11. \_\_\_\_\_
12. \_\_\_\_\_
13. \_\_\_\_\_
14. \_\_\_\_\_
15. \_\_\_\_\_

Identify the Opposite, Adjacent and Hypotenuse of Angle  $a$ .**Answers**1. 7, 8, 10.62. 8, 5, 9.43. 9, 8, 12.04. 4, 9, 9.85. 3, 4, 5.06. 5, 6, 7.87. 7, 3, 7.68. 9, 8, 12.09. 9, 4, 9.810. 5, 3, 5.811. 5, 3, 5.812. 4, 7, 8.113. 6, 5, 7.814. 3, 5, 5.815. 5, 3, 5.8