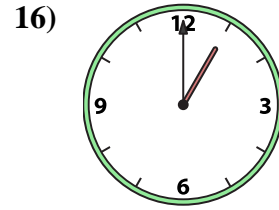
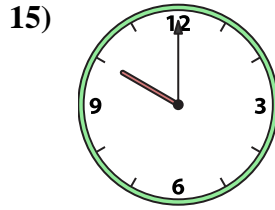
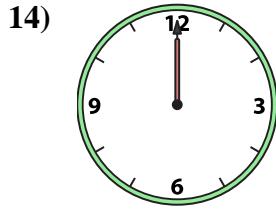
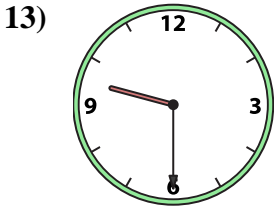
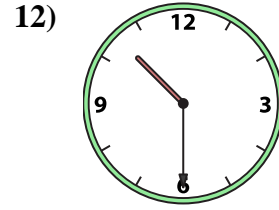
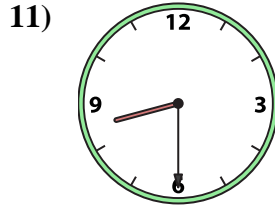
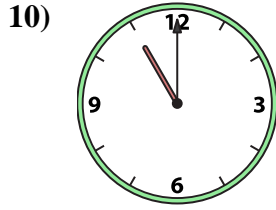
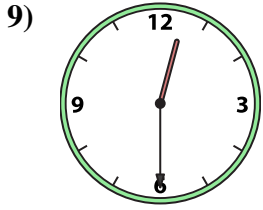
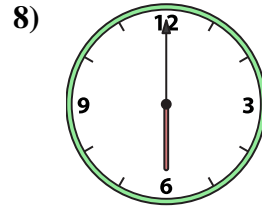
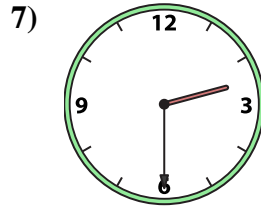
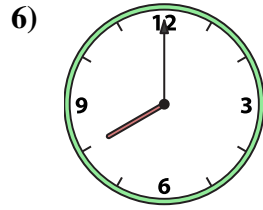
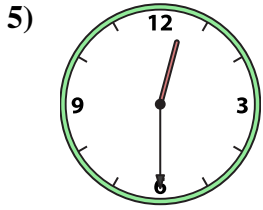
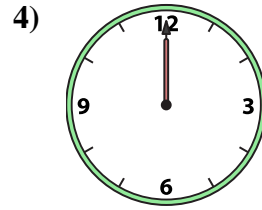
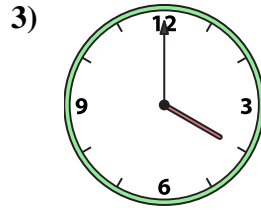
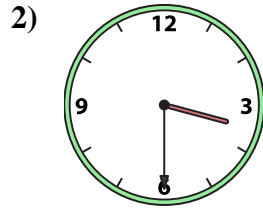
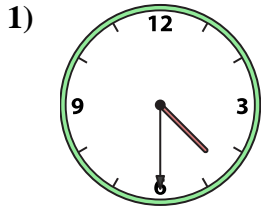




Match the analog clock to the digital clock.



A. 4:00

B. 4:30

C. 11:00

D. 1:00

E. 12:00

F. 12:30

G. 10:00

H. 3:30

I. 10:30

J. 6:00

K. 8:00

L. 8:30

M. 2:30

N. 9:30

O. 12:30

P. 12:00

Answers

1. _____

2. _____

3. _____

4. _____

5. _____

6. _____

7. _____

8. _____

9. _____

10. _____

11. _____

12. _____

13. _____

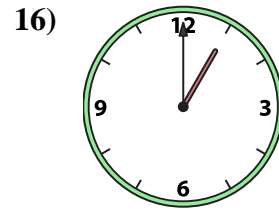
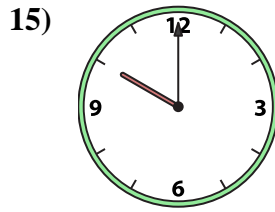
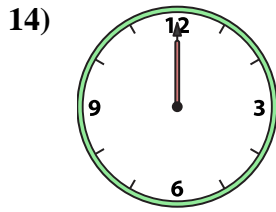
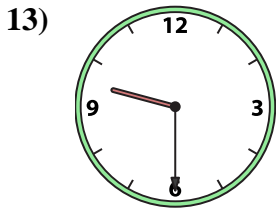
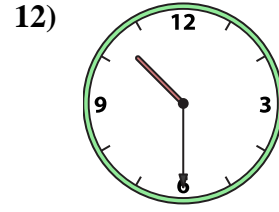
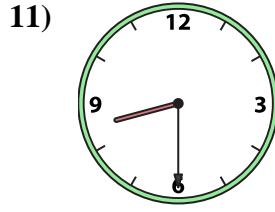
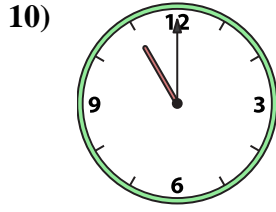
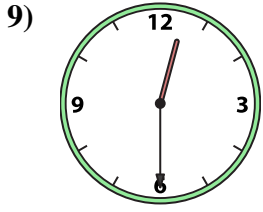
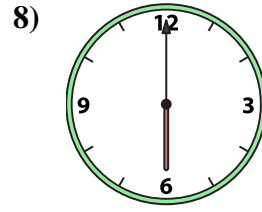
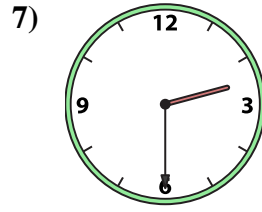
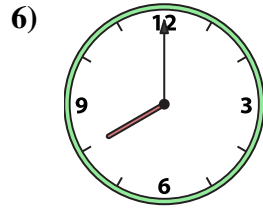
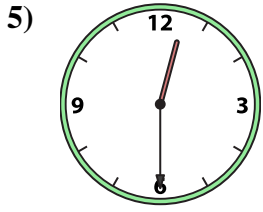
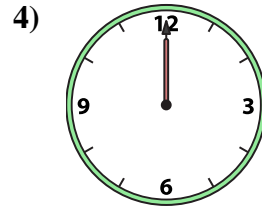
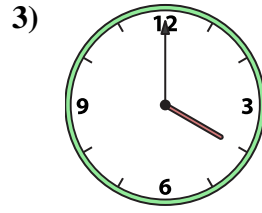
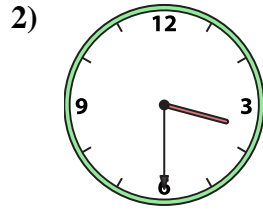
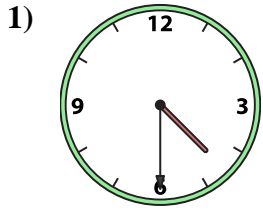
14. _____

15. _____

16. _____



Match the analog clock to the digital clock.



A. 4:00

B. 4:30

C. 11:00

D. 1:00

E. 12:00

F. 12:30

G. 10:00

H. 3:30

I. 10:30

J. 6:00

K. 8:00

L. 8:30

M. 2:30

N. 9:30

O. 12:30

P. 12:00

Answers

1. **B**

2. **H**

3. **A**

4. **P**

5. **O**

6. **K**

7. **M**

8. **J**

9. **F**

10. **C**

11. **L**

12. **I**

13. **N**

14. **E**

15. **G**

16. **D**