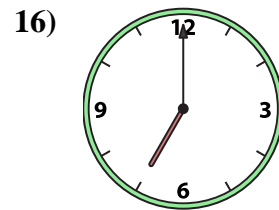
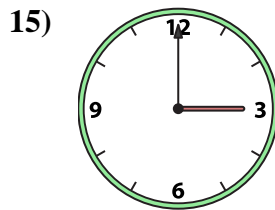
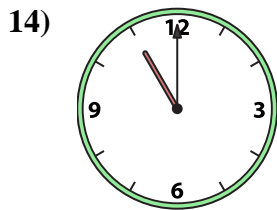
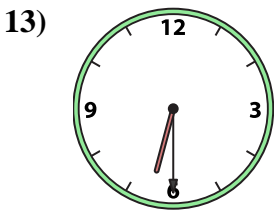
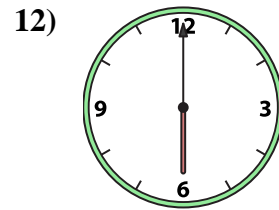
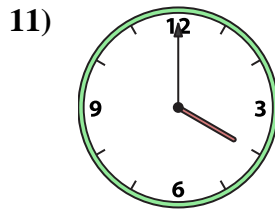
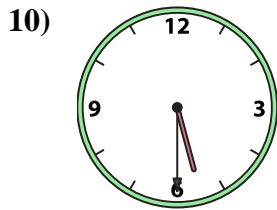

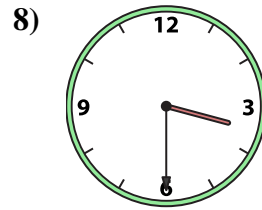
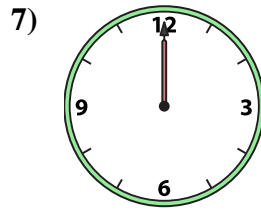
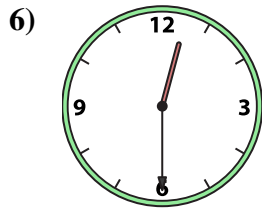
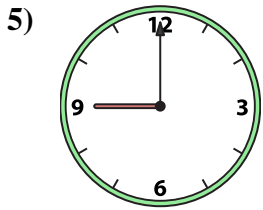
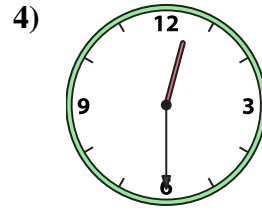
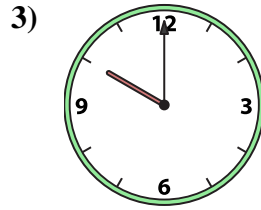
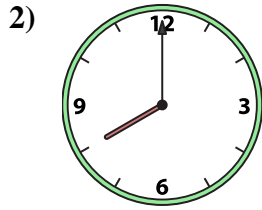




Match the analog clock to the digital clock.



A. 10:00

B. 3:30

C. 1:00

D. 12:30

E. 12:00

F. 3:00

G. 6:00

H. 5:30

I. 2:00

J. 12:30

K. 11:00

L. 9:00

M. 6:30

N. 4:00

O. 8:00

P. 7:00

**Answers**

1. \_\_\_\_\_

2. \_\_\_\_\_

3. \_\_\_\_\_

4. \_\_\_\_\_

5. \_\_\_\_\_

6. \_\_\_\_\_

7. \_\_\_\_\_

8. \_\_\_\_\_

9. \_\_\_\_\_

10. \_\_\_\_\_

11. \_\_\_\_\_

12. \_\_\_\_\_

13. \_\_\_\_\_

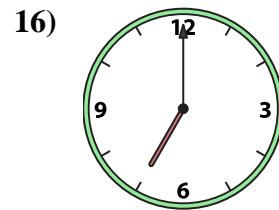
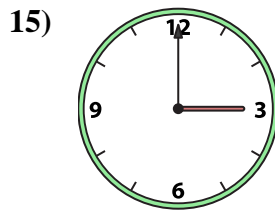
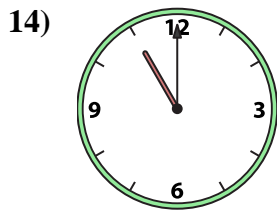
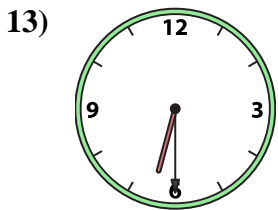
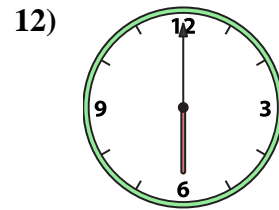
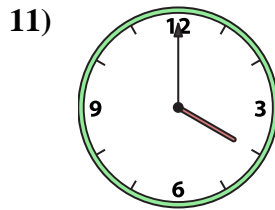
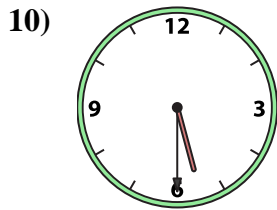

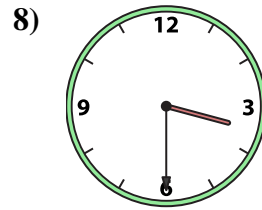
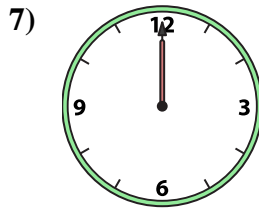
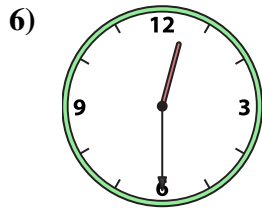
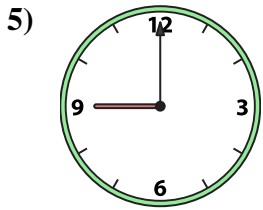
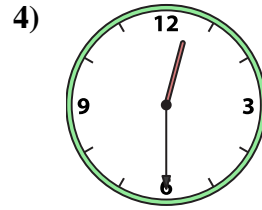
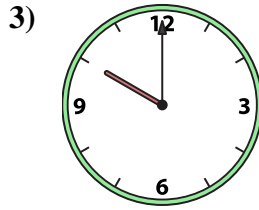
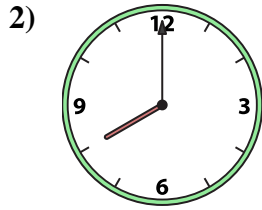
14. \_\_\_\_\_

15. \_\_\_\_\_

16. \_\_\_\_\_



Match the analog clock to the digital clock.



A. 10:00

B. 3:30

C. 1:00

D. 12:30

E. 12:00

F. 3:00

G. 6:00

H. 5:30

I. 2:00

J. 12:30

K. 11:00

L. 9:00

M. 6:30

N. 4:00

O. 8:00

P. 7:00

**Answers**

1. **C**

2. **O**

3. **A**

4. **J**

5. **L**

6. **D**

7. **E**

8. **B**

9. **I**

10. **H**

11. **N**

12. **G**

13. **M**

14. **K**

15. **F**

16. **P**