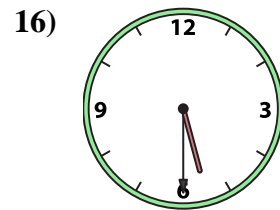
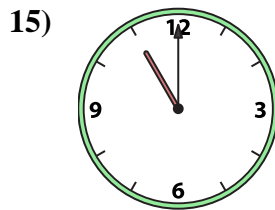
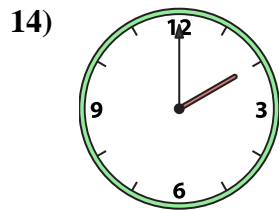
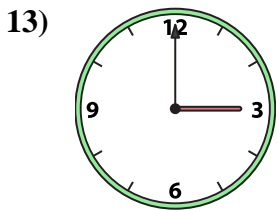
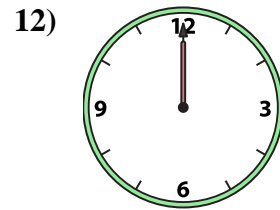
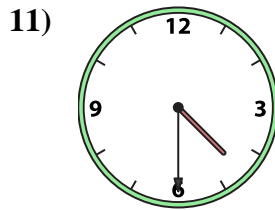
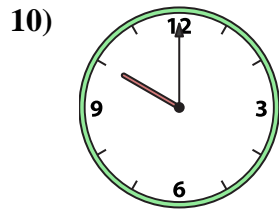
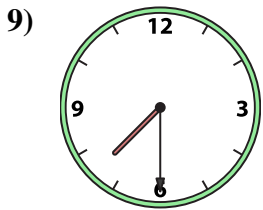
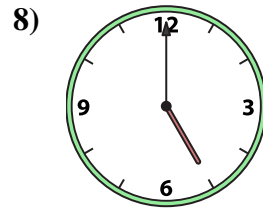
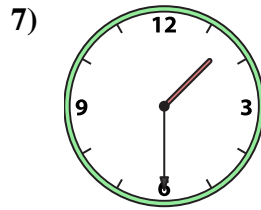
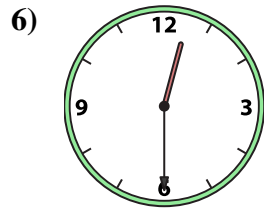
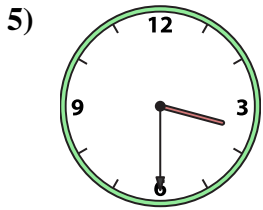
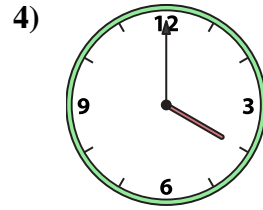
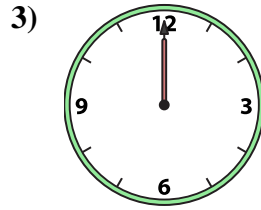
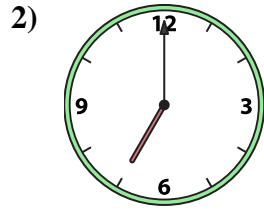





Match the analog clock to the digital clock.



A. 11:00

B. 1:00

C. 5:00

D. 4:30

E. 4:00

F. 3:30

G. 5:30

H. 7:30

I. 12:30

J. 2:00

K. 10:00

L. 7:00

M. 12:00

N. 1:30

O. 3:00

P. 12:00

**Answers**

1. \_\_\_\_\_

2. \_\_\_\_\_

3. \_\_\_\_\_

4. \_\_\_\_\_

5. \_\_\_\_\_

6. \_\_\_\_\_

7. \_\_\_\_\_

8. \_\_\_\_\_

9. \_\_\_\_\_

10. \_\_\_\_\_

11. \_\_\_\_\_

12. \_\_\_\_\_

13. \_\_\_\_\_

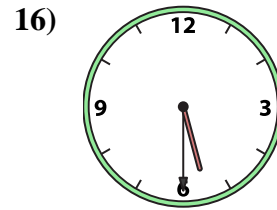
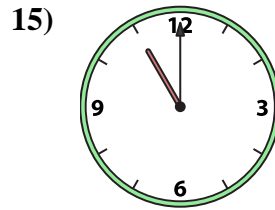
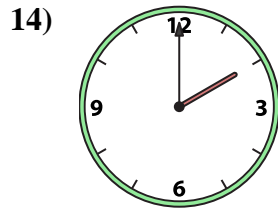
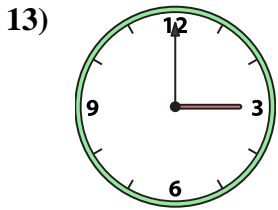
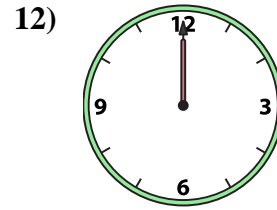
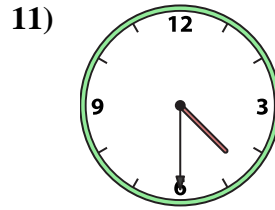
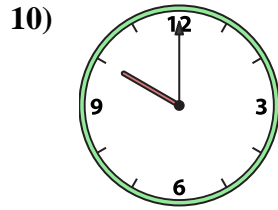
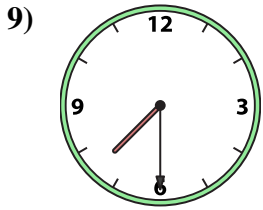
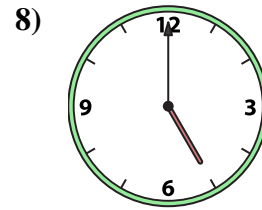
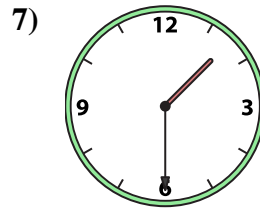
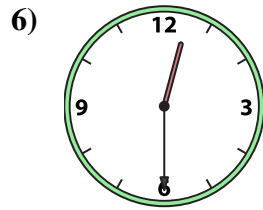
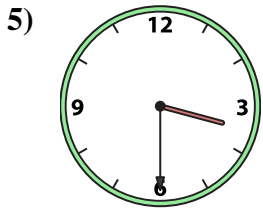
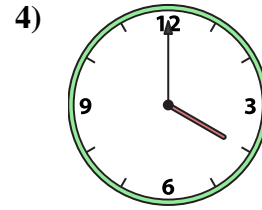
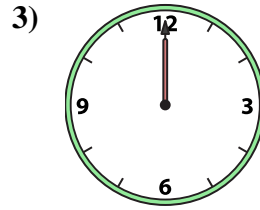
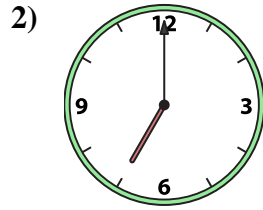

14. \_\_\_\_\_

15. \_\_\_\_\_

16. \_\_\_\_\_



Match the analog clock to the digital clock.



A. **11:00**

B. **1:00**

C. **5:00**

D. **4:30**

E. **4:00**

F. **3:30**

G. **5:30**

H. **7:30**

I. **12:30**

J. **2:00**

K. **10:00**

L. **7:00**

M. **12:00**

N. **1:30**

O. **3:00**

P. **12:00**

**Answers**

1. **B**

2. **L**

3. **M**

4. **E**

5. **F**

6. **I**

7. **N**

8. **C**

9. **H**

10. **K**

11. **D**

12. **P**

13. **O**

14. **J**

15. **A**

16. **G**