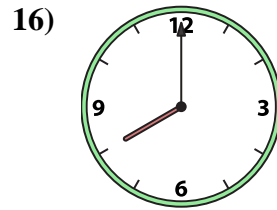
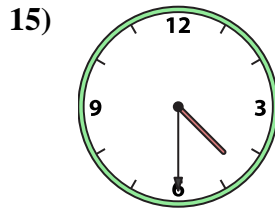
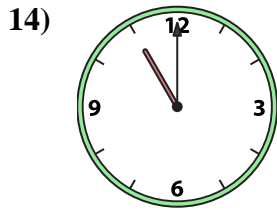
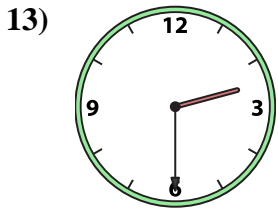
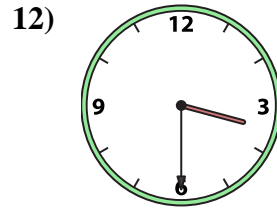
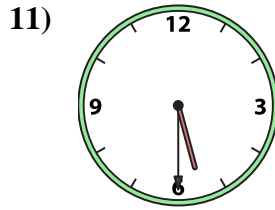
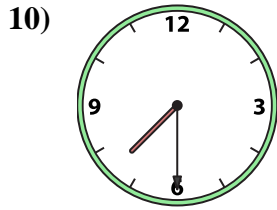
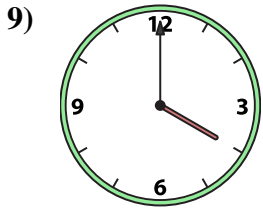
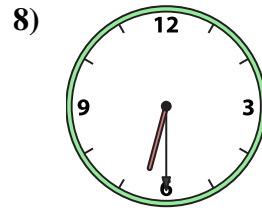
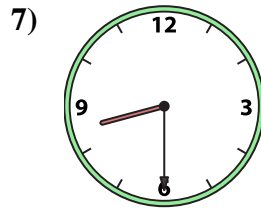
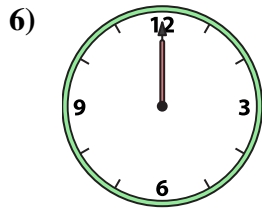
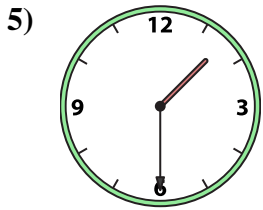
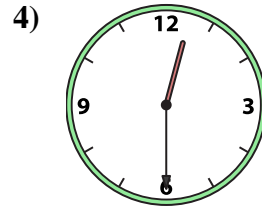
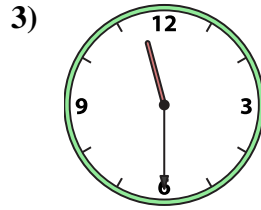
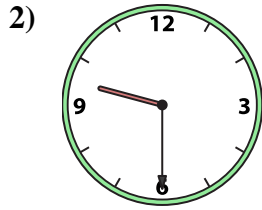





Match the analog clock to the digital clock.



A. 9:30

B. 5:30

C. 4:30

D. 11:30

E. 3:30

F. 1:30

G. 8:00

H. 1:00

I. 6:30

J. 8:30

K. 12:30

L. 12:00

M. 2:30

N. 11:00

O. 7:30

P. 4:00

**Answers**

1. \_\_\_\_\_

2. \_\_\_\_\_

3. \_\_\_\_\_

4. \_\_\_\_\_

5. \_\_\_\_\_

6. \_\_\_\_\_

7. \_\_\_\_\_

8. \_\_\_\_\_

9. \_\_\_\_\_

10. \_\_\_\_\_

11. \_\_\_\_\_

12. \_\_\_\_\_

13. \_\_\_\_\_

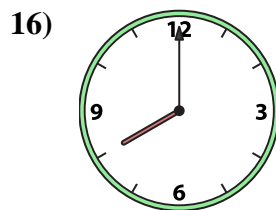
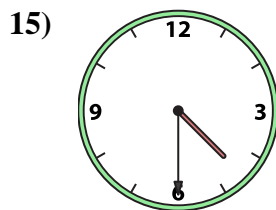
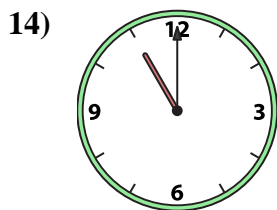
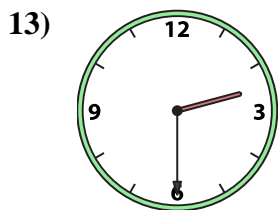
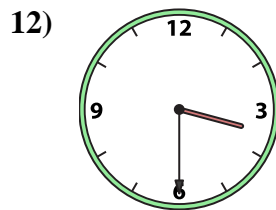
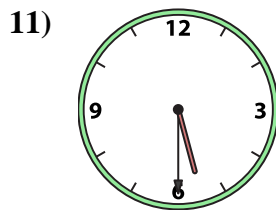
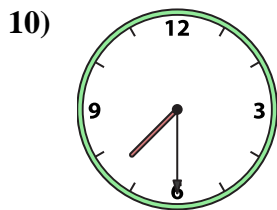
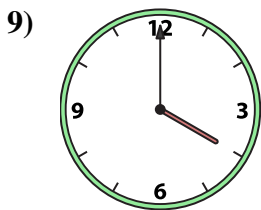
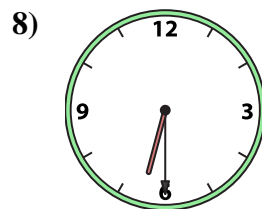
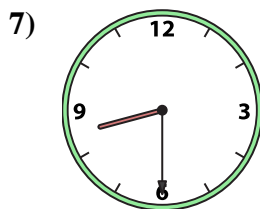
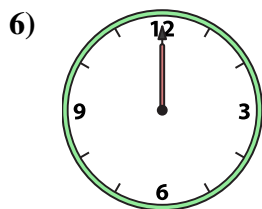
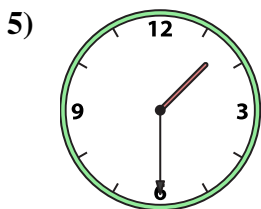
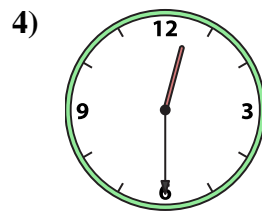
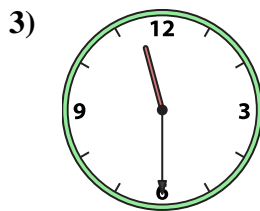
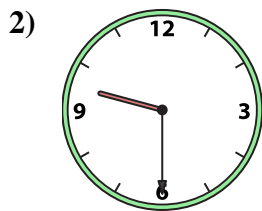

14. \_\_\_\_\_

15. \_\_\_\_\_

16. \_\_\_\_\_



Match the analog clock to the digital clock.



A. 9:30

B. 5:30

C. 4:30

D. 11:30

E. 3:30

F. 1:30

G. 8:00

H. 1:00

I. 6:30

J. 8:30

K. 12:30

L. 12:00

M. 2:30

N. 11:00

O. 7:30

P. 4:00

**Answers**

1. **H**

2. **A**

3. **D**

4. **K**

5. **F**

6. **L**

7. **J**

8. **I**

9. **P**

10. **O**

11. **B**

12. **E**

13. **M**

14. **N**

15. **C**

16. **G**