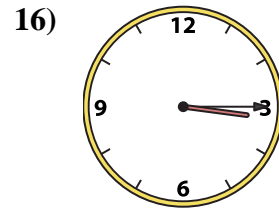
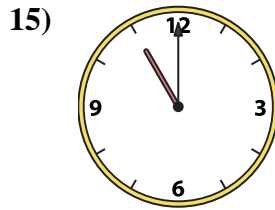
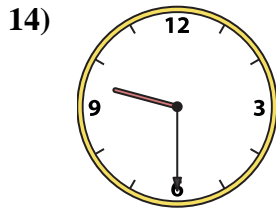
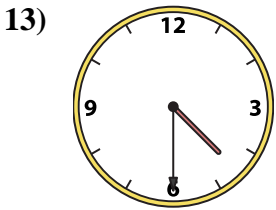
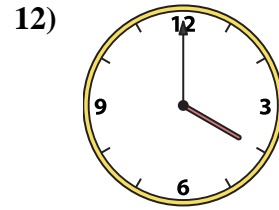
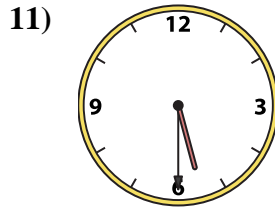
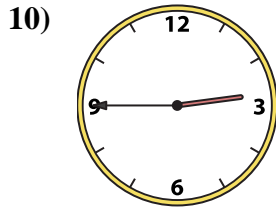
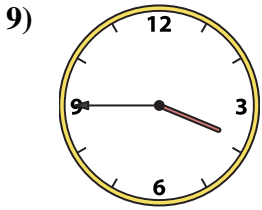
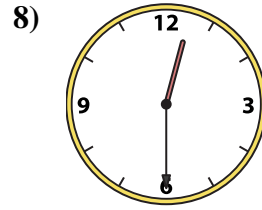
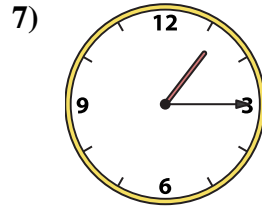
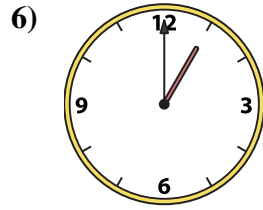
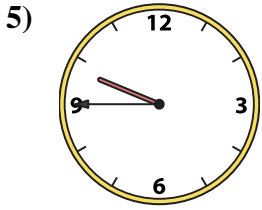
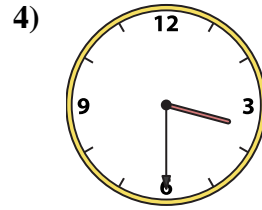
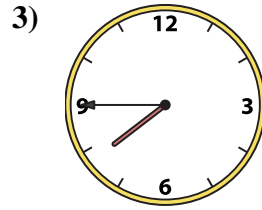
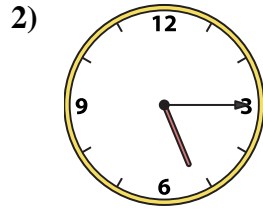
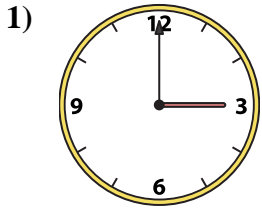




Match the analog clock to the digital clock.

Answers



1. _____
2. _____
3. _____
4. _____
5. _____
6. _____
7. _____
8. _____
9. _____
10. _____
11. _____
12. _____
13. _____
14. _____
15. _____
16. _____

A. 11:00

B. 4:00

C. 2:45

D. 1:15

E. 7:45

F. 3:30

G. 9:30

H. 4:30

I. 3:15

J. 9:45

K. 3:45

L. 1:00

M. 5:15

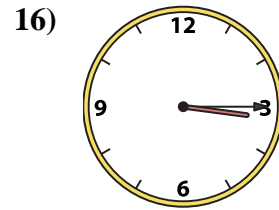
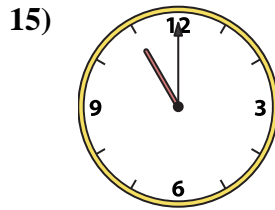
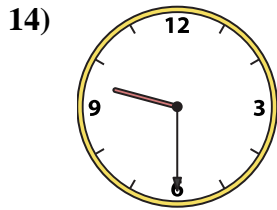
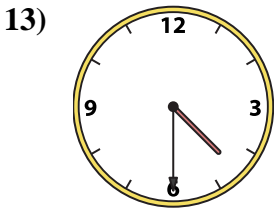
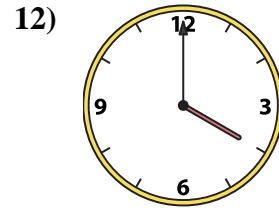
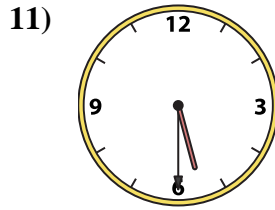
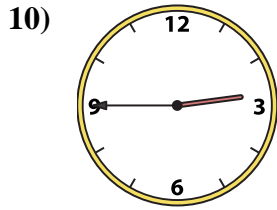
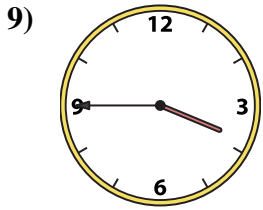
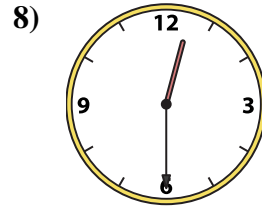
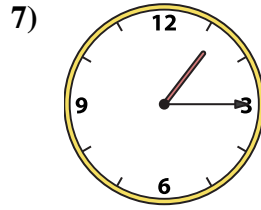

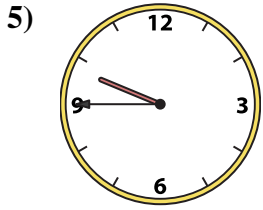
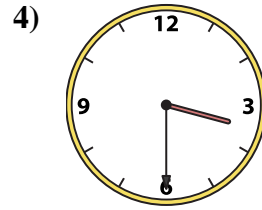
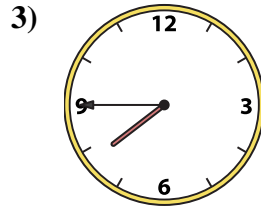
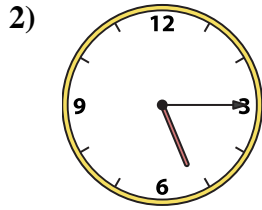
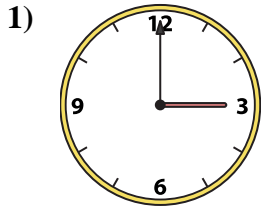
N. 12:30

O. 3:00

P. 5:30



Match the analog clock to the digital clock.



A. **11:00**

B. **4:00**

C. **2:45**

D. **1:15**

E. **7:45**

F. **3:30**

G. **9:30**

H. **4:30**

I. **3:15**

J. **9:45**

K. **3:45**

L. **1:00**

M. **5:15**

N. **12:30**

O. **3:00**

P. **5:30**

Answers

1. **O**

2. **M**

3. **E**

4. **F**

5. **J**

6. **L**

7. **D**

8. **N**

9. **K**

10. **C**

11. **P**

12. **B**

13. **H**

14. **G**

15. **A**

16. **I**