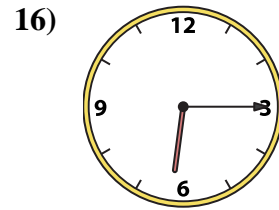
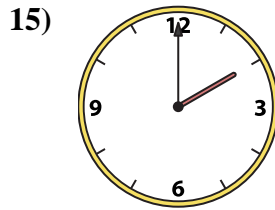
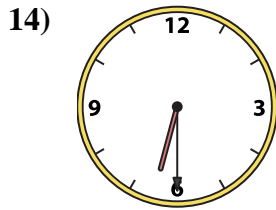
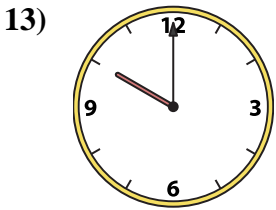
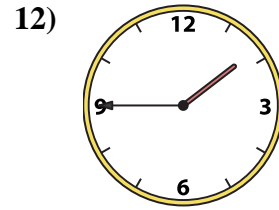
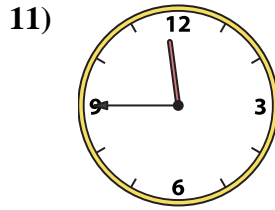
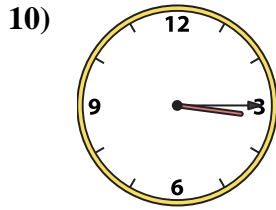
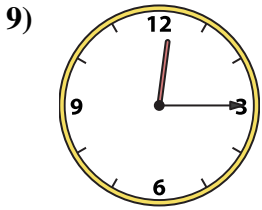
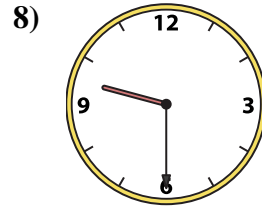
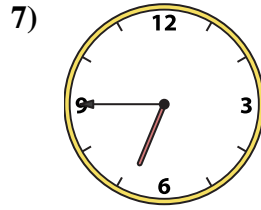
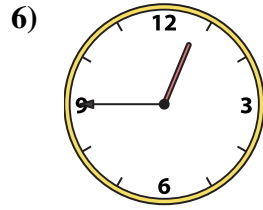
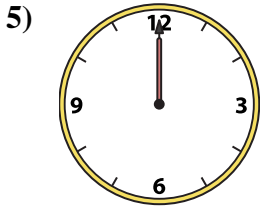
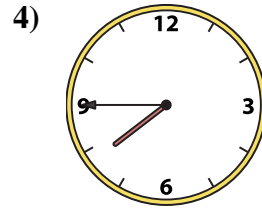
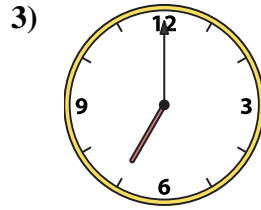
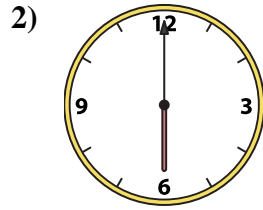
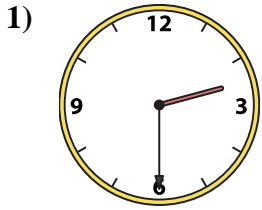




Match the analog clock to the digital clock.

Answers



A. 10:00

B. 2:30

C. 2:00

D. 3:15

E. 7:45

F. 7:00

G. 12:00

H. 12:15

I. 6:00

J. 11:45

K. 1:45

L. 9:30

M. 12:45

N. 6:30

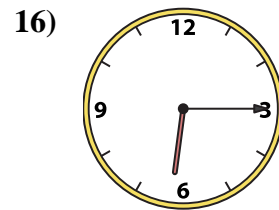
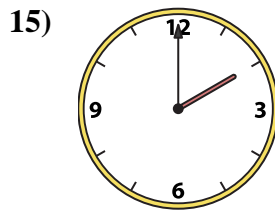
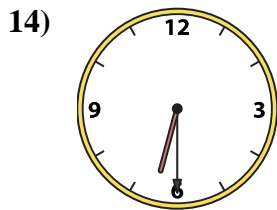
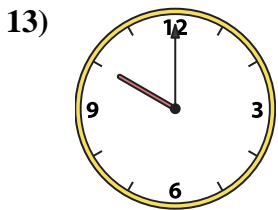
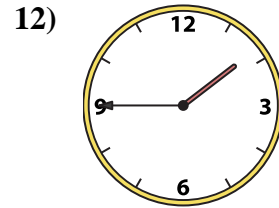
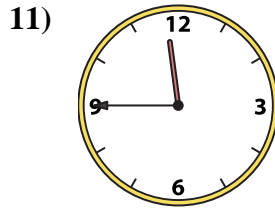
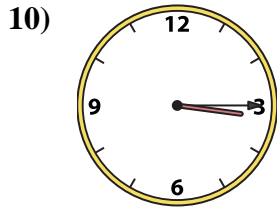
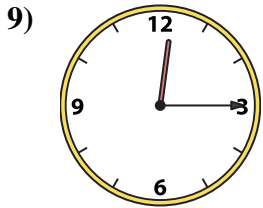
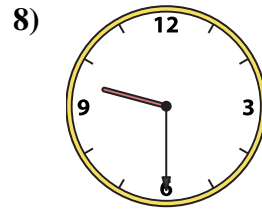
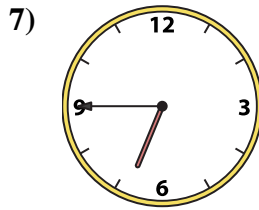
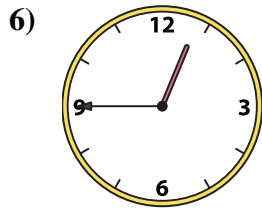
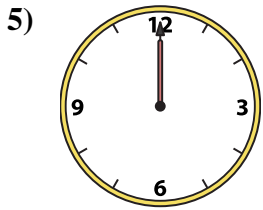
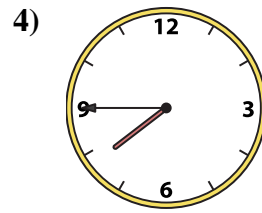
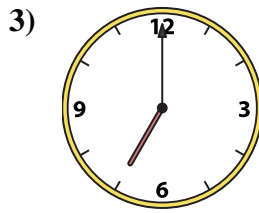
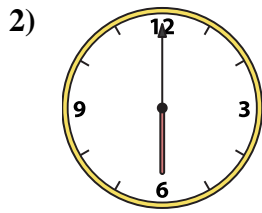
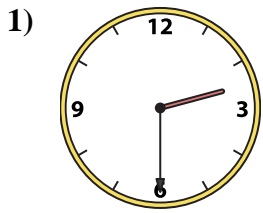
O. 6:45

P. 6:15

1. _____
2. _____
3. _____
4. _____
5. _____
6. _____
7. _____
8. _____
9. _____
10. _____
11. _____
12. _____
13. _____
14. _____
15. _____
16. _____



Match the analog clock to the digital clock.



A. **10:00**

B. **2:30**

C. **2:00**

D. **3:15**

E. **7:45**

F. **7:00**

G. **12:00**

H. **12:15**

I. **6:00**

J. **11:45**

K. **1:45**

L. **9:30**

M. **12:45**

N. **6:30**

O. **6:45**

P. **6:15**

Answers

1. **B**

2. **I**

3. **F**

4. **E**

5. **G**

6. **M**

7. **O**

8. **L**

9. **H**

10. **D**

11. **J**

12. **K**

13. **A**

14. **N**

15. **C**

16. **P**