



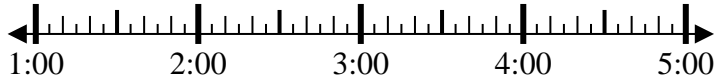
Solve each problem.

Answers

1) Start: _____

Elapsed: 1 hr & 10 mins

End: 2:30

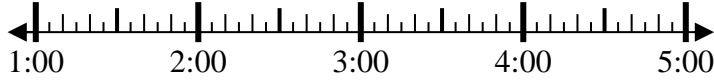


1. _____

2) Start: _____

Elapsed: 1 hr & 30 mins

End: 3:15

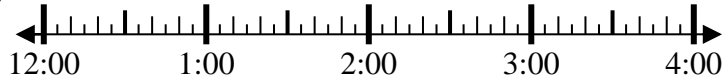


2. _____

3) Start: _____

Elapsed: 1 hr & 45 mins

End: 2:00



3. _____

4) Start: _____

Elapsed: 1 hr & 45 mins

End: 6:50



4. _____

5) Start: _____

Elapsed: 1 hr & 30 mins

End: 1:55

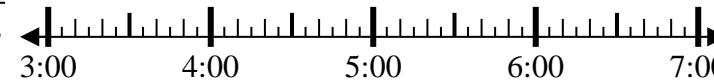


5. _____

6) Start: _____

Elapsed: 2 hrs & 15 mins

End: 5:20

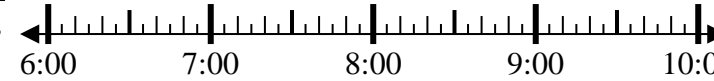


6. _____

7) Start: _____

Elapsed: 2 hrs & 15 mins

End: 8:55



7. _____

8) Start: _____

Elapsed: 1 hr & 10 mins

End: 2:10



8. _____

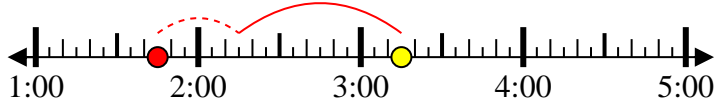


Solve each problem.

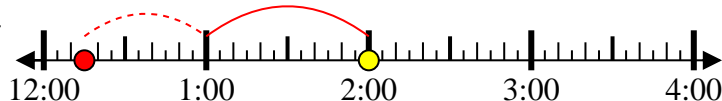
1) Start: 1:20
 Elapsed: 1 hr & 10 mins
 End: 2:30



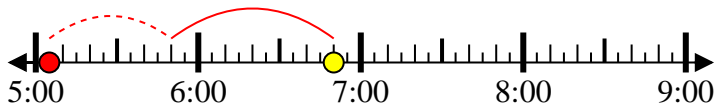
2) Start: 1:45
 Elapsed: 1 hr & 30 mins
 End: 3:15



3) Start: 12:15
 Elapsed: 1 hr & 45 mins
 End: 2:00



4) Start: 5:05
 Elapsed: 1 hr & 45 mins
 End: 6:50



5) Start: 12:25
 Elapsed: 1 hr & 30 mins
 End: 1:55



6) Start: 3:05
 Elapsed: 2 hrs & 15 mins
 End: 5:20



7) Start: 6:40
 Elapsed: 2 hrs & 15 mins
 End: 8:55



8) Start: 1:00
 Elapsed: 1 hr & 10 mins
 End: 2:10



Answers

1. 1:20

2. 1:45

3. 12:15

4. 5:05

5. 12:25

6. 3:05

7. 6:40

8. 1:00