



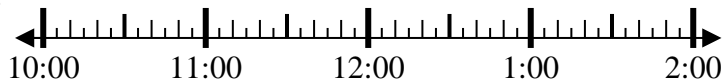
Solve each problem.

Answers

1) Start: \_\_\_\_\_

Elapsed: 2 hrs & 30 mins

End: 1:20



1. \_\_\_\_\_

2) Start: \_\_\_\_\_

Elapsed: 1 hr & 25 mins

End: 6:35

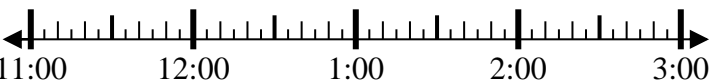


2. \_\_\_\_\_

3) Start: \_\_\_\_\_

Elapsed: 1 hr & 35 mins

End: 1:15

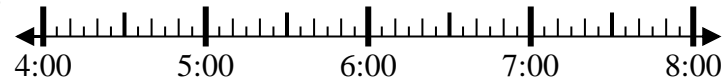


3. \_\_\_\_\_

4) Start: \_\_\_\_\_

Elapsed: 2 hrs & 15 mins

End: 6:35



4. \_\_\_\_\_

5) Start: \_\_\_\_\_

Elapsed: 2 hrs & 25 mins

End: 7:40

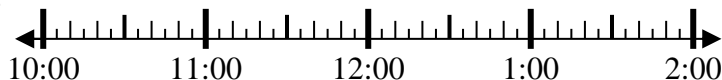


5. \_\_\_\_\_

6) Start: \_\_\_\_\_

Elapsed: 2 hrs & 35 mins

End: 12:55



6. \_\_\_\_\_

7) Start: \_\_\_\_\_

Elapsed: 2 hrs & 50 mins

End: 3:35



7. \_\_\_\_\_

8) Start: \_\_\_\_\_

Elapsed: 1 hr & 30 mins

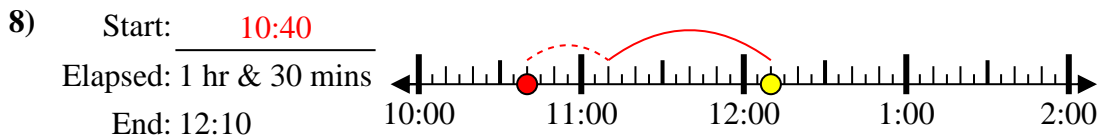
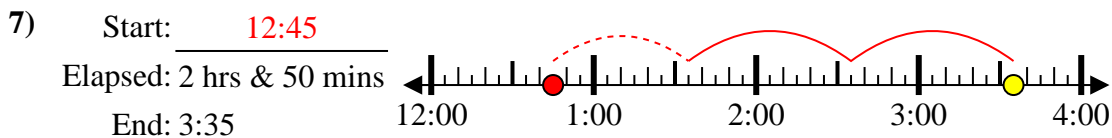
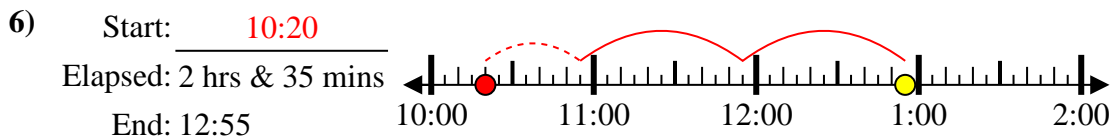
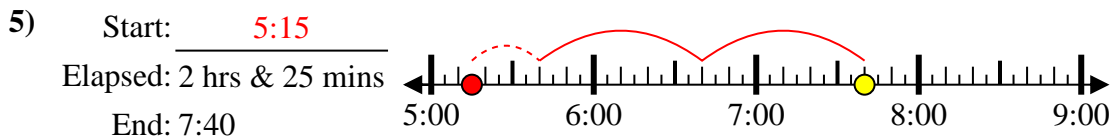
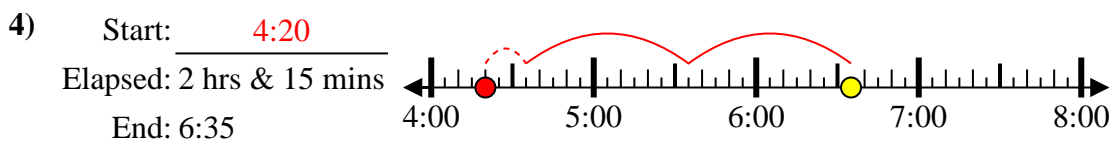
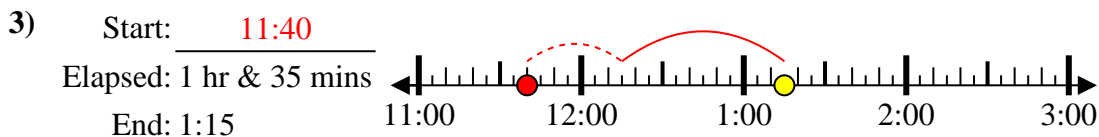
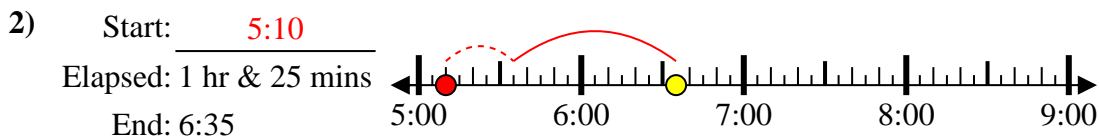
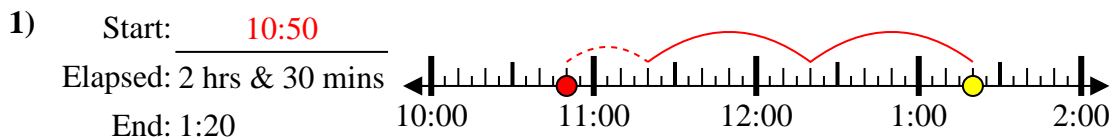
End: 12:10



8. \_\_\_\_\_



Solve each problem.



Answers

1. 10:50

2. 5:10

3. 11:40

4. 4:20

5. 5:15

6. 10:20

7. 12:45

8. 10:40