



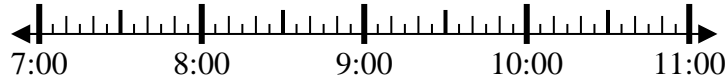
Solve each problem.

Answers

1) Start: \_\_\_\_\_

Elapsed: 2 hrs & 20 mins

End: 9:25

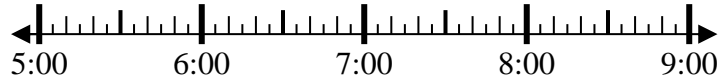


1. \_\_\_\_\_

2) Start: \_\_\_\_\_

Elapsed: 2 hrs & 20 mins

End: 7:45



2. \_\_\_\_\_

3) Start: \_\_\_\_\_

Elapsed: 1 hr & 35 mins

End: 5:50

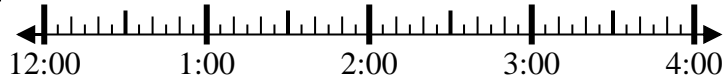


3. \_\_\_\_\_

4) Start: \_\_\_\_\_

Elapsed: 2 hrs & 40 mins

End: 2:45

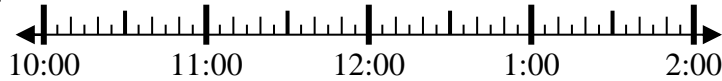


4. \_\_\_\_\_

5) Start: \_\_\_\_\_

Elapsed: 1 hr & 45 mins

End: 11:50

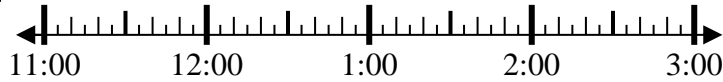


5. \_\_\_\_\_

6) Start: \_\_\_\_\_

Elapsed: 2 hrs & 15 mins

End: 2:00



6. \_\_\_\_\_

7) Start: \_\_\_\_\_

Elapsed: 1 hr & 40 mins

End: 7:05



7. \_\_\_\_\_

8) Start: \_\_\_\_\_

Elapsed: 1 hr & 15 mins

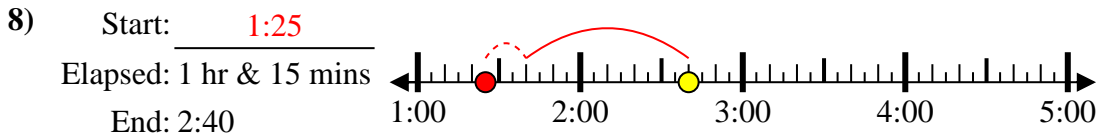
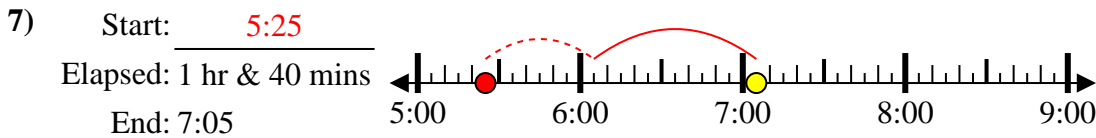
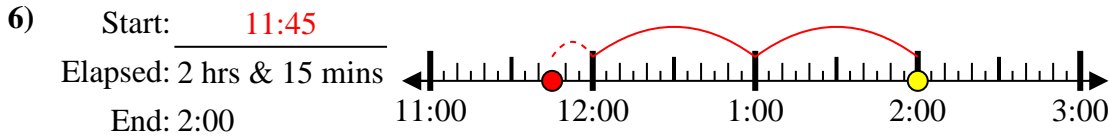
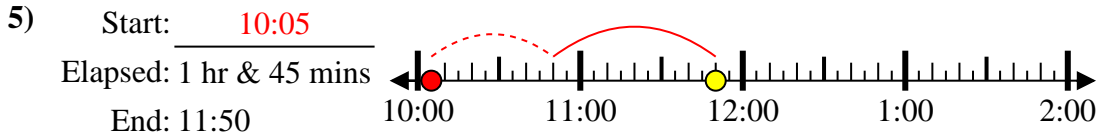
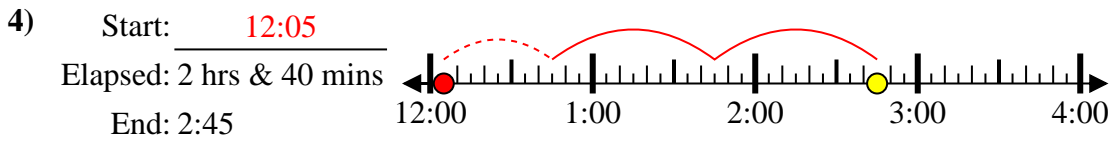
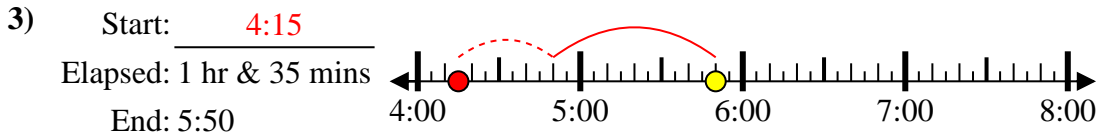
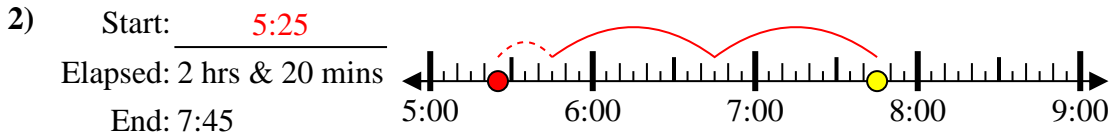
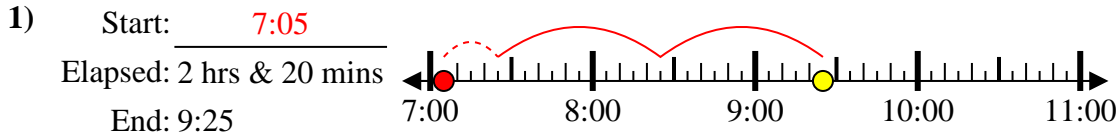
End: 2:40



8. \_\_\_\_\_



Solve each problem.



Answers

1. 7:05

2. 5:25

3. 4:15

4. 12:05

5. 10:05

6. 11:45

7. 5:25

8. 1:25