



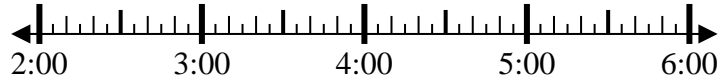
Solve each problem.

Answers

1) Start: 2:15

Elapsed: 1 hr & 40 mins

End: _____



1. _____

2) Start: 2:10

Elapsed: 2 hrs & 45 mins

End: _____



2. _____

3) Start: 2:45

Elapsed: 2 hrs & 10 mins

End: _____



3. _____

4) Start: 2:20

Elapsed: 1 hr & 20 mins

End: _____



4. _____

5) Start: 11:05

Elapsed: 2 hrs & 25 mins

End: _____

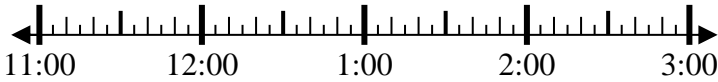


5. _____

6) Start: 11:05

Elapsed: 2 hrs & 20 mins

End: _____

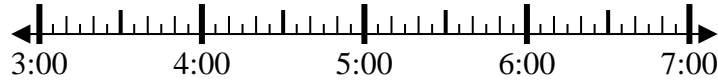


6. _____

7) Start: 3:45

Elapsed: 2 hrs & 20 mins

End: _____

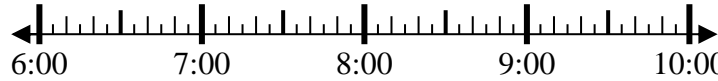


7. _____

8) Start: 6:20

Elapsed: 1 hr & 30 mins

End: _____



8. _____

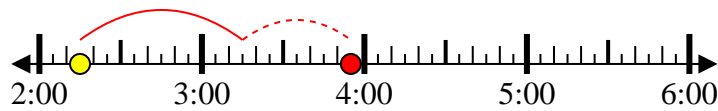


Solve each problem.

1) Start: 2:15

Elapsed: 1 hr & 40 mins

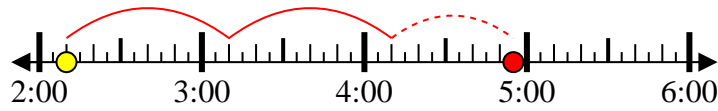
End: 3:55



2) Start: 2:10

Elapsed: 2 hrs & 45 mins

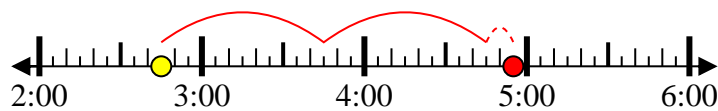
End: 4:55



3) Start: 2:45

Elapsed: 2 hrs & 10 mins

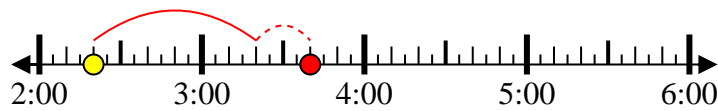
End: 4:55



4) Start: 2:20

Elapsed: 1 hr & 20 mins

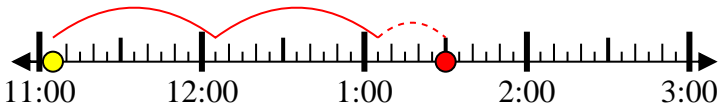
End: 3:40



5) Start: 11:05

Elapsed: 2 hrs & 25 mins

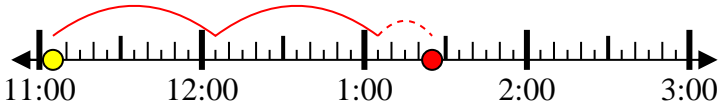
End: 1:30



6) Start: 11:05

Elapsed: 2 hrs & 20 mins

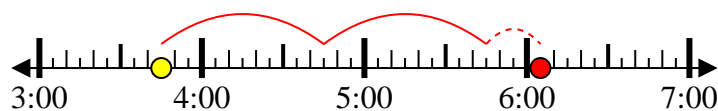
End: 1:25



7) Start: 3:45

Elapsed: 2 hrs & 20 mins

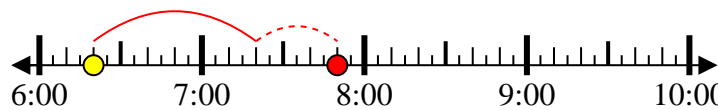
End: 6:05



8) Start: 6:20

Elapsed: 1 hr & 30 mins

End: 7:50



Answers

1. 3:55

2. 4:55

3. 4:55

4. 3:40

5. 1:30

6. 1:25

7. 6:05

8. 7:50