



Draw the hour and minute hand on the clock so it represents the time shown.

1) 2:00



2) 11:00



3) 4:45



4) 10:15



5) 12:45



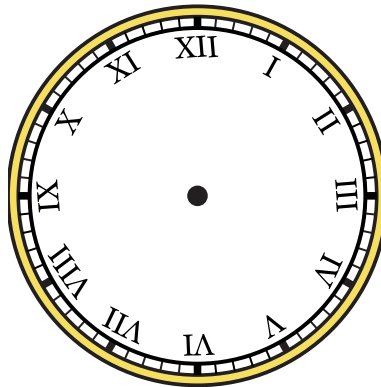
6) 4:15



7) 9:30



8) 6:00




9) 11:15






Draw the hour and minute hand on the clock so it represents the time shown.


1) 2:00




2) 11:00



3) 4:45



4) 10:15




5) 12:45



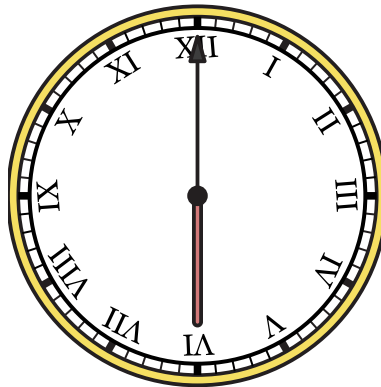
6) 4:15



7) 9:30



8) 6:00



9) 11:15

