




Determine if the shape is translating (slide), rotating (turn) or reflecting (flip).

Answers

1)



2)



3)



4)



5)



6)



7)



8)



9)



10)



11)



12)



13)



14)



15)



1. _____

2. _____

3. _____

4. _____

5. _____

6. _____

7. _____

8. _____

9. _____

10. _____

11. _____

12. _____

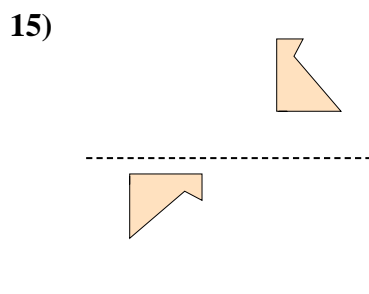
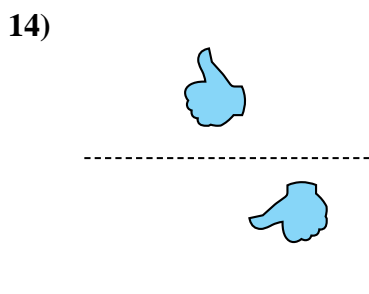
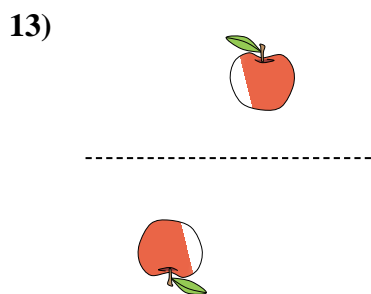
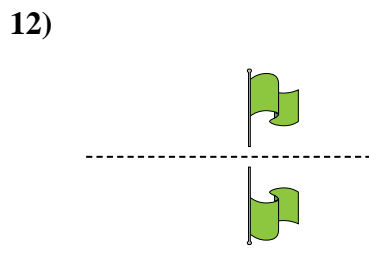
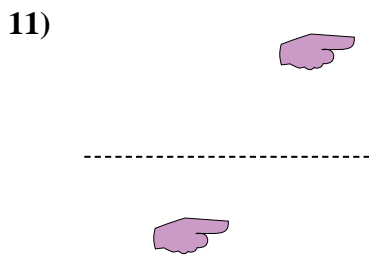
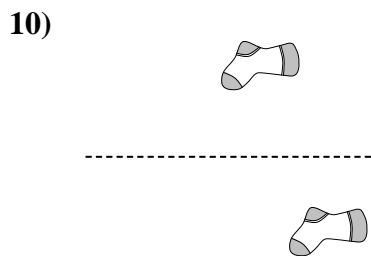
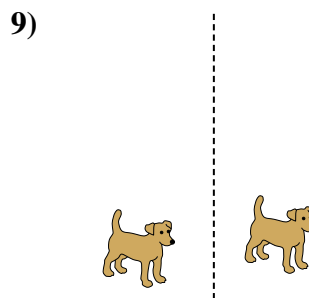
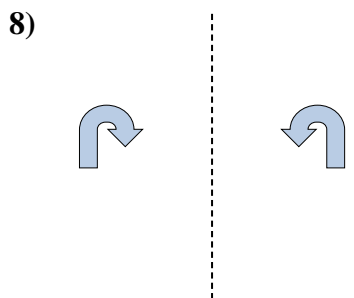
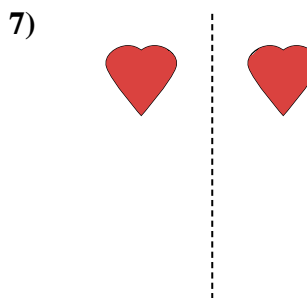
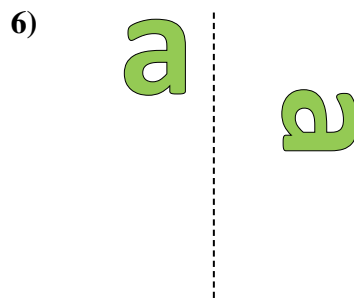
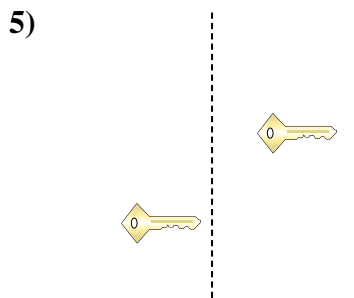
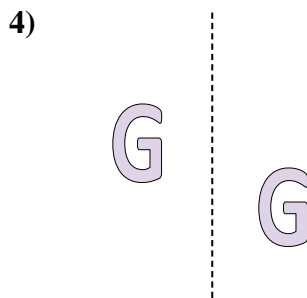
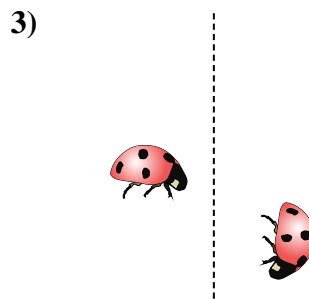
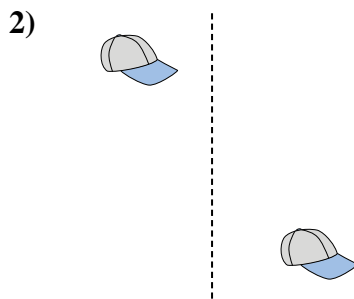
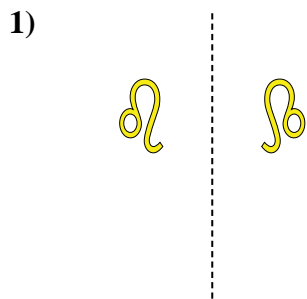
13. _____

14. _____

15. _____



Determine if the shape is translating (slide), rotating (turn) or reflecting (flip).



Answers

1. reflecting
2. translating
3. rotating
4. translating
5. translating
6. rotating
7. reflecting
8. reflecting
9. translating
10. translating
11. translating
12. reflecting
13. rotating
14. rotating
15. rotating