





Determine if the shapes shown are 'similar', 'congruent' or 'neither'.

Answers

1)




2)

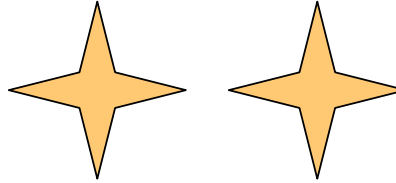


1. _____

3)




4)



2. _____

5)

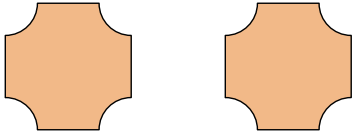


6)



3. _____

7)

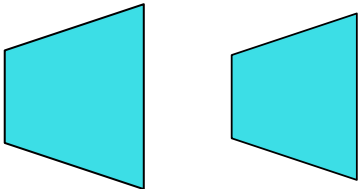


8)




4. _____

9)

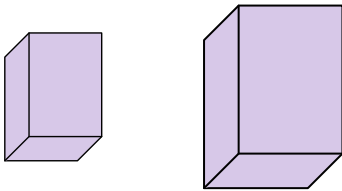


10)



5. _____

11)

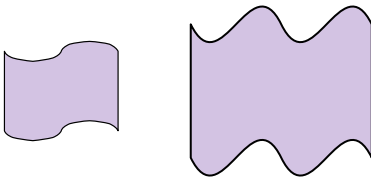


12)

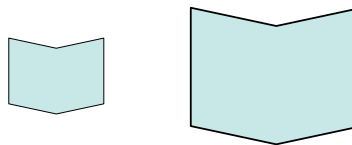


6. _____

13)

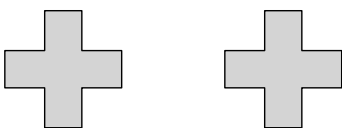


14)

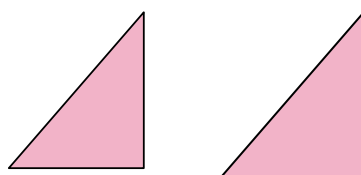


7. _____

15)



16)



8. _____

9. _____

10. _____

11. _____

12. _____

13. _____

14. _____

15. _____

16. _____




Determine if the shapes shown are 'similar', 'congruent' or 'neither'.

1)



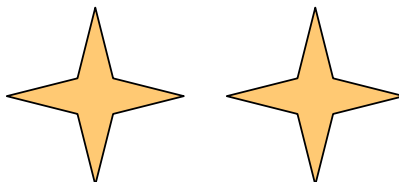
2)




3)



4)



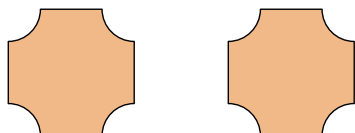
5)



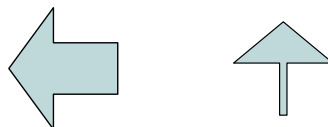
6)



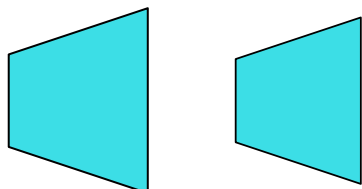
7)




8)



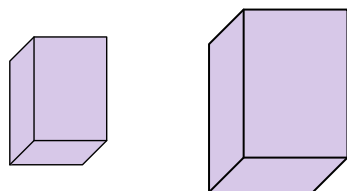
9)



10)



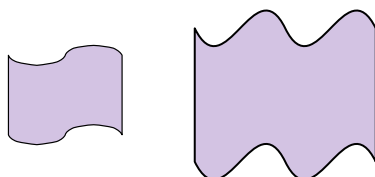
11)



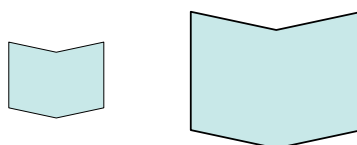
12)



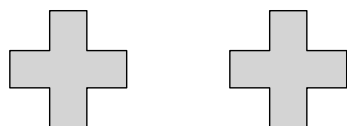
13)



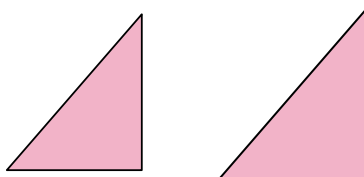
14)



15)



16)



Answers

1. congruent

2. similar

3. neither

4. congruent

5. congruent

6. similar

7. congruent

8. neither

9. similar

10. neither

11. similar

12. neither

13. neither

14. similar

15. congruent

16. similar