



Determine if the shapes shown are 'similar', 'congruent' or 'neither'.

Answers

1)



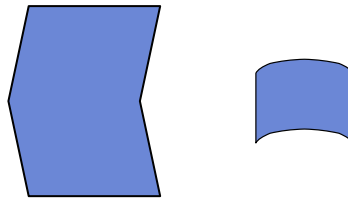
2)



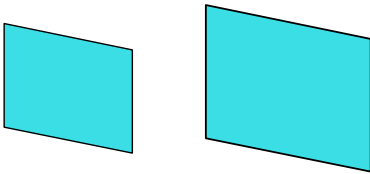
3)



4)



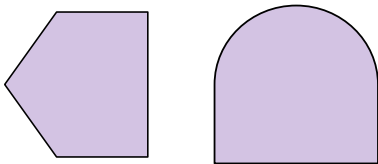
5)



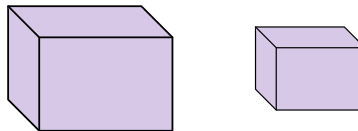
6)



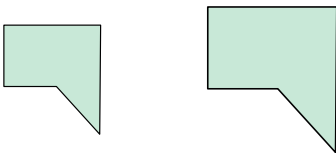
7)



8)



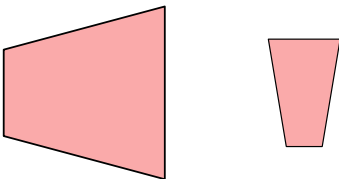
9)




10)



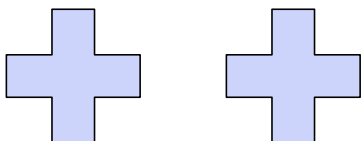
11)



12)



13)



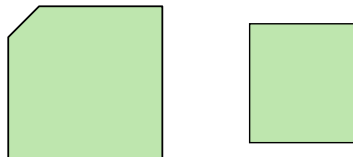
14)



15)



16)



1. _____
2. _____
3. _____
4. _____
5. _____
6. _____
7. _____
8. _____
9. _____
10. _____
11. _____
12. _____
13. _____
14. _____
15. _____
16. _____



Determine if the shapes shown are 'similar', 'congruent' or 'neither'.

1)



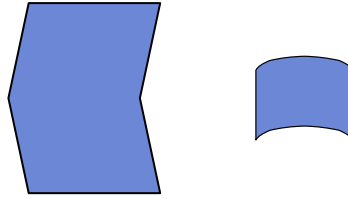
2)



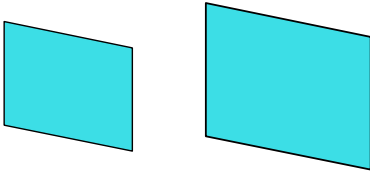
3)



4)



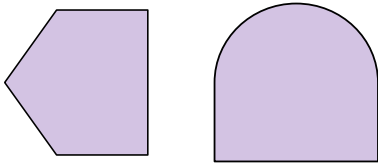
5)



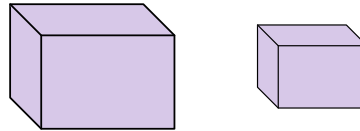
6)



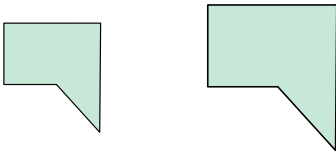
7)



8)



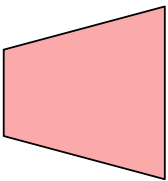
9)




10)



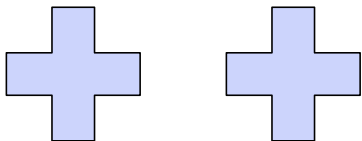
11)



12)



13)



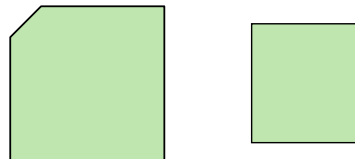
14)



15)



16)



Answers

1. similar

2. congruent

3. congruent

4. neither

5. similar

6. congruent

7. neither

8. similar

9. similar

10. congruent

11. neither

12. neither

13. congruent

14. congruent

15. similar

16. neither