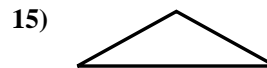
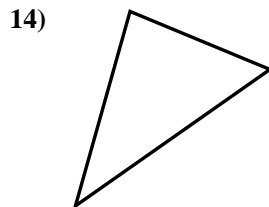

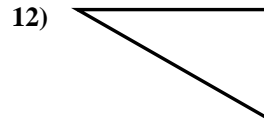
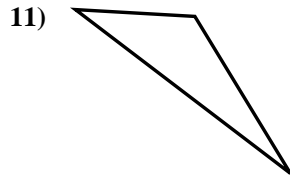
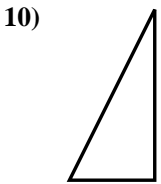
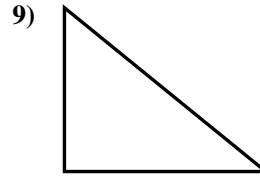
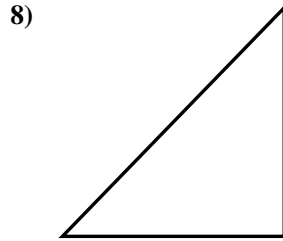
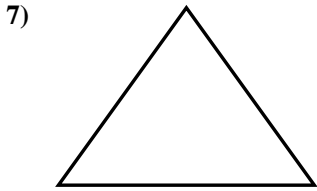
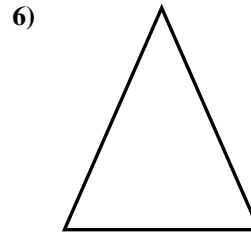
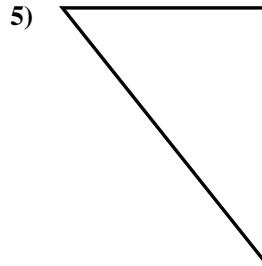
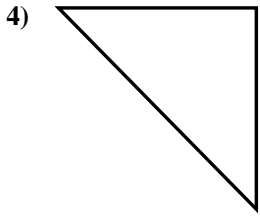
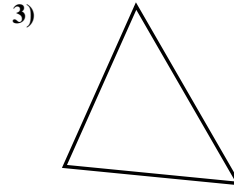
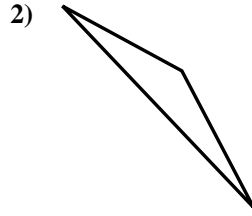
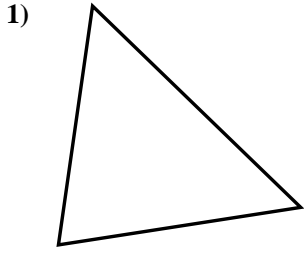




Determine if the triangle shown is a right triangle (yes) or not (no).

Answers

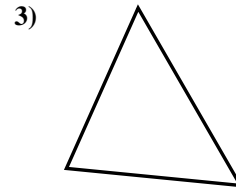
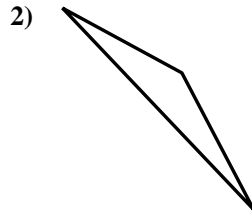
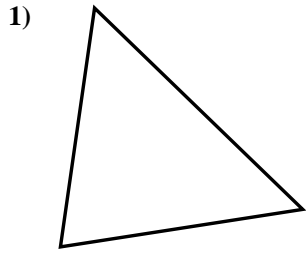


- 1. _____
- 2. _____
- 3. _____
- 4. _____
- 5. _____
- 6. _____
- 7. _____
- 8. _____
- 9. _____
- 10. _____
- 11. _____
- 12. _____
- 13. _____
- 14. _____
- 15. _____

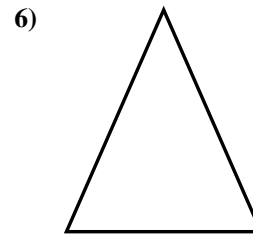
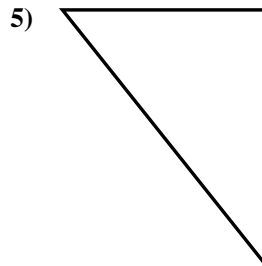
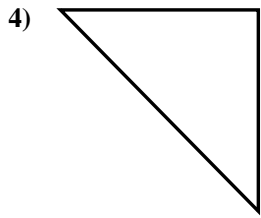


Determine if the triangle shown is a right triangle (yes) or not (no).

Answers



1. no



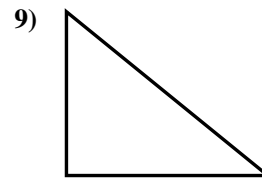
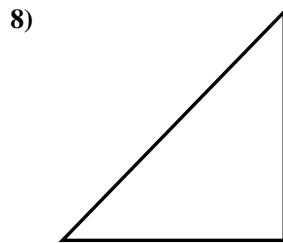
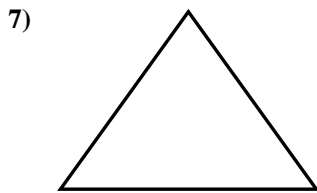
2. no

3. no

4. yes

5. yes

6. no

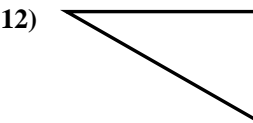
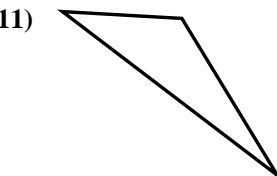
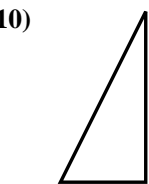


7. no

8. yes

9. yes

10. yes



11. no

12. yes

13. no

14. no

15. no

