



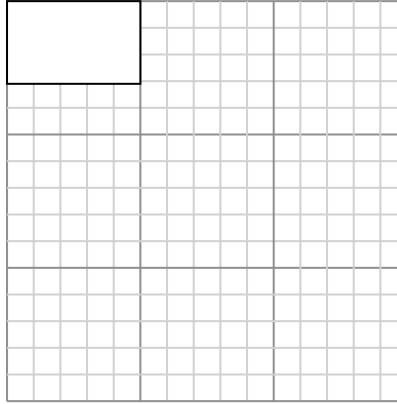
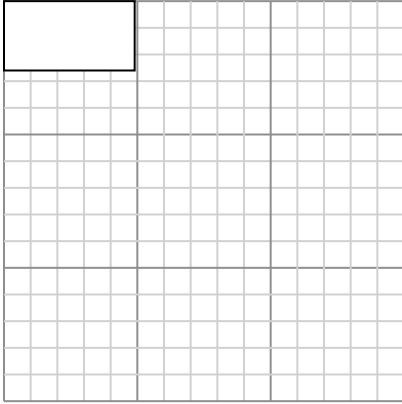
Draw each rectangle to the scale shown and determine the new dimensions.

Answers

- 1) The rectangle below has the dimensions:
 4.9×2.6

- 2) The rectangle below has the dimensions:
 5×3.1

1. _____



2. _____

3. _____

4. _____

5. _____

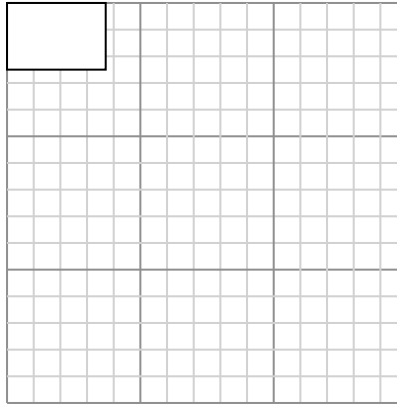
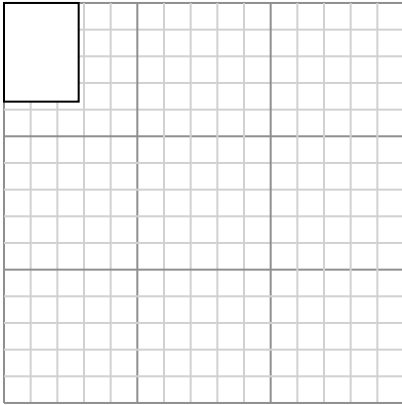
Create another rectangle that is scaled to 9 times the size of the current rectangle.

Create another rectangle that is scaled to 9 times the size of the current rectangle.

6. _____

- 3) The rectangle below has the dimensions:
 2.8×3.7

- 4) The rectangle below has the dimensions:
 3.7×2.5

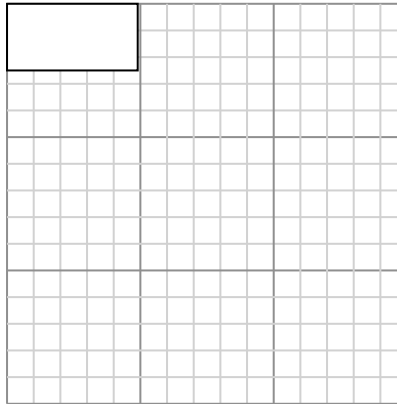
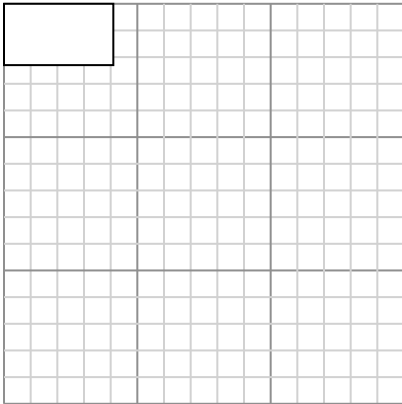


Create another rectangle that is scaled to 9 times the size of the current rectangle.

Create another rectangle that is scaled to 9 times the size of the current rectangle.

- 5) The rectangle below has the dimensions:
 4.1×2.3

- 6) The rectangle below has the dimensions:
 4.9×2.5



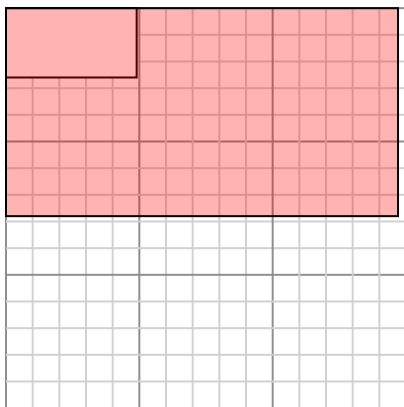
Create another rectangle that is scaled to 9 times the size of the current rectangle.

Create another rectangle that is scaled to 9 times the size of the current rectangle.



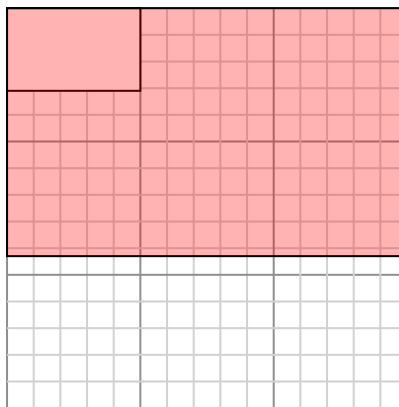
Draw each rectangle to the scale shown and determine the new dimensions.

- 1) The rectangle below has the dimensions:
 4.9×2.6



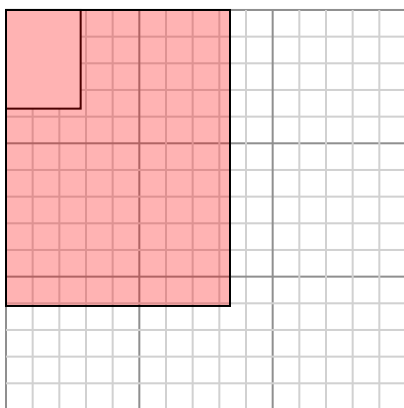
Create another rectangle that is scaled to 9 times the size of the current rectangle.

- 2) The rectangle below has the dimensions:
 5×3.1



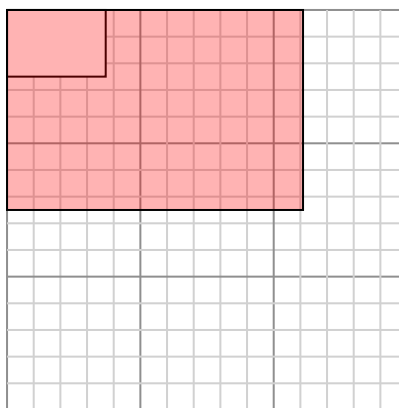
Create another rectangle that is scaled to 9 times the size of the current rectangle.

- 3) The rectangle below has the dimensions:
 2.8×3.7



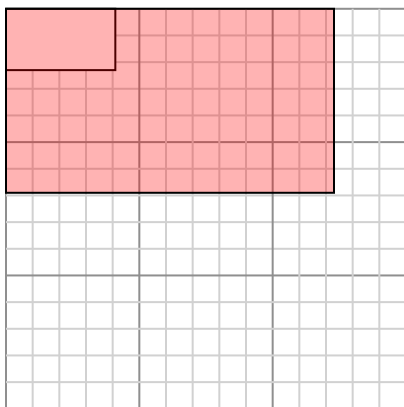
Create another rectangle that is scaled to 9 times the size of the current rectangle.

- 4) The rectangle below has the dimensions:
 3.7×2.5



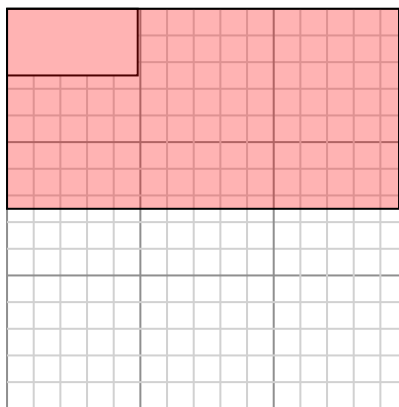
Create another rectangle that is scaled to 9 times the size of the current rectangle.

- 5) The rectangle below has the dimensions:
 4.1×2.3



Create another rectangle that is scaled to 9 times the size of the current rectangle.

- 6) The rectangle below has the dimensions:
 4.9×2.5



Create another rectangle that is scaled to 9 times the size of the current rectangle.

Answers

1. 14.7×7.8

2. 15×9.3

3. 8.4×11.1

4. 11.1×7.5

5. 12.3×6.9

6. 14.7×7.5