

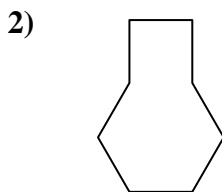


Determine which letter BEST represents the shapes that were used to create the figure shown.

Answers



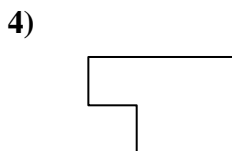
- A. hexagon & triangle
- B. quadrilateral & triangle
- C. rectangle & pentagon
- D. rectangle & octagon




- A. pentagon & square
- B. square & heptagon
- C. hexagon & square
- D. square & triangle



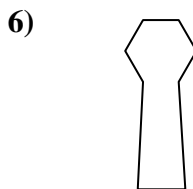
- A. quadrilateral & triangle
- B. square & quadrilateral
- C. heptagon & octagon
- D. hexagon & heptagon



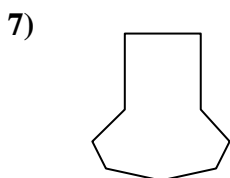
- A. rectangle & square
- B. hexagon & square
- C. quadrilateral & octagon
- D. rectangle & triangle



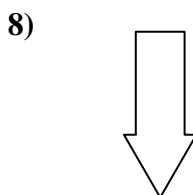
- A. triangle & triangle
- B. rectangle & hexagon
- C. pentagon & quadrilateral
- D. rectangle & quadrilateral



- A. quadrilateral & hexagon
- B. quadrilateral & heptagon
- C. hexagon & quadrilateral
- D. quadrilateral & triangle



- A. heptagon & rectangle
- B. square & rectangle
- C. heptagon & quadrilateral
- D. pentagon & octagon



- A. hexagon & octagon
- B. octagon & square
- C. triangle & pentagon
- D. rectangle & triangle

- 1. _____
- 2. _____
- 3. _____
- 4. _____
- 5. _____
- 6. _____
- 7. _____
- 8. _____

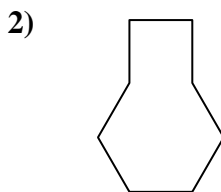


Determine which letter **BEST** represents the shapes that were used to create the figure shown.

Answers



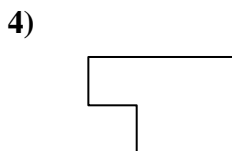
- A. hexagon & triangle
- B. quadrilateral & triangle
- C. rectangle & pentagon
- D. rectangle & octagon



- A. pentagon & square
- B. square & heptagon
- C. hexagon & square
- D. square & triangle



- A. quadrilateral & triangle
- B. square & quadrilateral
- C. heptagon & octagon
- D. hexagon & heptagon



- A. rectangle & square
- B. hexagon & square
- C. quadrilateral & octagon
- D. rectangle & triangle



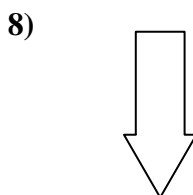
- A. triangle & triangle
- B. rectangle & hexagon
- C. pentagon & quadrilateral
- D. rectangle & quadrilateral



- A. quadrilateral & hexagon
- B. quadrilateral & heptagon
- C. hexagon & quadrilateral
- D. quadrilateral & triangle



- A. heptagon & rectangle
- B. square & rectangle
- C. heptagon & quadrilateral
- D. pentagon & octagon



- A. hexagon & octagon
- B. octagon & square
- C. triangle & pentagon
- D. rectangle & triangle

- 1. **B**
- 2. **C**
- 3. **A**
- 4. **A**
- 5. **A**
- 6. **C**
- 7. **C**
- 8. **D**