



Mark the location (approximate) on the numberline and then solve.

Answers

1) Round 60,393,636 to the nearest hundred thousand.



1. \_\_\_\_\_

2) Round 94,001 to the nearest ten thousand.



2. \_\_\_\_\_

3) Round 665 to the nearest hundred.



3. \_\_\_\_\_

4) Round 257 to the nearest hundred.



4. \_\_\_\_\_

5) Round 888,081 to the nearest ten thousand.



5. \_\_\_\_\_

6) Round 2,138 to the nearest thousand.



6. \_\_\_\_\_

7) Round 3,390 to the nearest thousand.



7. \_\_\_\_\_

8) Round 8,542,890 to the nearest ten thousand.



8. \_\_\_\_\_

9) Round 515,011 to the nearest hundred thousand.



9. \_\_\_\_\_

10) Round 962,363 to the nearest hundred.



10. \_\_\_\_\_

11) Round 656,429 to the nearest hundred thousand.



11. \_\_\_\_\_

12) Round 87,606 to the nearest ten thousand.

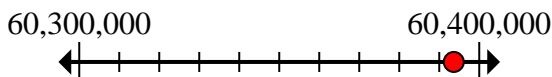


12. \_\_\_\_\_

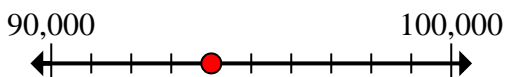


Mark the location (approximate) on the numberline and then solve.

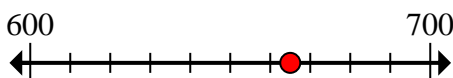
- 1) Round 60,393,636 to the nearest hundred thousand.



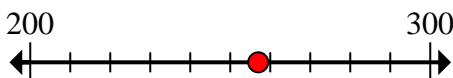
- 2) Round 94,001 to the nearest ten thousand.



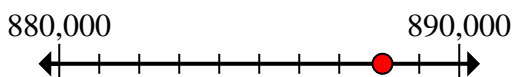
- 3) Round 665 to the nearest hundred.



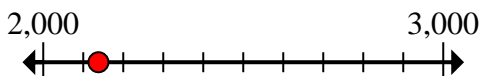
- 4) Round 257 to the nearest hundred.



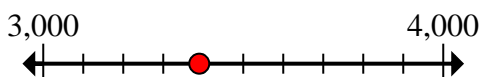
- 5) Round 888,081 to the nearest ten thousand.



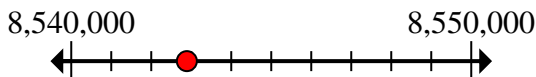
- 6) Round 2,138 to the nearest thousand.



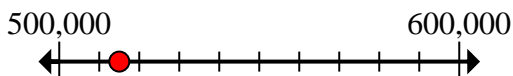
- 7) Round 3,390 to the nearest thousand.



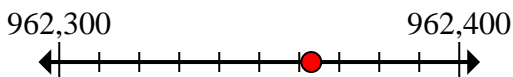
- 8) Round 8,542,890 to the nearest ten thousand.



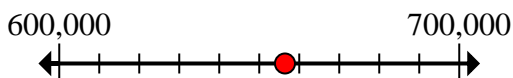
- 9) Round 515,011 to the nearest hundred thousand.



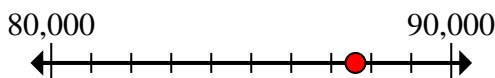
- 10) Round 962,363 to the nearest hundred.



- 11) Round 656,429 to the nearest hundred thousand.



- 12) Round 87,606 to the nearest ten thousand.

**Answers**1. **60,400,000**2. **90,000**3. **700**4. **300**5. **890,000**6. **2,000**7. **3,000**8. **8,540,000**9. **500,000**10. **962,400**11. **700,000**12. **90,000**



Mark the location (approximate) on the numberline and then solve.

**Answers**

2,000	60,400,000	700	90,000
90,000	700,000	3,000	8,540,000
962,400	300	500,000	890,000

1) Round 60,393,636 to the nearest hundred thousand.



2) Round 94,001 to the nearest ten thousand.



3) Round 665 to the nearest hundred.



4) Round 257 to the nearest hundred.



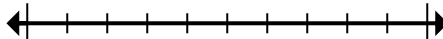
5) Round 888,081 to the nearest ten thousand.



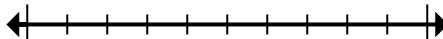
6) Round 2,138 to the nearest thousand.



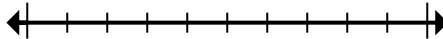
7) Round 3,390 to the nearest thousand.



8) Round 8,542,890 to the nearest ten thousand.



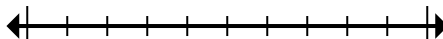
9) Round 515,011 to the nearest hundred thousand.



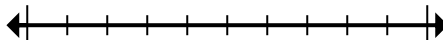
10) Round 962,363 to the nearest hundred.



11) Round 656,429 to the nearest hundred thousand.



12) Round 87,606 to the nearest ten thousand.



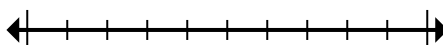
1. \_\_\_\_\_
2. \_\_\_\_\_
3. \_\_\_\_\_
4. \_\_\_\_\_
5. \_\_\_\_\_
6. \_\_\_\_\_
7. \_\_\_\_\_
8. \_\_\_\_\_
9. \_\_\_\_\_
10. \_\_\_\_\_
11. \_\_\_\_\_
12. \_\_\_\_\_



Mark the location (approximate) on the numberline and then solve.

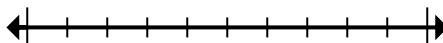
Answers

1) Round 41,495,881 to the nearest hundred thousand.



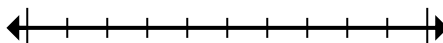
1. \_\_\_\_\_

2) Round 42,268 to the nearest hundred.



2. \_\_\_\_\_

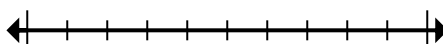
3) Round 62,956 to the nearest ten thousand.



3. \_\_\_\_\_

4. \_\_\_\_\_

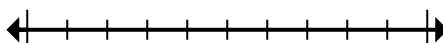
4) Round 793,025 to the nearest thousand.



5. \_\_\_\_\_

6. \_\_\_\_\_

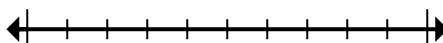
5) Round 6,486 to the nearest thousand.



7. \_\_\_\_\_

8. \_\_\_\_\_

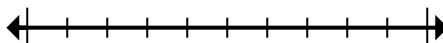
6) Round 946,794 to the nearest ten thousand.



9. \_\_\_\_\_

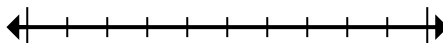
10. \_\_\_\_\_

7) Round 56,647 to the nearest hundred.



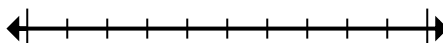
11. \_\_\_\_\_

8) Round 493 to the nearest hundred.

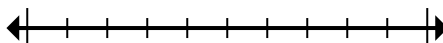


12. \_\_\_\_\_

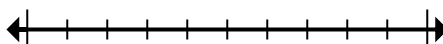
9) Round 937,248 to the nearest hundred thousand.



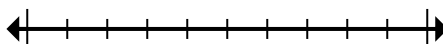
10) Round 8,994 to the nearest thousand.



11) Round 81,576,640 to the nearest hundred thousand.



12) Round 824,415 to the nearest thousand.

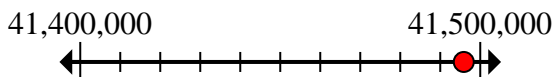




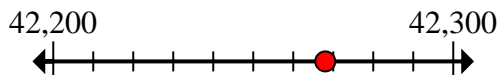
Mark the location (approximate) on the numberline and then solve.

Answers

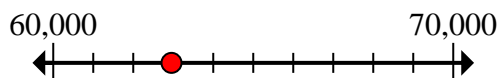
- 1) Round 41,495,881 to the nearest hundred thousand.

1. 41,500,000

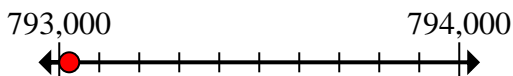
- 2) Round 42,268 to the nearest hundred.

2. 42,300

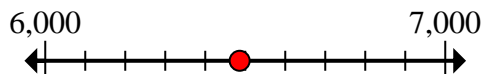
- 3) Round 62,956 to the nearest ten thousand.

3. 60,000

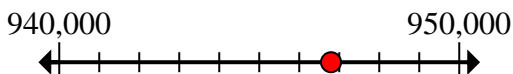
- 4) Round 793,025 to the nearest thousand.

4. 793,000

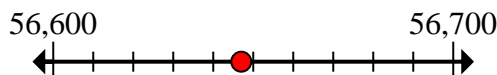
- 5) Round 6,486 to the nearest thousand.

5. 6,000

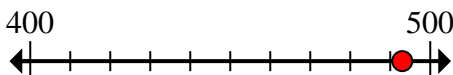
- 6) Round 946,794 to the nearest ten thousand.

6. 950,000

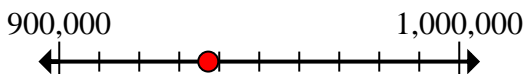
- 7) Round 56,647 to the nearest hundred.

7. 56,600

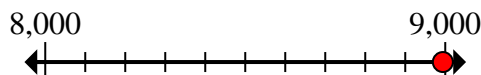
- 8) Round 493 to the nearest hundred.

8. 500

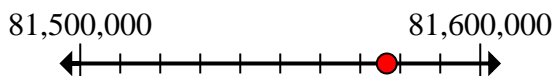
- 9) Round 937,248 to the nearest hundred thousand.

9. 900,000

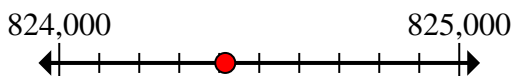
- 10) Round 8,994 to the nearest thousand.

10. 9,000

- 11) Round 81,576,640 to the nearest hundred thousand.

11. 81,600,000

- 12) Round 824,415 to the nearest thousand.

12. 824,000

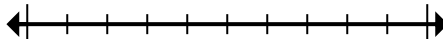


Mark the location (approximate) on the numberline and then solve.

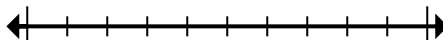
**Answers**

900,000	56,600	81,600,000	9,000
6,000	500	793,000	60,000
824,000	41,500,000	950,000	42,300

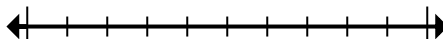
1) Round 41,495,881 to the nearest hundred thousand.



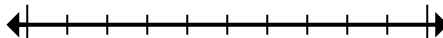
2) Round 42,268 to the nearest hundred.



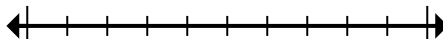
3) Round 62,956 to the nearest ten thousand.



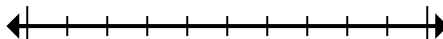
4) Round 793,025 to the nearest thousand.



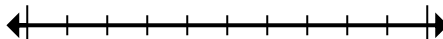
5) Round 6,486 to the nearest thousand.



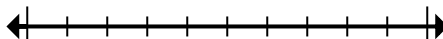
6) Round 946,794 to the nearest ten thousand.



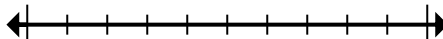
7) Round 56,647 to the nearest hundred.



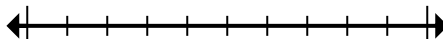
8) Round 493 to the nearest hundred.



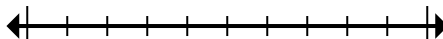
9) Round 937,248 to the nearest hundred thousand.



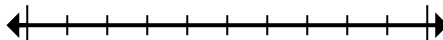
10) Round 8,994 to the nearest thousand.



11) Round 81,576,640 to the nearest hundred thousand.



12) Round 824,415 to the nearest thousand.



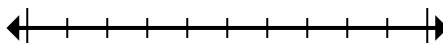
1. \_\_\_\_\_
2. \_\_\_\_\_
3. \_\_\_\_\_
4. \_\_\_\_\_
5. \_\_\_\_\_
6. \_\_\_\_\_
7. \_\_\_\_\_
8. \_\_\_\_\_
9. \_\_\_\_\_
10. \_\_\_\_\_
11. \_\_\_\_\_
12. \_\_\_\_\_



Mark the location (approximate) on the numberline and then solve.

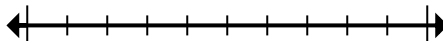
Answers

1) Round 52,817 to the nearest ten thousand.



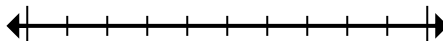
1. \_\_\_\_\_

2) Round 820,860 to the nearest hundred.



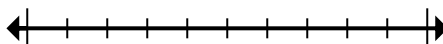
2. \_\_\_\_\_

3) Round 666,641 to the nearest ten thousand.



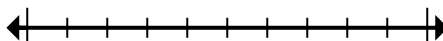
3. \_\_\_\_\_

4) Round 9,506 to the nearest thousand.



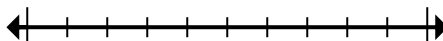
4. \_\_\_\_\_

5) Round 453,975 to the nearest hundred thousand.



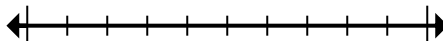
5. \_\_\_\_\_

6) Round 534,644 to the nearest hundred thousand.



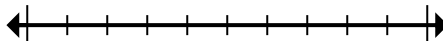
6. \_\_\_\_\_

7) Round 40,673,282 to the nearest hundred thousand.



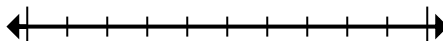
7. \_\_\_\_\_

8) Round 126,324 to the nearest ten thousand.



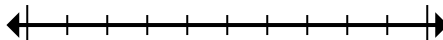
8. \_\_\_\_\_

9) Round 950 to the nearest hundred.



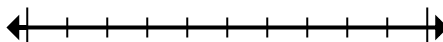
9. \_\_\_\_\_

10) Round 728,779 to the nearest thousand.



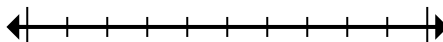
10. \_\_\_\_\_

11) Round 82,189 to the nearest ten thousand.



11. \_\_\_\_\_

12) Round 681,152 to the nearest thousand.

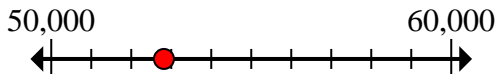


12. \_\_\_\_\_

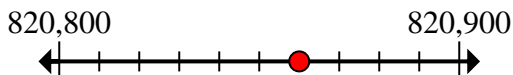


Mark the location (approximate) on the numberline and then solve.

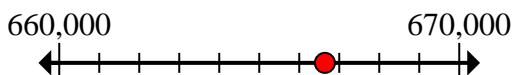
- 1) Round 52,817 to the nearest ten thousand.



- 2) Round 820,860 to the nearest hundred.



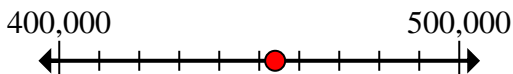
- 3) Round 666,641 to the nearest ten thousand.



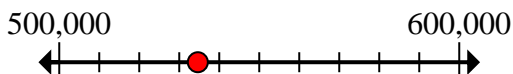
- 4) Round 9,506 to the nearest thousand.



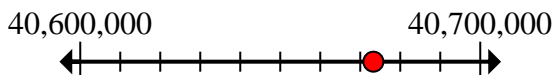
- 5) Round 453,975 to the nearest hundred thousand.



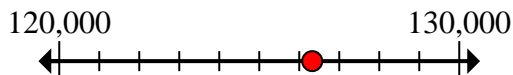
- 6) Round 534,644 to the nearest hundred thousand.



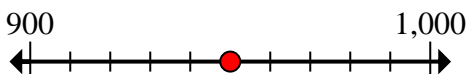
- 7) Round 40,673,282 to the nearest hundred thousand.



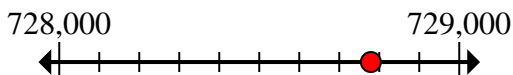
- 8) Round 126,324 to the nearest ten thousand.



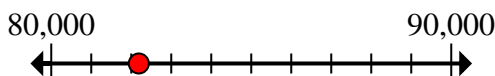
- 9) Round 950 to the nearest hundred.



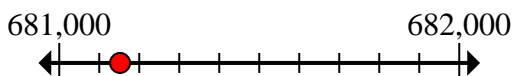
- 10) Round 728,779 to the nearest thousand.



- 11) Round 82,189 to the nearest ten thousand.



- 12) Round 681,152 to the nearest thousand.

**Answers**1. 50,0002. 820,9003. 670,0004. 10,0005. 500,0006. 500,0007. 40,700,0008. 130,0009. 1,00010. 729,00011. 80,00012. 681,000



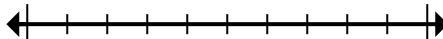


Mark the location (approximate) on the numberline and then solve.

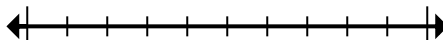
**Answers**

670,000	80,000	681,000	729,000
500,000	130,000	50,000	10,000
40,700,000	500,000	1,000	820,900

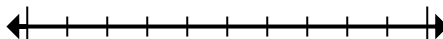
1) Round 52,817 to the nearest ten thousand.



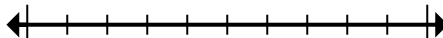
2) Round 820,860 to the nearest hundred.



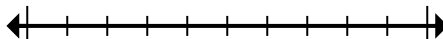
3) Round 666,641 to the nearest ten thousand.



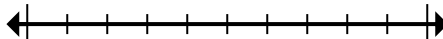
4) Round 9,506 to the nearest thousand.



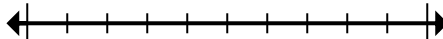
5) Round 453,975 to the nearest hundred thousand.



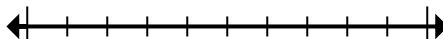
6) Round 534,644 to the nearest hundred thousand.



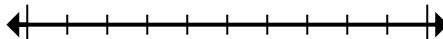
7) Round 40,673,282 to the nearest hundred thousand.



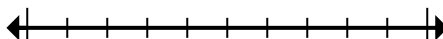
8) Round 126,324 to the nearest ten thousand.



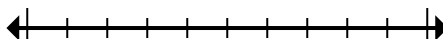
9) Round 950 to the nearest hundred.



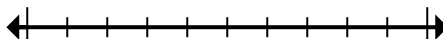
10) Round 728,779 to the nearest thousand.



11) Round 82,189 to the nearest ten thousand.



12) Round 681,152 to the nearest thousand.



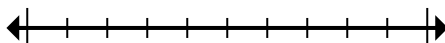
1. \_\_\_\_\_
2. \_\_\_\_\_
3. \_\_\_\_\_
4. \_\_\_\_\_
5. \_\_\_\_\_
6. \_\_\_\_\_
7. \_\_\_\_\_
8. \_\_\_\_\_
9. \_\_\_\_\_
10. \_\_\_\_\_
11. \_\_\_\_\_
12. \_\_\_\_\_



Mark the location (approximate) on the numberline and then solve.

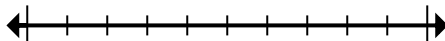
Answers

1) Round 1,241 to the nearest thousand.



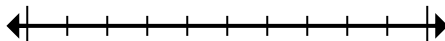
1. \_\_\_\_\_

2) Round 768 to the nearest hundred.



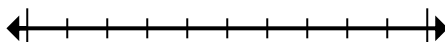
2. \_\_\_\_\_

3) Round 318,652 to the nearest hundred.



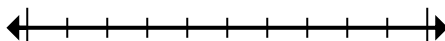
3. \_\_\_\_\_

4) Round 5,553,802 to the nearest thousand.



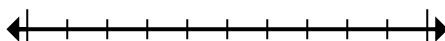
4. \_\_\_\_\_

5) Round 447,430 to the nearest hundred thousand.



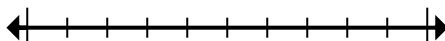
5. \_\_\_\_\_

6) Round 619,618 to the nearest ten thousand.



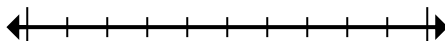
6. \_\_\_\_\_

7) Round 59,257 to the nearest thousand.



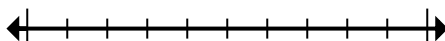
7. \_\_\_\_\_

8) Round 2,862,338 to the nearest ten thousand.



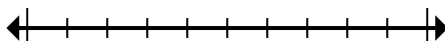
8. \_\_\_\_\_

9) Round 39,911,169 to the nearest hundred thousand.



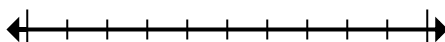
9. \_\_\_\_\_

10) Round 404 to the nearest hundred.



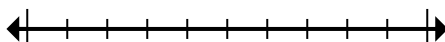
10. \_\_\_\_\_

11) Round 76,673 to the nearest ten thousand.



11. \_\_\_\_\_

12) Round 4,894 to the nearest thousand.



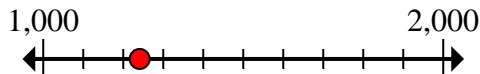
12. \_\_\_\_\_



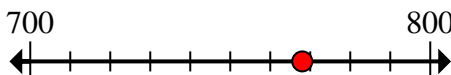
Mark the location (approximate) on the numberline and then solve.

Answers

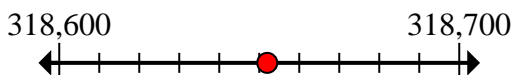
- 1) Round 1,241 to the nearest thousand.

1. 1,000

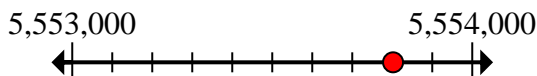
- 2) Round 768 to the nearest hundred.

2. 800

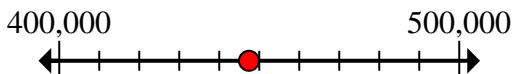
- 3) Round 318,652 to the nearest hundred.

3. 318,700

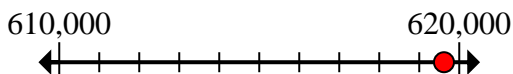
- 4) Round 5,553,802 to the nearest thousand.

4. 5,554,000

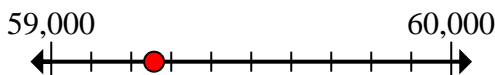
- 5) Round 447,430 to the nearest hundred thousand.

5. 400,000

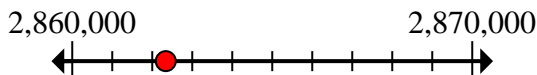
- 6) Round 619,618 to the nearest ten thousand.

6. 620,000

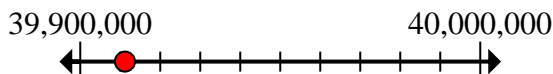
- 7) Round 59,257 to the nearest thousand.

7. 59,000

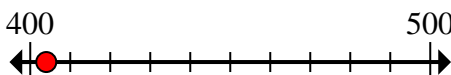
- 8) Round 2,862,338 to the nearest ten thousand.

8. 2,860,000

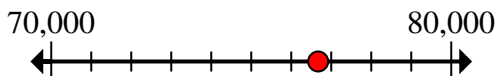
- 9) Round 39,911,169 to the nearest hundred thousand.

9. 39,900,000

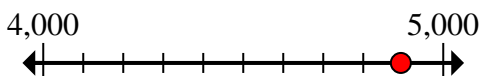
- 10) Round 404 to the nearest hundred.

10. 400

- 11) Round 76,673 to the nearest ten thousand.

11. 80,000

- 12) Round 4,894 to the nearest thousand.

12. 5,000

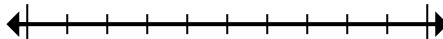


Mark the location (approximate) on the numberline and then solve.

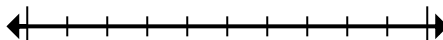
**Answers**

800	2,860,000	620,000	39,900,000
59,000	80,000	400,000	400
5,554,000	1,000	318,700	5,000

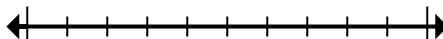
1) Round 1,241 to the nearest thousand.



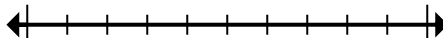
2) Round 768 to the nearest hundred.



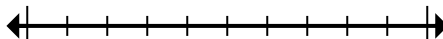
3) Round 318,652 to the nearest hundred.



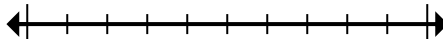
4) Round 5,553,802 to the nearest thousand.



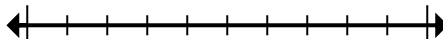
5) Round 447,430 to the nearest hundred thousand.



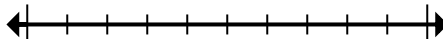
6) Round 619,618 to the nearest ten thousand.



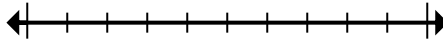
7) Round 59,257 to the nearest thousand.



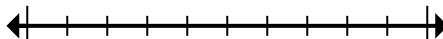
8) Round 2,862,338 to the nearest ten thousand.



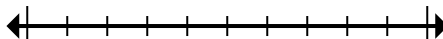
9) Round 39,911,169 to the nearest hundred thousand.



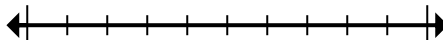
10) Round 404 to the nearest hundred.



11) Round 76,673 to the nearest ten thousand.



12) Round 4,894 to the nearest thousand.



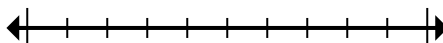
1. \_\_\_\_\_
2. \_\_\_\_\_
3. \_\_\_\_\_
4. \_\_\_\_\_
5. \_\_\_\_\_
6. \_\_\_\_\_
7. \_\_\_\_\_
8. \_\_\_\_\_
9. \_\_\_\_\_
10. \_\_\_\_\_
11. \_\_\_\_\_
12. \_\_\_\_\_



Mark the location (approximate) on the numberline and then solve.

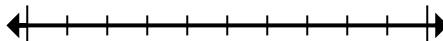
Answers

1) Round 45,381,768 to the nearest hundred thousand.



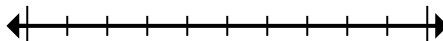
1. \_\_\_\_\_

2) Round 79,869 to the nearest ten thousand.



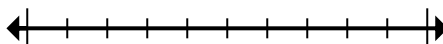
2. \_\_\_\_\_

3) Round 101,525 to the nearest ten thousand.



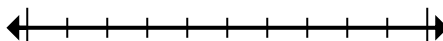
3. \_\_\_\_\_

4) Round 37,018 to the nearest thousand.



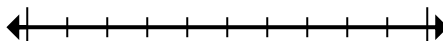
4. \_\_\_\_\_

5) Round 4,376 to the nearest thousand.



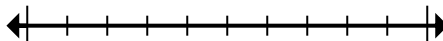
5. \_\_\_\_\_

6) Round 360,946 to the nearest thousand.



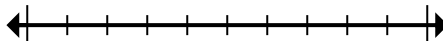
6. \_\_\_\_\_

7) Round 9,545,950 to the nearest hundred.



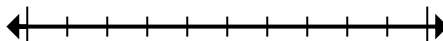
7. \_\_\_\_\_

8) Round 49,898,085 to the nearest hundred thousand.



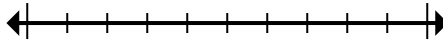
8. \_\_\_\_\_

9) Round 1,552 to the nearest thousand.



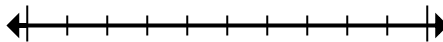
9. \_\_\_\_\_

10) Round 57,392 to the nearest ten thousand.



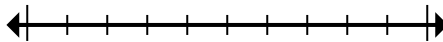
10. \_\_\_\_\_

11) Round 544,862 to the nearest hundred thousand.



11. \_\_\_\_\_

12) Round 3,268,593 to the nearest hundred.

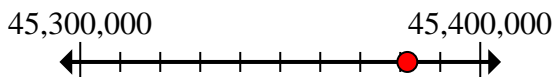


12. \_\_\_\_\_

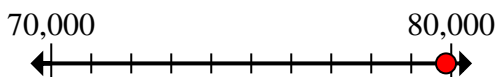


Mark the location (approximate) on the numberline and then solve.

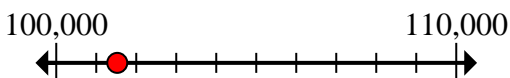
1) Round 45,381,768 to the nearest hundred thousand.



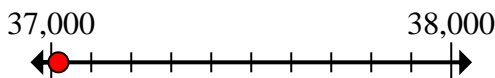
2) Round 79,869 to the nearest ten thousand.



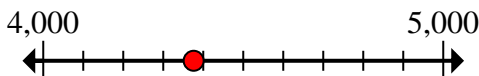
3) Round 101,525 to the nearest ten thousand.



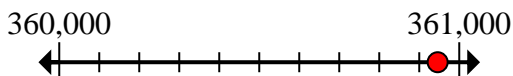
4) Round 37,018 to the nearest thousand.



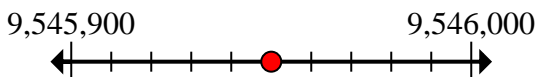
5) Round 4,376 to the nearest thousand.



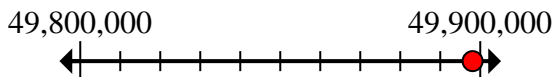
6) Round 360,946 to the nearest thousand.



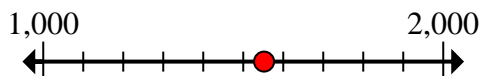
7) Round 9,545,950 to the nearest hundred.



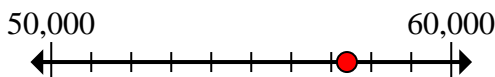
8) Round 49,898,085 to the nearest hundred thousand.



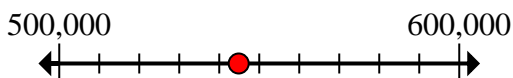
9) Round 1,552 to the nearest thousand.



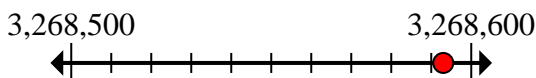
10) Round 57,392 to the nearest ten thousand.



11) Round 544,862 to the nearest hundred thousand.



12) Round 3,268,593 to the nearest hundred.



Answers

1. 45,400,000

2. 80,000

3. 100,000

4. 37,000

5. 4,000

6. 361,000

7. 9,546,000

8. 49,900,000

9. 2,000

10. 60,000

11. 500,000

12. 3,268,600

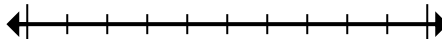


Mark the location (approximate) on the numberline and then solve.

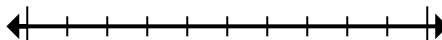
**Answers**

60,000	4,000	3,268,600	2,000
49,900,000	9,546,000	361,000	45,400,000
37,000	500,000	100,000	80,000

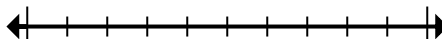
1) Round 45,381,768 to the nearest hundred thousand.



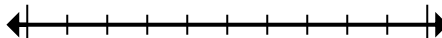
2) Round 79,869 to the nearest ten thousand.



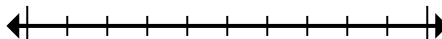
3) Round 101,525 to the nearest ten thousand.



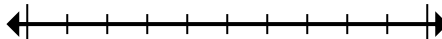
4) Round 37,018 to the nearest thousand.



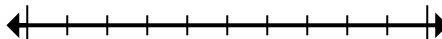
5) Round 4,376 to the nearest thousand.



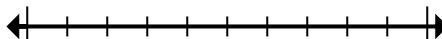
6) Round 360,946 to the nearest thousand.



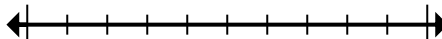
7) Round 9,545,950 to the nearest hundred.



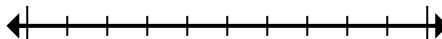
8) Round 49,898,085 to the nearest hundred thousand.



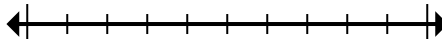
9) Round 1,552 to the nearest thousand.



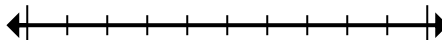
10) Round 57,392 to the nearest ten thousand.



11) Round 544,862 to the nearest hundred thousand.



12) Round 3,268,593 to the nearest hundred.



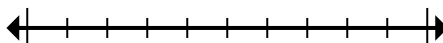
1. \_\_\_\_\_
2. \_\_\_\_\_
3. \_\_\_\_\_
4. \_\_\_\_\_
5. \_\_\_\_\_
6. \_\_\_\_\_
7. \_\_\_\_\_
8. \_\_\_\_\_
9. \_\_\_\_\_
10. \_\_\_\_\_
11. \_\_\_\_\_
12. \_\_\_\_\_



Mark the location (approximate) on the numberline and then solve.

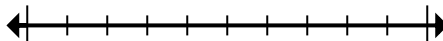
Answers

1) Round 636 to the nearest hundred.



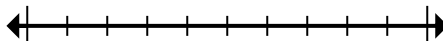
1. \_\_\_\_\_

2) Round 460,239 to the nearest hundred thousand.



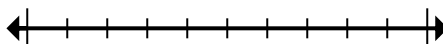
2. \_\_\_\_\_

3) Round 43,360,678 to the nearest hundred thousand.



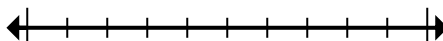
3. \_\_\_\_\_

4) Round 525 to the nearest hundred.



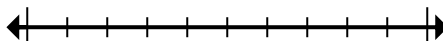
4. \_\_\_\_\_

5) Round 520,968 to the nearest hundred thousand.



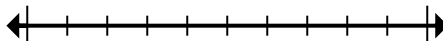
5. \_\_\_\_\_

6) Round 242,983 to the nearest ten thousand.



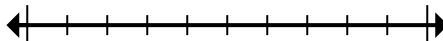
6. \_\_\_\_\_

7) Round 6,825,849 to the nearest hundred.



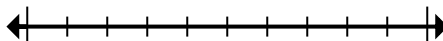
7. \_\_\_\_\_

8) Round 4,314 to the nearest thousand.



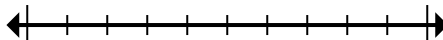
8. \_\_\_\_\_

9) Round 97,589 to the nearest ten thousand.



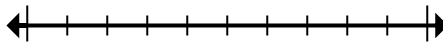
9. \_\_\_\_\_

10) Round 6,435 to the nearest thousand.



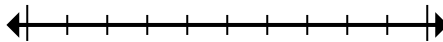
10. \_\_\_\_\_

11) Round 29,689,529 to the nearest hundred thousand.



11. \_\_\_\_\_

12) Round 4,801,539 to the nearest ten thousand.



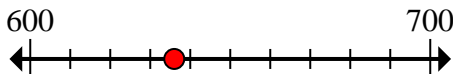
12. \_\_\_\_\_



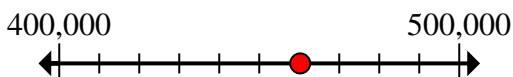


Mark the location (approximate) on the numberline and then solve.

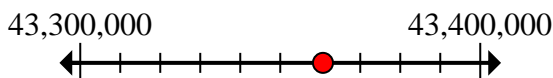
- 1) Round 636 to the nearest hundred.



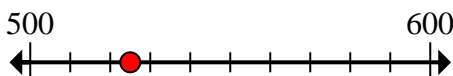
- 2) Round 460,239 to the nearest hundred thousand.



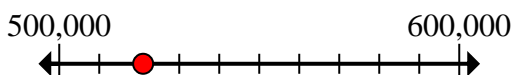
- 3) Round 43,360,678 to the nearest hundred thousand.



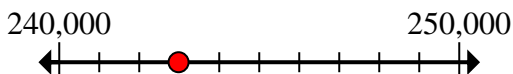
- 4) Round 525 to the nearest hundred.



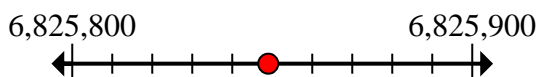
- 5) Round 520,968 to the nearest hundred thousand.



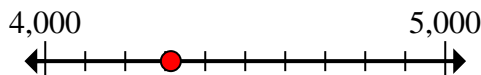
- 6) Round 242,983 to the nearest ten thousand.



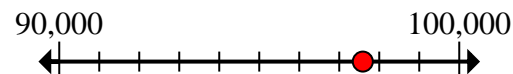
- 7) Round 6,825,849 to the nearest hundred.



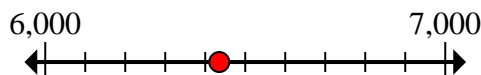
- 8) Round 4,314 to the nearest thousand.



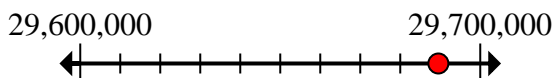
- 9) Round 97,589 to the nearest ten thousand.



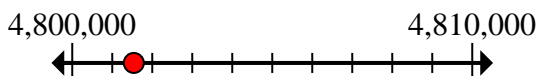
- 10) Round 6,435 to the nearest thousand.



- 11) Round 29,689,529 to the nearest hundred thousand.



- 12) Round 4,801,539 to the nearest ten thousand.

**Answers**1. 6002. 500,0003. 43,400,0004. 5005. 500,0006. 240,0007. 6,825,8008. 4,0009. 100,00010. 6,00011. 29,700,00012. 4,800,000

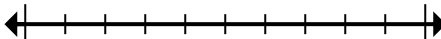


Mark the location (approximate) on the numberline and then solve.

**Answers**

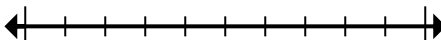
4,800,000	43,400,000	600	500
29,700,000	6,825,800	240,000	500,000
4,000	100,000	500,000	6,000

1) Round 636 to the nearest hundred.



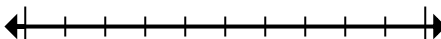
1. \_\_\_\_\_

2) Round 460,239 to the nearest hundred thousand.



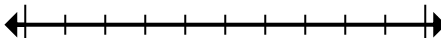
2. \_\_\_\_\_

3) Round 43,360,678 to the nearest hundred thousand.



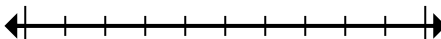
3. \_\_\_\_\_

4) Round 525 to the nearest hundred.



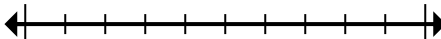
4. \_\_\_\_\_

5) Round 520,968 to the nearest hundred thousand.



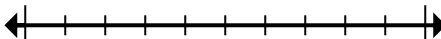
5. \_\_\_\_\_

6) Round 242,983 to the nearest ten thousand.



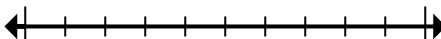
6. \_\_\_\_\_

7) Round 6,825,849 to the nearest hundred.



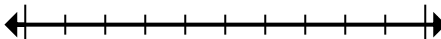
7. \_\_\_\_\_

8) Round 4,314 to the nearest thousand.



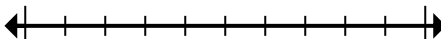
8. \_\_\_\_\_

9) Round 97,589 to the nearest ten thousand.



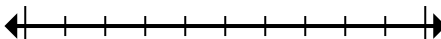
9. \_\_\_\_\_

10) Round 6,435 to the nearest thousand.



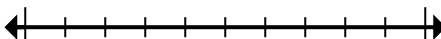
10. \_\_\_\_\_

11) Round 29,689,529 to the nearest hundred thousand.



11. \_\_\_\_\_

12) Round 4,801,539 to the nearest ten thousand.



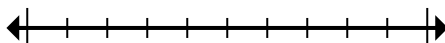
12. \_\_\_\_\_



Mark the location (approximate) on the numberline and then solve.

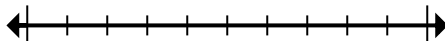
Answers

1) Round 808,484 to the nearest ten thousand.



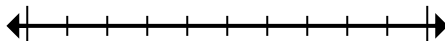
1. \_\_\_\_\_

2) Round 832,264 to the nearest thousand.



2. \_\_\_\_\_

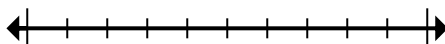
3) Round 10,622,917 to the nearest hundred thousand.



3. \_\_\_\_\_

4. \_\_\_\_\_

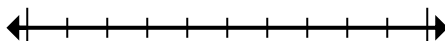
4) Round 7,142,074 to the nearest ten thousand.



5. \_\_\_\_\_

6. \_\_\_\_\_

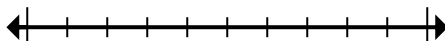
5) Round 72,745 to the nearest ten thousand.



7. \_\_\_\_\_

8. \_\_\_\_\_

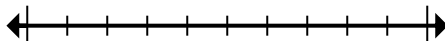
6) Round 314 to the nearest hundred.



9. \_\_\_\_\_

10. \_\_\_\_\_

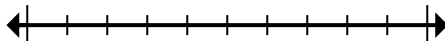
7) Round 2,720 to the nearest thousand.



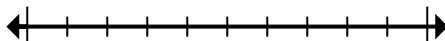
11. \_\_\_\_\_

12. \_\_\_\_\_

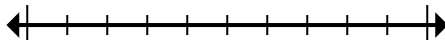
8) Round 80,764 to the nearest ten thousand.



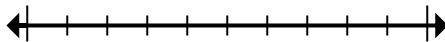
9) Round 633,653 to the nearest thousand.



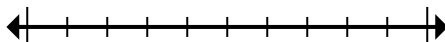
10) Round 151,433 to the nearest hundred.



11) Round 2,415 to the nearest hundred.



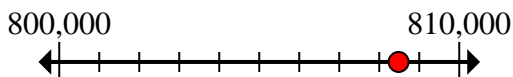
12) Round 42,974,961 to the nearest hundred thousand.



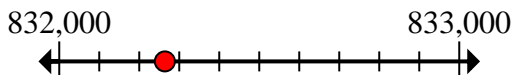


Mark the location (approximate) on the numberline and then solve.

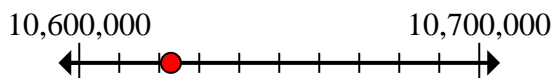
- 1) Round 808,484 to the nearest ten thousand.



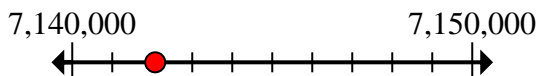
- 2) Round 832,264 to the nearest thousand.



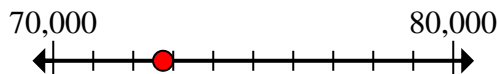
- 3) Round 10,622,917 to the nearest hundred thousand.



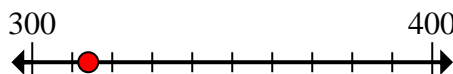
- 4) Round 7,142,074 to the nearest ten thousand.



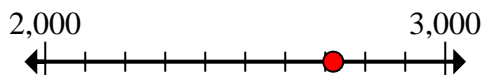
- 5) Round 72,745 to the nearest ten thousand.



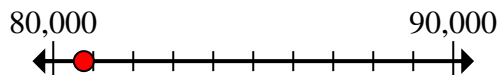
- 6) Round 314 to the nearest hundred.



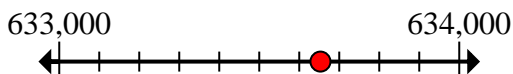
- 7) Round 2,720 to the nearest thousand.



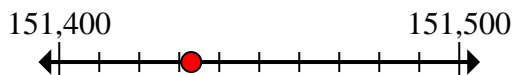
- 8) Round 80,764 to the nearest ten thousand.



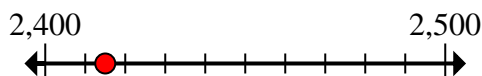
- 9) Round 633,653 to the nearest thousand.



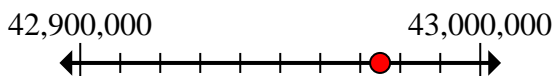
- 10) Round 151,433 to the nearest hundred.



- 11) Round 2,415 to the nearest hundred.



- 12) Round 42,974,961 to the nearest hundred thousand.

**Answers**1. **810,000**2. **832,000**3. **10,600,000**4. **7,140,000**5. **70,000**6. **300**7. **3,000**8. **80,000**9. **634,000**10. **151,400**11. **2,400**12. **43,000,000**

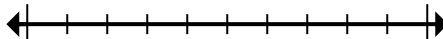


Mark the location (approximate) on the numberline and then solve.

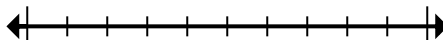
## Answers

3,000	151,400	832,000	10,600,000
70,000	80,000	7,140,000	300
634,000	810,000	2,400	43,000,000

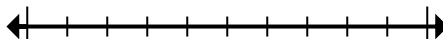
1) Round 808,484 to the nearest ten thousand.



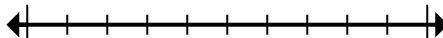
2) Round 832,264 to the nearest thousand.



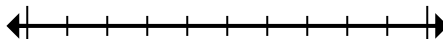
3) Round 10,622,917 to the nearest hundred thousand.



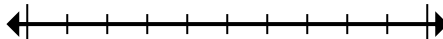
4) Round 7,142,074 to the nearest ten thousand.



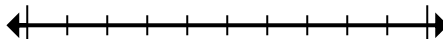
5) Round 72,745 to the nearest ten thousand.



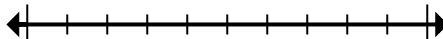
6) Round 314 to the nearest hundred.



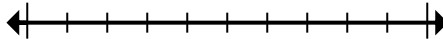
7) Round 2,720 to the nearest thousand.



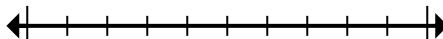
8) Round 80,764 to the nearest ten thousand.



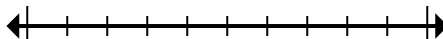
9) Round 633,653 to the nearest thousand.



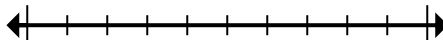
10) Round 151,433 to the nearest hundred.



11) Round 2,415 to the nearest hundred.



12) Round 42,974,961 to the nearest hundred thousand.



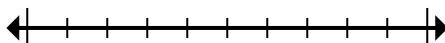
1. \_\_\_\_\_
2. \_\_\_\_\_
3. \_\_\_\_\_
4. \_\_\_\_\_
5. \_\_\_\_\_
6. \_\_\_\_\_
7. \_\_\_\_\_
8. \_\_\_\_\_
9. \_\_\_\_\_
10. \_\_\_\_\_
11. \_\_\_\_\_
12. \_\_\_\_\_



Mark the location (approximate) on the numberline and then solve.

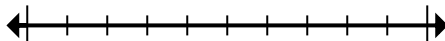
Answers

1) Round 1,491 to the nearest thousand.



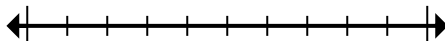
1. \_\_\_\_\_

2) Round 867,315 to the nearest hundred.



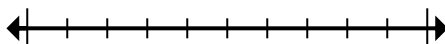
2. \_\_\_\_\_

3) Round 524 to the nearest hundred.



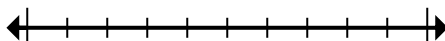
3. \_\_\_\_\_

4) Round 698 to the nearest hundred.



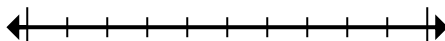
4. \_\_\_\_\_

5) Round 4,646,919 to the nearest hundred.



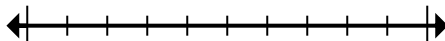
5. \_\_\_\_\_

6) Round 6,630,803 to the nearest thousand.



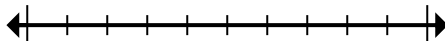
6. \_\_\_\_\_

7) Round 4,407,993 to the nearest hundred thousand.



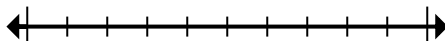
7. \_\_\_\_\_

8) Round 83,368 to the nearest ten thousand.



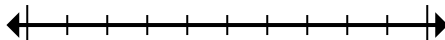
8. \_\_\_\_\_

9) Round 5,665,526 to the nearest ten thousand.



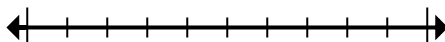
9. \_\_\_\_\_

10) Round 1,299 to the nearest thousand.



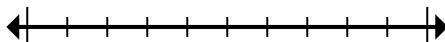
10. \_\_\_\_\_

11) Round 448,098 to the nearest hundred thousand.



11. \_\_\_\_\_

12) Round 178,876 to the nearest ten thousand.

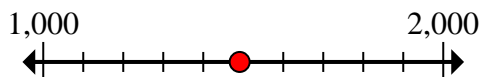


12. \_\_\_\_\_

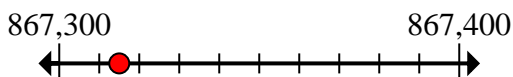


Mark the location (approximate) on the numberline and then solve.

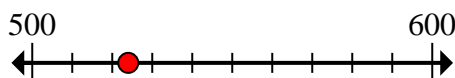
- 1) Round 1,491 to the nearest thousand.



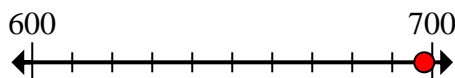
- 2) Round 867,315 to the nearest hundred.



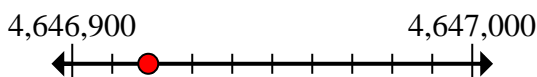
- 3) Round 524 to the nearest hundred.



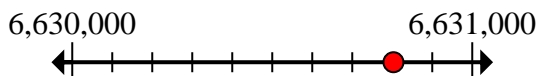
- 4) Round 698 to the nearest hundred.



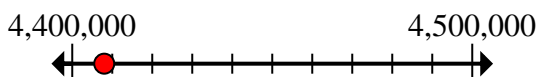
- 5) Round 4,646,919 to the nearest hundred.



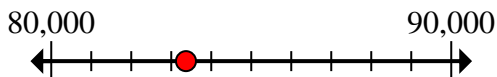
- 6) Round 6,630,803 to the nearest thousand.



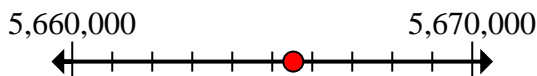
- 7) Round 4,407,993 to the nearest hundred thousand.



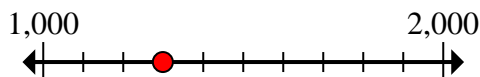
- 8) Round 83,368 to the nearest ten thousand.



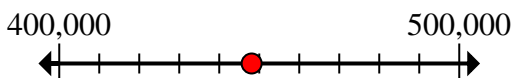
- 9) Round 5,665,526 to the nearest ten thousand.



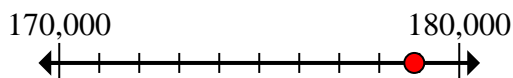
- 10) Round 1,299 to the nearest thousand.



- 11) Round 448,098 to the nearest hundred thousand.



- 12) Round 178,876 to the nearest ten thousand.

**Answers**1. 1,0002. 867,3003. 5004. 7005. 4,646,9006. 6,631,0007. 4,400,0008. 80,0009. 5,670,00010. 1,00011. 400,00012. 180,000



Mark the location (approximate) on the numberline and then solve.

## Answers

867,300

500

4,400,000

80,000

1,000

4,646,900

700

400,000

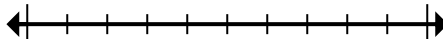
180,000

1,000

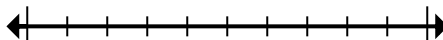
5,670,000

6,631,000

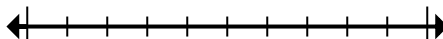
- 1) Round 1,491 to the nearest thousand.



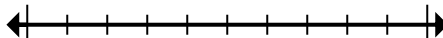
- 2) Round 867,315 to the nearest hundred.



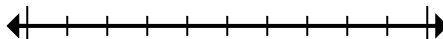
- 3) Round 524 to the nearest hundred.



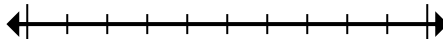
- 4) Round 698 to the nearest hundred.



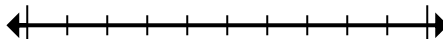
- 5) Round 4,646,919 to the nearest hundred.



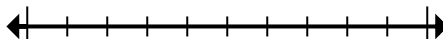
- 6) Round 6,630,803 to the nearest thousand.



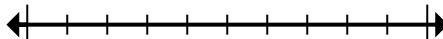
- 7) Round 4,407,993 to the nearest hundred thousand.



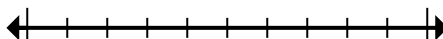
- 8) Round 83,368 to the nearest ten thousand.



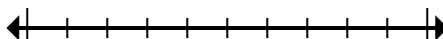
- 9) Round 5,665,526 to the nearest ten thousand.



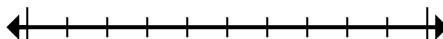
- 10) Round 1,299 to the nearest thousand.



- 11) Round 448,098 to the nearest hundred thousand.



- 12) Round 178,876 to the nearest ten thousand.



1. \_\_\_\_\_
2. \_\_\_\_\_
3. \_\_\_\_\_
4. \_\_\_\_\_
5. \_\_\_\_\_
6. \_\_\_\_\_
7. \_\_\_\_\_
8. \_\_\_\_\_
9. \_\_\_\_\_
10. \_\_\_\_\_
11. \_\_\_\_\_
12. \_\_\_\_\_





Mark the location (approximate) on the numberline and then solve.

Answers

1) Round 14,905 to the nearest hundred.



1. \_\_\_\_\_

2) Round 680,180 to the nearest hundred thousand.



2. \_\_\_\_\_

3) Round 992,162 to the nearest hundred thousand.



3. \_\_\_\_\_

4) Round 48,422,834 to the nearest hundred thousand.



4. \_\_\_\_\_

5) Round 729,327 to the nearest thousand.



5. \_\_\_\_\_

6) Round 42,660 to the nearest thousand.



6. \_\_\_\_\_

7) Round 72,083,942 to the nearest hundred thousand.



7. \_\_\_\_\_

8) Round 361 to the nearest hundred.



8. \_\_\_\_\_

9) Round 79,043 to the nearest ten thousand.



9. \_\_\_\_\_

10) Round 344 to the nearest hundred.



10. \_\_\_\_\_

11) Round 1,179 to the nearest thousand.



11. \_\_\_\_\_

12) Round 359,639 to the nearest hundred.



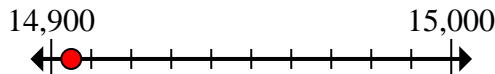
12. \_\_\_\_\_



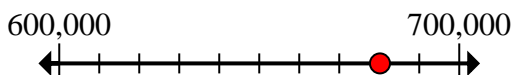
Mark the location (approximate) on the numberline and then solve.

Answers

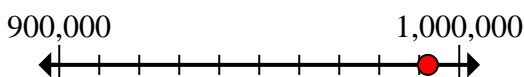
- 1) Round 14,905 to the nearest hundred.

1. 14,900

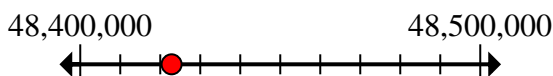
- 2) Round 680,180 to the nearest hundred thousand.

2. 700,000

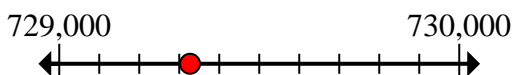
- 3) Round 992,162 to the nearest hundred thousand.

3. 1,000,000


- 4) Round 48,422,834 to the nearest hundred thousand.

4. 48,400,000

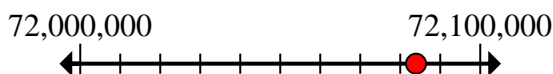
- 5) Round 729,327 to the nearest thousand.

5. 729,000

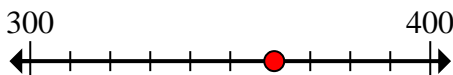
- 6) Round 42,660 to the nearest thousand.

6. 43,000

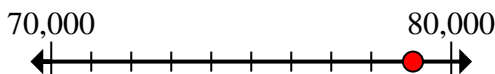
- 7) Round 72,083,942 to the nearest hundred thousand.

7. 72,100,000

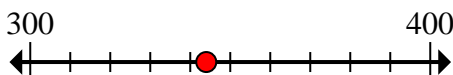
- 8) Round 361 to the nearest hundred.

8. 400

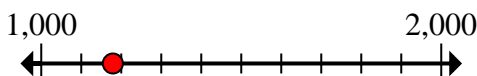
- 9) Round 79,043 to the nearest ten thousand.

9. 80,000

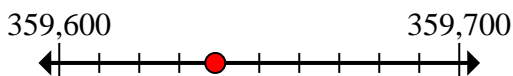
- 10) Round 344 to the nearest hundred.

10. 300

- 11) Round 1,179 to the nearest thousand.

11. 1,000

- 12) Round 359,639 to the nearest hundred.

12. 359,600



Mark the location (approximate) on the numberline and then solve.

**Answers**

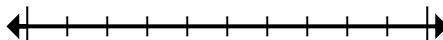
1,000	1,000,000	43,000	700,000
729,000	72,100,000	359,600	300
14,900	48,400,000	400	80,000

1) Round 14,905 to the nearest hundred.



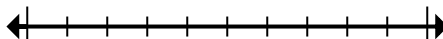
1. \_\_\_\_\_

2) Round 680,180 to the nearest hundred thousand.



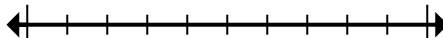
2. \_\_\_\_\_

3) Round 992,162 to the nearest hundred thousand.



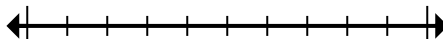
3. \_\_\_\_\_

4) Round 48,422,834 to the nearest hundred thousand.



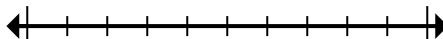
4. \_\_\_\_\_

5) Round 729,327 to the nearest thousand.



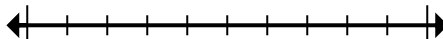
5. \_\_\_\_\_

6) Round 42,660 to the nearest thousand.



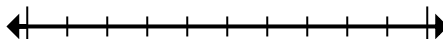
6. \_\_\_\_\_

7) Round 72,083,942 to the nearest hundred thousand.



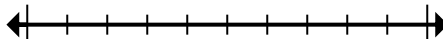
7. \_\_\_\_\_

8) Round 361 to the nearest hundred.



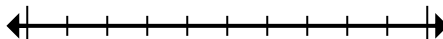
8. \_\_\_\_\_

9) Round 79,043 to the nearest ten thousand.



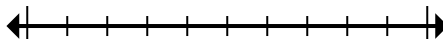
9. \_\_\_\_\_

10) Round 344 to the nearest hundred.



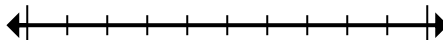
10. \_\_\_\_\_

11) Round 1,179 to the nearest thousand.



11. \_\_\_\_\_

12) Round 359,639 to the nearest hundred.



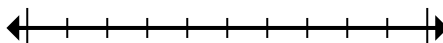
12. \_\_\_\_\_



Mark the location (approximate) on the numberline and then solve.

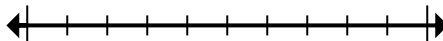
Answers

1) Round 828 to the nearest hundred.



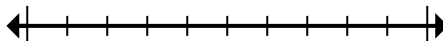
1. \_\_\_\_\_

2) Round 9,053 to the nearest thousand.



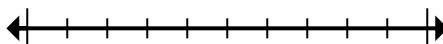
2. \_\_\_\_\_

3) Round 11,215 to the nearest thousand.



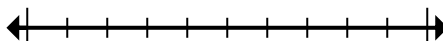
3. \_\_\_\_\_

4) Round 241,077 to the nearest ten thousand.



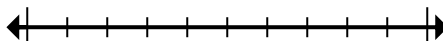
4. \_\_\_\_\_

5) Round 342,549 to the nearest hundred.



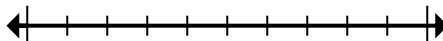
5. \_\_\_\_\_

6) Round 996,949 to the nearest ten thousand.



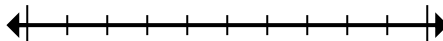
6. \_\_\_\_\_

7) Round 7,577,963 to the nearest thousand.



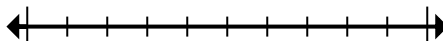
7. \_\_\_\_\_

8) Round 17,487 to the nearest ten thousand.



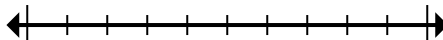
8. \_\_\_\_\_

9) Round 7,921,410 to the nearest hundred thousand.



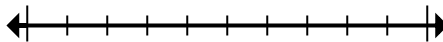
9. \_\_\_\_\_

10) Round 153,244 to the nearest hundred thousand.



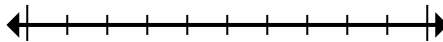
10. \_\_\_\_\_

11) Round 308,648 to the nearest hundred thousand.



11. \_\_\_\_\_

12) Round 673 to the nearest hundred.



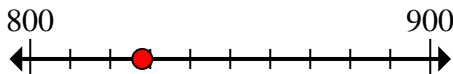
12. \_\_\_\_\_



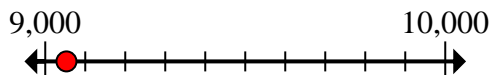
Mark the location (approximate) on the numberline and then solve.

Answers

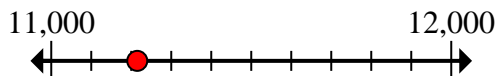
- 1) Round 828 to the nearest hundred.

1. 800

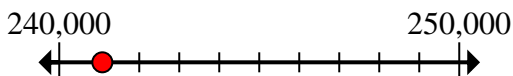
- 2) Round 9,053 to the nearest thousand.

2. 9,000

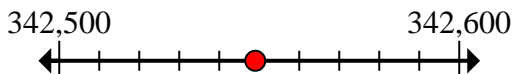
- 3) Round 11,215 to the nearest thousand.

3. 11,000

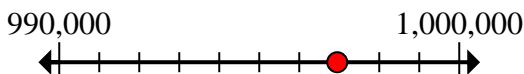
- 4) Round 241,077 to the nearest ten thousand.

4. 240,000

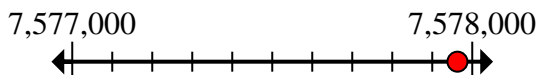
- 5) Round 342,549 to the nearest hundred.

5. 342,500

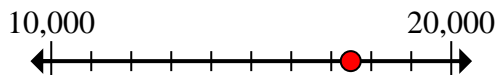
- 6) Round 996,949 to the nearest ten thousand.

6. 1,000,000

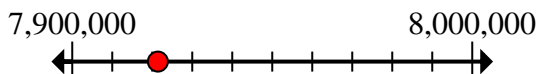
- 7) Round 7,577,963 to the nearest thousand.

7. 7,578,000

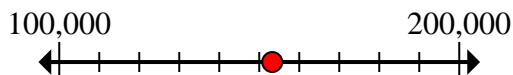
- 8) Round 17,487 to the nearest ten thousand.

8. 20,000

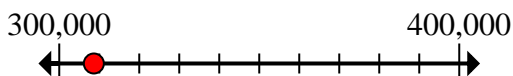
- 9) Round 7,921,410 to the nearest hundred thousand.

9. 7,900,000

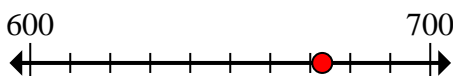
- 10) Round 153,244 to the nearest hundred thousand.

10. 200,000

- 11) Round 308,648 to the nearest hundred thousand.

11. 300,000

- 12) Round 673 to the nearest hundred.

12. 700

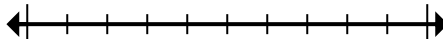


Mark the location (approximate) on the numberline and then solve.

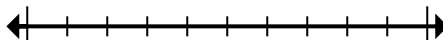
## Answers

342,500	1,000,000	11,000	9,000
240,000	700	200,000	300,000
20,000	7,900,000	7,578,000	800

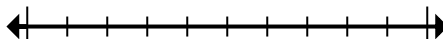
1) Round 828 to the nearest hundred.



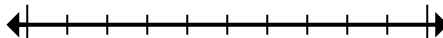
2) Round 9,053 to the nearest thousand.



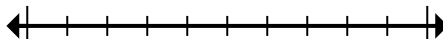
3) Round 11,215 to the nearest thousand.



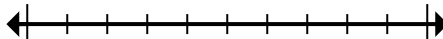
4) Round 241,077 to the nearest ten thousand.



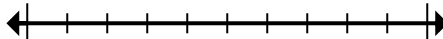
5) Round 342,549 to the nearest hundred.



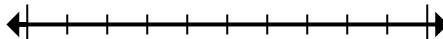
6) Round 996,949 to the nearest ten thousand.



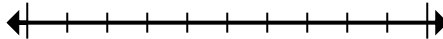
7) Round 7,577,963 to the nearest thousand.



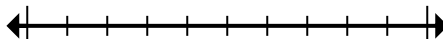
8) Round 17,487 to the nearest ten thousand.



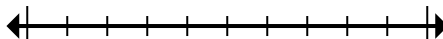
9) Round 7,921,410 to the nearest hundred thousand.



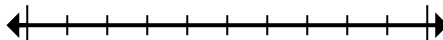
10) Round 153,244 to the nearest hundred thousand.



11) Round 308,648 to the nearest hundred thousand.



12) Round 673 to the nearest hundred.



1. \_\_\_\_\_
2. \_\_\_\_\_
3. \_\_\_\_\_
4. \_\_\_\_\_
5. \_\_\_\_\_
6. \_\_\_\_\_
7. \_\_\_\_\_
8. \_\_\_\_\_
9. \_\_\_\_\_
10. \_\_\_\_\_
11. \_\_\_\_\_
12. \_\_\_\_\_