



Use the numberlines to round each number to the nearest 100.

Answers

Ex)

4,028



Ex. 4,000

1)

905



1. \_\_\_\_\_

2)

4,915



2. \_\_\_\_\_

3)

984



3. \_\_\_\_\_

4)

6,410



4. \_\_\_\_\_

5)

43,902



5. \_\_\_\_\_

6)

20,088



6. \_\_\_\_\_

7)

59,370



7. \_\_\_\_\_

8)

815



8. \_\_\_\_\_

9)

38,901



9. \_\_\_\_\_

10)

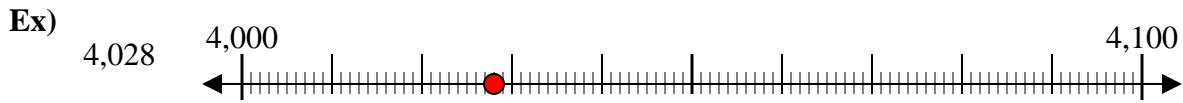
4,908



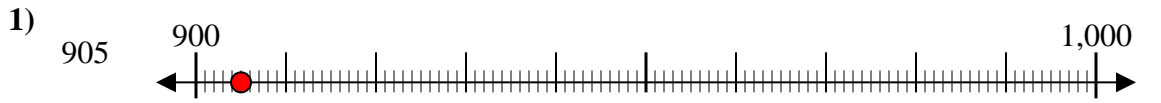
10. \_\_\_\_\_



Use the numberlines to round each number to the nearest 100.



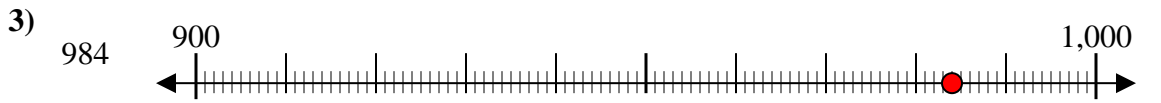
Answers  
Ex. 4,000



1. 900



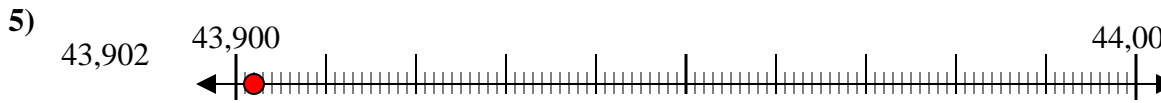
2. 4,900



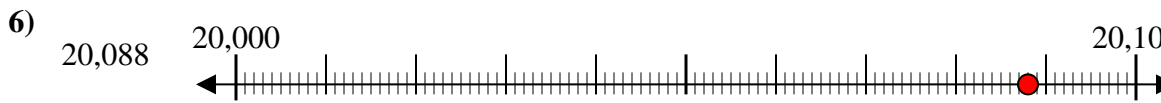
3. 1,000



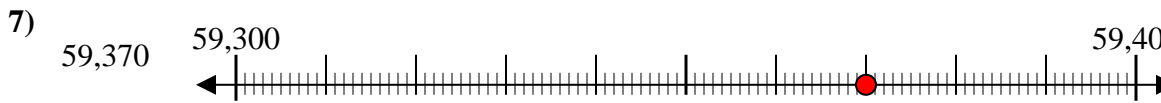
4. 6,400



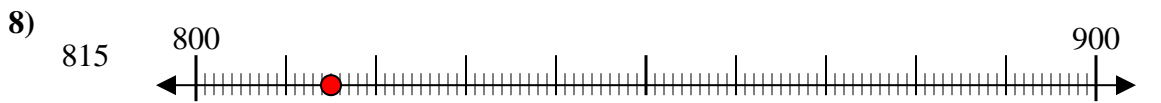
5. 43,900



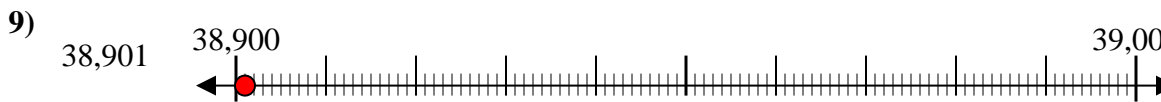
6. 20,100



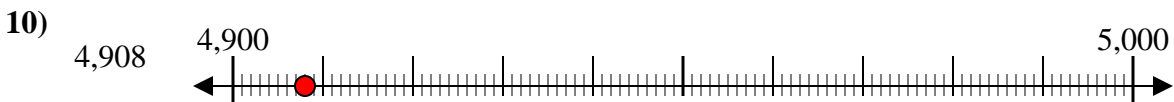
7. 59,400



8. 800



9. 38,900



10. 4,900