



Use the numberlines to round each number to the nearest 100.

Answers

Ex)

612



Ex. 600

1)

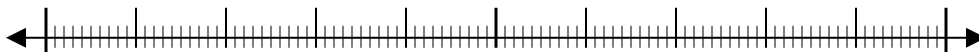
9,223



1. \_\_\_\_\_

2)

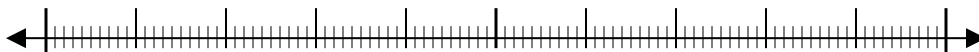
17,922



2. \_\_\_\_\_

3)

87,465



3. \_\_\_\_\_

4)

653



4. \_\_\_\_\_

5)

3,616



5. \_\_\_\_\_

6)

6,677



6. \_\_\_\_\_

7)

22,598



7. \_\_\_\_\_

8)

1,241



8. \_\_\_\_\_

9)

960



9. \_\_\_\_\_

10)

873

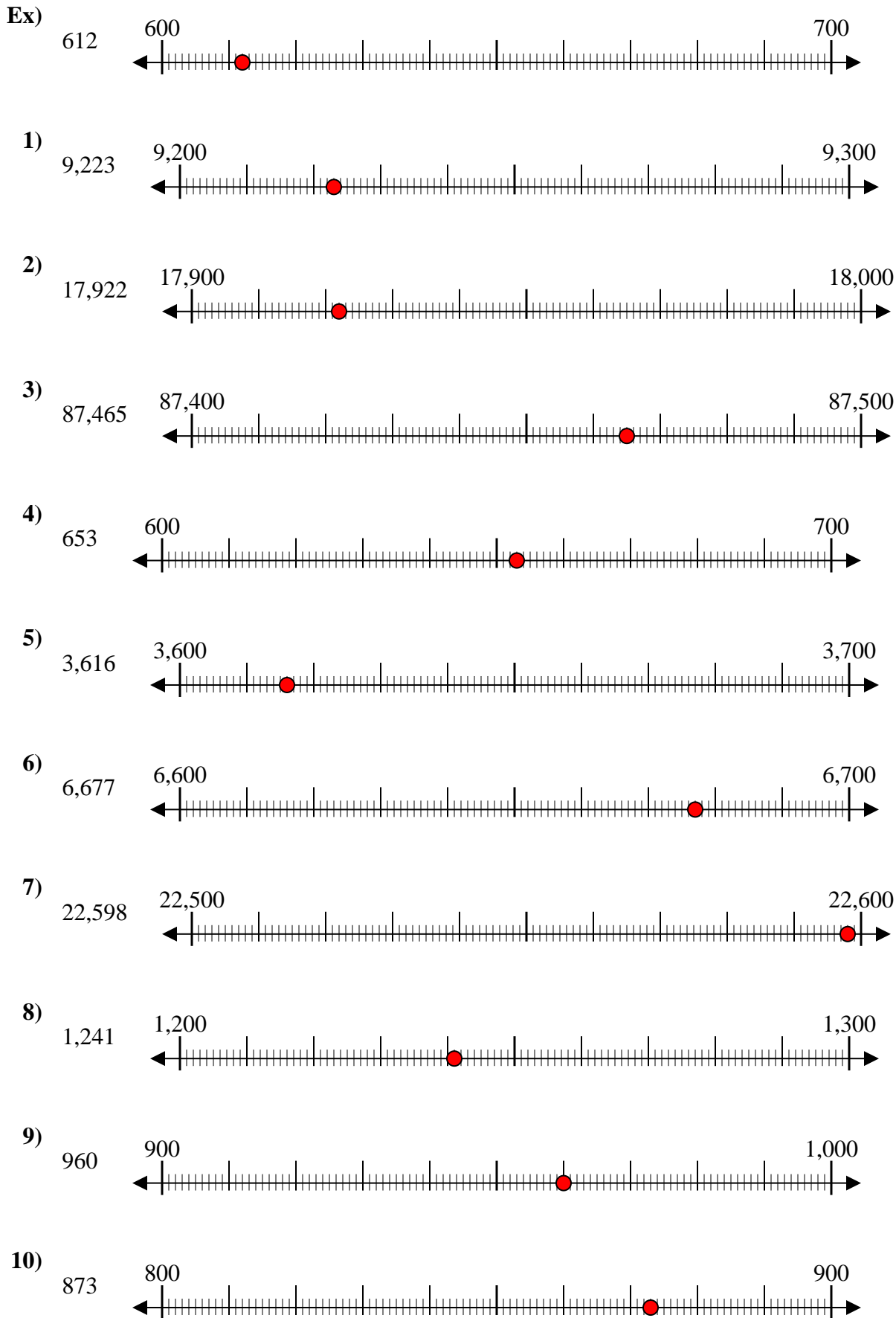


10. \_\_\_\_\_

10. \_\_\_\_\_



Use the numberlines to round each number to the nearest 100.



Answers

- Ex. 600
1. 9,200
2. 17,900
3. 87,500
4. 700
5. 3,600
6. 6,700
7. 22,600
8. 1,200
9. 1,000
10. 900