






Solve each problem.

Ex) What is the ratio of moons to stars?




1) What is the ratio of moons to triangles?




Answers

Ex. 5:10

2) What is the ratio of hearts to squares?



3) What is the ratio of triangles to hearts?



1. 14:13

2. 11:7

4) What is the ratio of stars to hearts?



5) What is the ratio of stars to triangles?

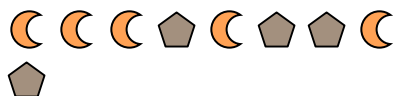


3. 14:15

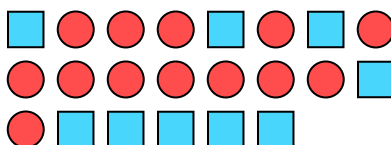
4. 8:3

5. 2:3

6) What is the ratio of pentagons to moons?



7) What is the ratio of circles to squares?



6. 4:5

7. 13:9

8. 15:7

9. 10:8

8) What is the ratio of stars to pentagons?



9) What is the ratio of triangles to stars?



10. 2:4

11. 2:11

10) What is the ratio of stars to circles?



11) What is the ratio of stars to hearts?

