


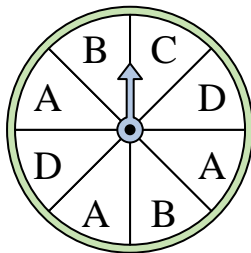


Solve each problem.

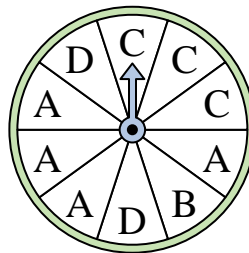
- 1) Which number is the spinner least likely to land on?



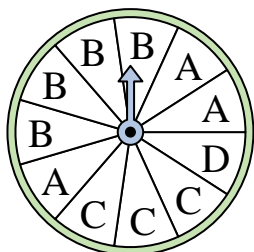
- 2) Which two letters is the spinner equally likely to land on?



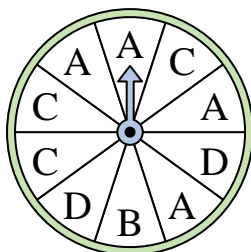
- 3) Which letter is the spinner least likely to land on?



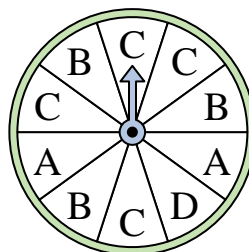
- 4) Which letter is the spinner least likely to land on?



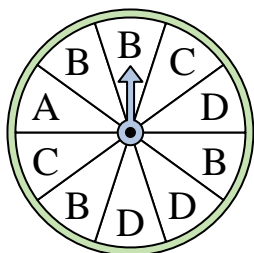
- 5) Which letter is the spinner most likely to land on?



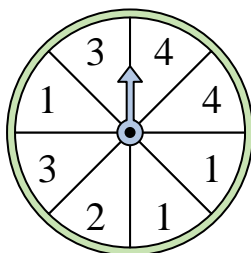
- 6) Which letter is the spinner most likely to land on?



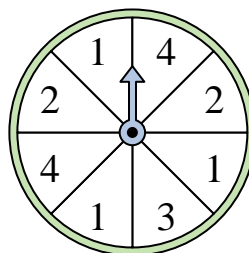
- 7) Which letter is the spinner most likely to land on?



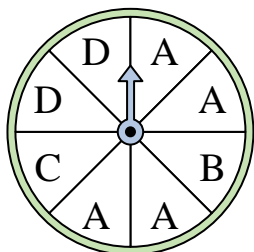
- 8) Which number is the spinner most likely to land on?



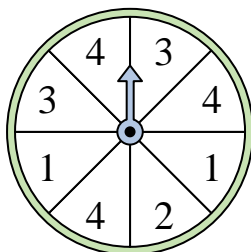
- 9) Which two numbers is the spinner equally likely to land on?



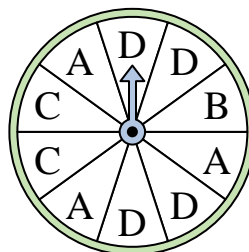
- 10) Which letter is the spinner most likely to land on?



- 11) Which two numbers is the spinner equally likely to land on?



- 12) Which letter is the spinner least likely to land on?




**Answers**

1. \_\_\_\_\_
2. \_\_\_\_\_
3. \_\_\_\_\_
4. \_\_\_\_\_
5. \_\_\_\_\_
6. \_\_\_\_\_
7. \_\_\_\_\_
8. \_\_\_\_\_
9. \_\_\_\_\_
10. \_\_\_\_\_
11. \_\_\_\_\_
12. \_\_\_\_\_

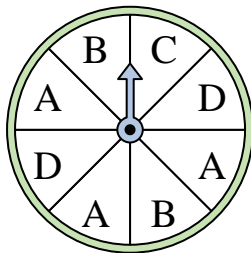


Solve each problem.

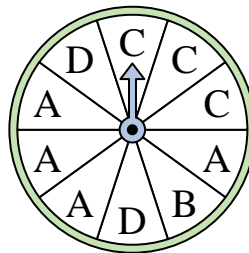
- 1) Which number is the spinner least likely to land on?



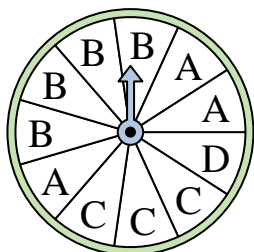
- 2) Which two letters is the spinner equally likely to land on?



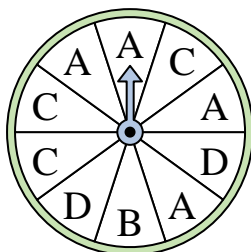
- 3) Which letter is the spinner least likely to land on?



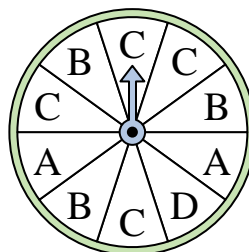
- 4) Which letter is the spinner least likely to land on?



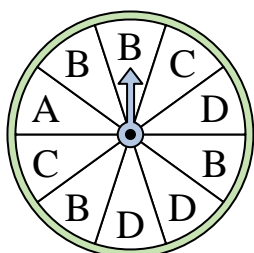
- 5) Which letter is the spinner most likely to land on?



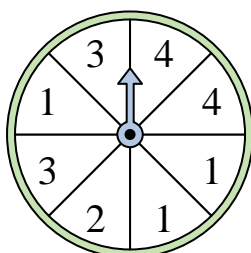
- 6) Which letter is the spinner most likely to land on?



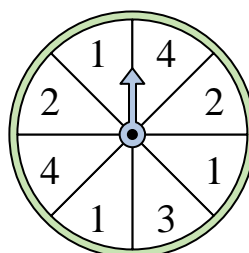
- 7) Which letter is the spinner most likely to land on?



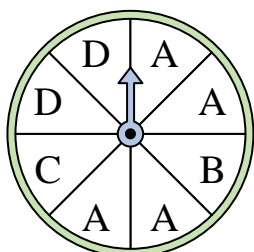
- 8) Which number is the spinner most likely to land on?



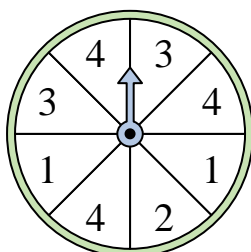
- 9) Which two numbers is the spinner equally likely to land on?



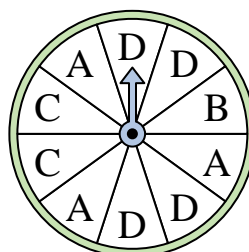
- 10) Which letter is the spinner most likely to land on?



- 11) Which two numbers is the spinner equally likely to land on?



- 12) Which letter is the spinner least likely to land on?



Answers

1. 4

2. B & D

3. B

4. D

5. A

6. C

7. B

8. 1

9. 2 & 4

10. A

11. 1 & 3

12. B