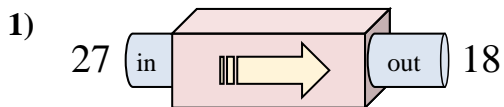


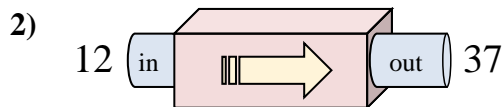


Determine which rule the function machine is using.

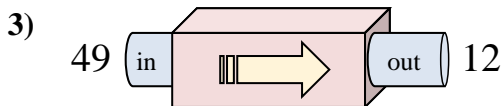
**Answers**



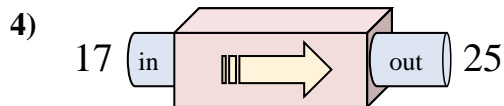
- A. Subtract 7
- B. Add 5
- C. Add 10
- D. Subtract 9



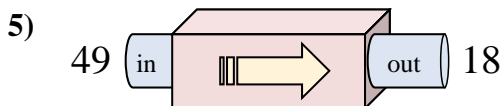
- A. Add 23
- B. Add 22
- C. Subtract 21
- D. Add 25



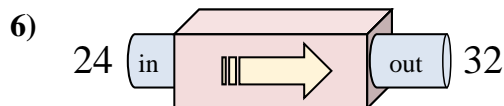
- A. Subtract 35
- B. Subtract 37
- C. Subtract 40
- D. Subtract 38



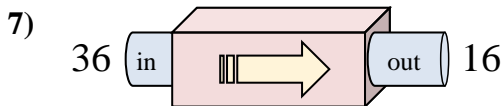
- A. Add 4
- B. Subtract 4
- C. Add 8
- D. Subtract 12



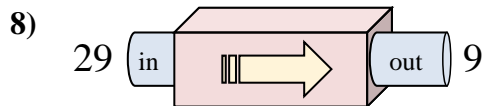
- A. Add 26
- B. Add 32
- C. Subtract 31
- D. Subtract 28



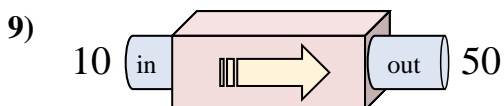
- A. Subtract 9
- B. Add 8
- C. Add 12
- D. Add 7



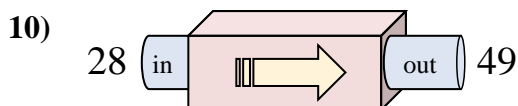
- A. Subtract 19
- B. Add 21
- C. Subtract 20
- D. Subtract 24



- A. Subtract 24
- B. Add 15
- C. Subtract 21
- D. Subtract 20



- A. Subtract 45
- B. Add 40
- C. Add 41
- D. Add 35

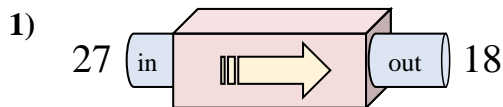


- A. Add 19
- B. Subtract 26
- C. Add 21
- D. Add 16

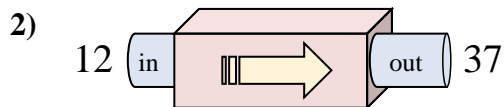
1. \_\_\_\_\_
2. \_\_\_\_\_
3. \_\_\_\_\_
4. \_\_\_\_\_
5. \_\_\_\_\_
6. \_\_\_\_\_
7. \_\_\_\_\_
8. \_\_\_\_\_
9. \_\_\_\_\_
10. \_\_\_\_\_



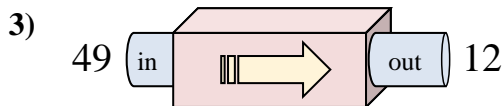
Determine which rule the function machine is using.



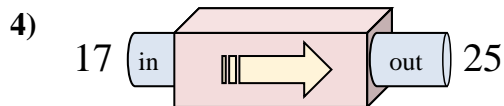
- A. Subtract 7  
B. Add 5  
C. Add 10  
D. Subtract 9



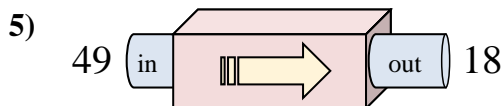
- A. Add 23  
B. Add 22  
C. Subtract 21  
D. Add 25



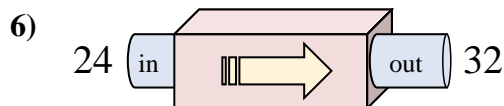
- A. Subtract 35  
B. Subtract 37  
C. Subtract 40  
D. Subtract 38



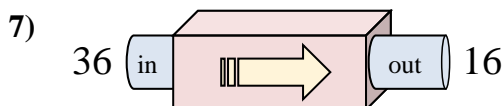
- A. Add 4  
B. Subtract 4  
C. Add 8  
D. Subtract 12



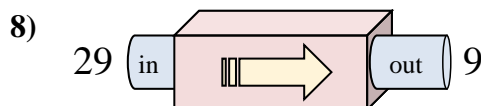
- A. Add 26  
B. Add 32  
C. Subtract 31  
D. Subtract 28



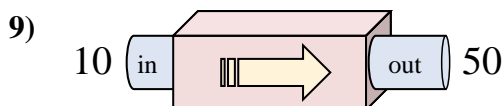
- A. Subtract 9  
B. Add 8  
C. Add 12  
D. Add 7



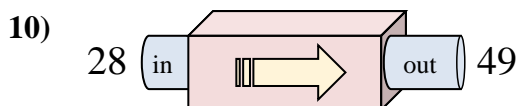
- A. Subtract 19  
B. Add 21  
C. Subtract 20  
D. Subtract 24



- A. Subtract 24  
B. Add 15  
C. Subtract 21  
D. Subtract 20



- A. Subtract 45  
B. Add 40  
C. Add 41  
D. Add 35



- A. Add 19  
B. Subtract 26  
C. Add 21  
D. Add 16

**Answers**1. **D**2. **D**3. **B**4. **C**5. **C**6. **B**7. **C**8. **D**9. **B**10. **C**