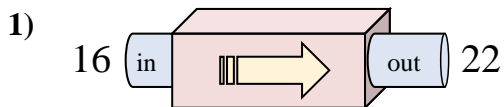


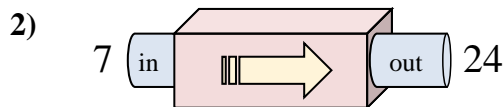


Determine which rule the function machine is using.

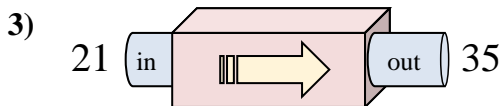
Answers



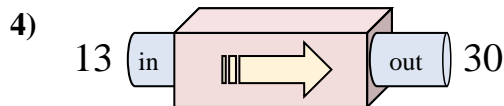
- A. Add 11
- B. Add 7
- C. Add 6
- D. Add 5



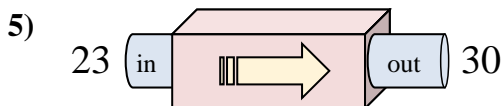
- A. Add 17
- B. Add 18
- C. Subtract 14
- D. Subtract 18



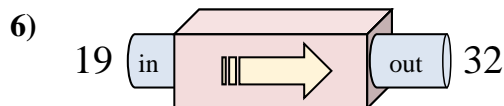
- A. Subtract 11
- B. Add 18
- C. Add 14
- D. Subtract 15



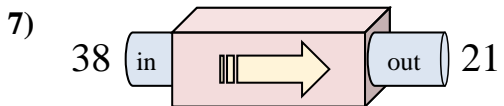
- A. Add 18
- B. Add 21
- C. Add 17
- D. Subtract 19



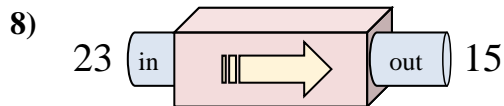
- A. Subtract 11
- B. Add 7
- C. Subtract 3
- D. Add 4



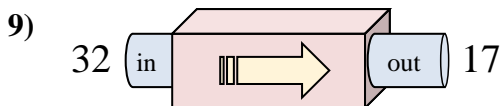
- A. Subtract 13
- B. Add 13
- C. Add 17
- D. Subtract 8



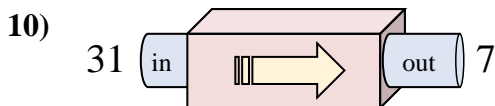
- A. Subtract 18
- B. Subtract 17
- C. Add 13
- D. Subtract 14



- A. Subtract 9
- B. Subtract 11
- C. Subtract 8
- D. Add 9



- A. Subtract 11
- B. Subtract 15
- C. Add 10
- D. Subtract 20

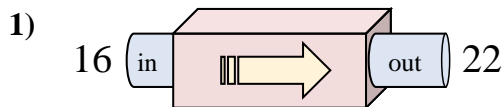


- A. Subtract 19
- B. Subtract 25
- C. Subtract 24
- D. Add 22

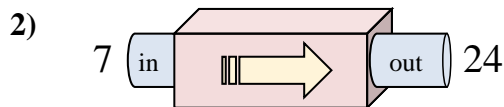
1. _____
2. _____
3. _____
4. _____
5. _____
6. _____
7. _____
8. _____
9. _____
10. _____



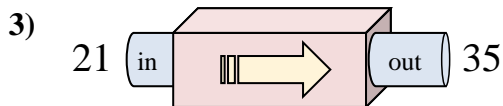
Determine which rule the function machine is using.



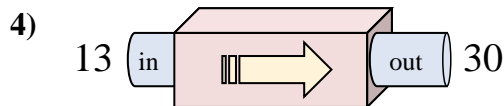
- A. Add 11
- B. Add 7
- C. Add 6
- D. Add 5



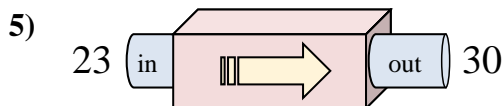
- A. Add 17
- B. Add 18
- C. Subtract 14
- D. Subtract 18



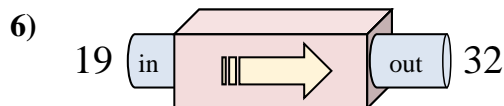
- A. Subtract 11
- B. Add 18
- C. Add 14
- D. Subtract 15



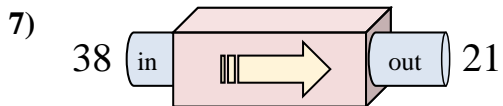
- A. Add 18
- B. Add 21
- C. Add 17
- D. Subtract 19



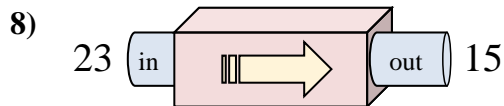
- A. Subtract 11
- B. Add 7
- C. Subtract 3
- D. Add 4



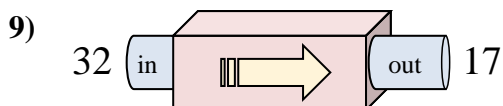
- A. Subtract 13
- B. Add 13
- C. Add 17
- D. Subtract 8



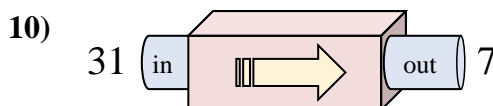
- A. Subtract 18
- B. Subtract 17
- C. Add 13
- D. Subtract 14



- A. Subtract 9
- B. Subtract 11
- C. Subtract 8
- D. Add 9



- A. Subtract 11
- B. Subtract 15
- C. Add 10
- D. Subtract 20



- A. Subtract 19
- B. Subtract 25
- C. Subtract 24
- D. Add 22

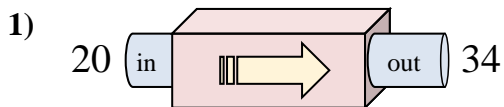
Answers

- 1. **C**
- 2. **A**
- 3. **C**
- 4. **C**
- 5. **B**
- 6. **B**
- 7. **B**
- 8. **C**
- 9. **B**
- 10. **C**

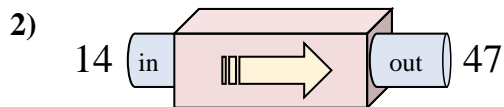


Determine which rule the function machine is using.

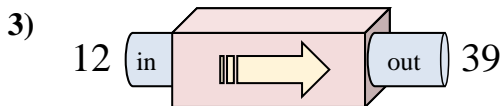
Answers



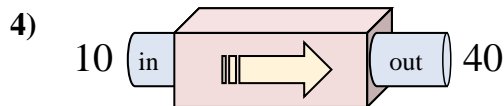
- A. Subtract 13
- B. Add 14
- C. Add 12
- D. Add 9



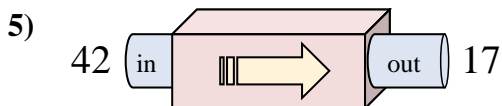
- A. Add 32
- B. Add 33
- C. Subtract 35
- D. Add 37



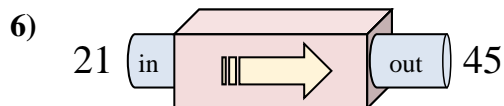
- A. Add 31
- B. Add 27
- C. Add 26
- D. Subtract 24



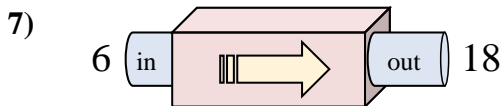
- A. Subtract 28
- B. Subtract 31
- C. Add 26
- D. Add 30



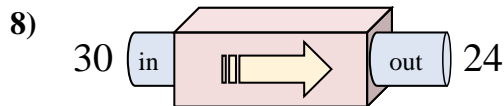
- A. Subtract 29
- B. Add 24
- C. Subtract 25
- D. Add 22



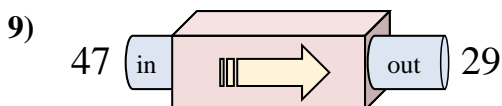
- A. Add 24
- B. Add 27
- C. Subtract 29
- D. Add 25



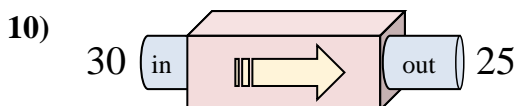
- A. Add 9
- B. Add 12
- C. Subtract 9
- D. Add 14



- A. Subtract 6
- B. Add 5
- C. Subtract 11
- D. Subtract 10



- A. Add 22
- B. Subtract 18
- C. Subtract 21
- D. Subtract 19

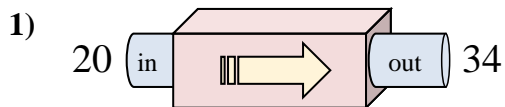


- A. Add 8
- B. Add 10
- C. Subtract 7
- D. Subtract 5

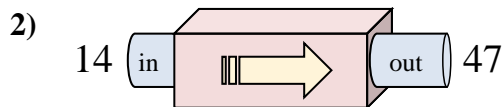
1. _____
2. _____
3. _____
4. _____
5. _____
6. _____
7. _____
8. _____
9. _____
10. _____



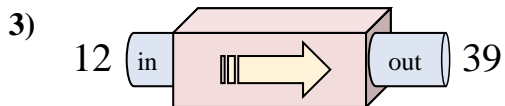
Determine which rule the function machine is using.



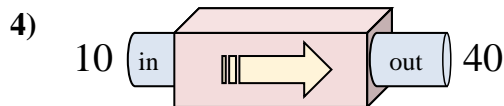
- A. Subtract 13
- B. Add 14
- C. Add 12
- D. Add 9



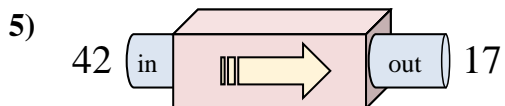
- A. Add 32
- B. Add 33
- C. Subtract 35
- D. Add 37



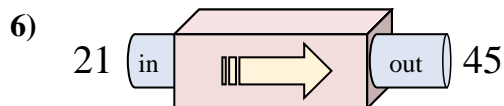
- A. Add 31
- B. Add 27
- C. Add 26
- D. Subtract 24



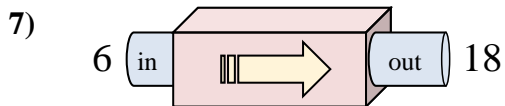
- A. Subtract 28
- B. Subtract 31
- C. Add 26
- D. Add 30



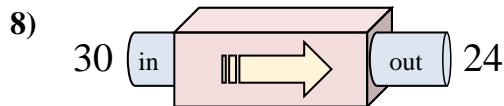
- A. Subtract 29
- B. Add 24
- C. Subtract 25
- D. Add 22



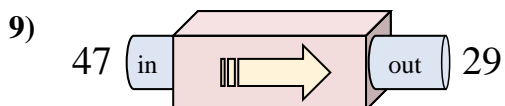
- A. Add 24
- B. Add 27
- C. Subtract 29
- D. Add 25



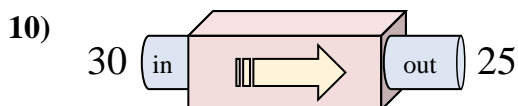
- A. Add 9
- B. Add 12
- C. Subtract 9
- D. Add 14



- A. Subtract 6
- B. Add 5
- C. Subtract 11
- D. Subtract 10



- A. Add 22
- B. Subtract 18
- C. Subtract 21
- D. Subtract 19



- A. Add 8
- B. Add 10
- C. Subtract 7
- D. Subtract 5

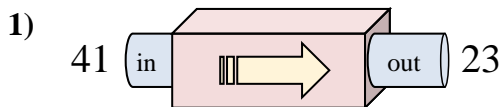
Answers

- 1. **B**
- 2. **B**
- 3. **B**
- 4. **D**
- 5. **C**
- 6. **A**
- 7. **B**
- 8. **A**
- 9. **B**
- 10. **D**

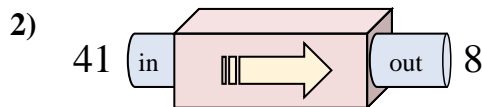


Determine which rule the function machine is using.

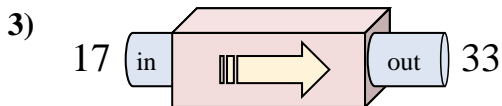
Answers



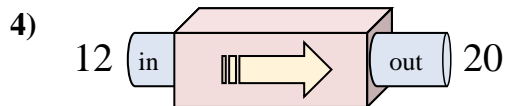
- A. Subtract 18
- B. Add 21
- C. Add 16
- D. Subtract 16



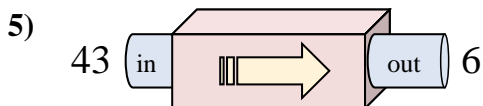
- A. Subtract 33
- B. Subtract 29
- C. Add 31
- D. Subtract 31



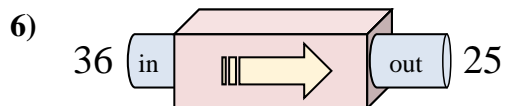
- A. Add 16
- B. Subtract 18
- C. Add 20
- D. Add 18



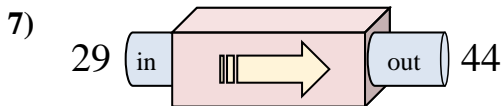
- A. Add 11
- B. Subtract 7
- C. Add 7
- D. Add 8



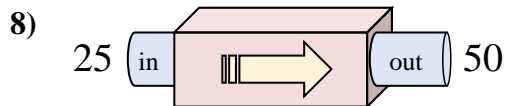
- A. Subtract 37
- B. Subtract 38
- C. Subtract 34
- D. Add 42



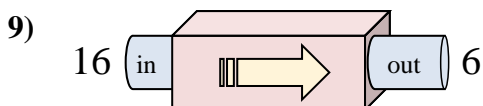
- A. Subtract 14
- B. Subtract 15
- C. Add 8
- D. Subtract 11



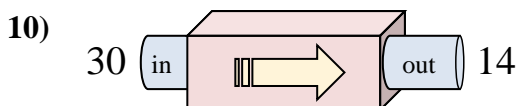
- A. Subtract 12
- B. Add 16
- C. Add 17
- D. Add 15



- A. Add 30
- B. Subtract 30
- C. Add 25
- D. Add 26



- A. Subtract 6
- B. Subtract 10
- C. Subtract 15
- D. Subtract 13

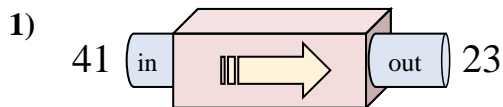


- A. Subtract 19
- B. Subtract 12
- C. Subtract 16
- D. Add 12

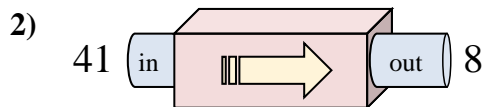
1. _____
2. _____
3. _____
4. _____
5. _____
6. _____
7. _____
8. _____
9. _____
10. _____



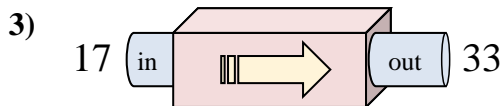
Determine which rule the function machine is using.



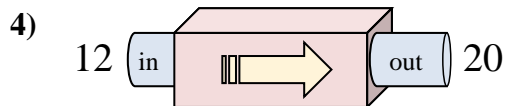
- A. Subtract 18
- B. Add 21
- C. Add 16
- D. Subtract 16



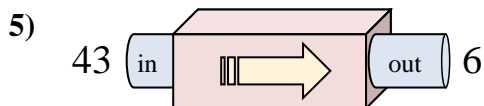
- A. Subtract 33
- B. Subtract 29
- C. Add 31
- D. Subtract 31



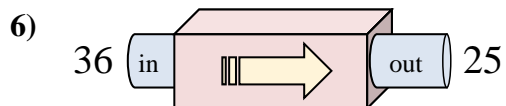
- A. Add 16
- B. Subtract 18
- C. Add 20
- D. Add 18



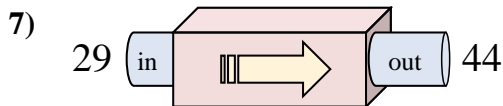
- A. Add 11
- B. Subtract 7
- C. Add 7
- D. Add 8



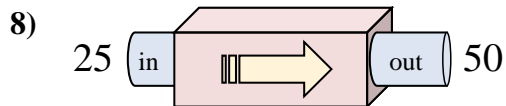
- A. Subtract 37
- B. Subtract 38
- C. Subtract 34
- D. Add 42



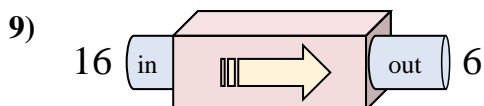
- A. Subtract 14
- B. Subtract 15
- C. Add 8
- D. Subtract 11



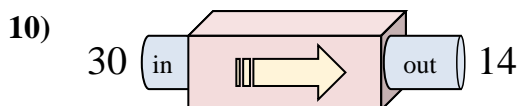
- A. Subtract 12
- B. Add 16
- C. Add 17
- D. Add 15



- A. Add 30
- B. Subtract 30
- C. Add 25
- D. Add 26



- A. Subtract 6
- B. Subtract 10
- C. Subtract 15
- D. Subtract 13



- A. Subtract 19
- B. Subtract 12
- C. Subtract 16
- D. Add 12

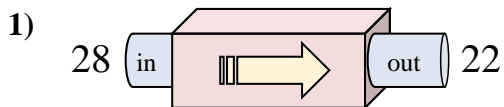
Answers

- 1. **A**
- 2. **A**
- 3. **A**
- 4. **D**
- 5. **A**
- 6. **D**
- 7. **D**
- 8. **C**
- 9. **B**
- 10. **C**

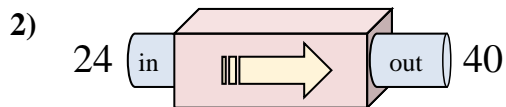


Determine which rule the function machine is using.

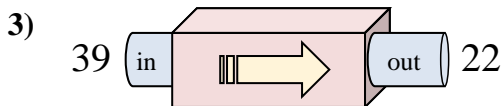
Answers



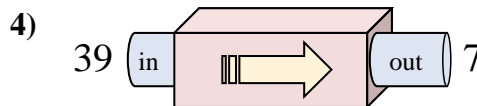
- A. Subtract 5
- B. Subtract 11
- C. Subtract 6
- D. Add 5



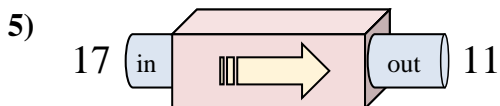
- A. Add 20
- B. Add 17
- C. Subtract 19
- D. Add 16



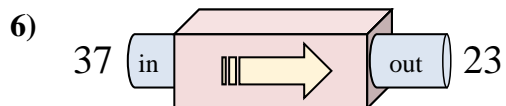
- A. Add 17
- B. Subtract 17
- C. Subtract 20
- D. Subtract 19



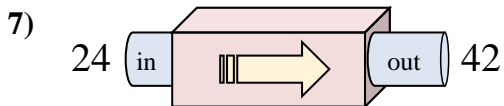
- A. Subtract 30
- B. Subtract 35
- C. Subtract 32
- D. Subtract 34



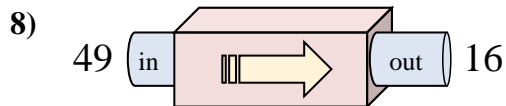
- A. Add 9
- B. Subtract 8
- C. Subtract 6
- D. Subtract 2



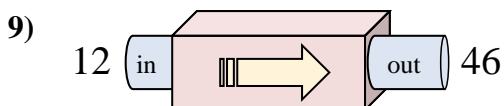
- A. Subtract 12
- B. Add 10
- C. Subtract 14
- D. Subtract 15



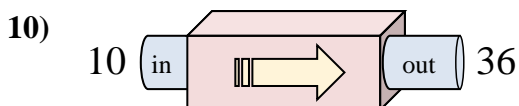
- A. Add 18
- B. Add 15
- C. Add 22
- D. Add 14



- A. Subtract 33
- B. Subtract 32
- C. Add 32
- D. Add 30



- A. Add 37
- B. Add 32
- C. Add 34
- D. Add 38

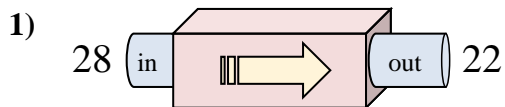


- A. Add 29
- B. Add 26
- C. Subtract 29
- D. Add 30

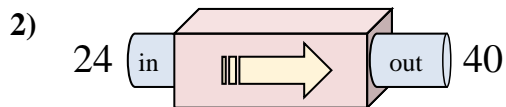
1. _____
2. _____
3. _____
4. _____
5. _____
6. _____
7. _____
8. _____
9. _____
10. _____



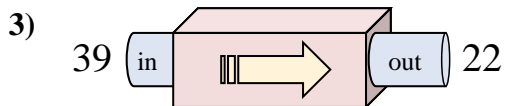
Determine which rule the function machine is using.



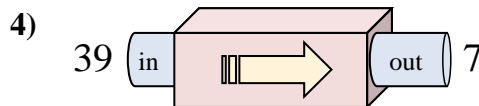
- A. Subtract 5
- B. Subtract 11
- C. Subtract 6
- D. Add 5



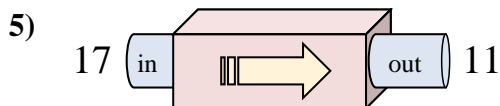
- A. Add 20
- B. Add 17
- C. Subtract 19
- D. Add 16



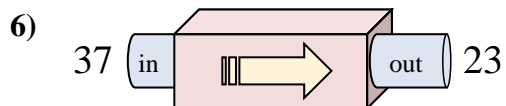
- A. Add 17
- B. Subtract 17
- C. Subtract 20
- D. Subtract 19



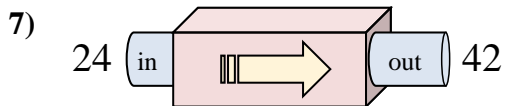
- A. Subtract 30
- B. Subtract 35
- C. Subtract 32
- D. Subtract 34



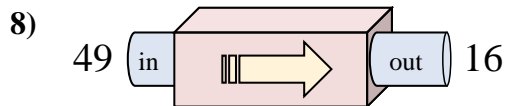
- A. Add 9
- B. Subtract 8
- C. Subtract 6
- D. Subtract 2



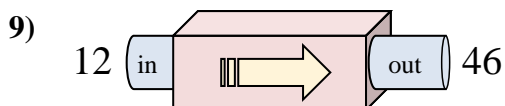
- A. Subtract 12
- B. Add 10
- C. Subtract 14
- D. Subtract 15



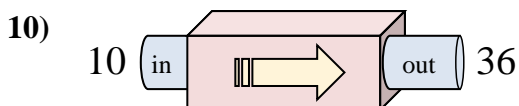
- A. Add 18
- B. Add 15
- C. Add 22
- D. Add 14



- A. Subtract 33
- B. Subtract 32
- C. Add 32
- D. Add 30



- A. Add 37
- B. Add 32
- C. Add 34
- D. Add 38



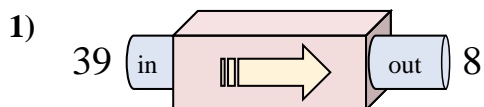
- A. Add 29
- B. Add 26
- C. Subtract 29
- D. Add 30

Answers

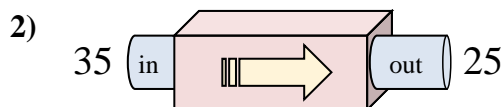
- 1. **C**
- 2. **D**
- 3. **B**
- 4. **C**
- 5. **C**
- 6. **C**
- 7. **A**
- 8. **A**
- 9. **C**
- 10. **B**



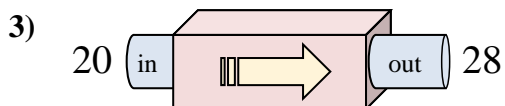
Determine which rule the function machine is using.

Answers

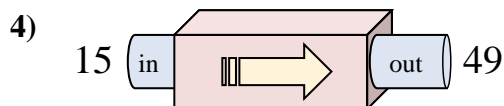
- A. Subtract 34
- B. Add 28
- C. Add 26
- D. Subtract 31



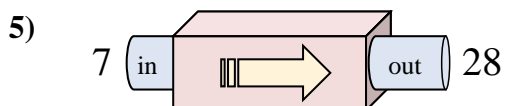
- A. Subtract 6
- B. Subtract 14
- C. Subtract 10
- D. Add 9



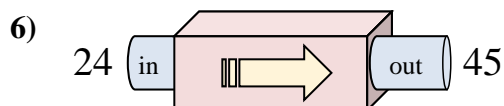
- A. Add 3
- B. Add 4
- C. Add 9
- D. Add 8



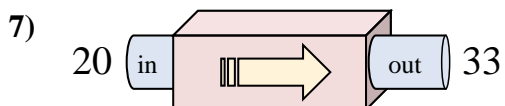
- A. Subtract 36
- B. Add 29
- C. Add 34
- D. Add 31



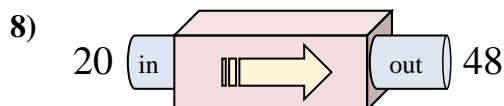
- A. Subtract 20
- B. Add 23
- C. Add 20
- D. Add 21



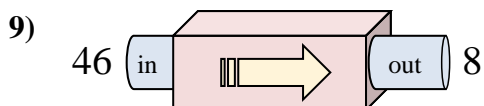
- A. Add 17
- B. Subtract 22
- C. Add 18
- D. Add 21



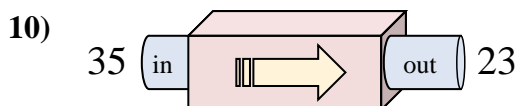
- A. Add 9
- B. Add 15
- C. Add 17
- D. Add 13



- A. Add 28
- B. Subtract 27
- C. Add 25
- D. Add 29



- A. Subtract 42
- B. Subtract 40
- C. Add 34
- D. Subtract 38

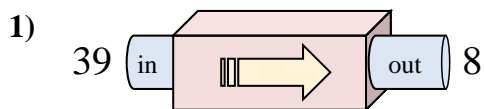


- A. Subtract 10
- B. Subtract 12
- C. Add 17
- D. Add 8

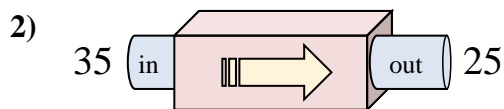
1. _____
2. _____
3. _____
4. _____
5. _____
6. _____
7. _____
8. _____
9. _____
10. _____



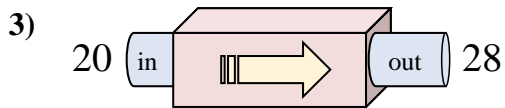
Determine which rule the function machine is using.



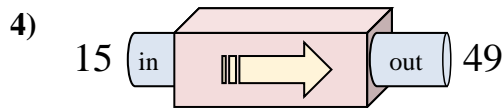
- A. Subtract 34
- B. Add 28
- C. Add 26
- D. Subtract 31



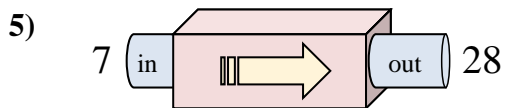
- A. Subtract 6
- B. Subtract 14
- C. Subtract 10
- D. Add 9



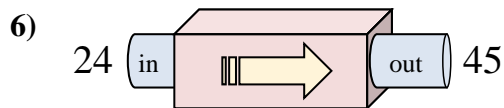
- A. Add 3
- B. Add 4
- C. Add 9
- D. Add 8



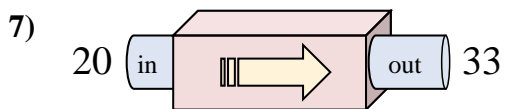
- A. Subtract 36
- B. Add 29
- C. Add 34
- D. Add 31



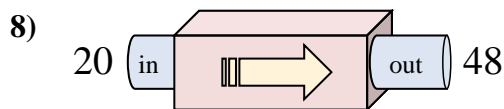
- A. Subtract 20
- B. Add 23
- C. Add 20
- D. Add 21



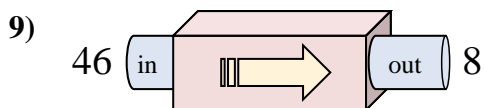
- A. Add 17
- B. Subtract 22
- C. Add 18
- D. Add 21



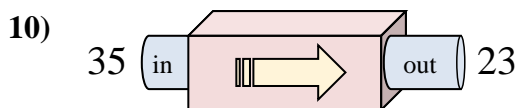
- A. Add 9
- B. Add 15
- C. Add 17
- D. Add 13



- A. Add 28
- B. Subtract 27
- C. Add 25
- D. Add 29



- A. Subtract 42
- B. Subtract 40
- C. Add 34
- D. Subtract 38



- A. Subtract 10
- B. Subtract 12
- C. Add 17
- D. Add 8

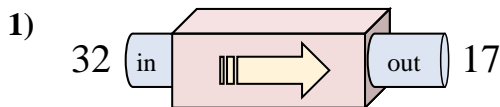
Answers

- 1. **D**
- 2. **C**
- 3. **D**
- 4. **C**
- 5. **D**
- 6. **D**
- 7. **D**
- 8. **A**
- 9. **D**
- 10. **B**

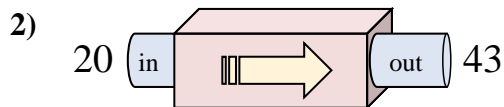


Determine which rule the function machine is using.

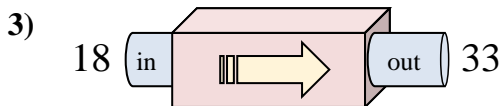
Answers



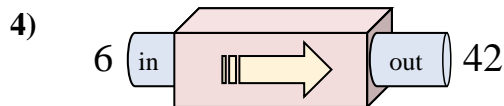
- A. Subtract 20
- B. Subtract 14
- C. Add 12
- D. Subtract 15



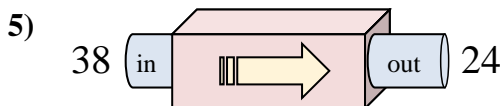
- A. Add 24
- B. Add 21
- C. Add 20
- D. Add 23



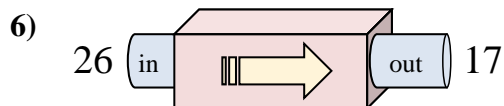
- A. Add 15
- B. Subtract 19
- C. Add 17
- D. Add 10



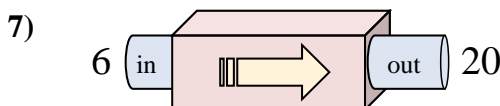
- A. Add 31
- B. Subtract 31
- C. Add 36
- D. Subtract 40



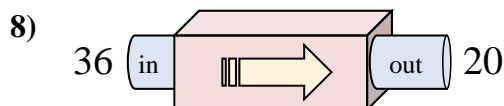
- A. Subtract 12
- B. Subtract 14
- C. Subtract 13
- D. Add 11



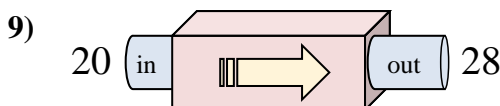
- A. Add 6
- B. Subtract 8
- C. Subtract 9
- D. Subtract 4



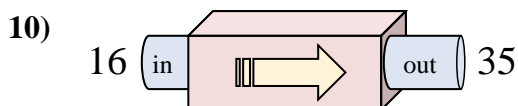
- A. Subtract 13
- B. Subtract 14
- C. Add 18
- D. Add 14



- A. Subtract 16
- B. Subtract 11
- C. Add 16
- D. Subtract 13



- A. Add 5
- B. Add 8
- C. Subtract 11
- D. Add 7

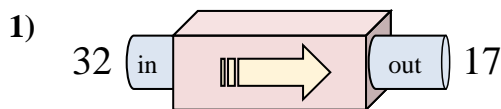


- A. Add 24
- B. Add 19
- C. Subtract 16
- D. Subtract 24

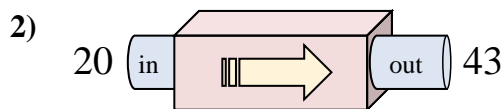
1. _____
2. _____
3. _____
4. _____
5. _____
6. _____
7. _____
8. _____
9. _____
10. _____



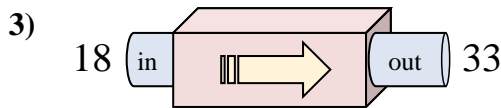
Determine which rule the function machine is using.



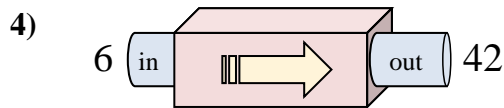
- A. Subtract 20
- B. Subtract 14
- C. Add 12
- D. Subtract 15



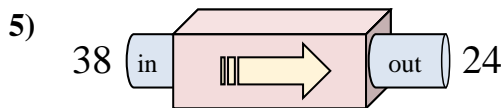
- A. Add 24
- B. Add 21
- C. Add 20
- D. Add 23



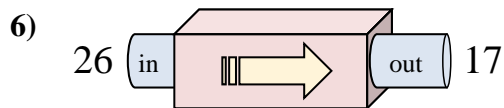
- A. Add 15
- B. Subtract 19
- C. Add 17
- D. Add 10



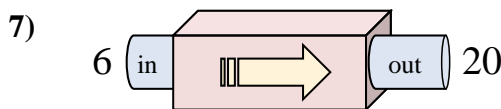
- A. Add 31
- B. Subtract 31
- C. Add 36
- D. Subtract 40



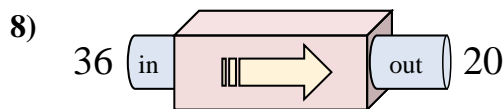
- A. Subtract 12
- B. Subtract 14
- C. Subtract 13
- D. Add 11



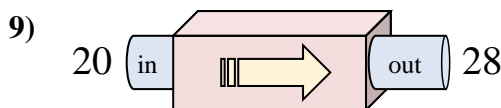
- A. Add 6
- B. Subtract 8
- C. Subtract 9
- D. Subtract 4



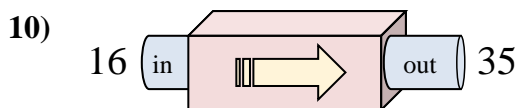
- A. Subtract 13
- B. Subtract 14
- C. Add 18
- D. Add 14



- A. Subtract 16
- B. Subtract 11
- C. Add 16
- D. Subtract 13



- A. Add 5
- B. Add 8
- C. Subtract 11
- D. Add 7



- A. Add 24
- B. Add 19
- C. Subtract 16
- D. Subtract 24

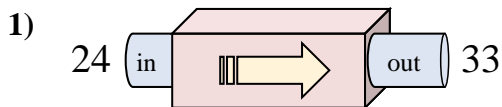
Answers

- 1. **D**
- 2. **D**
- 3. **A**
- 4. **C**
- 5. **B**
- 6. **C**
- 7. **D**
- 8. **A**
- 9. **B**
- 10. **B**

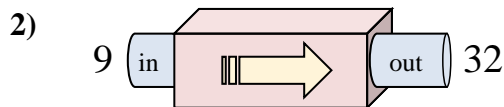


Determine which rule the function machine is using.

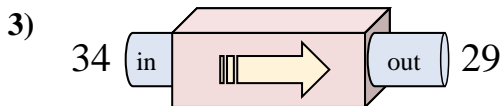
Answers



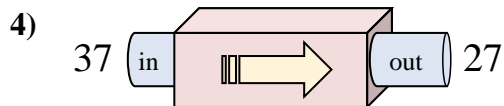
- A. Add 12
- B. Subtract 8
- C. Add 13
- D. Add 9



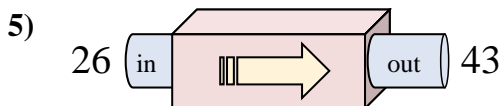
- A. Add 25
- B. Add 23
- C. Add 26
- D. Subtract 19



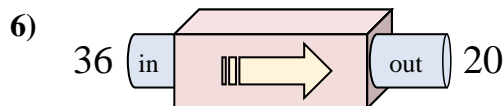
- A. Add 7
- B. Subtract 5
- C. Subtract 6
- D. Add 3



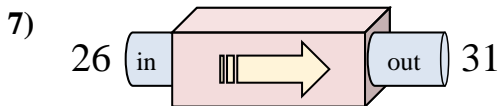
- A. Add 13
- B. Subtract 10
- C. Subtract 15
- D. Subtract 13



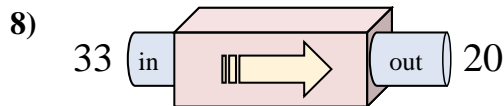
- A. Add 14
- B. Subtract 22
- C. Add 15
- D. Add 17



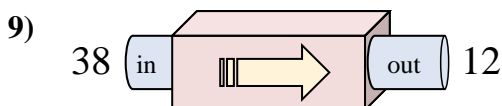
- A. Subtract 16
- B. Add 19
- C. Add 21
- D. Subtract 17



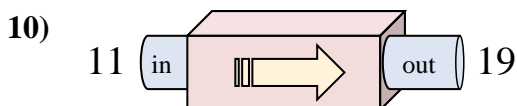
- A. Add 5
- B. Subtract 7
- C. Add 7
- D. Subtract 4



- A. Subtract 16
- B. Add 16
- C. Subtract 8
- D. Subtract 13



- A. Subtract 29
- B. Subtract 30
- C. Subtract 26
- D. Add 21

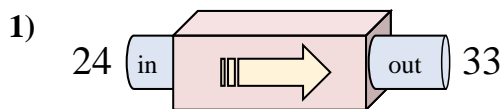


- A. Add 8
- B. Add 9
- C. Subtract 13
- D. Add 5

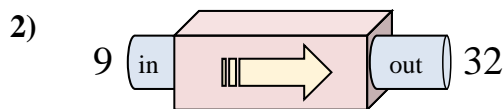
1. _____
2. _____
3. _____
4. _____
5. _____
6. _____
7. _____
8. _____
9. _____
10. _____



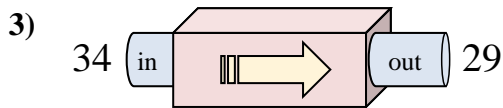
Determine which rule the function machine is using.



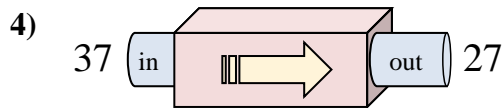
- A. Add 12
- B. Subtract 8
- C. Add 13
- D. Add 9



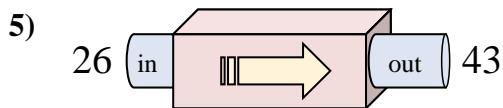
- A. Add 25
- B. Add 23
- C. Add 26
- D. Subtract 19



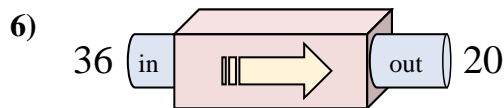
- A. Add 7
- B. Subtract 5
- C. Subtract 6
- D. Add 3



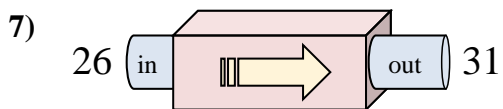
- A. Add 13
- B. Subtract 10
- C. Subtract 15
- D. Subtract 13



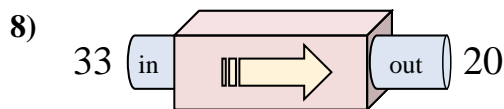
- A. Add 14
- B. Subtract 22
- C. Add 15
- D. Add 17



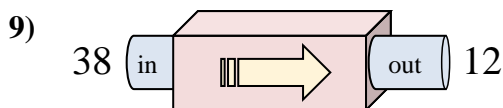
- A. Subtract 16
- B. Add 19
- C. Add 21
- D. Subtract 17



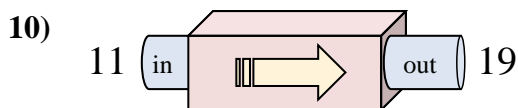
- A. Add 5
- B. Subtract 7
- C. Add 7
- D. Subtract 4



- A. Subtract 16
- B. Add 16
- C. Subtract 8
- D. Subtract 13



- A. Subtract 29
- B. Subtract 30
- C. Subtract 26
- D. Add 21



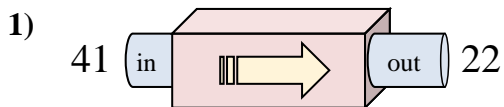
- A. Add 8
- B. Add 9
- C. Subtract 13
- D. Add 5

Answers1. **D**2. **B**3. **B**4. **B**5. **D**6. **A**7. **A**8. **D**9. **C**10. **A**

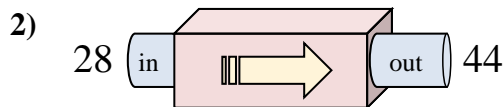


Determine which rule the function machine is using.

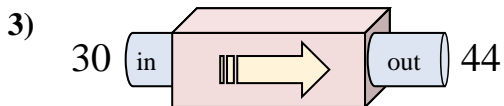
Answers



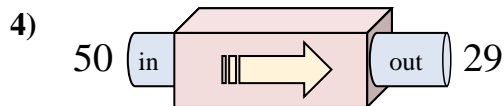
- A. Subtract 19
- B. Add 16
- C. Subtract 24
- D. Add 24



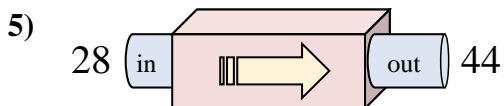
- A. Add 16
- B. Add 18
- C. Subtract 16
- D. Add 21



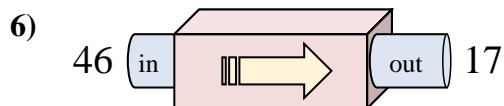
- A. Add 12
- B. Add 17
- C. Subtract 18
- D. Add 14



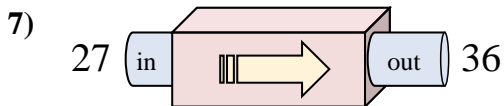
- A. Add 23
- B. Subtract 21
- C. Add 24
- D. Subtract 23



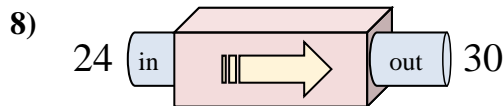
- A. Add 12
- B. Add 19
- C. Add 16
- D. Add 21



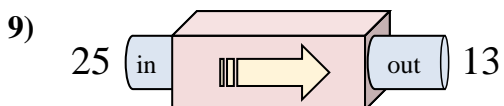
- A. Subtract 25
- B. Subtract 29
- C. Add 31
- D. Add 34



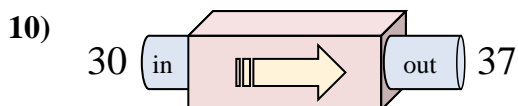
- A. Add 7
- B. Add 6
- C. Add 9
- D. Subtract 13



- A. Subtract 7
- B. Add 2
- C. Add 6
- D. Add 10



- A. Add 12
- B. Subtract 8
- C. Add 11
- D. Subtract 12

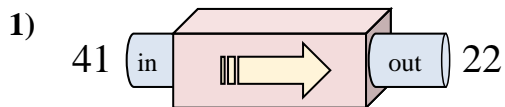


- A. Add 7
- B. Add 9
- C. Add 3
- D. Subtract 3

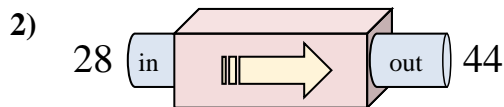
1. _____
2. _____
3. _____
4. _____
5. _____
6. _____
7. _____
8. _____
9. _____
10. _____



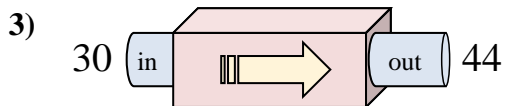
Determine which rule the function machine is using.



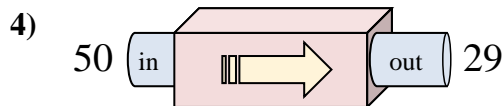
- A. Subtract 19
- B. Add 16
- C. Subtract 24
- D. Add 24



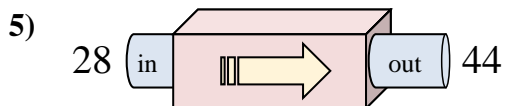
- A. Add 16
- B. Add 18
- C. Subtract 16
- D. Add 21



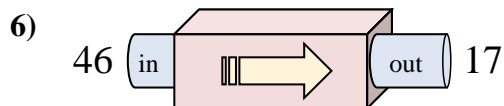
- A. Add 12
- B. Add 17
- C. Subtract 18
- D. Add 14



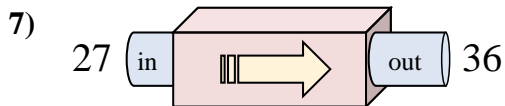
- A. Add 23
- B. Subtract 21
- C. Add 24
- D. Subtract 23



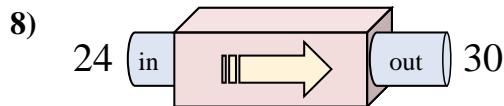
- A. Add 12
- B. Add 19
- C. Add 16
- D. Add 21



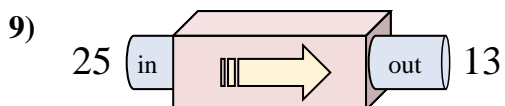
- A. Subtract 25
- B. Subtract 29
- C. Add 31
- D. Add 34



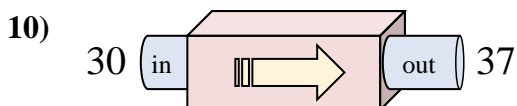
- A. Add 7
- B. Add 6
- C. Add 9
- D. Subtract 13



- A. Subtract 7
- B. Add 2
- C. Add 6
- D. Add 10



- A. Add 12
- B. Subtract 8
- C. Add 11
- D. Subtract 12



- A. Add 7
- B. Add 9
- C. Add 3
- D. Subtract 3

Answers

1. **A**

2. **A**

3. **D**

4. **B**

5. **C**

6. **B**

7. **C**

8. **C**

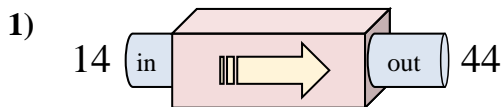
9. **D**

10. **A**

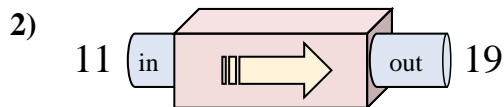


Determine which rule the function machine is using.

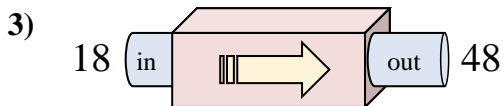
Answers



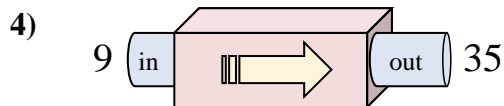
- A. Add 27
- B. Add 30
- C. Add 25
- D. Subtract 32



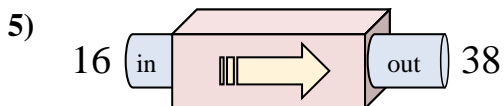
- A. Add 8
- B. Add 6
- C. Subtract 3
- D. Add 4



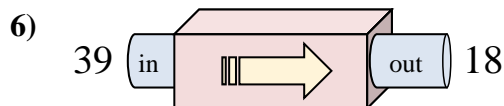
- A. Subtract 25
- B. Add 30
- C. Add 29
- D. Add 34



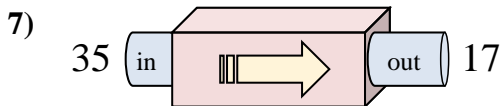
- A. Add 28
- B. Add 26
- C. Subtract 30
- D. Subtract 22



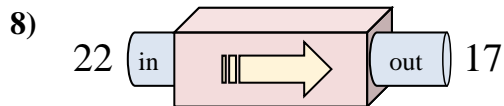
- A. Add 22
- B. Add 27
- C. Add 24
- D. Subtract 17



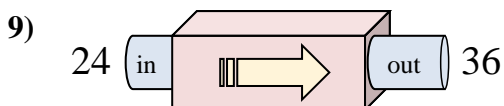
- A. Subtract 20
- B. Subtract 23
- C. Subtract 16
- D. Subtract 21



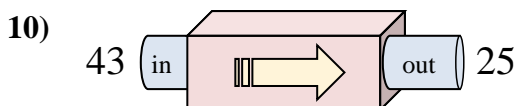
- A. Subtract 17
- B. Add 21
- C. Subtract 14
- D. Subtract 18



- A. Subtract 10
- B. Add 2
- C. Subtract 6
- D. Subtract 5



- A. Subtract 17
- B. Subtract 12
- C. Add 12
- D. Add 9

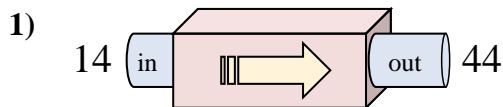


- A. Add 15
- B. Subtract 16
- C. Add 13
- D. Subtract 18

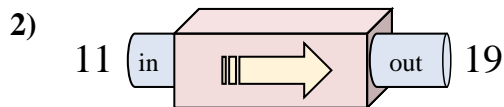
1. _____
2. _____
3. _____
4. _____
5. _____
6. _____
7. _____
8. _____
9. _____
10. _____



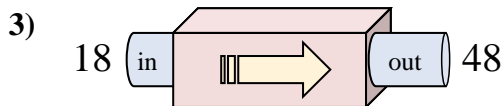
Determine which rule the function machine is using.



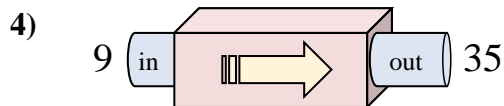
- A. Add 27
- B. Add 30
- C. Add 25
- D. Subtract 32



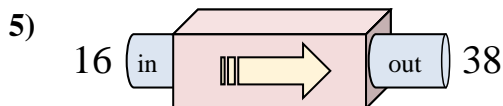
- A. Add 8
- B. Add 6
- C. Subtract 3
- D. Add 4



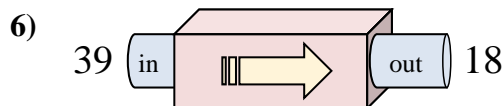
- A. Subtract 25
- B. Add 30
- C. Add 29
- D. Add 34



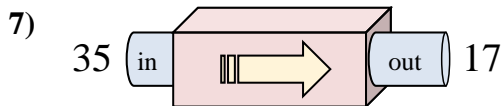
- A. Add 28
- B. Add 26
- C. Subtract 30
- D. Subtract 22



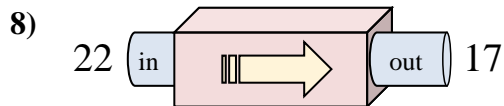
- A. Add 22
- B. Add 27
- C. Add 24
- D. Subtract 17



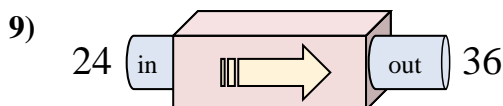
- A. Subtract 20
- B. Subtract 23
- C. Subtract 16
- D. Subtract 21



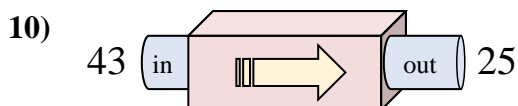
- A. Subtract 17
- B. Add 21
- C. Subtract 14
- D. Subtract 18



- A. Subtract 10
- B. Add 2
- C. Subtract 6
- D. Subtract 5



- A. Subtract 17
- B. Subtract 12
- C. Add 12
- D. Add 9



- A. Add 15
- B. Subtract 16
- C. Add 13
- D. Subtract 18

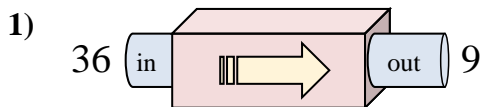
Answers

- 1. **B**
- 2. **A**
- 3. **B**
- 4. **B**
- 5. **A**
- 6. **D**
- 7. **D**
- 8. **D**
- 9. **C**
- 10. **D**

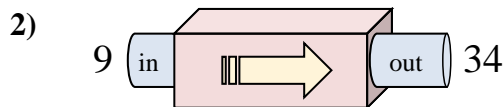


Determine which rule the function machine is using.

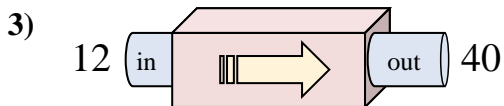
Answers



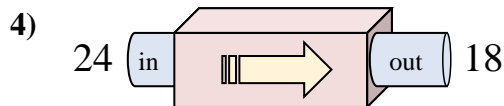
- A. Add 30
- B. Subtract 32
- C. Subtract 31
- D. Subtract 27



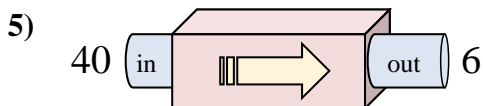
- A. Add 23
- B. Subtract 29
- C. Subtract 21
- D. Add 25



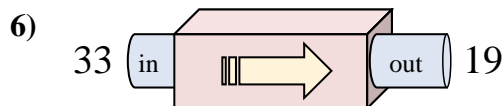
- A. Subtract 30
- B. Add 33
- C. Add 29
- D. Add 28



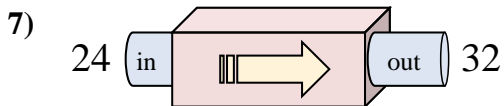
- A. Add 4
- B. Subtract 2
- C. Subtract 6
- D. Subtract 5



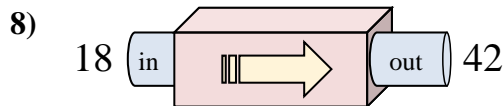
- A. Add 29
- B. Subtract 39
- C. Subtract 34
- D. Add 30



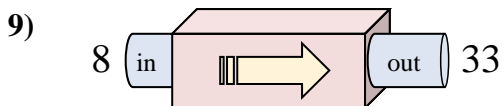
- A. Add 16
- B. Subtract 17
- C. Subtract 14
- D. Subtract 9



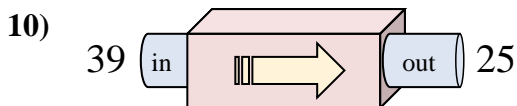
- A. Add 11
- B. Add 8
- C. Subtract 12
- D. Add 12



- A. Add 24
- B. Add 23
- C. Subtract 23
- D. Add 21



- A. Add 25
- B. Subtract 24
- C. Subtract 26
- D. Add 27

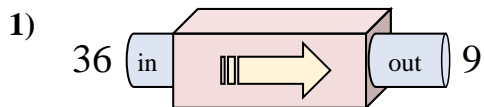


- A. Add 9
- B. Add 14
- C. Subtract 10
- D. Subtract 14

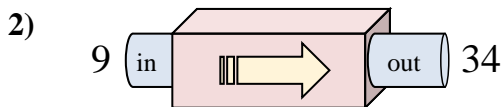
1. _____
2. _____
3. _____
4. _____
5. _____
6. _____
7. _____
8. _____
9. _____
10. _____



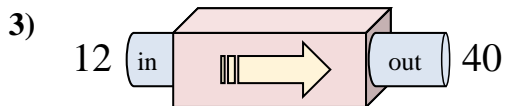
Determine which rule the function machine is using.



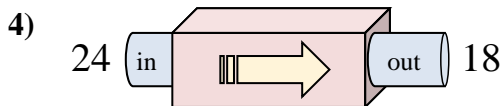
- A. Add 30
- B. Subtract 32
- C. Subtract 31
- D. Subtract 27



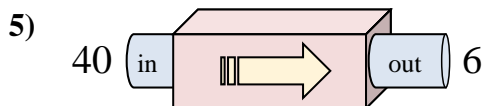
- A. Add 23
- B. Subtract 29
- C. Subtract 21
- D. Add 25



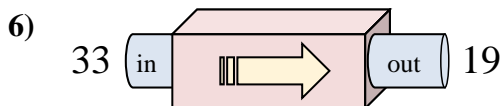
- A. Subtract 30
- B. Add 33
- C. Add 29
- D. Add 28



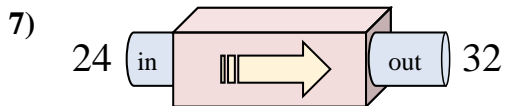
- A. Add 4
- B. Subtract 2
- C. Subtract 6
- D. Subtract 5



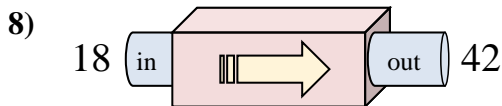
- A. Add 29
- B. Subtract 39
- C. Subtract 34
- D. Add 30



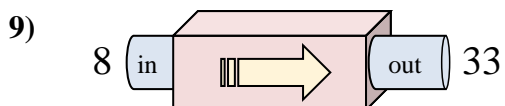
- A. Add 16
- B. Subtract 17
- C. Subtract 14
- D. Subtract 9



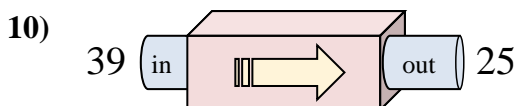
- A. Add 11
- B. Add 8
- C. Subtract 12
- D. Add 12



- A. Add 24
- B. Add 23
- C. Subtract 23
- D. Add 21



- A. Add 25
- B. Subtract 24
- C. Subtract 26
- D. Add 27



- A. Add 9
- B. Add 14
- C. Subtract 10
- D. Subtract 14

Answers

- 1. **D**
- 2. **D**
- 3. **D**
- 4. **C**
- 5. **C**
- 6. **C**
- 7. **B**
- 8. **A**
- 9. **A**
- 10. **D**