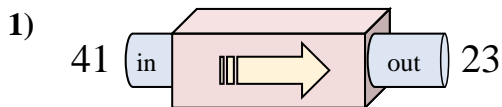


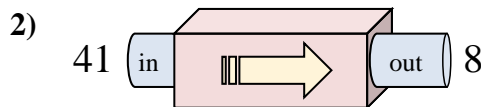


Determine which rule the function machine is using.

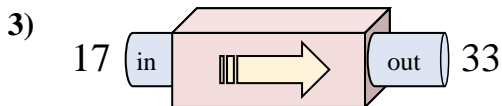
Answers



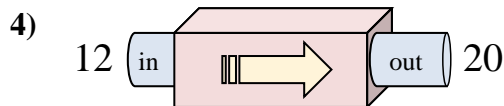
- A. Subtract 18
- B. Add 21
- C. Add 16
- D. Subtract 16



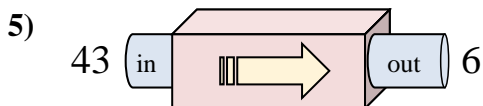
- A. Subtract 33
- B. Subtract 29
- C. Add 31
- D. Subtract 31



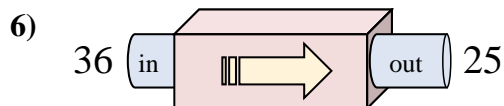
- A. Add 16
- B. Subtract 18
- C. Add 20
- D. Add 18



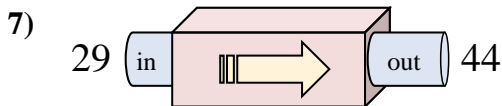
- A. Add 11
- B. Subtract 7
- C. Add 7
- D. Add 8



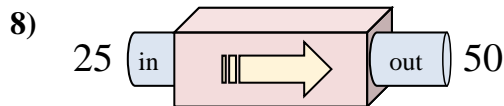
- A. Subtract 37
- B. Subtract 38
- C. Subtract 34
- D. Add 42



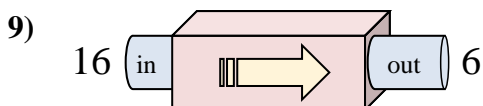
- A. Subtract 14
- B. Subtract 15
- C. Add 8
- D. Subtract 11



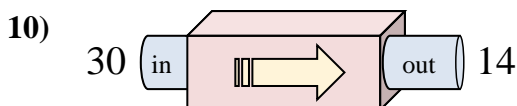
- A. Subtract 12
- B. Add 16
- C. Add 17
- D. Add 15



- A. Add 30
- B. Subtract 30
- C. Add 25
- D. Add 26



- A. Subtract 6
- B. Subtract 10
- C. Subtract 15
- D. Subtract 13

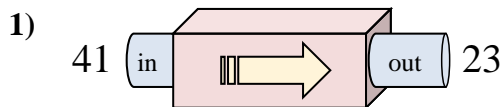


- A. Subtract 19
- B. Subtract 12
- C. Subtract 16
- D. Add 12

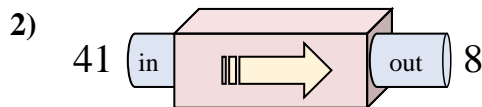
1. _____
2. _____
3. _____
4. _____
5. _____
6. _____
7. _____
8. _____
9. _____
10. _____



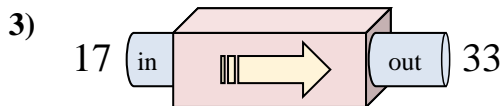
Determine which rule the function machine is using.



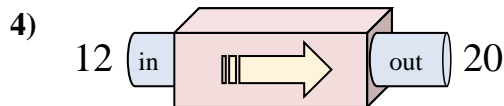
- A. Subtract 18
- B. Add 21
- C. Add 16
- D. Subtract 16



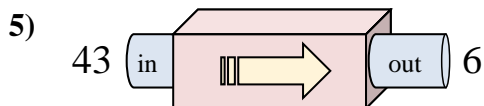
- A. Subtract 33
- B. Subtract 29
- C. Add 31
- D. Subtract 31



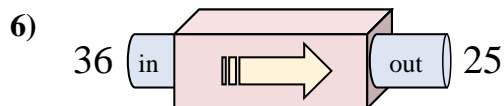
- A. Add 16
- B. Subtract 18
- C. Add 20
- D. Add 18



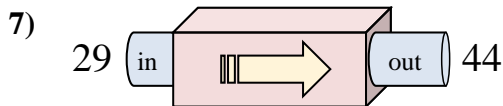
- A. Add 11
- B. Subtract 7
- C. Add 7
- D. Add 8



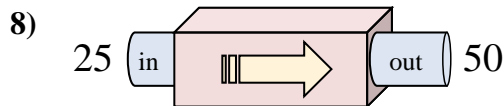
- A. Subtract 37
- B. Subtract 38
- C. Subtract 34
- D. Add 42



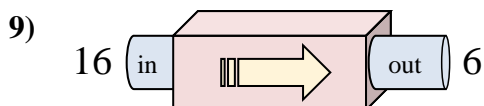
- A. Subtract 14
- B. Subtract 15
- C. Add 8
- D. Subtract 11



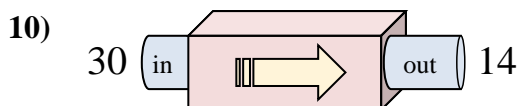
- A. Subtract 12
- B. Add 16
- C. Add 17
- D. Add 15



- A. Add 30
- B. Subtract 30
- C. Add 25
- D. Add 26



- A. Subtract 6
- B. Subtract 10
- C. Subtract 15
- D. Subtract 13



- A. Subtract 19
- B. Subtract 12
- C. Subtract 16
- D. Add 12

Answers

- 1. **A**
- 2. **A**
- 3. **A**
- 4. **D**
- 5. **A**
- 6. **D**
- 7. **D**
- 8. **C**
- 9. **B**
- 10. **C**