



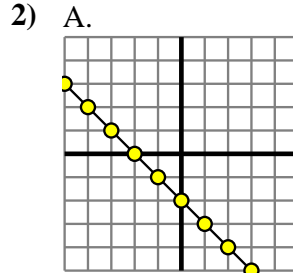
Determine which function has the greater change of rate. If the rate is the same answer with 'same'.

Answers

1) A.

X	Y
-10	-48
-8	-40
-5	-28
-2	-16
10	32

B.
 $Y=6 \times X - (X \times 4)$



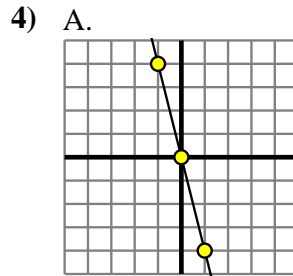
B.

X	Y
0	0
5	75
8	120
9	135
10	150

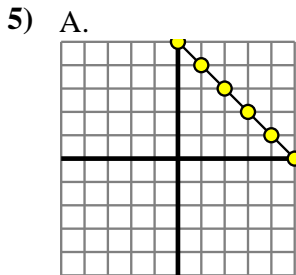
3) A.
 $Y=3 \times X + 5$

B.

X	Y
-10	-30
-6	-18
0	0
3	9
8	24

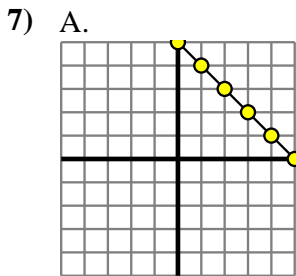
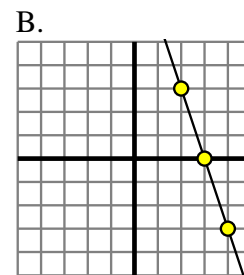


B.
 $Y=7 \times X - (X - 9)$



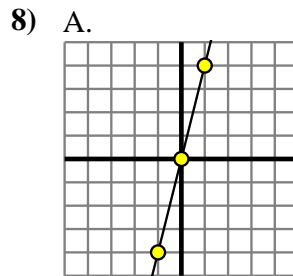
B.
 $Y=X \times 8$

6) A.
 $Y=8 \times X - (X + 2)$



B.

X	Y
-8	-59
-4	-31
0	-3
3	18
10	67



B.

X	Y
-6	-18
-5	-15
-2	-6
0	0
6	18

1. _____
2. _____
3. _____
4. _____
5. _____
6. _____
7. _____
8. _____

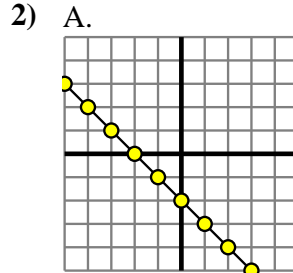


Determine which function has the greater change of rate. If the rate is the same answer with 'same'.

1) A.

X	Y
-10	-48
-8	-40
-5	-28
-2	-16
10	32

B.
 $Y=6 \times X - (X \times 4)$



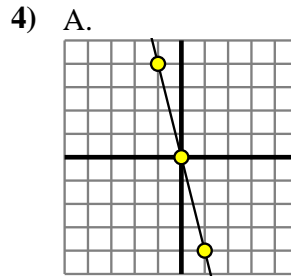
B.

X	Y
0	0
5	75
8	120
9	135
10	150

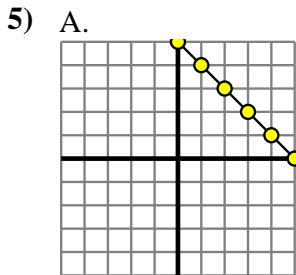
3) A.
 $Y=3 \times X + 5$

B.

X	Y
-10	-30
-6	-18
0	0
3	9
8	24

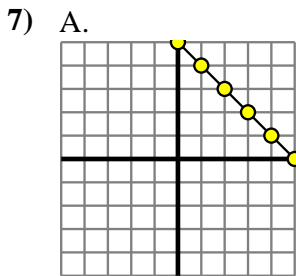
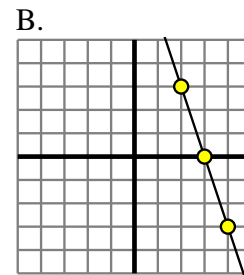


B.
 $Y=7 \times X - (X - 9)$



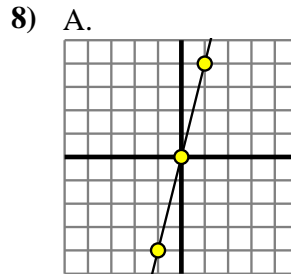
B.
 $Y=X \times 8$

6) A.
 $Y=8 \times X - (X + 2)$



B.

X	Y
-8	-59
-4	-31
0	-3
3	18
10	67



B.

X	Y
-6	-18
-5	-15
-2	-6
0	0
6	18

Answers

1. **A**
2. **B**
3. **same**
4. **B**
5. **B**
6. **A**
7. **B**
8. **A**