



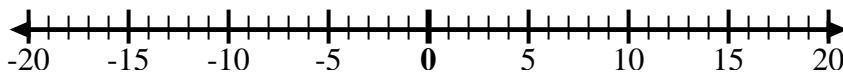
Use the numberlines to show each expression and solve.

Ex) Start at -9 and add 5



Ex. $-9 + 5 = -4$

1) Start at -10 and add 14



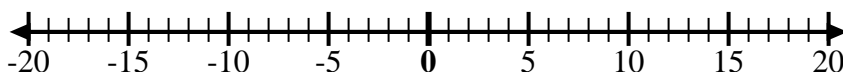
1. _____

2) Start at 3 and add -10



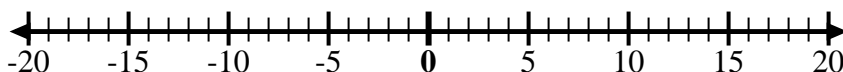
2. _____

3) Start at 7 and add -6



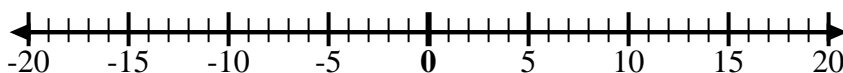
3. _____

4) Start at -8 and add -2



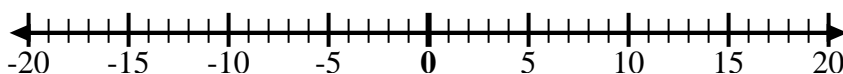
4. _____

5) Start at 5 and add -9



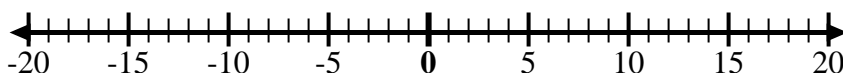
5. _____

6) Start at -5 and add 4



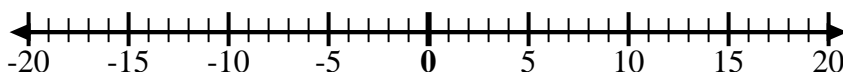
6. _____

7) Start at -6 and add 9



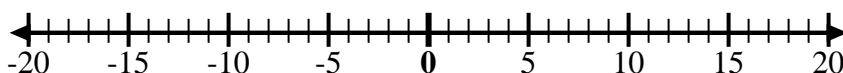
7. _____

8) Start at -4 and add 14



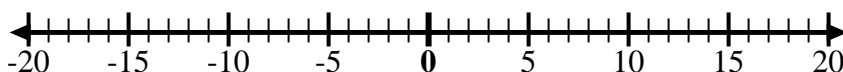
8. _____

9) Start at -4 and add -3



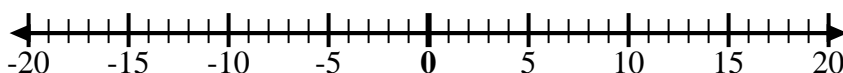
9. _____

10) Start at -7 and add -2



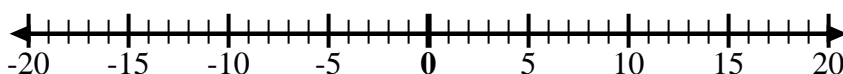
10. _____

11) Start at 0 and add -7



11. _____

12) Start at -2 and add -2



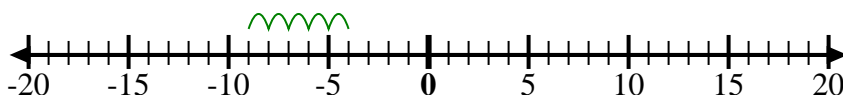
12. _____

Answers



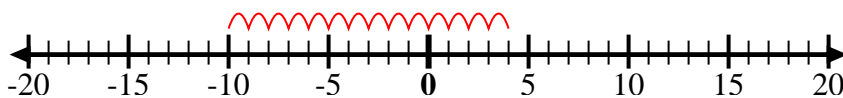
Use the numberlines to show each expression and solve.

Ex) Start at -9 and add 5



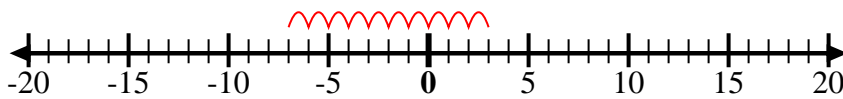
Ex. $-9 + 5 = -4$

1) Start at -10 and add 14



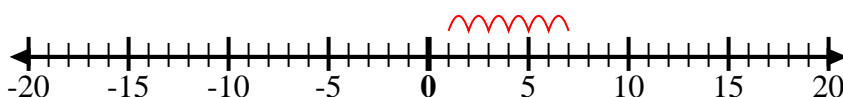
1. $-10 + 14 = 4$

2) Start at 3 and add -10



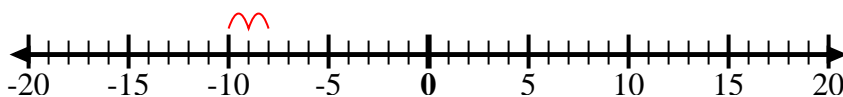
2. $3 + -10 = -7$

3) Start at 7 and add -6



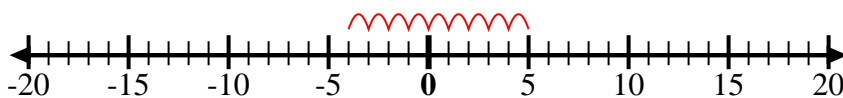
3. $7 + -6 = 1$

4) Start at -8 and add -2



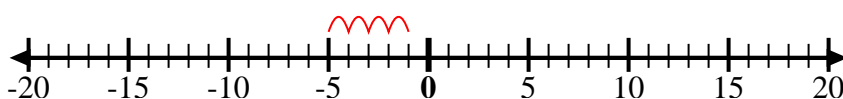
4. $-8 + -2 = -10$

5) Start at 5 and add -9



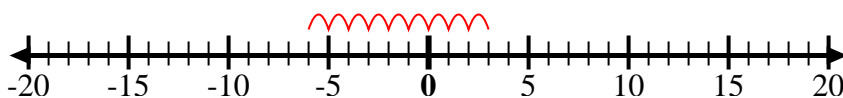
5. $5 + -9 = -4$

6) Start at -5 and add 4



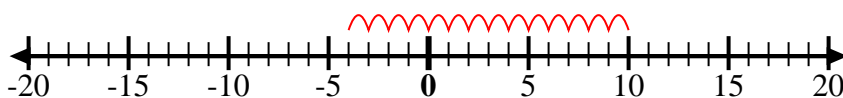
6. $-5 + 4 = -1$

7) Start at -6 and add 9



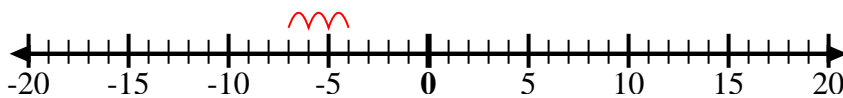
7. $-6 + 9 = 3$

8) Start at -4 and add 14



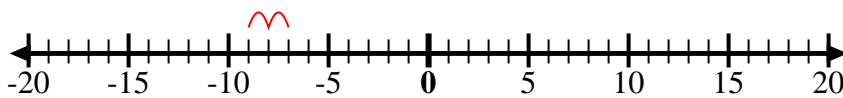
8. $-4 + 14 = 10$

9) Start at -4 and add -3



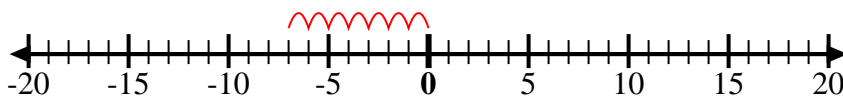
9. $-4 + -3 = -7$

10) Start at -7 and add -2



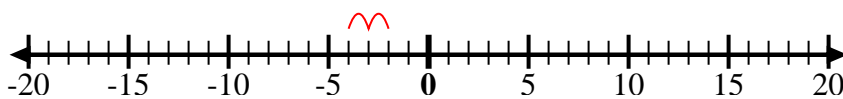
10. $-7 + -2 = -9$

11) Start at 0 and add -7



11. $0 + -7 = -7$

12) Start at -2 and add -2



12. $-2 + -2 = -4$

Answers