



Use the numberlines to show each expression and solve.

Ex) Start at -6 and add 15



Ex. $-6 + 15 = 9$

1) Start at -3 and add -3



1. _____

2) Start at 10 and add 0



2. _____

3) Start at -1 and add 10



3. _____

4) Start at 2 and add -11



4. _____

5) Start at 3 and add -12



5. _____

6) Start at -8 and add 7



6. _____

7) Start at 0 and add -5



7. _____

8) Start at -6 and add -2



8. _____

9) Start at 9 and add -15



9. _____

10) Start at 4 and add -9



10. _____

11) Start at 1 and add -10



11. _____

12) Start at -5 and add -3



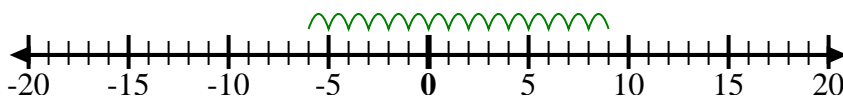
12. _____

Answers



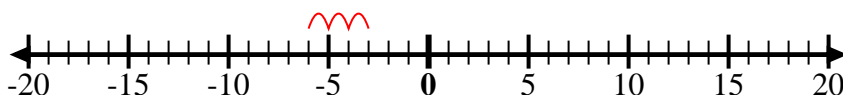
Use the numberlines to show each expression and solve.

Ex) Start at -6 and add 15



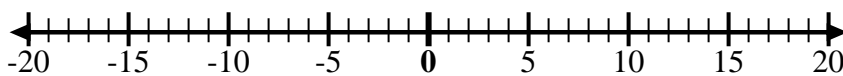
Ex. $-6 + 15 = 9$

1) Start at -3 and add -3



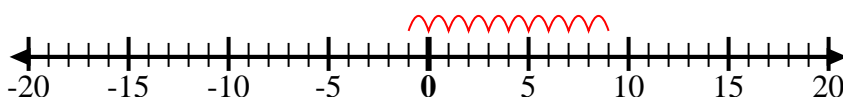
1. $-3 + -3 = -6$

2) Start at 10 and add 0



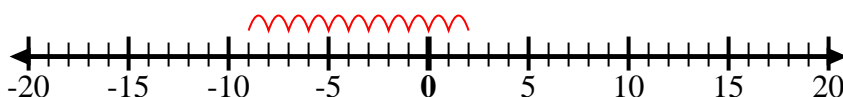
2. $10 + 0 = 10$

3) Start at -1 and add 10



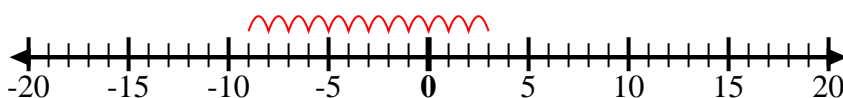
3. $-1 + 10 = 9$

4) Start at 2 and add -11



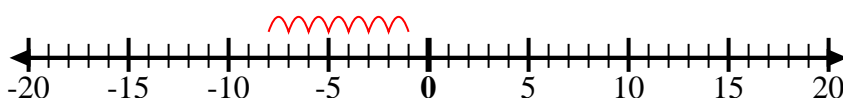
4. $2 + -11 = -9$

5) Start at 3 and add -12



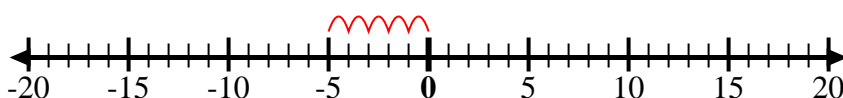
5. $3 + -12 = -9$

6) Start at -8 and add 7



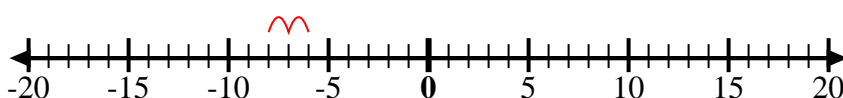
6. $-8 + 7 = -1$

7) Start at 0 and add -5



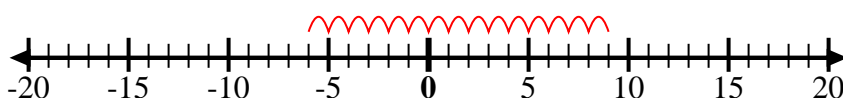
7. $0 + -5 = -5$

8) Start at -6 and add -2



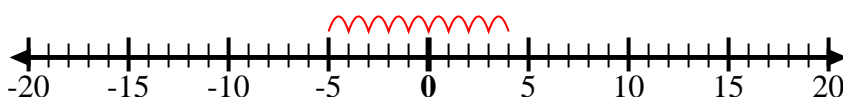
8. $-6 + -2 = -8$

9) Start at 9 and add -15



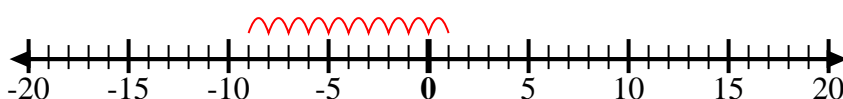
9. $9 + -15 = -6$

10) Start at 4 and add -9



10. $4 + -9 = -5$

11) Start at 1 and add -10



11. $1 + -10 = -9$

12) Start at -5 and add -3



12. $-5 + -3 = -8$

Answers