




Solve each problem.


**Answers**

1) Which letter best shows -86?




1. \_\_\_\_\_

2) Which letter best shows -100?




2. \_\_\_\_\_

3) Which letter best shows -97?



3. \_\_\_\_\_

4) Which letter best shows -102?



4. \_\_\_\_\_

5) Which letter best shows -111?



5. \_\_\_\_\_

6) Which letter best shows -71?




6. \_\_\_\_\_

7) Which letter best shows -22?




7. \_\_\_\_\_

8) Which letter best shows -22?




8. \_\_\_\_\_

9) Which letter best shows -41?



9. \_\_\_\_\_

10) Which letter best shows -18?

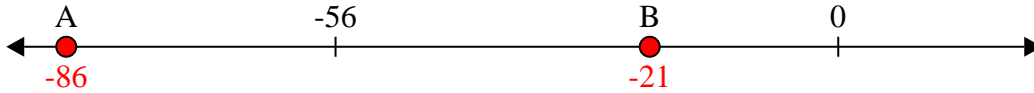


10. \_\_\_\_\_

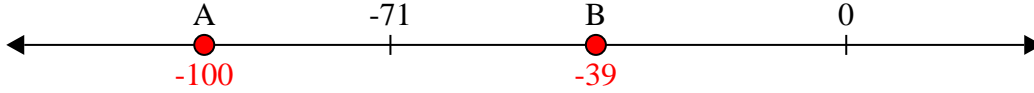


Solve each problem.

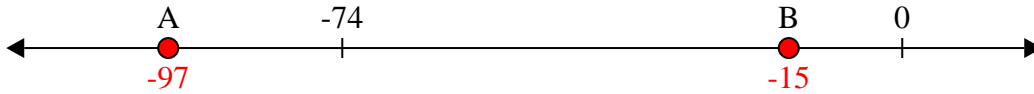
1) Which letter best shows -86?



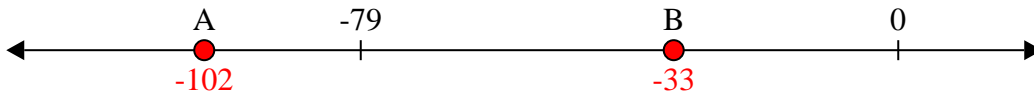
2) Which letter best shows -100?



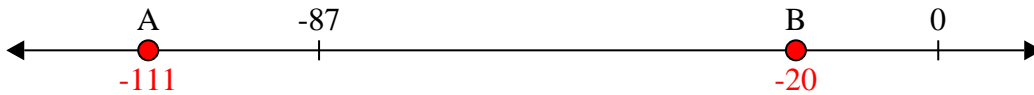
3) Which letter best shows -97?



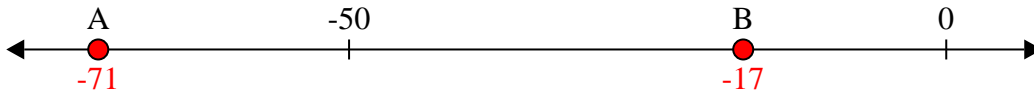
4) Which letter best shows -102?



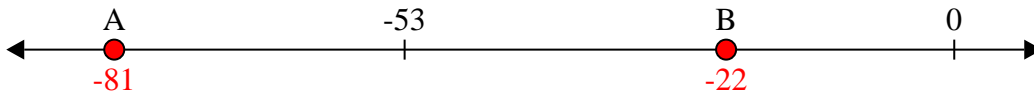
5) Which letter best shows -111?



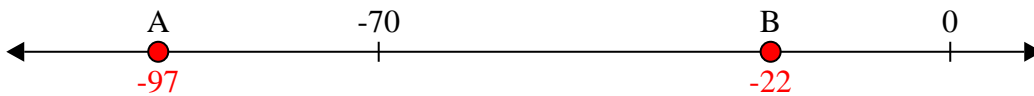
6) Which letter best shows -71?



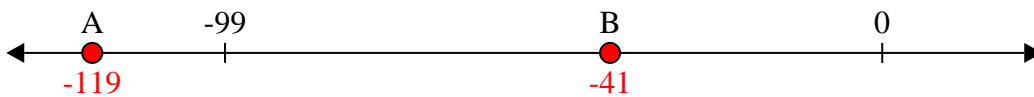
7) Which letter best shows -22?



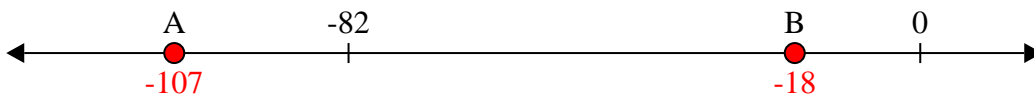
8) Which letter best shows -22?



9) Which letter best shows -41?



10) Which letter best shows -18?



**Answers**

1.   **A**  

2.   **A**  

3.   **A**  

4.   **A**  

5.   **A**  

6.   **A**  

7.   **B**  

8.   **B**  

9.   **B**  

10.   **B**