



Solve each problem.


**Answers**

1) Which letter best shows -32?




1. \_\_\_\_\_

2) Which letter best shows -114?



2. \_\_\_\_\_

3) Which letter best shows -117?




3. \_\_\_\_\_

4) Which letter best shows -111?




4. \_\_\_\_\_

5) Which letter best shows -33?



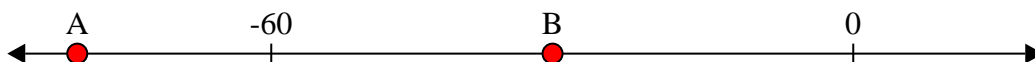
5. \_\_\_\_\_

6) Which letter best shows -29?



6. \_\_\_\_\_

7) Which letter best shows -80?



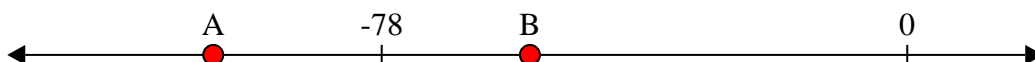
7. \_\_\_\_\_

8) Which letter best shows -86?




8. \_\_\_\_\_

9) Which letter best shows -56?



9. \_\_\_\_\_

10) Which letter best shows -24?

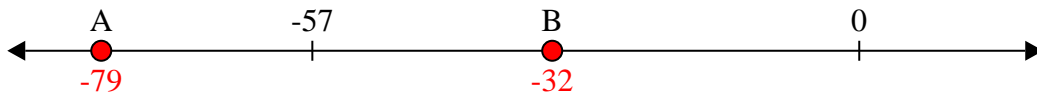


10. \_\_\_\_\_

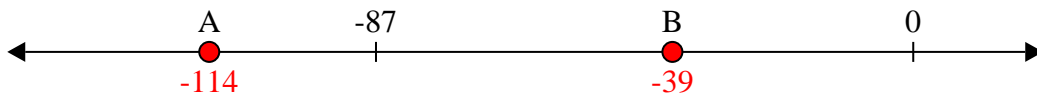


Solve each problem.

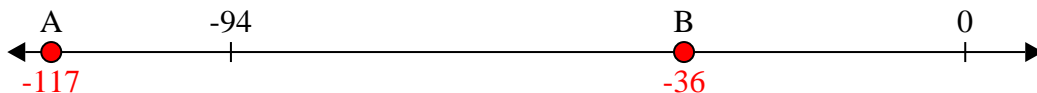
1) Which letter best shows -32?




2) Which letter best shows -114?




3) Which letter best shows -117?




4) Which letter best shows -111?



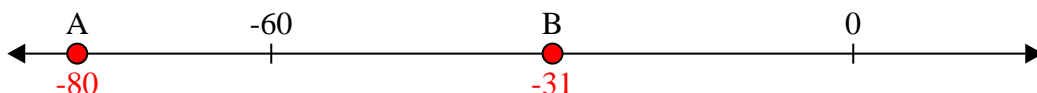
5) Which letter best shows -33?




6) Which letter best shows -29?



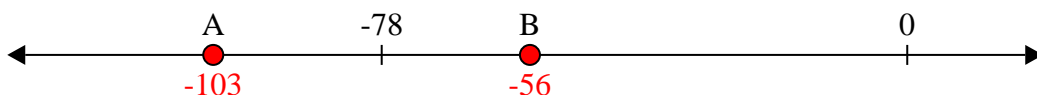
7) Which letter best shows -80?




8) Which letter best shows -86?



9) Which letter best shows -56?



10) Which letter best shows -24?



**Answers**

1. **B**

2. **A**

3. **A**

4. **A**

5. **B**

6. **B**

7. **A**

8. **A**

9. **B**

10. **B**