




Solve each problem.


Answers

1) Which letter best shows -128?




1. _____

2) Which letter best shows -114?



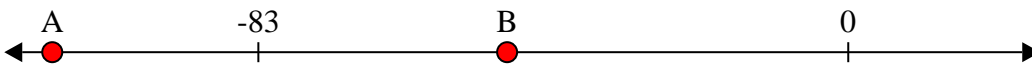
2. _____

3) Which letter best shows -76?



3. _____

4) Which letter best shows -48?



4. _____

5) Which letter best shows -47?



5. _____

6) Which letter best shows -115?



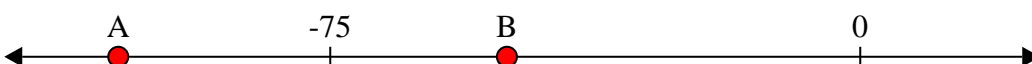
6. _____

7) Which letter best shows -115?




7. _____

8) Which letter best shows -105?




8. _____

9) Which letter best shows -10?



9. _____

10) Which letter best shows -82?



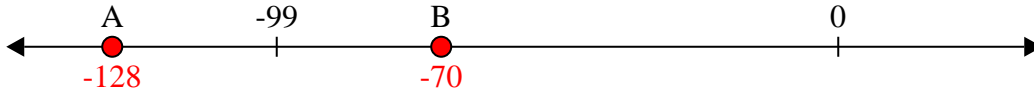
10. _____



Solve each problem.

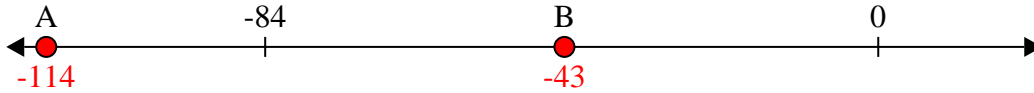
Answers

1) Which letter best shows -128?



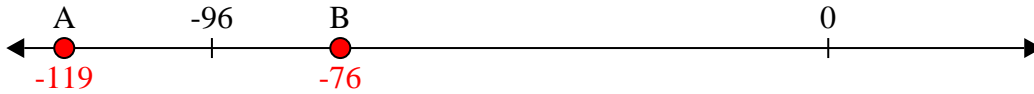
1. **A**

2) Which letter best shows -114?



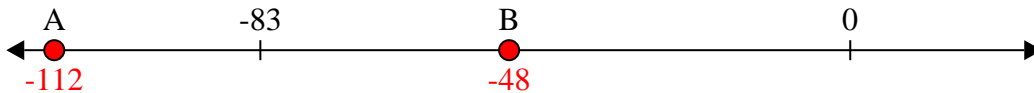
2. **A**

3) Which letter best shows -76?



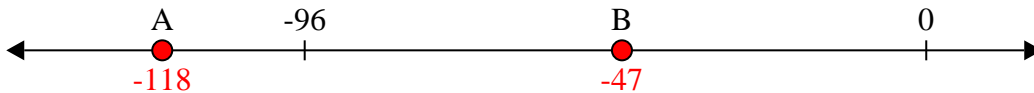
3. **B**

4) Which letter best shows -48?




4. **B**

5) Which letter best shows -47?




5. **B**

6) Which letter best shows -115?



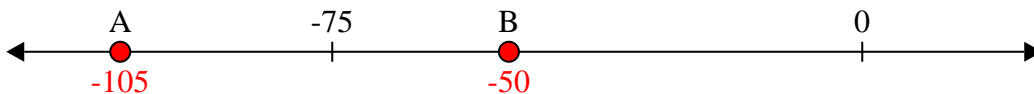
6. **A**

7) Which letter best shows -115?




7. **A**

8) Which letter best shows -105?



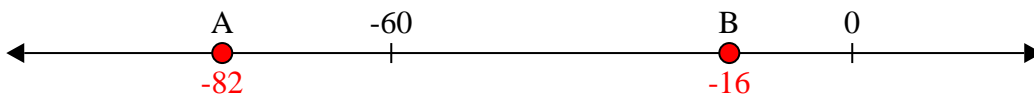
8. **A**

9) Which letter best shows -10?



9. **B**

10) Which letter best shows -82?



10. **A**