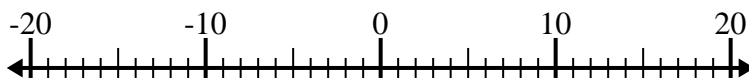




Solve each problem. Use the numberline if needed.

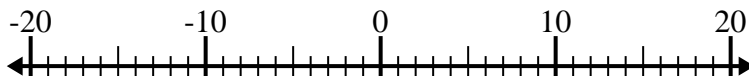
Answers

1) $(-7) + (-5) =$ _____



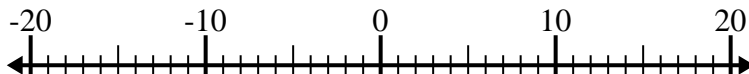
1. _____

2) $(-6) - 8 =$ _____



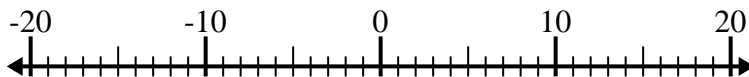
2. _____

3) $8 + (-10) =$ _____



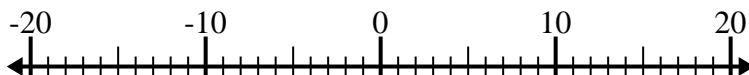
3. _____

4) $1 - (-7) =$ _____



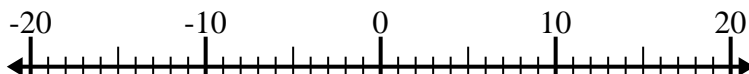
4. _____

5) $(-14) - 5 =$ _____



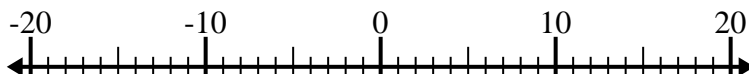
5. _____

6) $(-12) + (-3) =$ _____



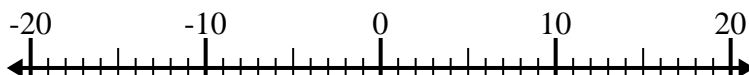
6. _____

7) $(-14) - (-6) =$ _____



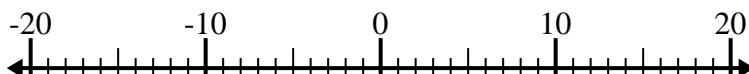
7. _____

8) $(-10) + 11 =$ _____



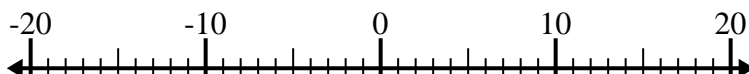
8. _____

9) $5 - (-11) =$ _____



9. _____

10) $(-14) + 1 =$ _____



10. _____



Solve each problem. Use the numberline if needed.

1) $(-7) + (-5) = \underline{-12}$



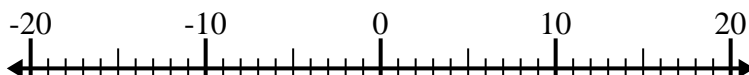
2) $(-6) - 8 = \underline{-14}$



3) $8 + (-10) = \underline{-2}$



4) $1 - (-7) = \underline{8}$



5) $(-14) - 5 = \underline{-19}$



6) $(-12) + (-3) = \underline{-15}$



7) $(-14) - (-6) = \underline{-8}$



8) $(-10) + 11 = \underline{1}$



9) $5 - (-11) = \underline{16}$



10) $(-14) + 1 = \underline{-13}$

**Answers**1. **-12**2. **-14**3. **-2**4. **8**5. **-19**6. **-15**7. **-8**8. **1**9. **16**10. **-13**