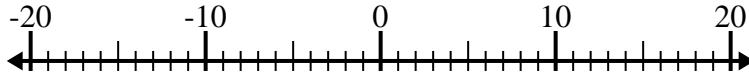




Solve each problem. Use the numberline if needed.

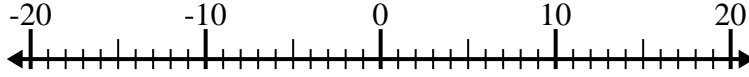
**Answers**

1)  $8 - (-12) =$  \_\_\_\_\_



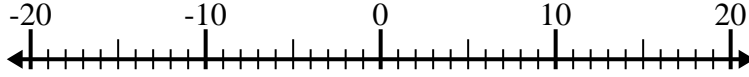
1. \_\_\_\_\_

2)  $(-8) + (-6) =$  \_\_\_\_\_



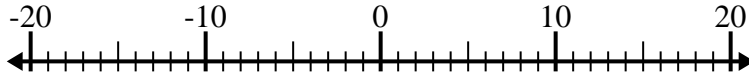
2. \_\_\_\_\_

3)  $12 + (-2) =$  \_\_\_\_\_



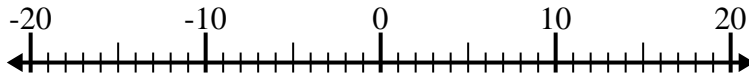
3. \_\_\_\_\_

4)  $(-2) + (-13) =$  \_\_\_\_\_



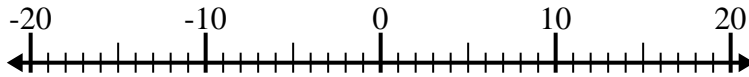
4. \_\_\_\_\_

5)  $(-6) + 8 =$  \_\_\_\_\_



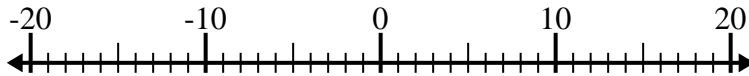
5. \_\_\_\_\_

6)  $(-5) - 10 =$  \_\_\_\_\_



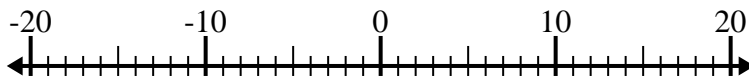
6. \_\_\_\_\_

7)  $(-14) - (-8) =$  \_\_\_\_\_



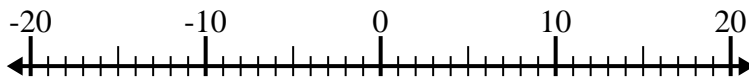
7. \_\_\_\_\_

8)  $5 - (-2) =$  \_\_\_\_\_



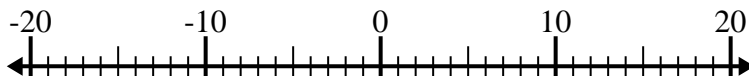
8. \_\_\_\_\_

9)  $(-11) - (-14) =$  \_\_\_\_\_



9. \_\_\_\_\_

10)  $14 + (-10) =$  \_\_\_\_\_

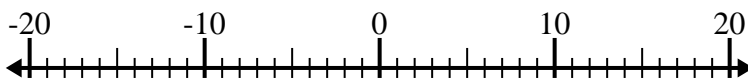


10. \_\_\_\_\_

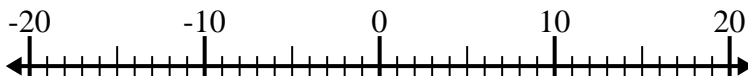


Solve each problem. Use the numberline if needed.

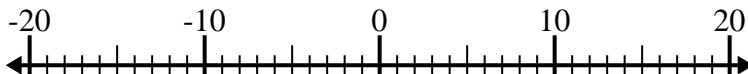
1)  $8 - (-12) = \underline{20}$



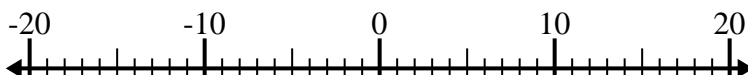
2)  $(-8) + (-6) = \underline{-14}$



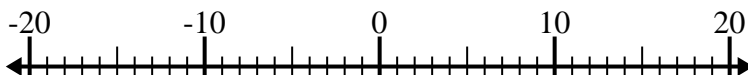
3)  $12 + (-2) = \underline{10}$



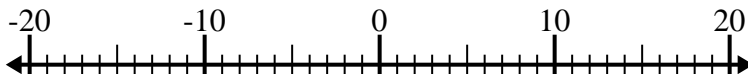
4)  $(-2) + (-13) = \underline{-15}$



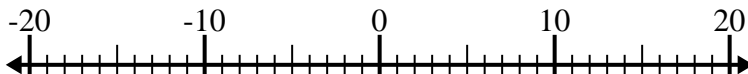
5)  $(-6) + 8 = \underline{2}$



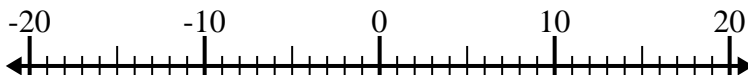
6)  $(-5) - 10 = \underline{-15}$



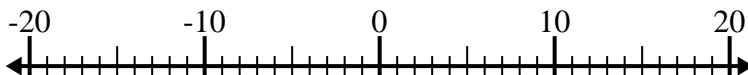
7)  $(-14) - (-8) = \underline{-6}$



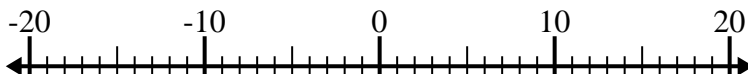
8)  $5 - (-2) = \underline{7}$



9)  $(-11) - (-14) = \underline{3}$



10)  $14 + (-10) = \underline{4}$



## Answers

1. 20

2. -14

3. 10

4. -15

5. 2

6. -15

7. -6

8. 7

9. 3

10. 4