


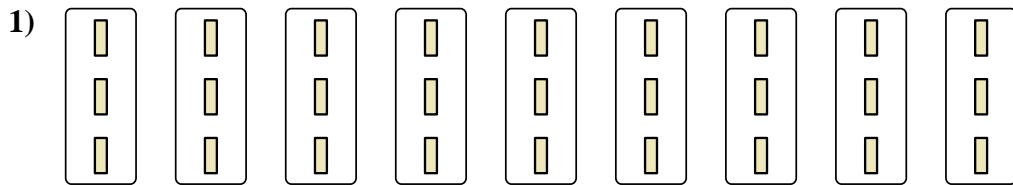


Express each set as a multiplication problem.

**Answers**




Ex.  $7 \times 9 = 63$




1. \_\_\_\_\_

2. \_\_\_\_\_



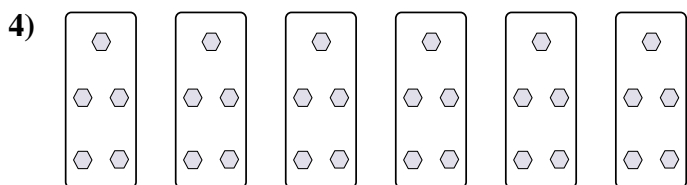
3. \_\_\_\_\_

4. \_\_\_\_\_




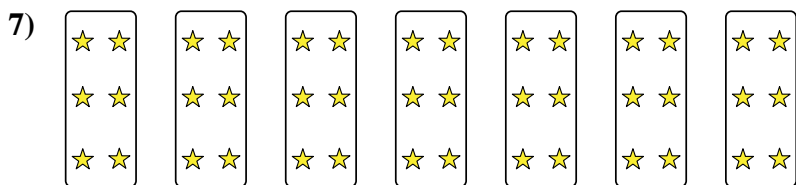
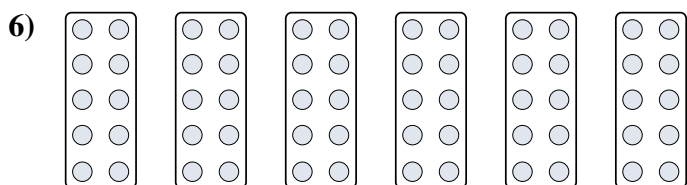
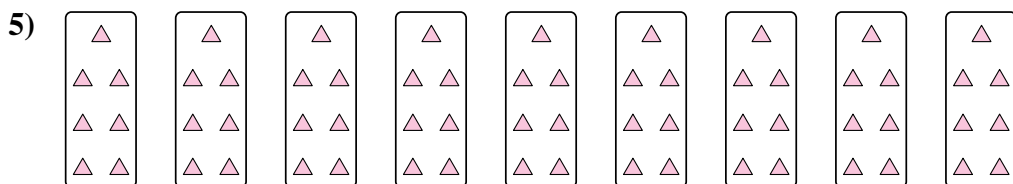
5. \_\_\_\_\_

6. \_\_\_\_\_



7. \_\_\_\_\_

8. \_\_\_\_\_





Express each set as a multiplication problem.

Ex)

Answers

Ex. 7×9=63

1)

1. 9×3=27

2. 6×2=12

2)

3. 9×4=36

4. 6×5=30

3)

5. 9×7=63

6. 6×10=60

4)

7. 7×6=42

8. 4×10=40

5)

6)

7)

8)



Express each set as a multiplication problem.

Ex)

**Answers**

Ex.  $5 \times 8 = 40$

1)

1. \_\_\_\_\_

2. \_\_\_\_\_

3. \_\_\_\_\_

2)

4. \_\_\_\_\_

5. \_\_\_\_\_

6. \_\_\_\_\_

3)

7. \_\_\_\_\_

8. \_\_\_\_\_

4)

5)

6)

7)

8)



Express each set as a multiplication problem.

Ex)

Answers

Ex. 5×8=40

1)

1. 10×5=50

2. 4×5=20

2)

3. 2×8=16

4. 3×9=27

3)

5. 7×2=14

6. 4×4=16

4)

7. 2×2=4

8. 8×2=16

5)

6)

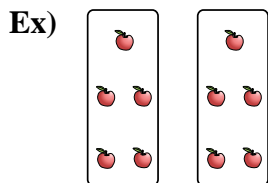
7)

8)

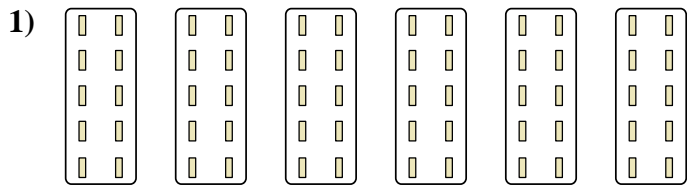


Express each set as a multiplication problem.

**Answers**



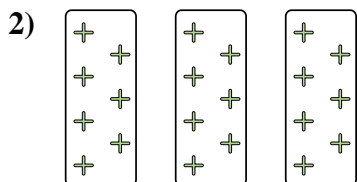
Ex. **2x5=10**



1. \_\_\_\_\_


2. \_\_\_\_\_

3. \_\_\_\_\_



4. \_\_\_\_\_



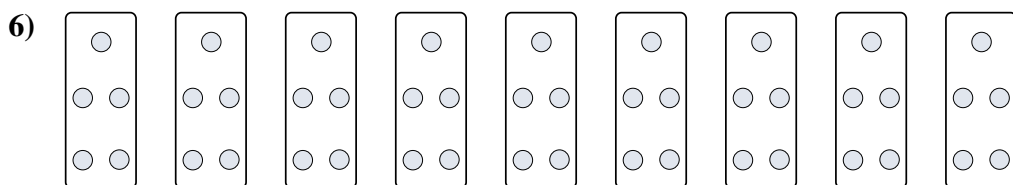
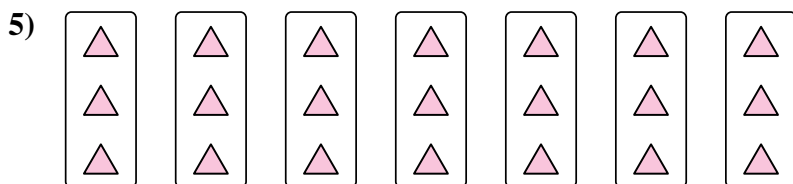
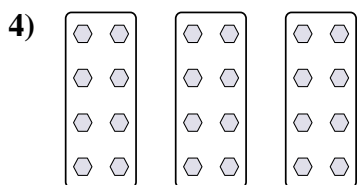
5. \_\_\_\_\_



6. \_\_\_\_\_

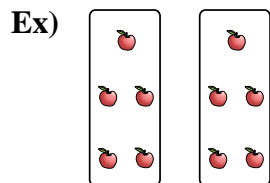
7. \_\_\_\_\_

8. \_\_\_\_\_

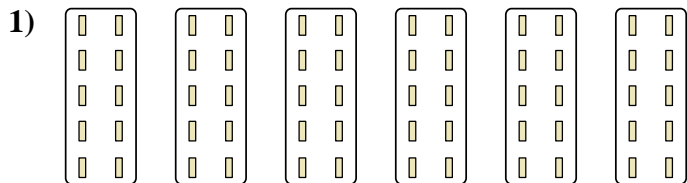




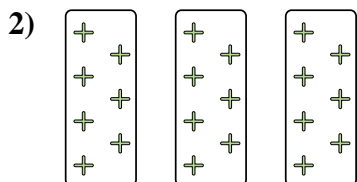
Express each set as a multiplication problem.



Ex.  $2 \times 5 = 10$




1.  $6 \times 10 = 60$



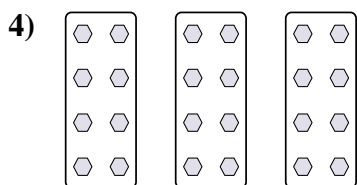
2.  $3 \times 7 = 21$

3.  $10 \times 3 = 30$



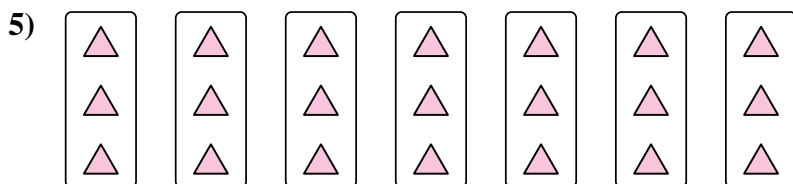
4.  $3 \times 8 = 24$

5.  $7 \times 3 = 21$



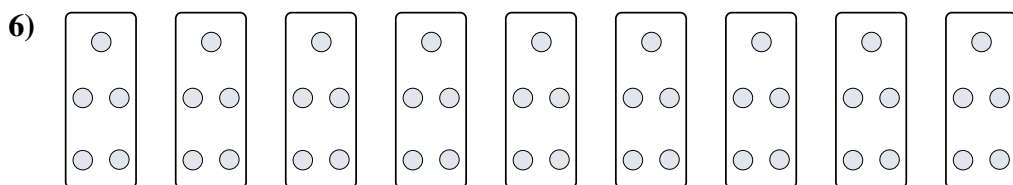


6.  $9 \times 5 = 45$

7.  $9 \times 6 = 54$



8.  $4 \times 10 = 40$




Answers



Express each set as a multiplication problem.

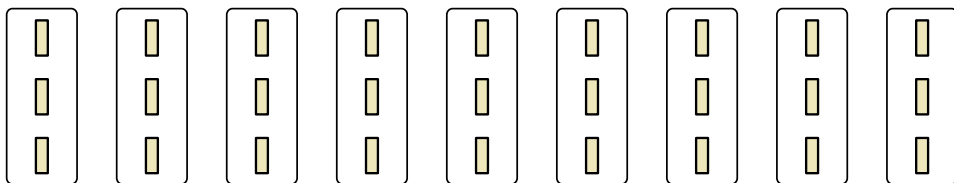
**Answers**

Ex)



Ex.  $8 \times 5 = 40$

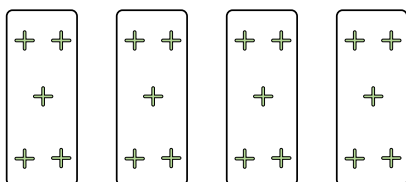
1)



1. \_\_\_\_\_

2. \_\_\_\_\_

2)




3. \_\_\_\_\_

4. \_\_\_\_\_

5. \_\_\_\_\_

3)

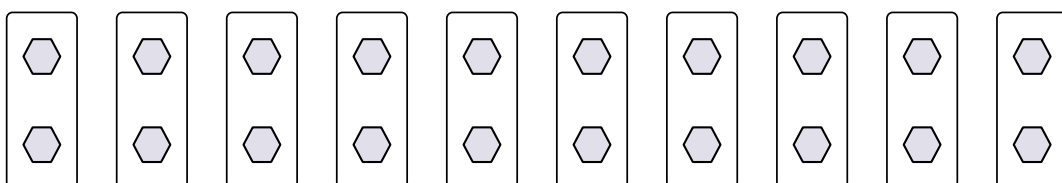


6. \_\_\_\_\_

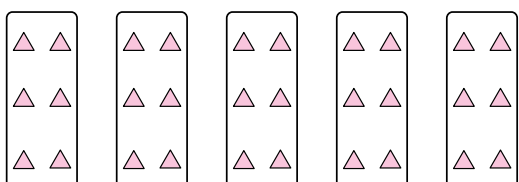
7. \_\_\_\_\_

8. \_\_\_\_\_

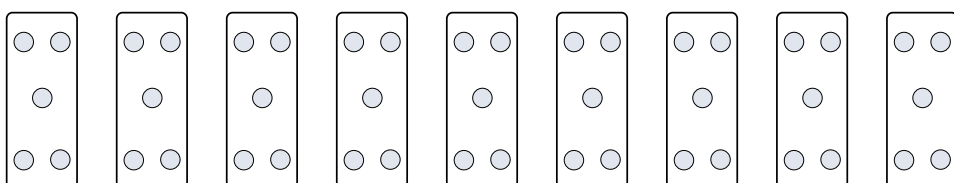
4)




5)




6)



7)




8)





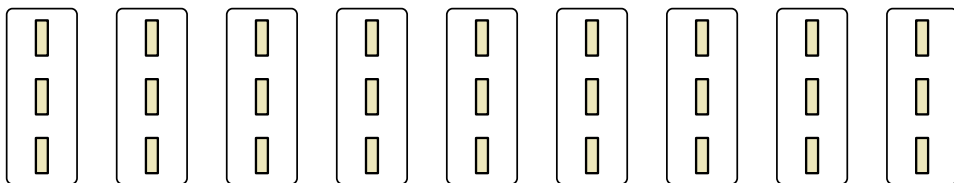
Express each set as a multiplication problem.

Ex)



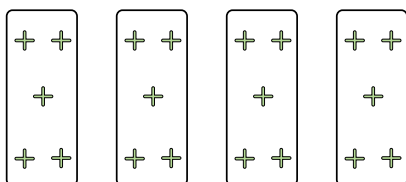
Ex.  $8 \times 3 = 24$

1)



1.  $9 \times 3 = 27$


2)



2.  $4 \times 5 = 20$

3.  $5 \times 8 = 40$

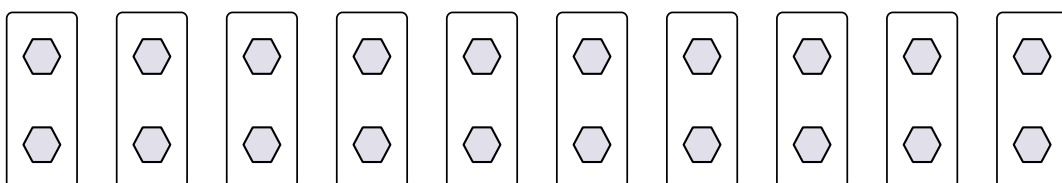
3)



4.  $10 \times 2 = 20$

5.  $5 \times 6 = 30$

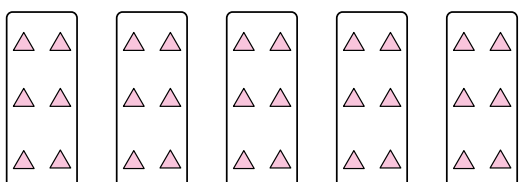
4)



6.  $9 \times 5 = 45$

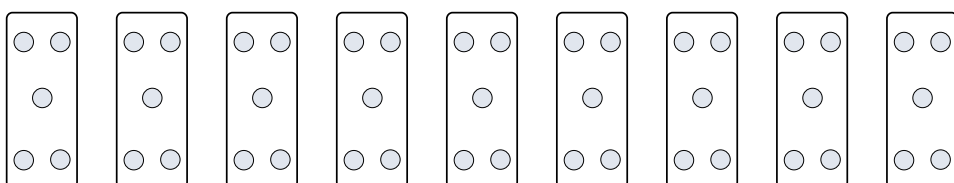
7.  $8 \times 2 = 16$

5)




8.  $7 \times 8 = 56$


6)



7)



8)



Answers

Ex.  $8 \times 5 = 40$

1.  $9 \times 3 = 27$

2.  $4 \times 5 = 20$

3.  $5 \times 8 = 40$

4.  $10 \times 2 = 20$

5.  $5 \times 6 = 30$

6.  $9 \times 5 = 45$

7.  $8 \times 2 = 16$


8.  $7 \times 8 = 56$



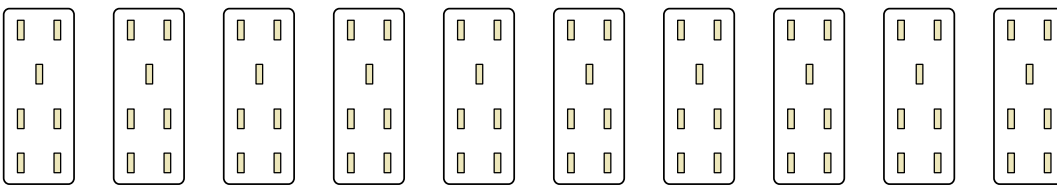


Express each set as a multiplication problem.

Answers

Ex) 

Ex.  $10 \times 10 = 100$

1) 

1. \_\_\_\_\_


2. \_\_\_\_\_

3. \_\_\_\_\_

2) 

4. \_\_\_\_\_

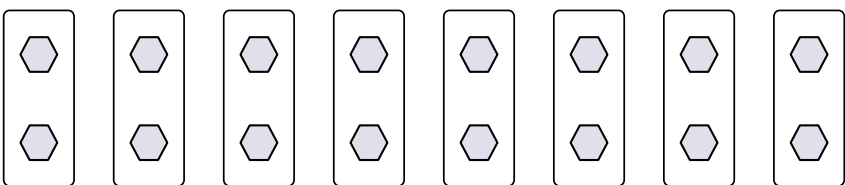
5. \_\_\_\_\_

3) 

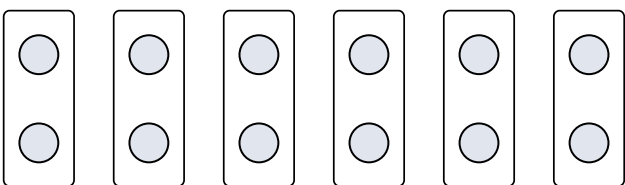
6. \_\_\_\_\_

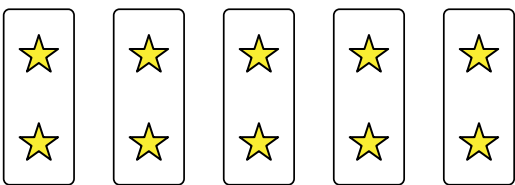
7. \_\_\_\_\_


8. \_\_\_\_\_

4) 

5) 


6) 

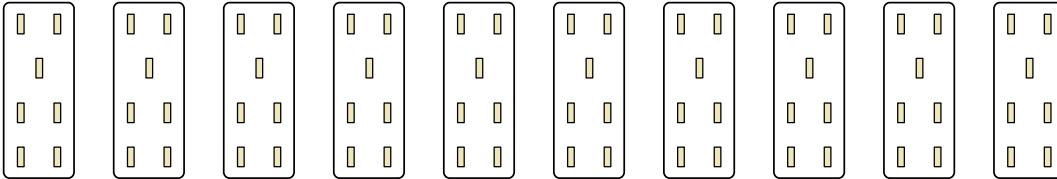
7) 

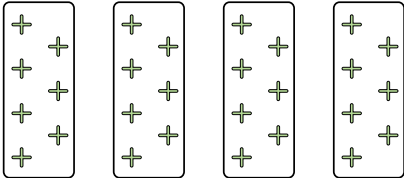
8) 




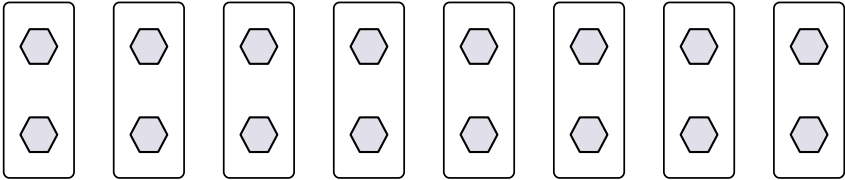
Express each set as a multiplication problem.

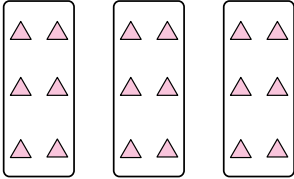
Ex) 

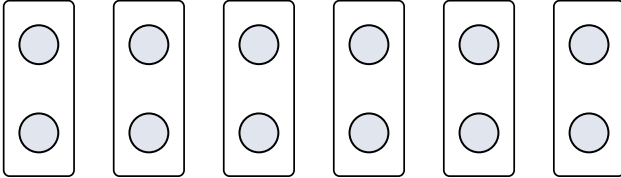
1) 

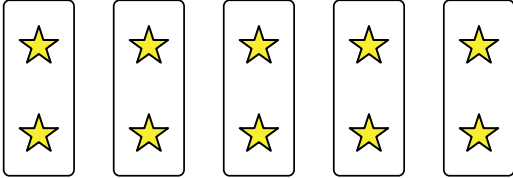
2) 


3) 

4) 

5) 

6) 

7) 

8) 

Answers

- Ex.  $10 \times 10 = 100$
1.  $10 \times 7 = 70$
2.  $4 \times 7 = 28$
3.  $10 \times 6 = 60$
4.  $8 \times 2 = 16$
5.  $3 \times 6 = 18$
6.  $6 \times 2 = 12$
7.  $5 \times 2 = 10$
8.  $5 \times 7 = 35$



Express each set as a multiplication problem.

**Answers**

Ex)

Ex.  $9 \times 6 = 54$

1)

1. \_\_\_\_\_

2. \_\_\_\_\_

2)

3. \_\_\_\_\_

4. \_\_\_\_\_

3)

5. \_\_\_\_\_

6. \_\_\_\_\_

4)

7. \_\_\_\_\_

8. \_\_\_\_\_

5)


6)

7)

8)

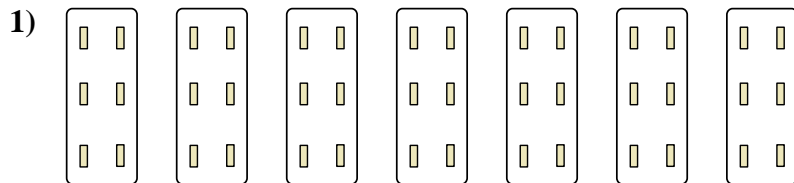


Express each set as a multiplication problem.



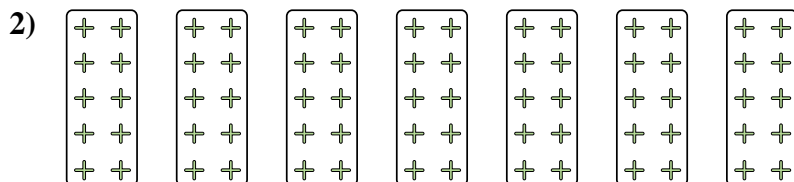
Answers

Ex. 9×6=54




1. 7×6=42

2. 7×10=70



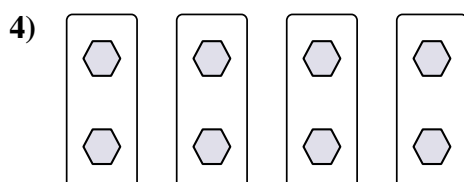
3. 8×2=16

4. 4×2=8





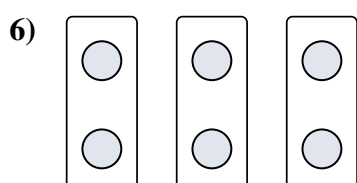
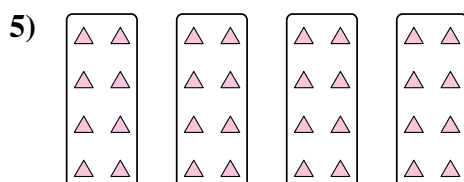
5. 4×8=32

6. 3×2=6



7. 10×7=70

8. 4×10=40





Express each set as a multiplication problem.

Ex)

**Answers**

Ex.  $7 \times 7 = 49$

1)

1. \_\_\_\_\_

2. \_\_\_\_\_

2)

3. \_\_\_\_\_

4. \_\_\_\_\_

3)

5. \_\_\_\_\_

6. \_\_\_\_\_

4)

7. \_\_\_\_\_

8. \_\_\_\_\_

5)


6)

7)

8)

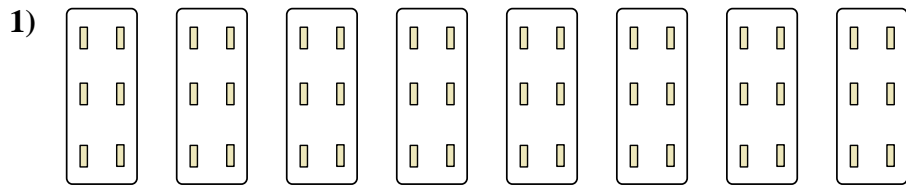


Express each set as a multiplication problem.

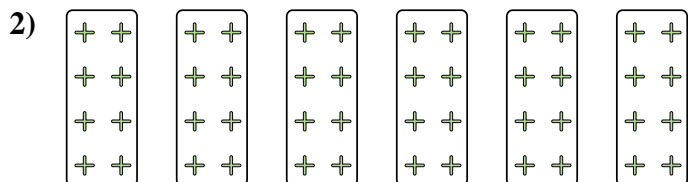


Answers

Ex. 7×7=49




1. 8×6=48



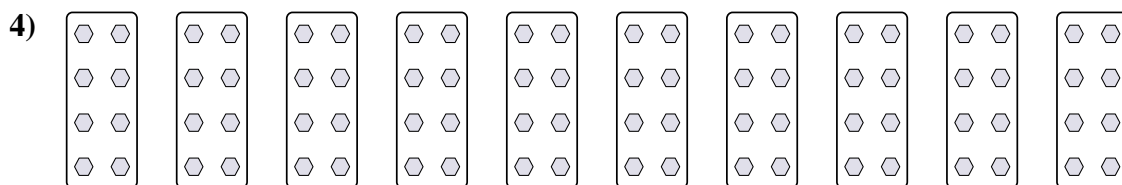
2. 6×8=48

3. 5×2=10



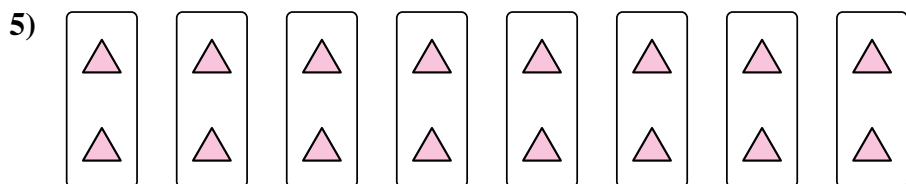
4. 10×8=80

5. 8×2=16


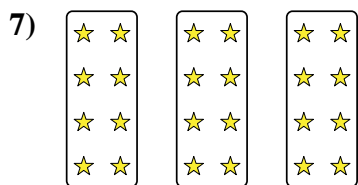
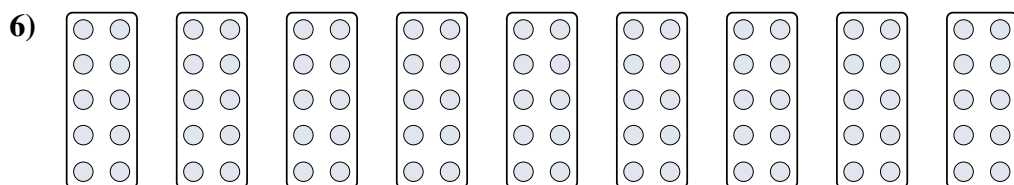


6. 9×10=90

7. 3×8=24



8. 8×9=72





Express each set as a multiplication problem.

**Answers**

Ex)

Ex.  $6 \times 7 = 42$

1)

1. \_\_\_\_\_  
2. \_\_\_\_\_

2)

3. \_\_\_\_\_  
4. \_\_\_\_\_

3)

5. \_\_\_\_\_  
6. \_\_\_\_\_

4)

7. \_\_\_\_\_  
8. \_\_\_\_\_

5)

6)

7)

8)



Express each set as a multiplication problem.

Ex)

Answers

Ex.  $6 \times 7 = 42$

1)

1.  $7 \times 10 = 70$

2.  $3 \times 4 = 12$

2)

3.  $3 \times 7 = 21$

4.  $5 \times 4 = 20$

3)

5.  $7 \times 4 = 28$

6.  $4 \times 9 = 36$

4)

7.  $4 \times 10 = 40$

8.  $2 \times 8 = 16$

5)

6)

7)

8)





Express each set as a multiplication problem.

Answers

Ex)

Ex.  $9 \times 5 = 45$

1)

1. \_\_\_\_\_  
2. \_\_\_\_\_

2)

3. \_\_\_\_\_  
4. \_\_\_\_\_

3)

5. \_\_\_\_\_  
6. \_\_\_\_\_

4)

7. \_\_\_\_\_  
8. \_\_\_\_\_

5)

6)

7)

8)



Express each set as a multiplication problem.

Ex)

Answers

Ex. 9×5=45

1)

1. 8×2=16

2. 6×9=54

2)

3. 3×7=21

4. 2×9=18

3)

5. 3×4=12

6. 8×10=80

4)

7. 10×9=90

8. 2×10=20

5)

6)


7)

8)

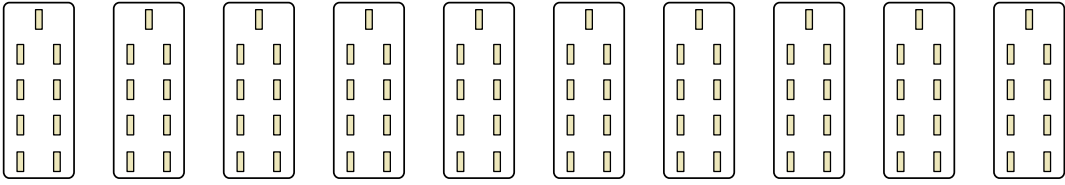


Express each set as a multiplication problem.

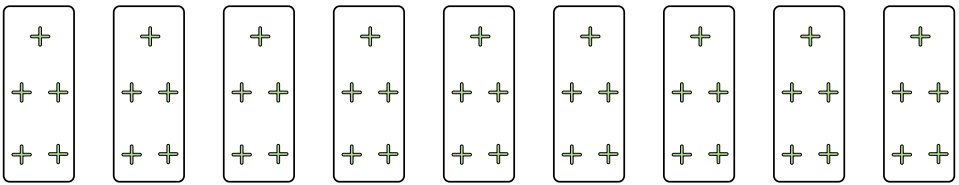
**Answers**

Ex) 


Ex.  $6 \times 3 = 18$

1) 

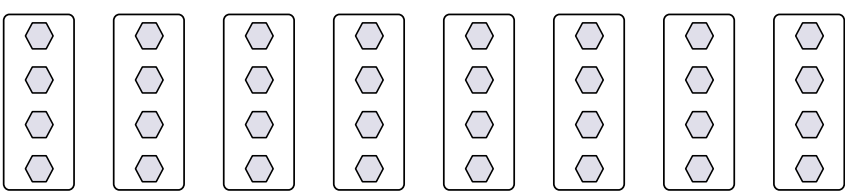
1. \_\_\_\_\_  
2. \_\_\_\_\_

2) 

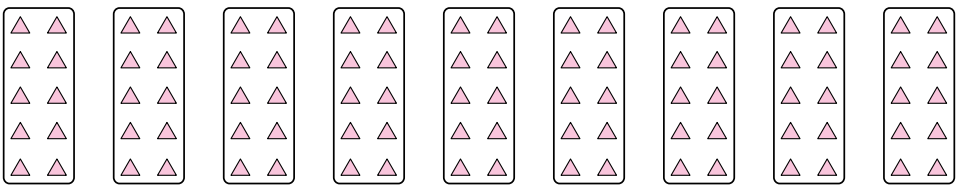
3. \_\_\_\_\_  
4. \_\_\_\_\_

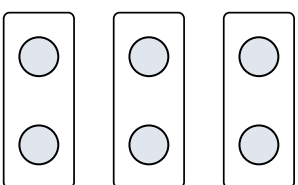
3) 


5. \_\_\_\_\_  
6. \_\_\_\_\_

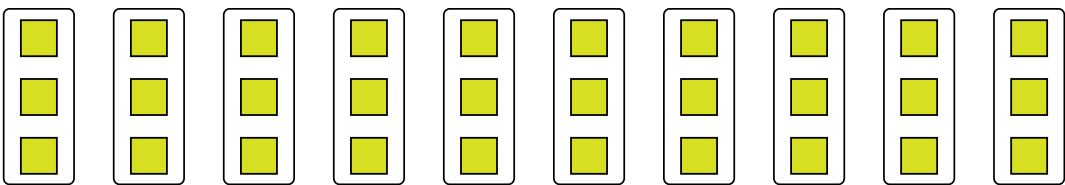
4) 

7. \_\_\_\_\_  
8. \_\_\_\_\_

5) 

6) 

7) 

8) 



Express each set as a multiplication problem.

Ex)

Answers

Ex.  $6 \times 3 = 18$

1)

1.  $10 \times 9 = 90$

2.  $9 \times 5 = 45$

2)

3.  $5 \times 2 = 10$

4.  $8 \times 4 = 32$

3)

5.  $9 \times 10 = 90$

6.  $3 \times 2 = 6$

4)

7.  $4 \times 9 = 36$

8.  $10 \times 3 = 30$

5)

6)

7)

8)