



Express each set as a multiplication problem.

Answers

Ex)

Ex. $8 \times 5 = 40$

1)

1. _____

2. _____

2)

3. _____

4. _____

5. _____

3)

6. _____

7. _____

8. _____

4)

5)


6)

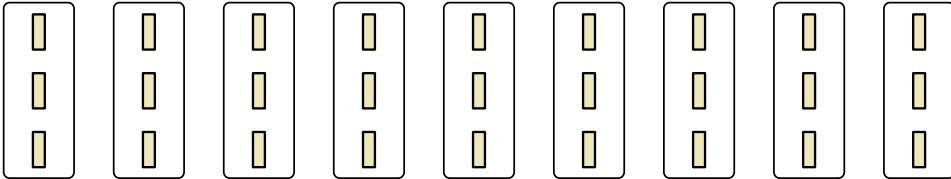
7)

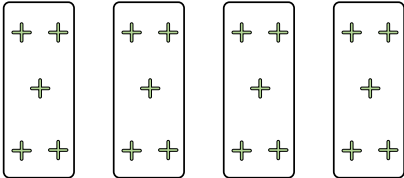
8)




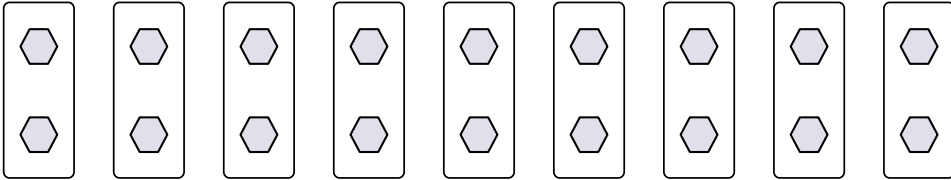
Express each set as a multiplication problem.

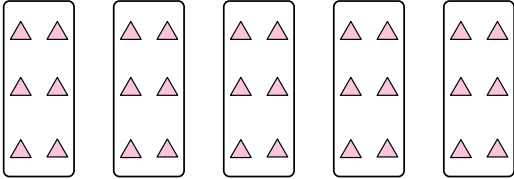
Ex) 

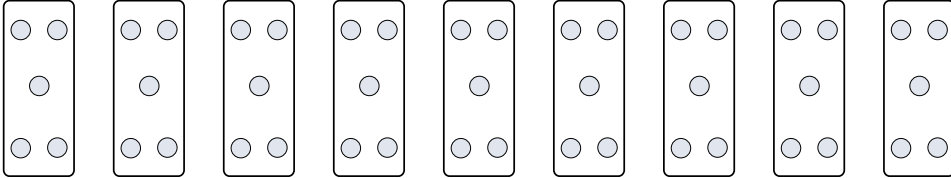
1) 


2) 


3) 

4) 

5) 

6) 

7) 

8) 

Answers

Ex. $8 \times 5 = 40$

1. $9 \times 3 = 27$

2. $4 \times 5 = 20$

3. $5 \times 8 = 40$

4. $10 \times 2 = 20$

5. $5 \times 6 = 30$

6. $9 \times 5 = 45$

7. $8 \times 2 = 16$

8. $7 \times 8 = 56$