


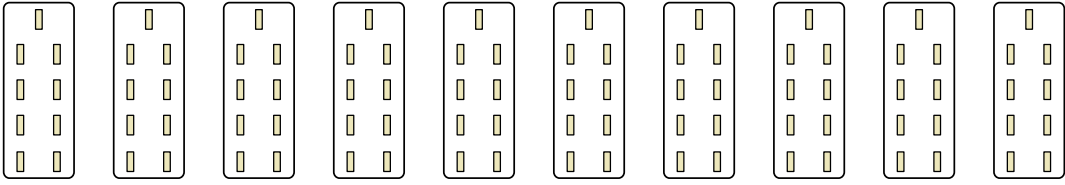


Express each set as a multiplication problem.

Ex) 

Answers

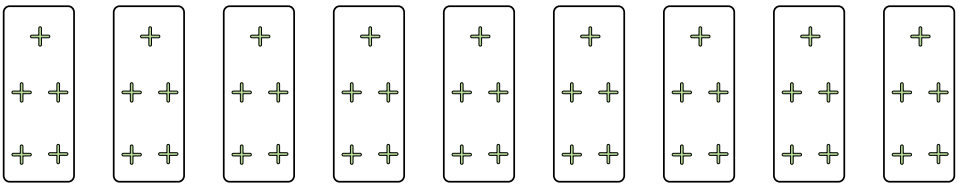
Ex.  $6 \times 3 = 18$

1) 

1. \_\_\_\_\_

2. \_\_\_\_\_


3. \_\_\_\_\_

2) 

4. \_\_\_\_\_

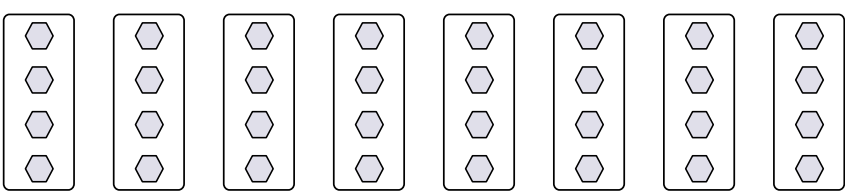
5. \_\_\_\_\_

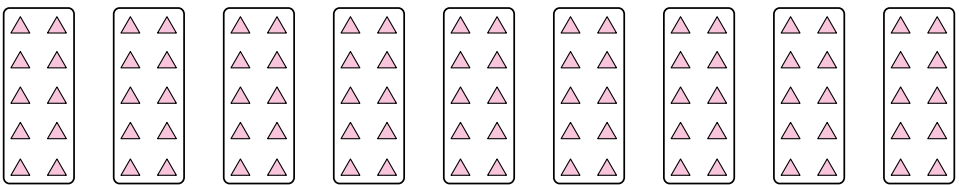
6. \_\_\_\_\_

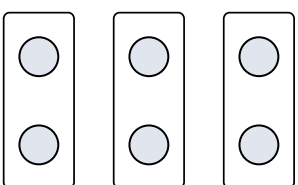
3) 


7. \_\_\_\_\_

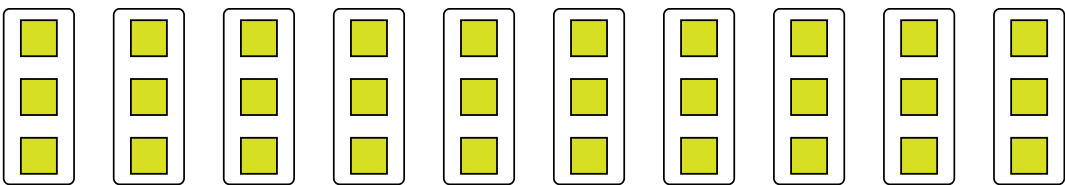
8. \_\_\_\_\_

4) 

5) 

6) 

7) 

8) 



Express each set as a multiplication problem.

Ex)

Ex.  $6 \times 3 = 18$

1)

1.  $10 \times 9 = 90$

2.  $9 \times 5 = 45$

2)

3.  $5 \times 2 = 10$

4.  $8 \times 4 = 32$

3)

5.  $9 \times 10 = 90$

6.  $3 \times 2 = 6$

4)

7.  $4 \times 9 = 36$

8.  $10 \times 3 = 30$

5)

6)

7)

8)