


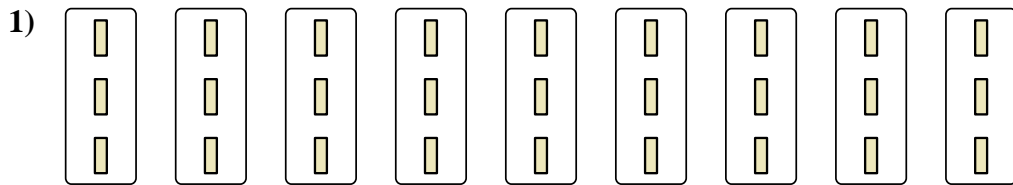


Express each set as a multiplication problem.

Answers




Ex. $7 \times 9 = 63$




1. _____

2. _____



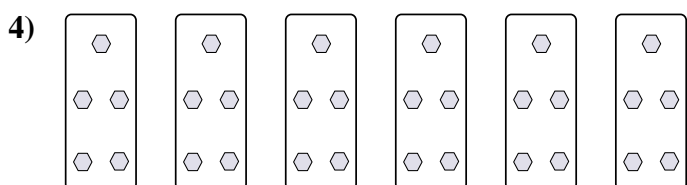
3. _____

4. _____





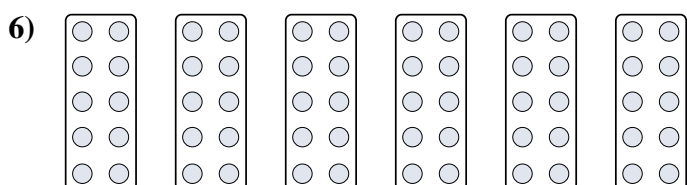
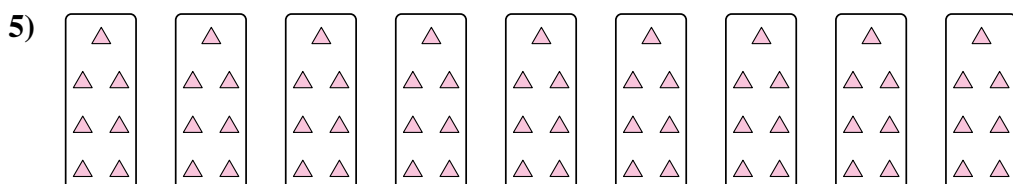
5. _____

6. _____



7. _____

8. _____





Express each set as a multiplication problem.

Ex)

Answers

Ex. 7×9=63

1)

1. 9×3=27

2. 6×2=12

2)

3. 9×4=36

4. 6×5=30

3)

5. 9×7=63

6. 6×10=60

4)

7. 7×6=42

8. 4×10=40

5)

6)

7)

8)