



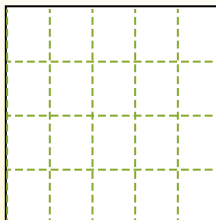
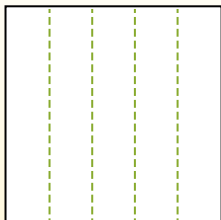
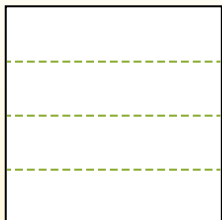
Partition the shape as described and then count to find the number of boxes.

**Answers**

Rows go left to right.


Columns go up and down.

This has 4 rows and 5 columns.  
There are 20 boxes total.



1. \_\_\_\_\_
2. \_\_\_\_\_
3. \_\_\_\_\_
4. \_\_\_\_\_
5. \_\_\_\_\_
6. \_\_\_\_\_
7. \_\_\_\_\_
8. \_\_\_\_\_
9. \_\_\_\_\_

1) 3 rows  
5 columns




2) 3 rows  
3 columns




3) 2 rows  
5 columns



4) 3 rows  
2 columns




5) 4 rows  
3 columns




6) 4 rows  
4 columns




7) 4 rows  
2 columns



8) 3 rows  
4 columns



9) 5 rows  
5 columns



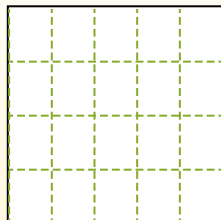
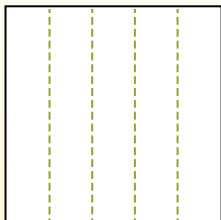
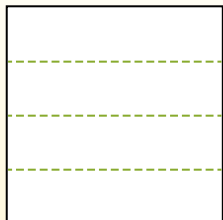


Partition the shape as described and then count to find the number of boxes.

Rows go left to right.

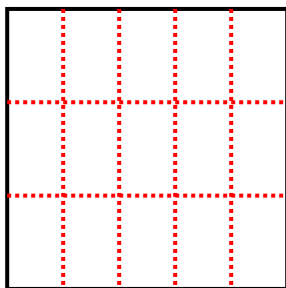
Columns go up and down.

This has 4 rows and 5 columns.  
There are 20 boxes total.

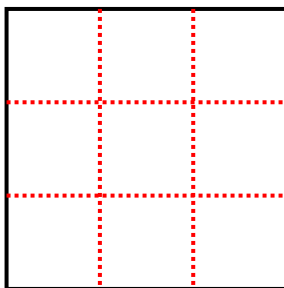


Answers

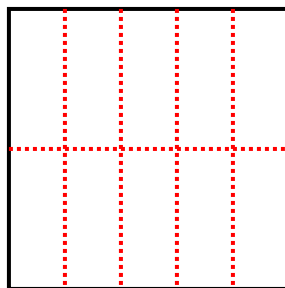
1) 3 rows  
5 columns



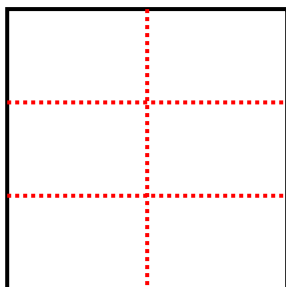
2) 3 rows  
3 columns



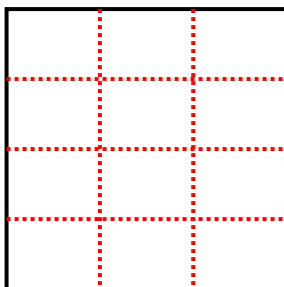
3) 2 rows  
5 columns



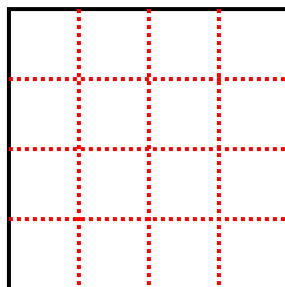
4) 3 rows  
2 columns



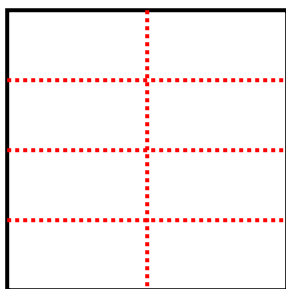
5) 4 rows  
3 columns



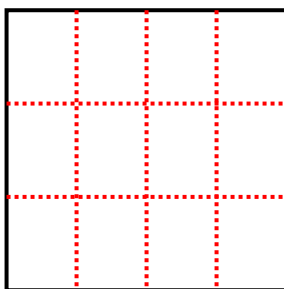
6) 4 rows  
4 columns



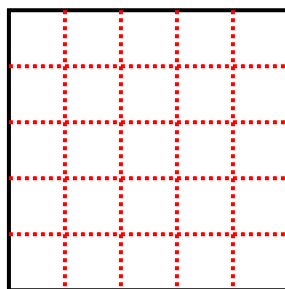
7) 4 rows  
2 columns



8) 3 rows  
4 columns



9) 5 rows  
5 columns



1. 15

2. 9

3. 10

4. 6

5. 12

6. 16

7. 8

8. 12

9. 25



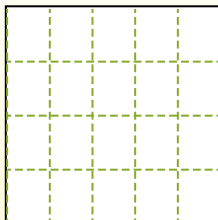
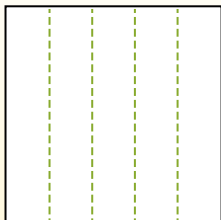
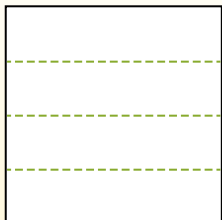
Partition the shape as described and then count to find the number of boxes.

Answers

Rows go left to right.


Columns go up and down.

This has 4 rows and 5 columns.  
There are 20 boxes total.




1. \_\_\_\_\_
2. \_\_\_\_\_
3. \_\_\_\_\_
4. \_\_\_\_\_
5. \_\_\_\_\_
6. \_\_\_\_\_
7. \_\_\_\_\_
8. \_\_\_\_\_
9. \_\_\_\_\_


1) 3 rows  
3 columns




2) 3 rows  
2 columns




3) 2 rows  
2 columns




4) 4 rows  
3 columns




5) 4 rows  
2 columns




6) 4 rows  
4 columns




7) 3 rows  
5 columns



8) 2 rows  
5 columns



9) 2 rows  
4 columns



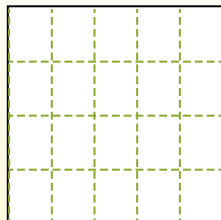
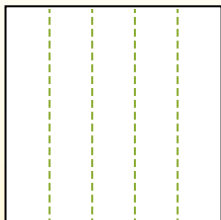
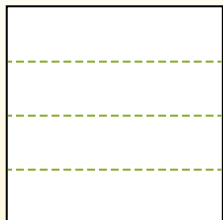


Partition the shape as described and then count to find the number of boxes.

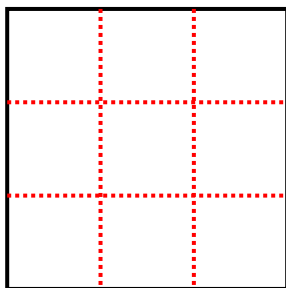
Rows go left to right.

Columns go up and down.

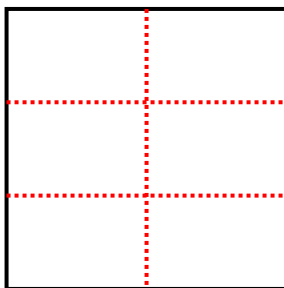
This has 4 rows and 5 columns.  
There are 20 boxes total.



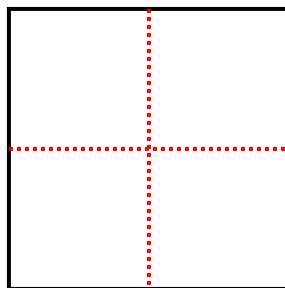
1) 3 rows  
3 columns



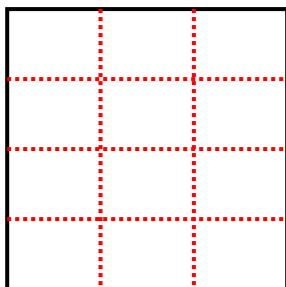
2) 3 rows  
2 columns



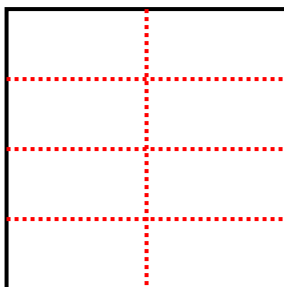
3) 2 rows  
2 columns



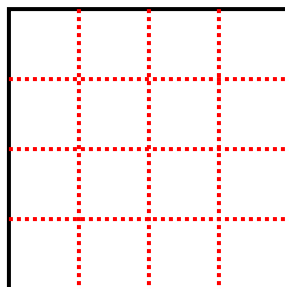
4) 4 rows  
3 columns



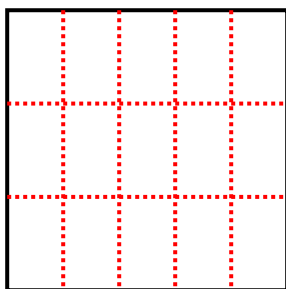
5) 4 rows  
2 columns



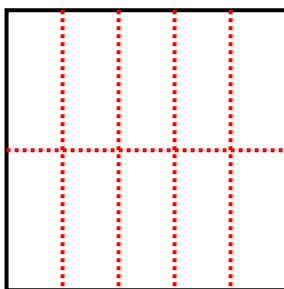
6) 4 rows  
4 columns



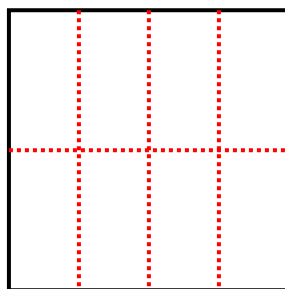
7) 3 rows  
5 columns



8) 2 rows  
5 columns



9) 2 rows  
4 columns



Answers

1. 9

2. 6

3. 4

4. 12

5. 8

6. 16

7. 15

8. 10

9. 8



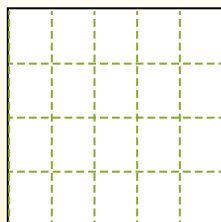
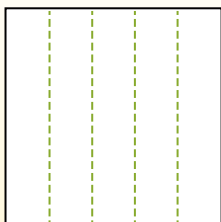

Partition the shape as described and then count to find the number of boxes.

Answers

Rows go left to right.


Columns go up and down.

This has 4 rows and 5 columns.  
There are 20 boxes total.




1. \_\_\_\_\_
2. \_\_\_\_\_
3. \_\_\_\_\_
4. \_\_\_\_\_
5. \_\_\_\_\_
6. \_\_\_\_\_
7. \_\_\_\_\_
8. \_\_\_\_\_
9. \_\_\_\_\_


1) 3 rows  
2 columns




2) 4 rows  
2 columns



3) 2 rows  
3 columns




4) 5 rows  
4 columns




5) 5 rows  
2 columns




6) 2 rows  
2 columns




7) 3 rows  
4 columns



8) 5 rows  
5 columns



9) 4 rows  
3 columns



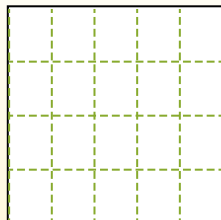
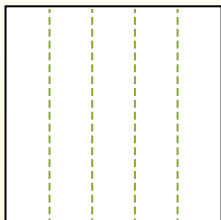
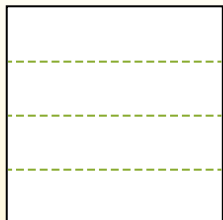


Partition the shape as described and then count to find the number of boxes.

Rows go left to right.

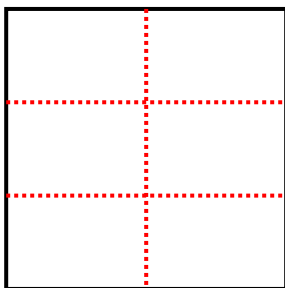
Columns go up and down.

This has 4 rows and 5 columns.  
There are 20 boxes total.

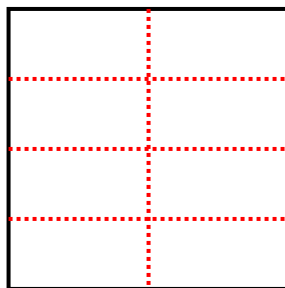


Answers

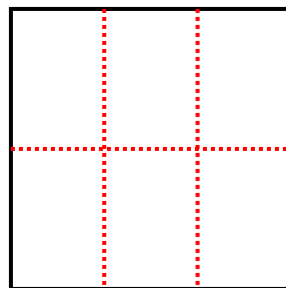
- 1) 3 rows  
2 columns



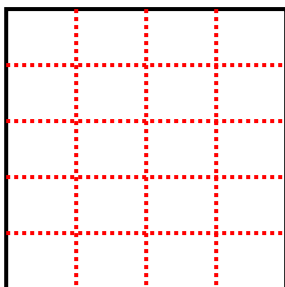
- 2) 4 rows  
2 columns



- 3) 2 rows  
3 columns



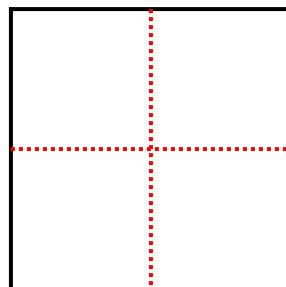
- 4) 5 rows  
4 columns



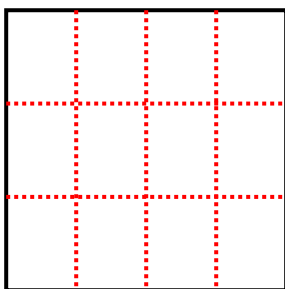
- 5) 5 rows  
2 columns



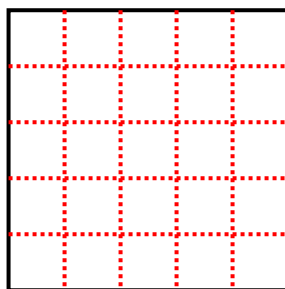
- 6) 2 rows  
2 columns



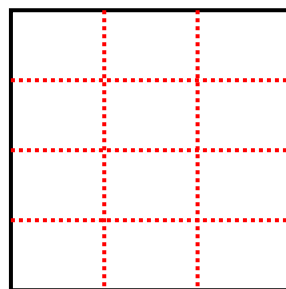
- 7) 3 rows  
4 columns



- 8) 5 rows  
5 columns



- 9) 4 rows  
3 columns



- 1. 6
- 2. 8
- 3. 6
- 4. 20
- 5. 10
- 6. 4
- 7. 12
- 8. 25
- 9. 12



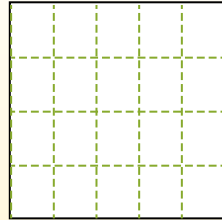
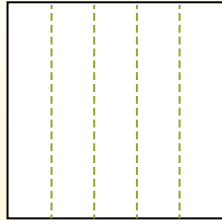
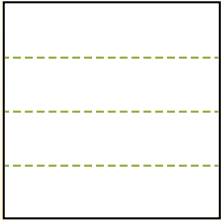
Partition the shape as described and then count to find the number of boxes.

Answers

Rows go left to right.


Columns go up and down.

This has 4 rows and 5 columns.  
There are 20 boxes total.




1. \_\_\_\_\_
2. \_\_\_\_\_
3. \_\_\_\_\_
4. \_\_\_\_\_
5. \_\_\_\_\_
6. \_\_\_\_\_
7. \_\_\_\_\_
8. \_\_\_\_\_
9. \_\_\_\_\_


1) 3 rows  
3 columns




2) 2 rows  
3 columns




3) 4 rows  
2 columns




4) 4 rows  
4 columns




5) 2 rows  
5 columns



6) 2 rows  
4 columns




7) 4 rows  
3 columns



8) 5 rows  
4 columns



9) 5 rows  
3 columns



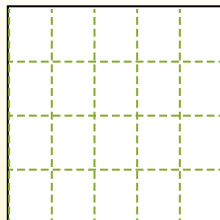
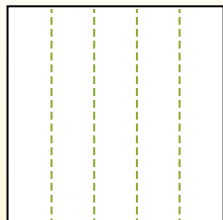
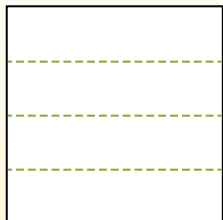


Partition the shape as described and then count to find the number of boxes.

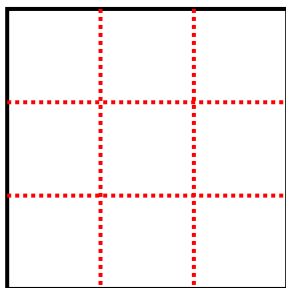
Rows go left to right.

Columns go up and down.

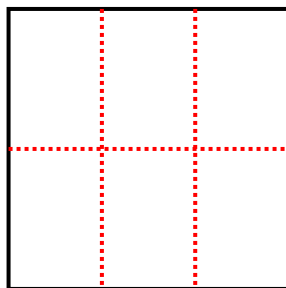
This has 4 rows and 5 columns.  
There are 20 boxes total.



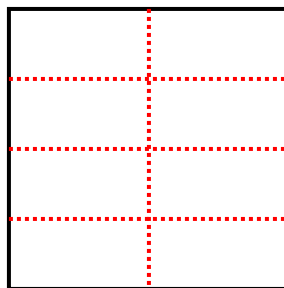
1) 3 rows  
3 columns




2) 2 rows  
3 columns



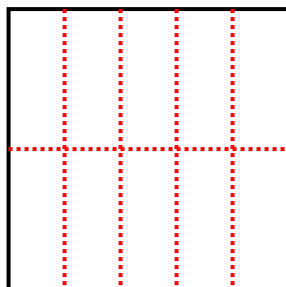
3) 4 rows  
2 columns



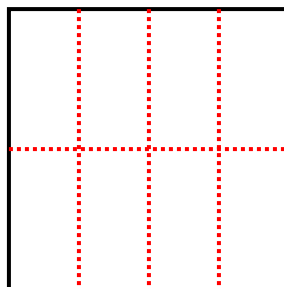
4) 4 rows  
4 columns



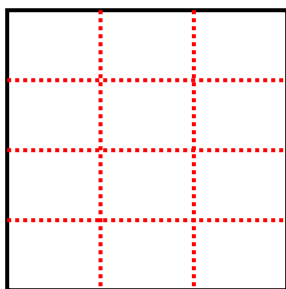
5) 2 rows  
5 columns



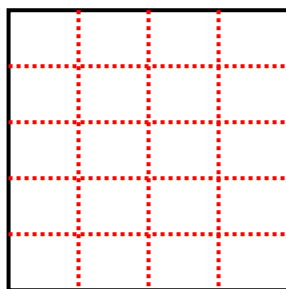
6) 2 rows  
4 columns



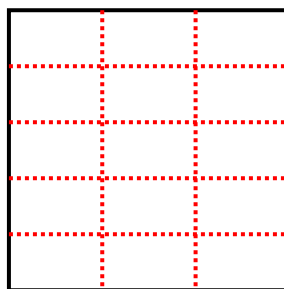
7) 4 rows  
3 columns



8) 5 rows  
4 columns



9) 5 rows  
3 columns



Answers

1. 9

2. 6

3. 8

4. 16

5. 10

6. 8

7. 12

8. 20

9. 15





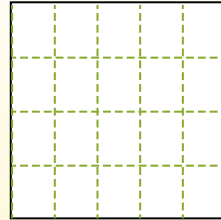
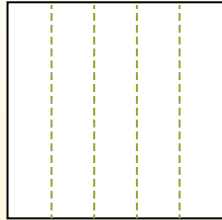
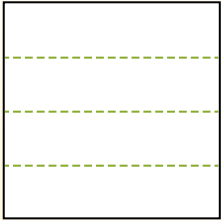
Partition the shape as described and then count to find the number of boxes.

**Answers**

Rows go left to right.


Columns go up and down.

This has 4 rows and 5 columns.  
There are 20 boxes total.




1. \_\_\_\_\_
2. \_\_\_\_\_
3. \_\_\_\_\_
4. \_\_\_\_\_
5. \_\_\_\_\_
6. \_\_\_\_\_
7. \_\_\_\_\_
8. \_\_\_\_\_
9. \_\_\_\_\_


1) 5 rows  
2 columns




2) 3 rows  
3 columns




3) 2 rows  
3 columns




4) 3 rows  
4 columns




5) 2 rows  
2 columns




6) 5 rows  
4 columns




7) 3 rows  
2 columns



8) 5 rows  
3 columns



9) 2 rows  
5 columns



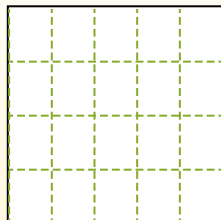
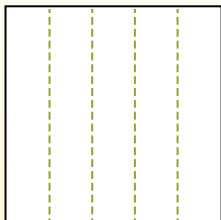
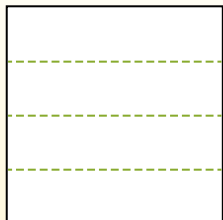


Partition the shape as described and then count to find the number of boxes.

Rows go left to right.

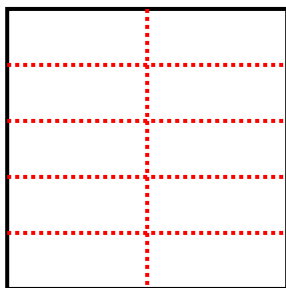
Columns go up and down.

This has 4 rows and 5 columns.  
There are 20 boxes total.

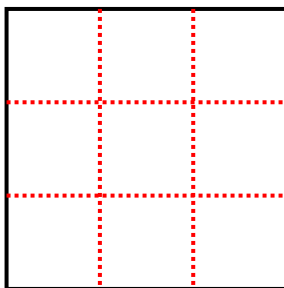


Answers

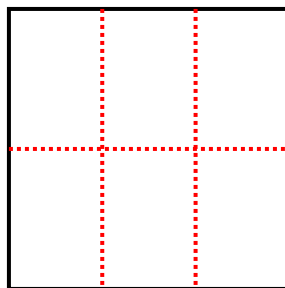
1) 5 rows  
2 columns



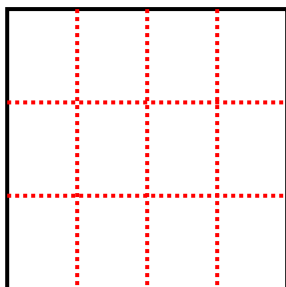
2) 3 rows  
3 columns



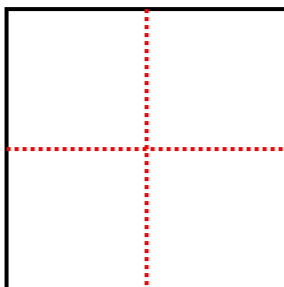
3) 2 rows  
3 columns



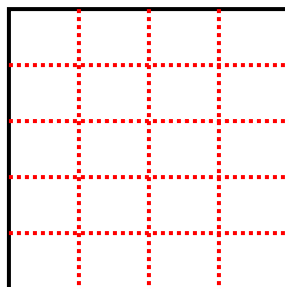
4) 3 rows  
4 columns



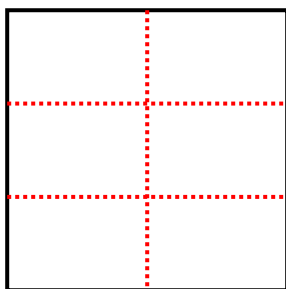
5) 2 rows  
2 columns



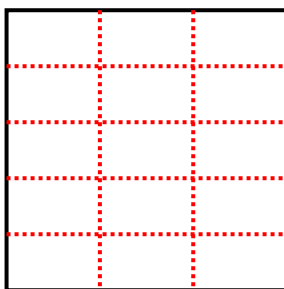
6) 5 rows  
4 columns



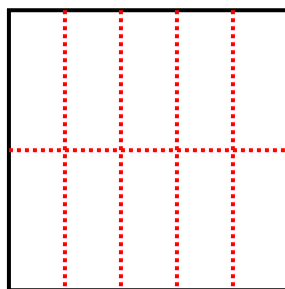
7) 3 rows  
2 columns



8) 5 rows  
3 columns



9) 2 rows  
5 columns



1. 10

2. 9

3. 6

4. 12

5. 4

6. 20

7. 6

8. 15

9. 10



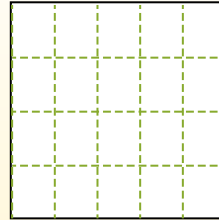
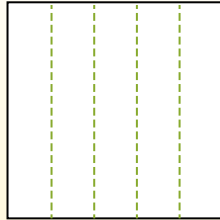
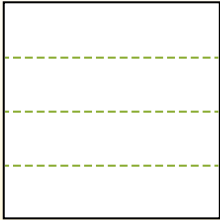
Partition the shape as described and then count to find the number of boxes.

**Answers**

Rows go left to right.


Columns go up and down.

This has 4 rows and 5 columns.  
There are 20 boxes total.



1. \_\_\_\_\_
2. \_\_\_\_\_
3. \_\_\_\_\_
4. \_\_\_\_\_
5. \_\_\_\_\_
6. \_\_\_\_\_
7. \_\_\_\_\_
8. \_\_\_\_\_
9. \_\_\_\_\_


1) 2 rows  
4 columns




2) 5 rows  
2 columns




3) 3 rows  
4 columns




4) 3 rows  
5 columns




5) 2 rows  
3 columns




6) 4 rows  
3 columns




7) 5 rows  
3 columns



8) 3 rows  
2 columns



9) 3 rows  
3 columns



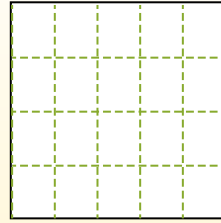
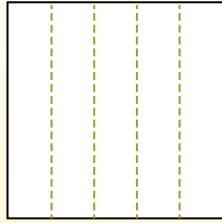
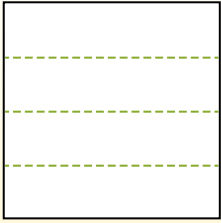


Partition the shape as described and then count to find the number of boxes.

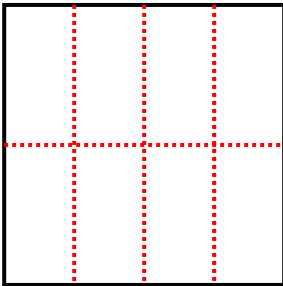
Rows go left to right.

Columns go up and down.

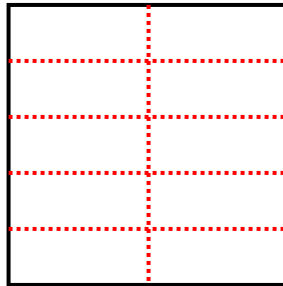
This has 4 rows and 5 columns.  
There are 20 boxes total.



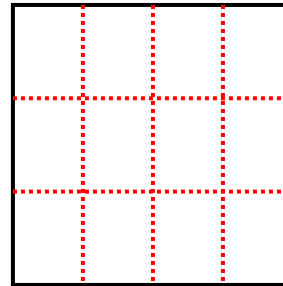
1) 2 rows  
4 columns



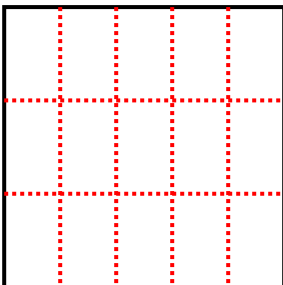
2) 5 rows  
2 columns



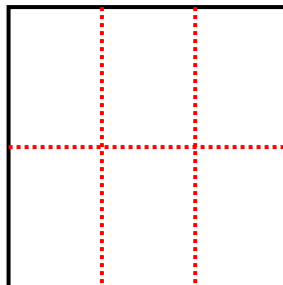
3) 3 rows  
4 columns



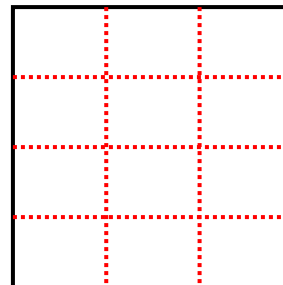
4) 3 rows  
5 columns



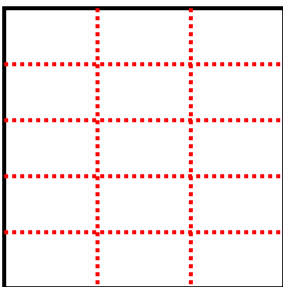
5) 2 rows  
3 columns



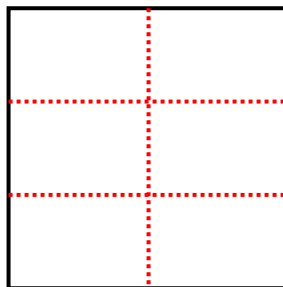
6) 4 rows  
3 columns



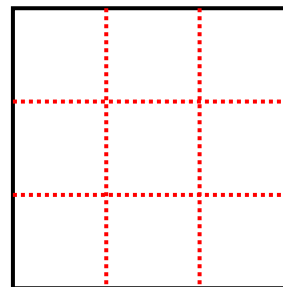
7) 5 rows  
3 columns



8) 3 rows  
2 columns



9) 3 rows  
3 columns



Answers

1. 8

2. 10

3. 12

4. 15

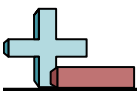
5. 6

6. 12

7. 15

8. 6

9. 9



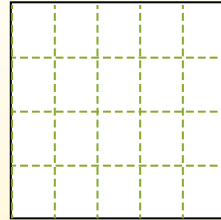
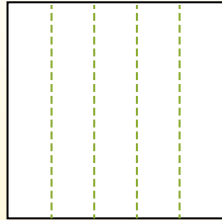
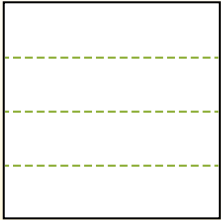
Partition the shape as described and then count to find the number of boxes.

Answers

Rows go left to right.


Columns go up and down.

This has 4 rows and 5 columns.  
There are 20 boxes total.




1. \_\_\_\_\_
2. \_\_\_\_\_
3. \_\_\_\_\_
4. \_\_\_\_\_
5. \_\_\_\_\_
6. \_\_\_\_\_
7. \_\_\_\_\_
8. \_\_\_\_\_
9. \_\_\_\_\_


1) 4 rows  
2 columns




2) 2 rows  
2 columns




3) 5 rows  
3 columns




4) 5 rows  
4 columns




5) 3 rows  
2 columns




6) 4 rows  
3 columns




7) 5 rows  
2 columns



8) 4 rows  
4 columns



9) 3 rows  
3 columns



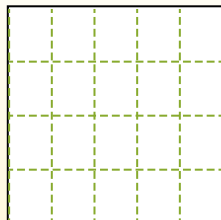
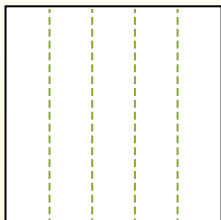
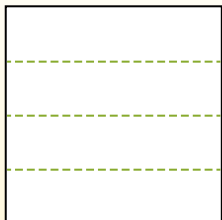


Partition the shape as described and then count to find the number of boxes.

Rows go left to right.

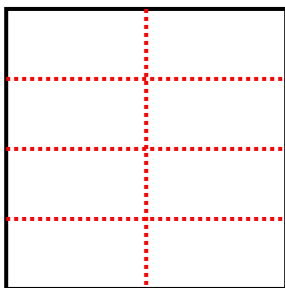
Columns go up and down.

This has 4 rows and 5 columns.  
There are 20 boxes total.

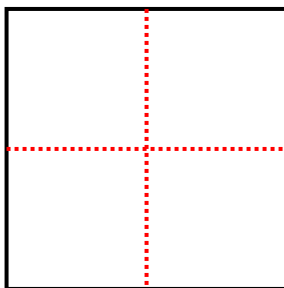


**Answers**

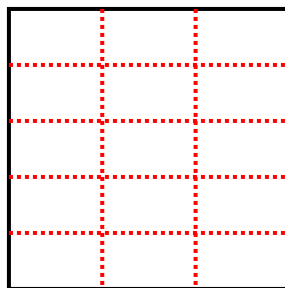
- 1) 4 rows  
2 columns



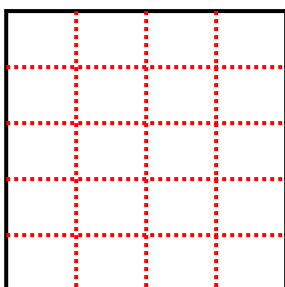
- 2) 2 rows  
2 columns



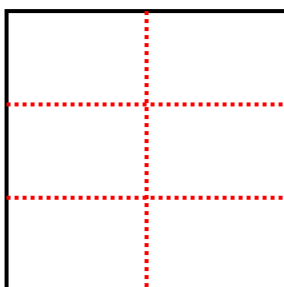
- 3) 5 rows  
3 columns



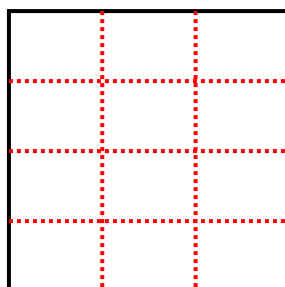
- 4) 5 rows  
4 columns



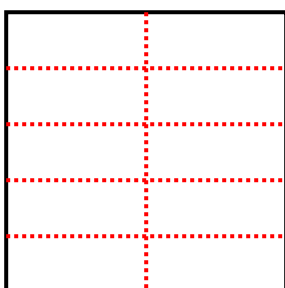
- 5) 3 rows  
2 columns




- 6) 4 rows  
3 columns



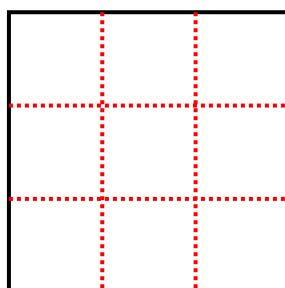
- 7) 5 rows  
2 columns



- 8) 4 rows  
4 columns



- 9) 3 rows  
3 columns



- 1. 8
- 2. 4
- 3. 15
- 4. 20
- 5. 6
- 6. 12
- 7. 10
- 8. 16
- 9. 9



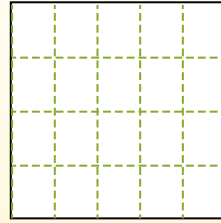
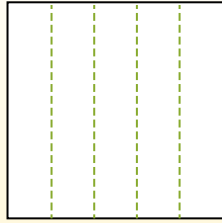
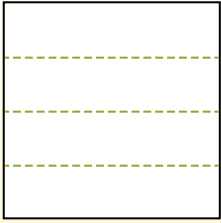
Partition the shape as described and then count to find the number of boxes.

Answers

Rows go left to right.


Columns go up and down.

This has 4 rows and 5 columns.  
There are 20 boxes total.




- 1. \_\_\_\_\_
- 2. \_\_\_\_\_
- 3. \_\_\_\_\_
- 4. \_\_\_\_\_
- 5. \_\_\_\_\_
- 6. \_\_\_\_\_
- 7. \_\_\_\_\_
- 8. \_\_\_\_\_
- 9. \_\_\_\_\_


1) 5 rows  
4 columns




2) 4 rows  
4 columns




3) 2 rows  
3 columns




4) 4 rows  
3 columns




5) 5 rows  
5 columns



6) 3 rows  
5 columns




7) 5 rows  
2 columns



8) 2 rows  
5 columns



9) 3 rows  
3 columns



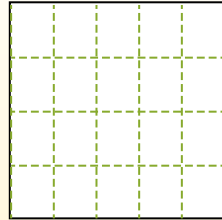
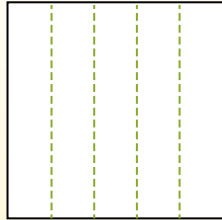
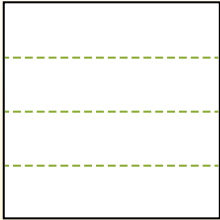


Partition the shape as described and then count to find the number of boxes.

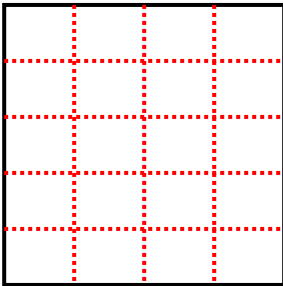
Rows go left to right.

Columns go up and down.

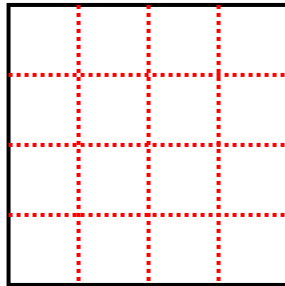
This has 4 rows and 5 columns.  
There are 20 boxes total.



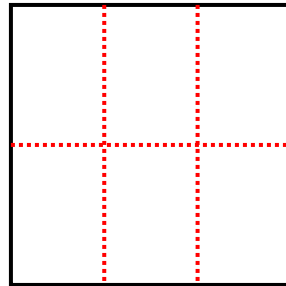
1) 5 rows  
4 columns



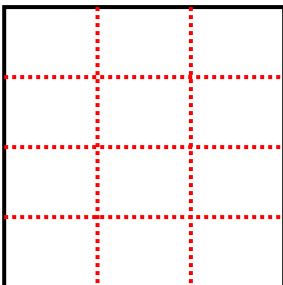
2) 4 rows  
4 columns



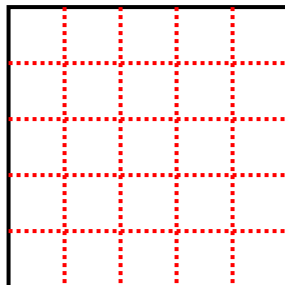
3) 2 rows  
3 columns



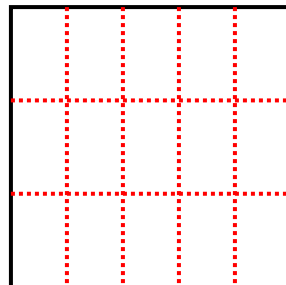
4) 4 rows  
3 columns



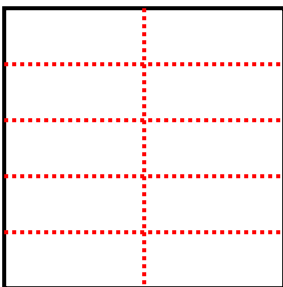
5) 5 rows  
5 columns



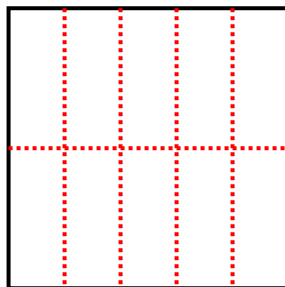
6) 3 rows  
5 columns



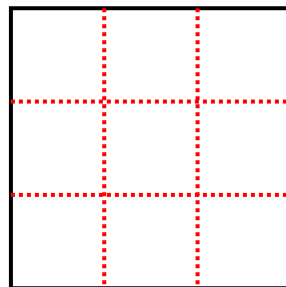
7) 5 rows  
2 columns



8) 2 rows  
5 columns



9) 3 rows  
3 columns



Answers

1. 20

2. 16

3. 6

4. 12

5. 25

6. 15

7. 10

8. 10

9. 9





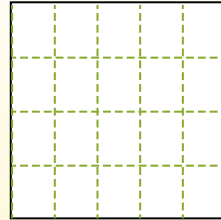
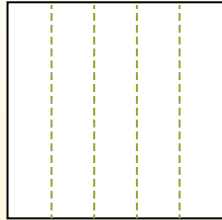
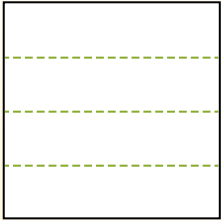
Partition the shape as described and then count to find the number of boxes.

Answers

Rows go left to right.


Columns go up and down.

This has 4 rows and 5 columns.  
There are 20 boxes total.




1. \_\_\_\_\_
2. \_\_\_\_\_
3. \_\_\_\_\_
4. \_\_\_\_\_
5. \_\_\_\_\_
6. \_\_\_\_\_
7. \_\_\_\_\_
8. \_\_\_\_\_
9. \_\_\_\_\_


1) 3 rows  
3 columns




2) 2 rows  
3 columns




3) 4 rows  
3 columns




4) 5 rows  
4 columns




5) 2 rows  
5 columns




6) 3 rows  
2 columns




7) 2 rows  
4 columns



8) 4 rows  
4 columns



9) 5 rows  
3 columns



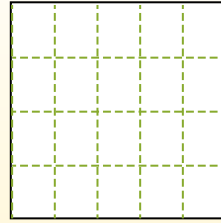
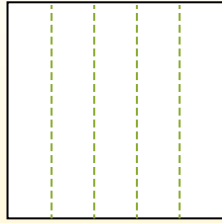
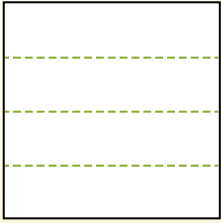


Partition the shape as described and then count to find the number of boxes.

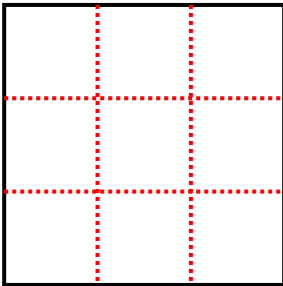
Rows go left to right.

Columns go up and down.

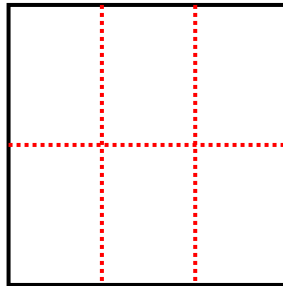
This has 4 rows and 5 columns.  
There are 20 boxes total.



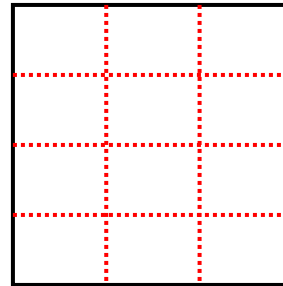
1) 3 rows  
3 columns



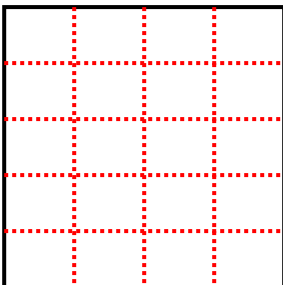
2) 2 rows  
3 columns



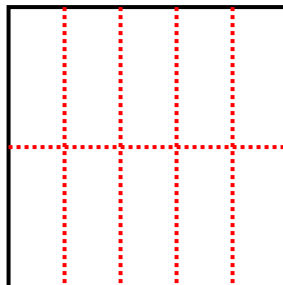
3) 4 rows  
3 columns



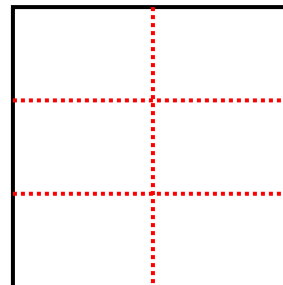
4) 5 rows  
4 columns



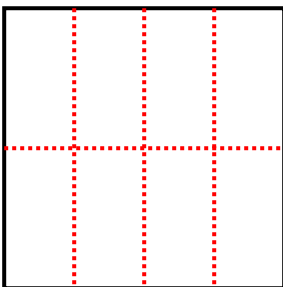
5) 2 rows  
5 columns




6) 3 rows  
2 columns



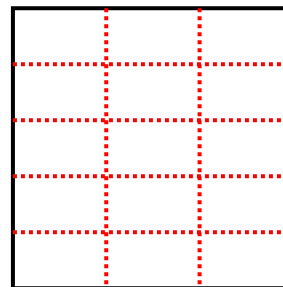
7) 2 rows  
4 columns



8) 4 rows  
4 columns



9) 5 rows  
3 columns



Answers

1. 9

2. 6

3. 12

4. 20

5. 10

6. 6

7. 8

8. 16

9. 15



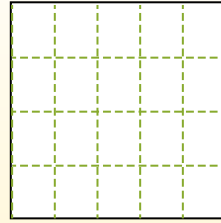
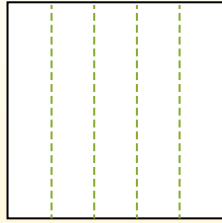
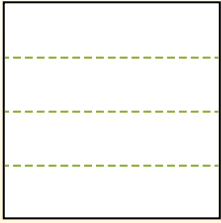
Partition the shape as described and then count to find the number of boxes.

Answers

Rows go left to right.


Columns go up and down.

This has 4 rows and 5 columns.  
There are 20 boxes total.



1. \_\_\_\_\_
2. \_\_\_\_\_
3. \_\_\_\_\_
4. \_\_\_\_\_
5. \_\_\_\_\_
6. \_\_\_\_\_
7. \_\_\_\_\_
8. \_\_\_\_\_
9. \_\_\_\_\_


1) 2 rows  
5 columns




2) 3 rows  
5 columns




3) 5 rows  
5 columns




4) 4 rows  
3 columns




5) 5 rows  
3 columns




6) 2 rows  
3 columns




7) 5 rows  
4 columns



8) 2 rows  
2 columns



9) 4 rows  
4 columns



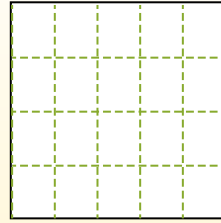
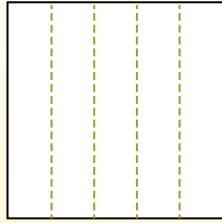
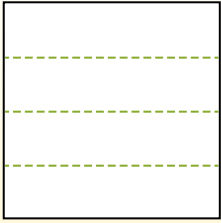


Partition the shape as described and then count to find the number of boxes.

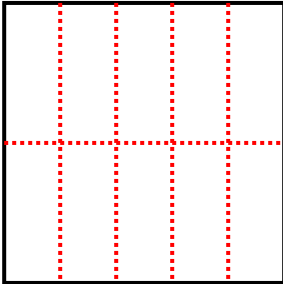
Rows go left to right.

Columns go up and down.

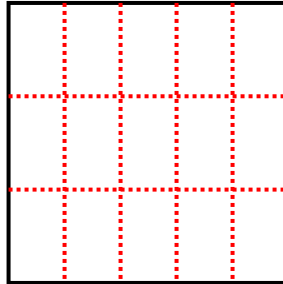
This has 4 rows and 5 columns.  
There are 20 boxes total.



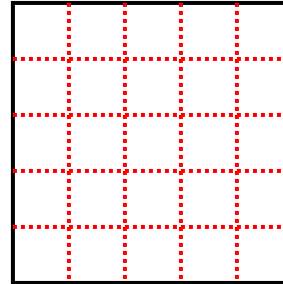
1) 2 rows  
5 columns



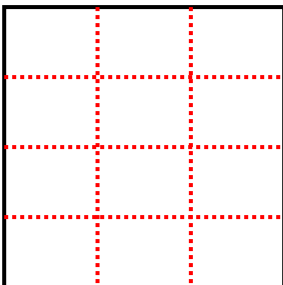
2) 3 rows  
5 columns



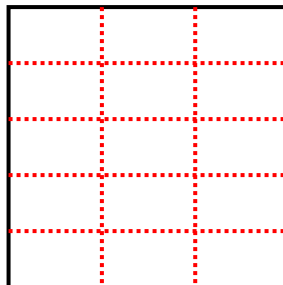
3) 5 rows  
5 columns



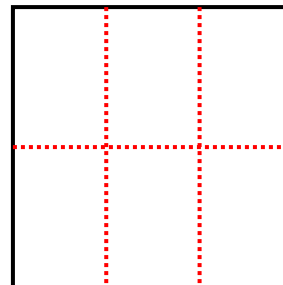
4) 4 rows  
3 columns



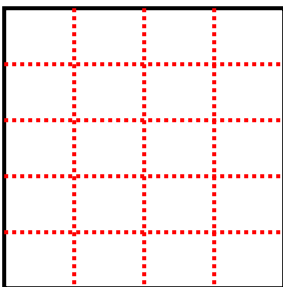
5) 5 rows  
3 columns



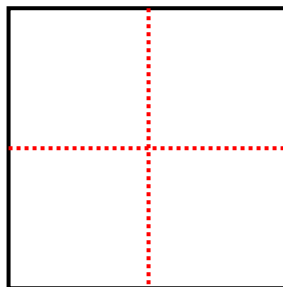
6) 2 rows  
3 columns



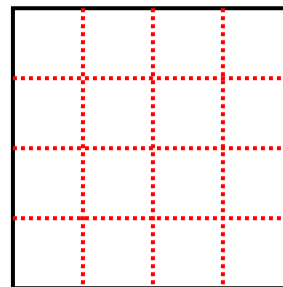
7) 5 rows  
4 columns



8) 2 rows  
2 columns



9) 4 rows  
4 columns



Answers

1. 10

2. 15

3. 25

4. 12

5. 15

6. 6

7. 20

8. 4

9. 16