





Use the array provided to solve each problem.


1)  $43 \times 30 =$




2)  $32 \times 30 =$




3)  $20 \times 23 =$




4)  $25 \times 20 =$



5)  $20 \times 24 =$



6)  $22 \times 20 =$



Answers

1. \_\_\_\_\_

2. \_\_\_\_\_

3. \_\_\_\_\_

4. \_\_\_\_\_

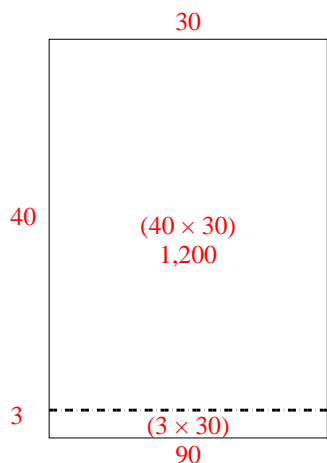
5. \_\_\_\_\_

6. \_\_\_\_\_

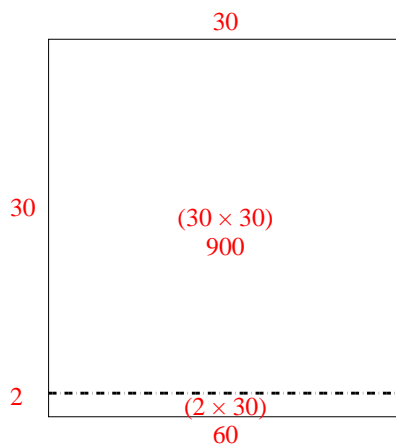


Use the array provided to solve each problem.

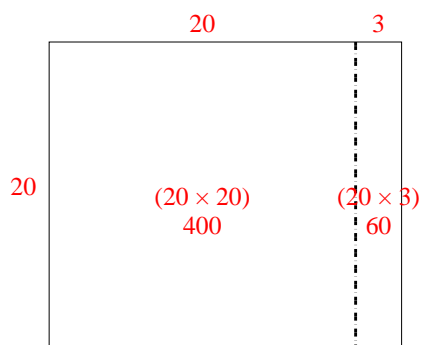
1)  $43 \times 30 =$



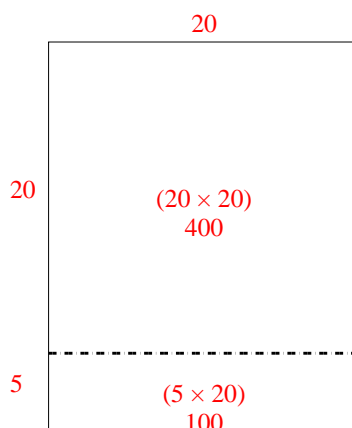
2)  $32 \times 30 =$



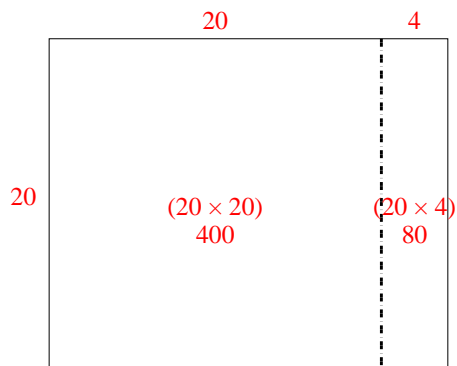
3)  $20 \times 23 =$



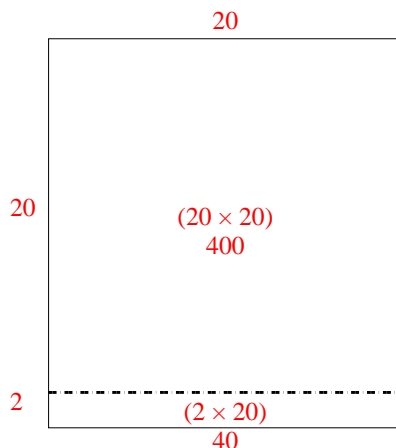
4)  $25 \times 20 =$



5)  $20 \times 24 =$



6)  $22 \times 20 =$



Answers

1. 1,290

2. 960

3. 460

4. 500

5. 480

6. 440