





Use the array provided to solve each problem.


1) $43 \times 28 =$




2) $43 \times 46 =$




3) $44 \times 46 =$




4) $44 \times 52 =$



5) $48 \times 45 =$



6) $37 \times 23 =$



Answers

1. _____

2. _____

3. _____

4. _____

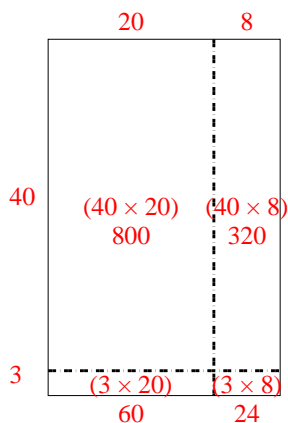
5. _____

6. _____

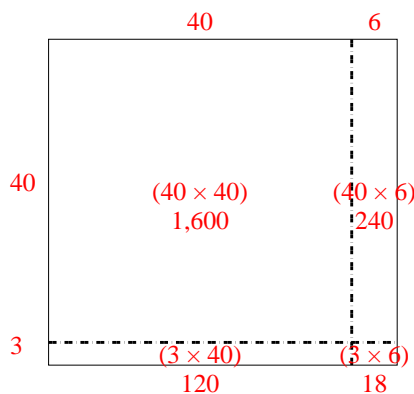


Use the array provided to solve each problem.

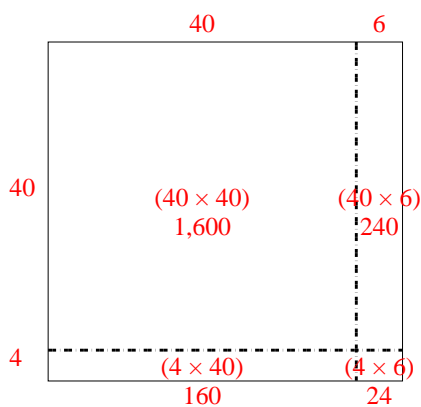
1) $43 \times 28 =$



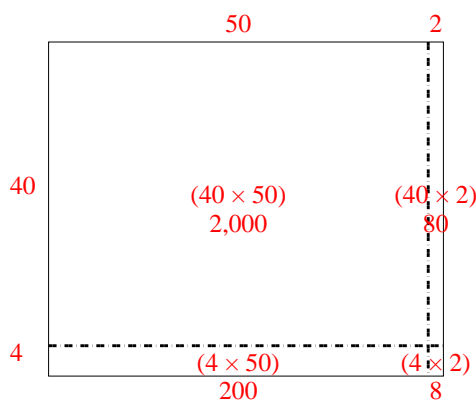
2) $43 \times 46 =$



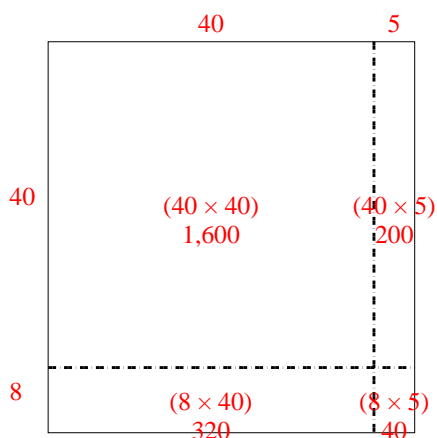
3) $44 \times 46 =$



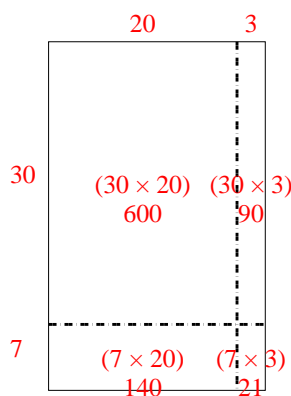
4) $44 \times 52 =$



5) $48 \times 45 =$



6) $37 \times 23 =$



Answers

1. **1,204**

2. **1,978**

3. **2,024**

4. **2,288**

5. **2,160**

6. **851**