





Use the array provided to solve each problem.


1)  $20 \times 25 =$




2)  $12 \times 10 =$




3)  $14 \times 10 =$




4)  $10 \times 12 =$



5)  $15 \times 10 =$



6)  $10 \times 14 =$



Answers

1. \_\_\_\_\_

2. \_\_\_\_\_

3. \_\_\_\_\_

4. \_\_\_\_\_

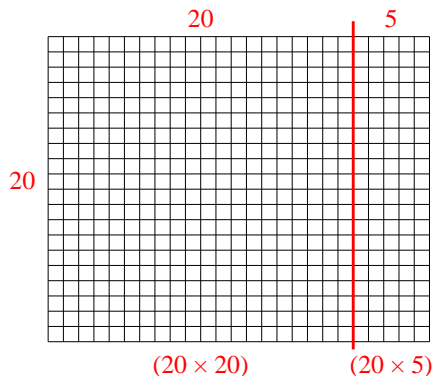
5. \_\_\_\_\_

6. \_\_\_\_\_

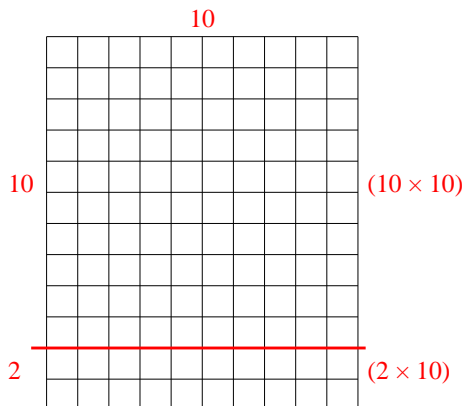


Use the array provided to solve each problem.

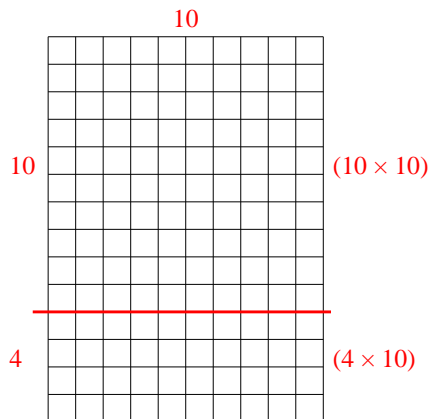
1)  $20 \times 25 =$



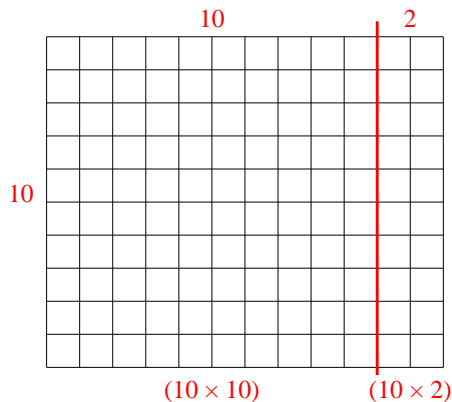
2)  $12 \times 10 =$



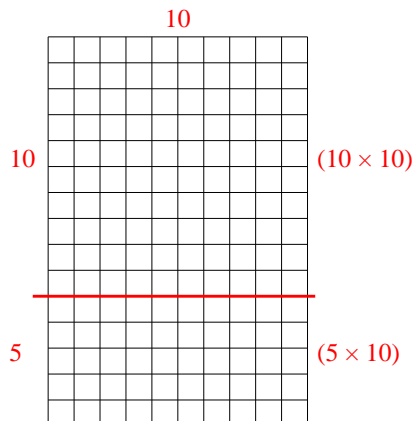
3)  $14 \times 10 =$



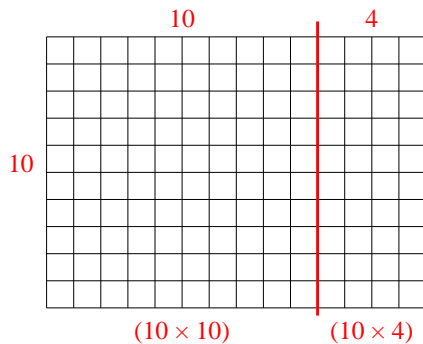
4)  $10 \times 12 =$



5)  $15 \times 10 =$



6)  $10 \times 14 =$



Answers

1. 500

2. 120

3. 140

4. 120

5. 150

6. 140