





Use the array provided to solve each problem.


1)  $29 \times 20 =$




2)  $18 \times 10 =$




3)  $11 \times 10 =$




4)  $17 \times 10 =$



5)  $10 \times 18 =$



6)  $10 \times 11 =$



Answers

1. \_\_\_\_\_

2. \_\_\_\_\_

3. \_\_\_\_\_

4. \_\_\_\_\_

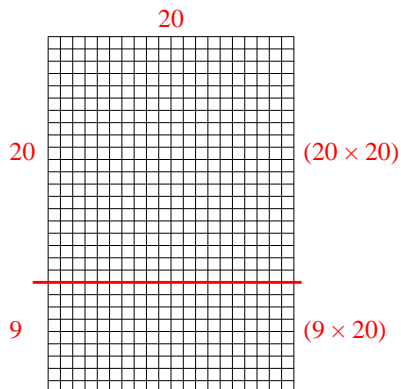
5. \_\_\_\_\_

6. \_\_\_\_\_

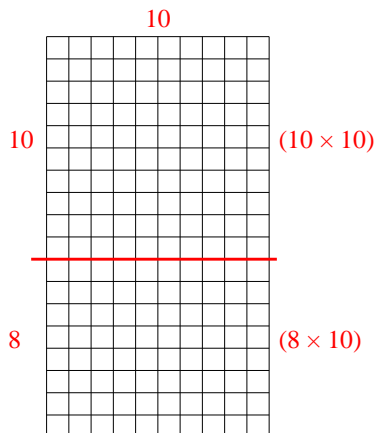


Use the array provided to solve each problem.

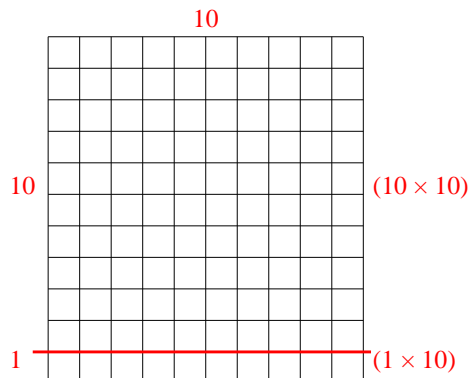
1)  $29 \times 20 =$



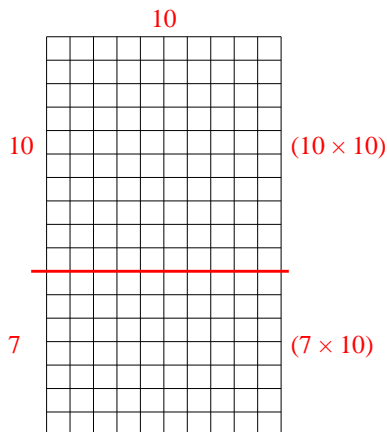
2)  $18 \times 10 =$



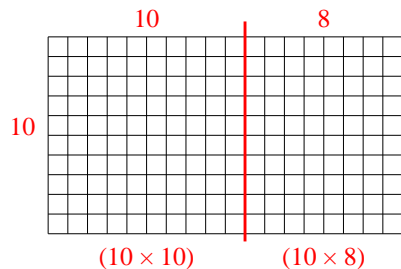
3)  $11 \times 10 =$



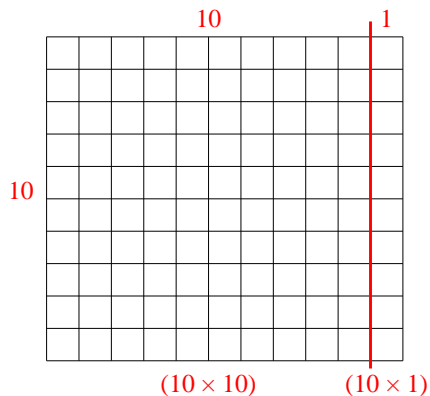
4)  $17 \times 10 =$



5)  $10 \times 18 =$



6)  $10 \times 11 =$



Answers

1. **580**

2. **180**

3. **110**

4. **170**

5. **180**

6. **110**