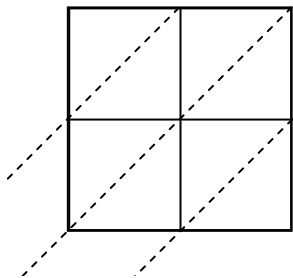


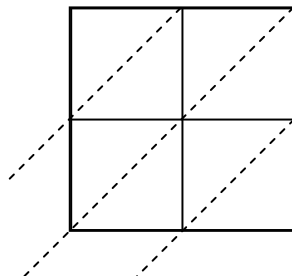


Use lattice multiplication to solve each problem.

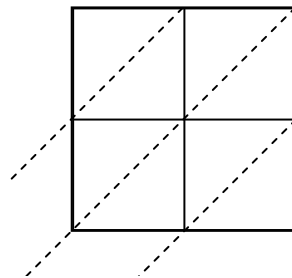
1)  $99 \times 31 =$



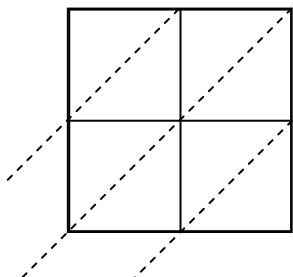
2)  $93 \times 58 =$



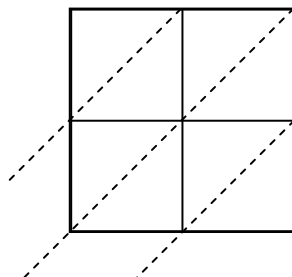
3)  $46 \times 16 =$



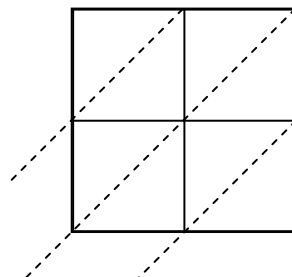
4)  $74 \times 35 =$



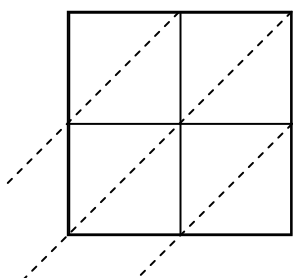
5)  $96 \times 28 =$



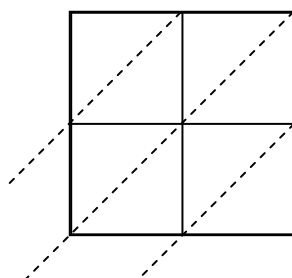
6)  $30 \times 84 =$



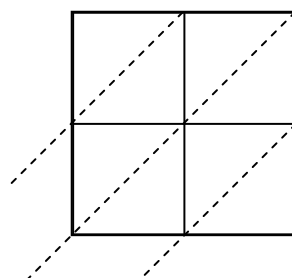
7)  $55 \times 37 =$



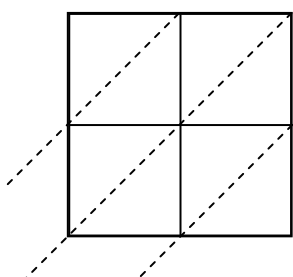
8)  $43 \times 91 =$



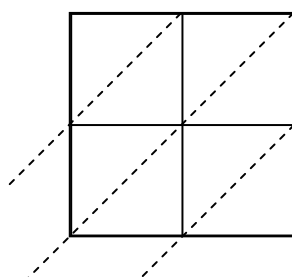
9)  $78 \times 20 =$



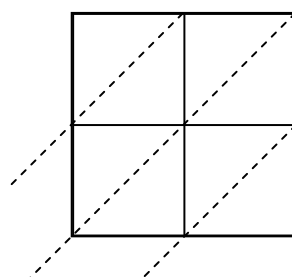
10)  $84 \times 10 =$



11)  $61 \times 10 =$



12)  $47 \times 15 =$



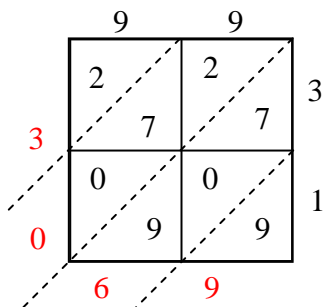
Answers

1. \_\_\_\_\_
2. \_\_\_\_\_
3. \_\_\_\_\_
4. \_\_\_\_\_
5. \_\_\_\_\_
6. \_\_\_\_\_
7. \_\_\_\_\_
8. \_\_\_\_\_
9. \_\_\_\_\_
10. \_\_\_\_\_
11. \_\_\_\_\_
12. \_\_\_\_\_

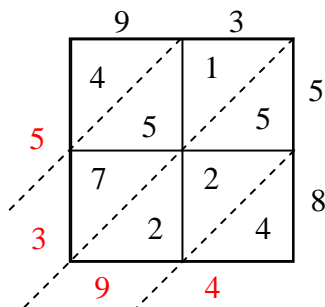


Use lattice multiplication to solve each problem.

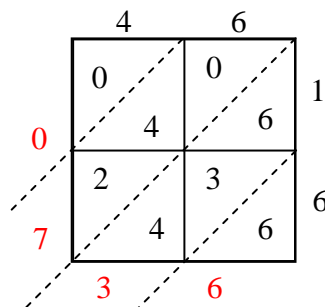
1)  $99 \times 31 =$



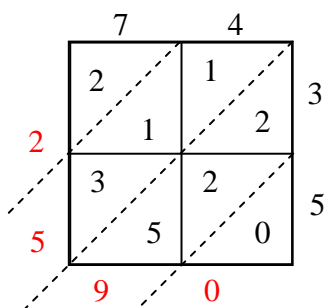
2)  $93 \times 58 =$



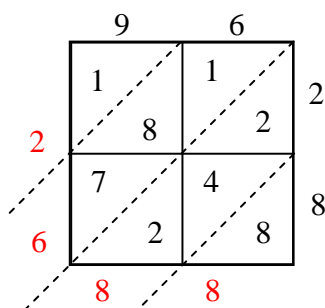
3)  $46 \times 16 =$



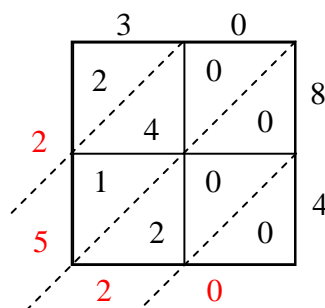
4)  $74 \times 35 =$



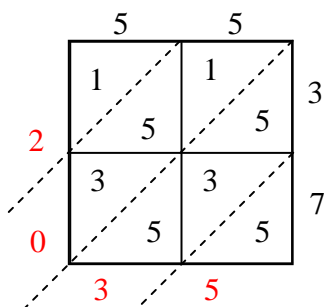
5)  $96 \times 28 =$



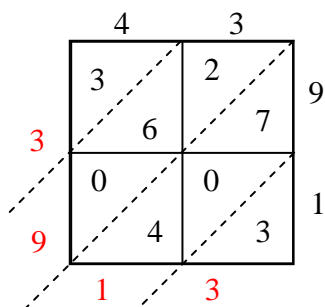
6)  $30 \times 84 =$



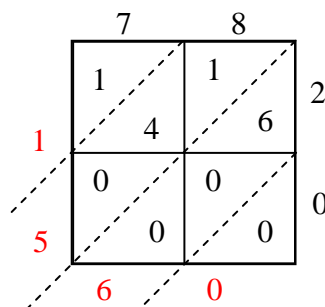
7)  $55 \times 37 =$



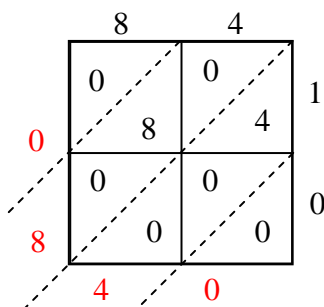
8)  $43 \times 91 =$



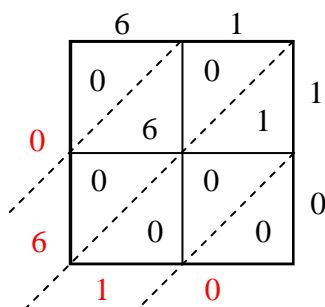
9)  $78 \times 20 =$



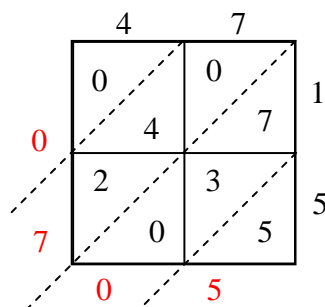
10)  $84 \times 10 =$



11)  $61 \times 10 =$



12)  $47 \times 15 =$



Answers

1. **3,069**

2. **5,394**

3. **736**

4. **2,590**

5. **2,688**

6. **2,520**

7. **2,035**

8. **3,913**

9. **1,560**

10. **840**

11. **610**

12. **705**