



Solve each problem.

Answers

- 1) Gwen spent \$6.92 on a movie ticket. She gave the cashier the money shown. How much change should she get back?



1. \_\_\_\_\_

2. \_\_\_\_\_

3. \_\_\_\_\_

- 2) Victor spent \$8.05 buying some new toys. He bought them using the money shown. How much change should he get back?




4. \_\_\_\_\_

5. \_\_\_\_\_

6. \_\_\_\_\_


- 3) At the fair Janet spent \$17.24 buying fair food. She gave the cashier the money shown. How much change should she get back?



- 4) George spent \$17.07 on candy at the mall. He gave the cashier the money shown. How much change should he get back?



- 5) Carol bought a new board game for \$12.24. She gave the cashier the money shown. How much change should she get back?



- 6) Edward bought \$12.97 worth of groceries. He gave the cashier the money shown. How much change should he get back?





Solve each problem.

- 1) Gwen spent \$6.92 on a movie ticket. She gave the cashier the money shown. How much change should she get back?




| <u>Answers</u> |                |
|----------------|----------------|
| 1.             | <b>\$14.08</b> |
| 2.             | <b>\$2.05</b>  |
| 3.             | <b>\$0.10</b>  |
| 4.             | <b>\$2.93</b>  |
| 5.             | <b>\$0.10</b>  |
| 6.             | <b>\$7.03</b>  |

- 2) Victor spent \$8.05 buying some new toys. He bought them using the money shown. How much change should he get back?




- 3) At the fair Janet spent \$17.24 buying fair food. She gave the cashier the money shown. How much change should she get back?



- 4) George spent \$17.07 on candy at the mall. He gave the cashier the money shown. How much change should he get back?



- 5) Carol bought a new board game for \$12.24. She gave the cashier the money shown. How much change should she get back?



- 6) Edward bought \$12.97 worth of groceries. He gave the cashier the money shown. How much change should he get back?

